




Solve each problem.


**Answers**

1) Which letter best shows -17?



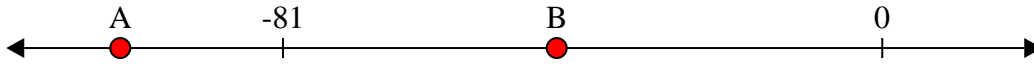
1. \_\_\_\_\_

2) Which letter best shows -16?




2. \_\_\_\_\_

3) Which letter best shows -103?




3. \_\_\_\_\_

4) Which letter best shows -107?




4. \_\_\_\_\_

5) Which letter best shows -23?




5. \_\_\_\_\_

6) Which letter best shows -31?




6. \_\_\_\_\_

7) Which letter best shows -98?




7. \_\_\_\_\_

8) Which letter best shows -34?



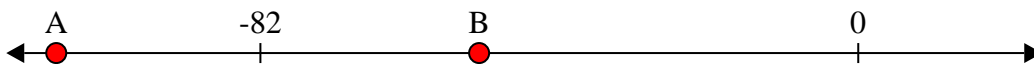
8. \_\_\_\_\_

9) Which letter best shows -111?



9. \_\_\_\_\_

10) Which letter best shows -110?




10. \_\_\_\_\_

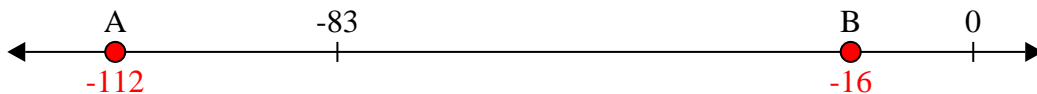


Solve each problem.

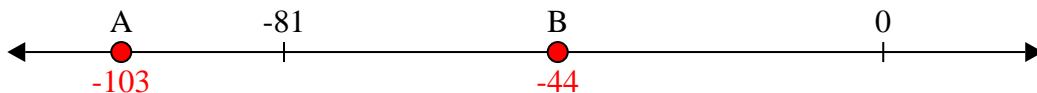
1) Which letter best shows -17?



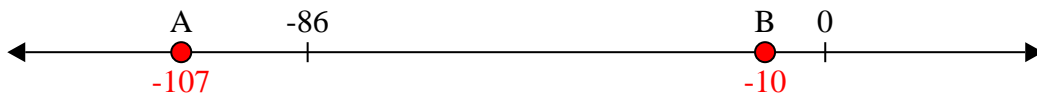
2) Which letter best shows -16?




3) Which letter best shows -103?




4) Which letter best shows -107?




5) Which letter best shows -23?




6) Which letter best shows -31?




7) Which letter best shows -98?



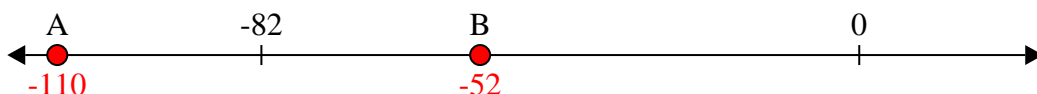
8) Which letter best shows -34?



9) Which letter best shows -111?



10) Which letter best shows -110?



**Answers**

1. **B**

2. **B**

3. **A**

4. **A**

5. **B**

6. **B**

7. **A**

8. **B**

9. **A**

10. **A**