



Use the numberlines to show each expression and solve.

Ex) Start at -2 and add -8



Ex. $-2 + -8 = -10$

1) Start at 8 and add -18



1. _____

2) Start at 4 and add -11



2. _____

3) Start at -5 and add -5



3. _____

4) Start at -8 and add 5



4. _____

5) Start at -6 and add 3



5. _____

6) Start at -1 and add -7



6. _____

7) Start at -2 and add -6



7. _____

8) Start at -3 and add 12



8. _____

9) Start at -1 and add 11



9. _____

10) Start at 2 and add -9



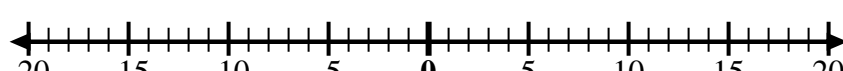
10. _____

11) Start at -3 and add 13



11. _____

12) Start at 10 and add -12



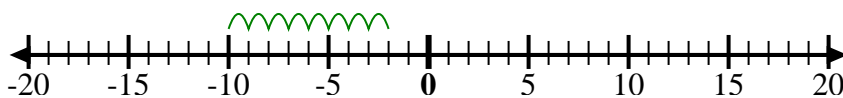
12. _____

Answers



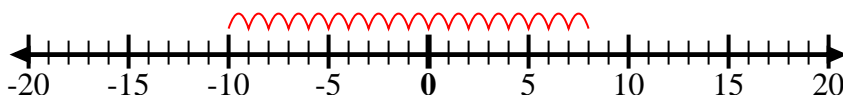
Use the numberlines to show each expression and solve.

Ex) Start at -2 and add -8



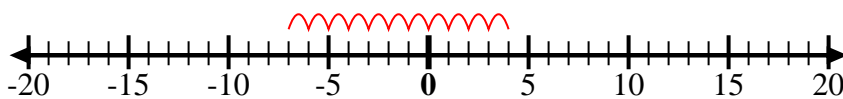
Ex. $-2 + -8 = -10$

1) Start at 8 and add -18



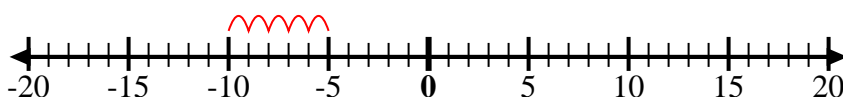
1. $8 + -18 = -10$

2) Start at 4 and add -11



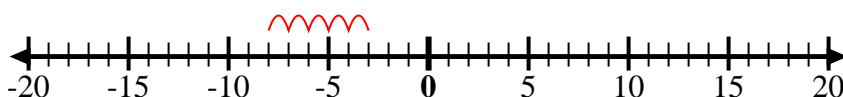
2. $4 + -11 = -7$

3) Start at -5 and add -5



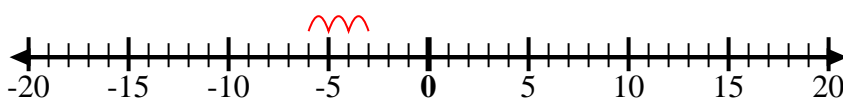
3. $-5 + -5 = -10$

4) Start at -8 and add 5



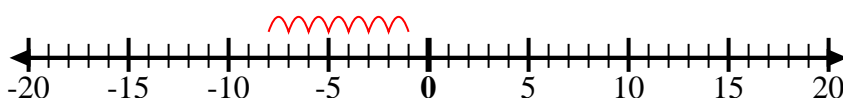
4. $-8 + 5 = -3$

5) Start at -6 and add 3



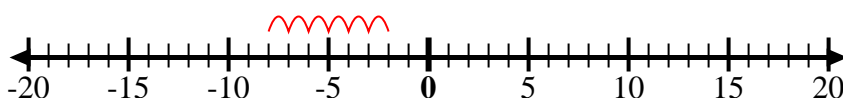
5. $-6 + 3 = -3$

6) Start at -1 and add -7



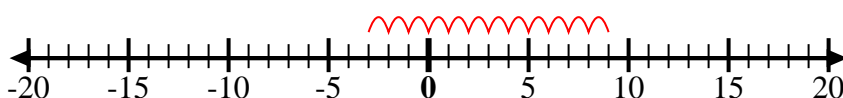
6. $-1 + -7 = -8$

7) Start at -2 and add -6



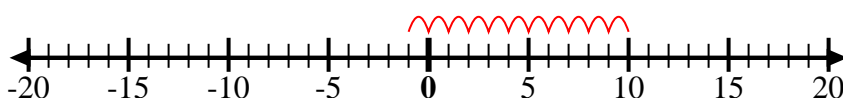
7. $-2 + -6 = -8$

8) Start at -3 and add 12



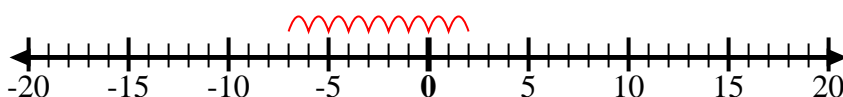
8. $-3 + 12 = 9$

9) Start at -1 and add 11



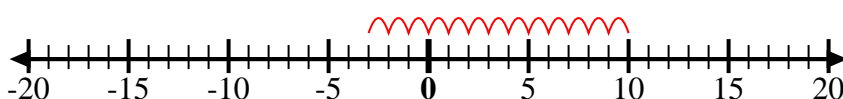
9. $-1 + 11 = 10$

10) Start at 2 and add -9



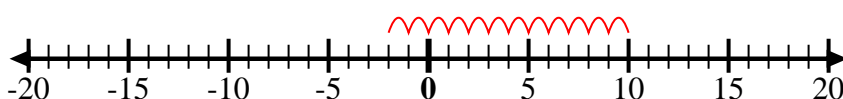
10. $2 + -9 = -7$

11) Start at -3 and add 13



11. $-3 + 13 = 10$

12) Start at 10 and add -12



12. $10 + -12 = -2$

Answers