



Use the numberlines to show each expression and solve.

Ex) Start at 9 and add -4



Ex.  $9 + -4 = 5$

1) Start at 5 and add -11



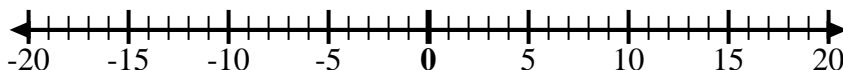
1. \_\_\_\_\_

2) Start at 2 and add -8



2. \_\_\_\_\_

3) Start at -5 and add -4



3. \_\_\_\_\_

4) Start at 0 and add 8



4. \_\_\_\_\_

5) Start at 5 and add -8



5. \_\_\_\_\_

6) Start at -7 and add 15



6. \_\_\_\_\_

7) Start at -9 and add 8



7. \_\_\_\_\_

8) Start at -2 and add -6



8. \_\_\_\_\_

9) Start at -5 and add 5



9. \_\_\_\_\_

10) Start at -1 and add -8



10. \_\_\_\_\_

11) Start at -1 and add 7



11. \_\_\_\_\_

12) Start at -10 and add 14



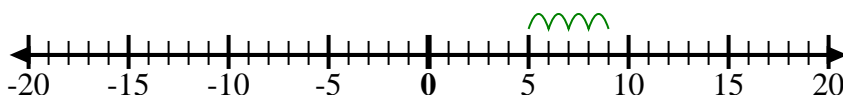
12. \_\_\_\_\_

Answers



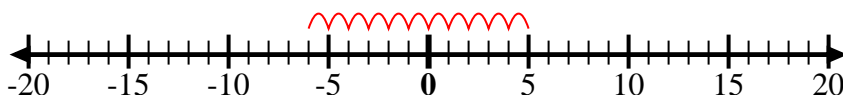
Use the numberlines to show each expression and solve.

Ex) Start at 9 and add -4



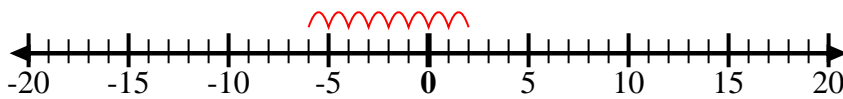
Ex.  $9 + -4 = 5$

1) Start at 5 and add -11



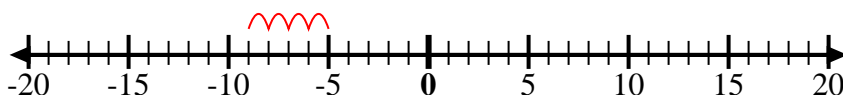
1.  $5 + -11 = -6$

2) Start at 2 and add -8



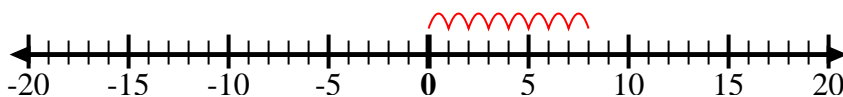
2.  $2 + -8 = -6$

3) Start at -5 and add -4



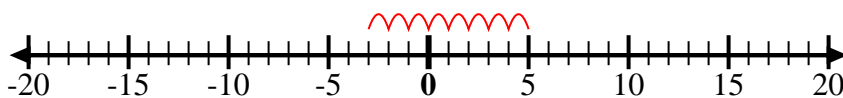
3.  $-5 + -4 = -9$

4) Start at 0 and add 8



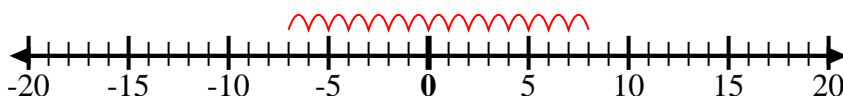
4.  $0 + 8 = 8$

5) Start at 5 and add -8



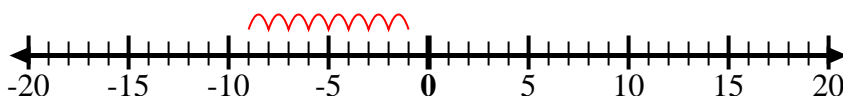
5.  $5 + -8 = -3$

6) Start at -7 and add 15



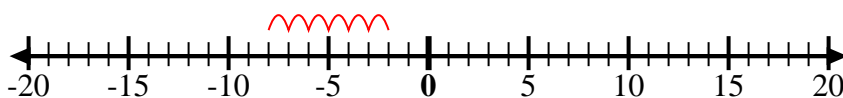
6.  $-7 + 15 = 8$

7) Start at -9 and add 8



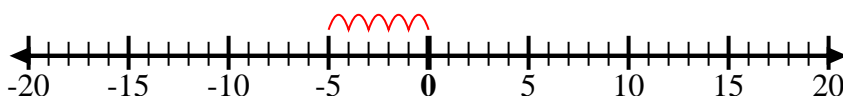
7.  $-9 + 8 = -1$

8) Start at -2 and add -6



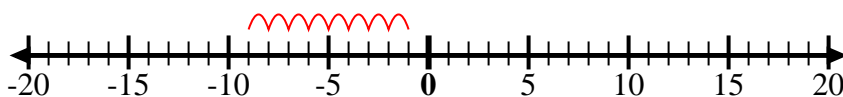
8.  $-2 + -6 = -8$

9) Start at -5 and add 5



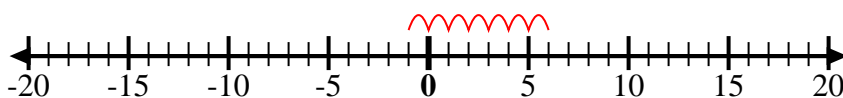
9.  $-5 + 5 = 0$

10) Start at -1 and add -8



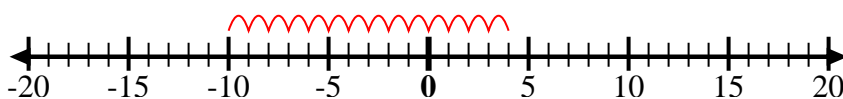
10.  $-1 + -8 = -9$

11) Start at -1 and add 7



11.  $-1 + 7 = 6$

12) Start at -10 and add 14



12.  $-10 + 14 = 4$

Answers