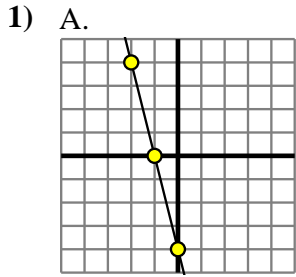


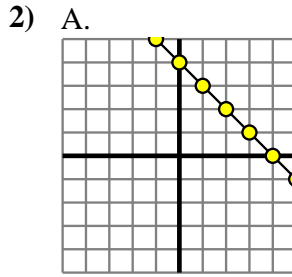


Determine which function has the greater change of rate. If the rate is the same answer with 'same'.

Answers



B.
 $Y=4 \times X - (X+8)$



B.
 $Y=X \times 9$

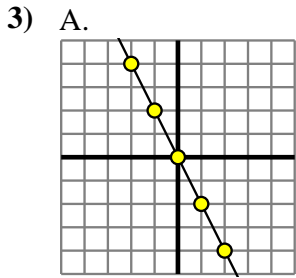
1. _____

2. _____

3. _____

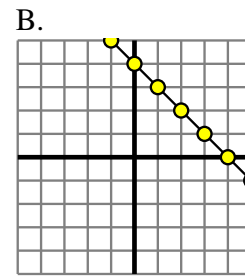
4. _____

5. _____



B.
 $Y=X-3$

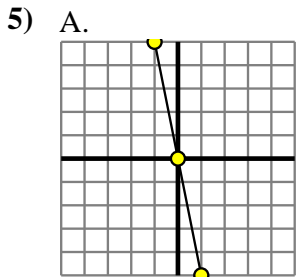
4) A.
 $Y=7 \times X - (X-2)$



6. _____

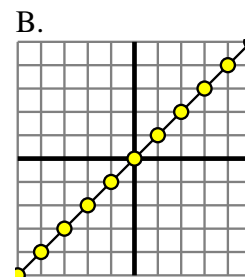
7. _____

8. _____



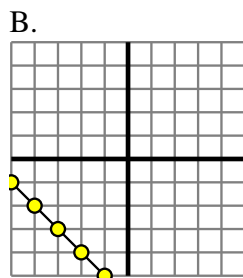
B.
 $Y=5 \times X + (X \times 8)$

6) A.
 $Y=8 \times X - (X-8)$



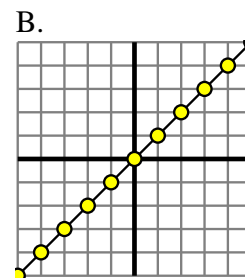
7) A.

X	Y
-6	30
-5	25
-4	20
-3	15
2	-10



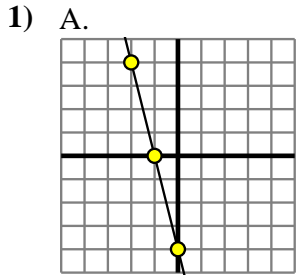
8) A.

X	Y
-10	-59
-4	-29
2	1
7	26
9	36

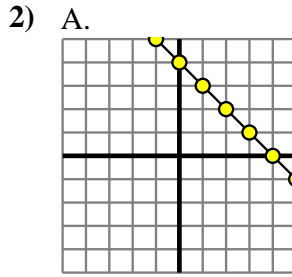




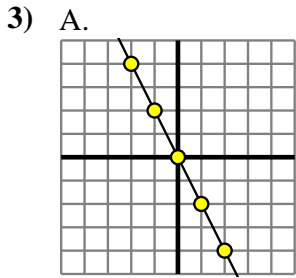
Determine which function has the greater change of rate. If the rate is the same answer with 'same'.



B.
 $Y=4 \times X-(X+8)$

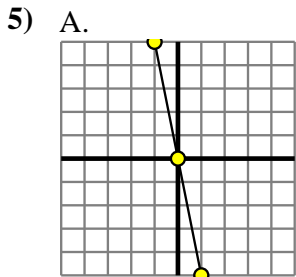
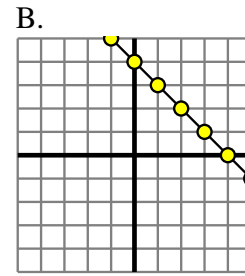


B.
 $Y=X \times 9$



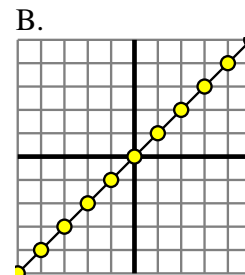
B.
 $Y=X-3$

4) A.
 $Y=7 \times X-(X-2)$



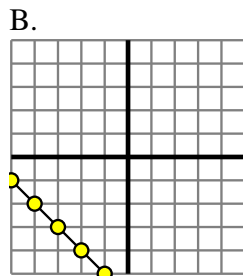
B.
 $Y=5 \times X+(X \times 8)$

6) A.
 $Y=8 \times X-(X-8)$



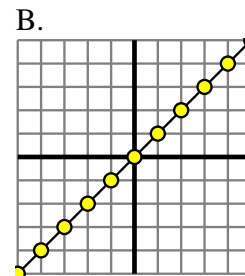
7) A.

X	Y
-6	30
-5	25
-4	20
-3	15
2	-10



8) A.

X	Y
-10	-59
-4	-29
2	1
7	26
9	36



Answers

1. **A**
2. **B**
3. **A**
4. **A**
5. **B**
6. **A**
7. **A**
8. **A**