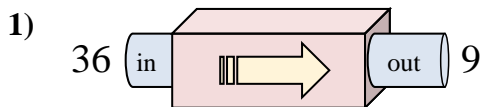


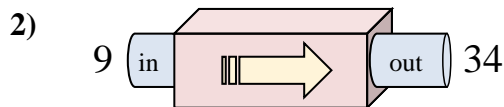


Determine which rule the function machine is using.

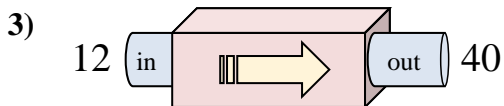
Answers



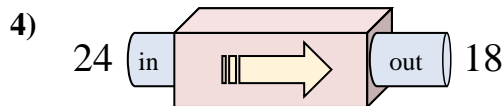
- A. Add 30
- B. Subtract 32
- C. Subtract 31
- D. Subtract 27



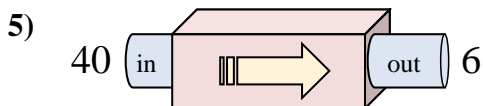
- A. Add 23
- B. Subtract 29
- C. Subtract 21
- D. Add 25



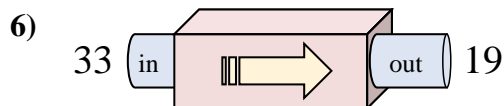
- A. Subtract 30
- B. Add 33
- C. Add 29
- D. Add 28



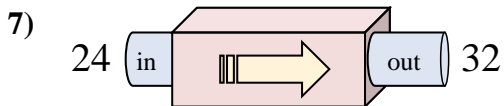
- A. Add 4
- B. Subtract 2
- C. Subtract 6
- D. Subtract 5



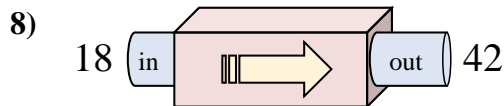
- A. Add 29
- B. Subtract 39
- C. Subtract 34
- D. Add 30



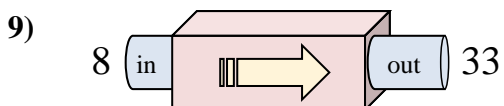
- A. Add 16
- B. Subtract 17
- C. Subtract 14
- D. Subtract 9



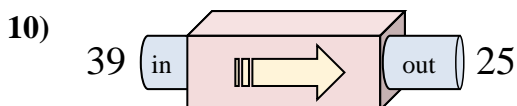
- A. Add 11
- B. Add 8
- C. Subtract 12
- D. Add 12



- A. Add 24
- B. Add 23
- C. Subtract 23
- D. Add 21



- A. Add 25
- B. Subtract 24
- C. Subtract 26
- D. Add 27

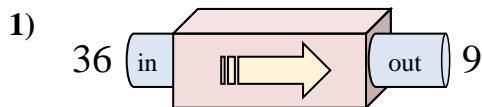


- A. Add 9
- B. Add 14
- C. Subtract 10
- D. Subtract 14

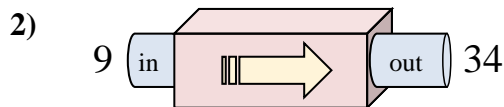
1. _____
2. _____
3. _____
4. _____
5. _____
6. _____
7. _____
8. _____
9. _____
10. _____



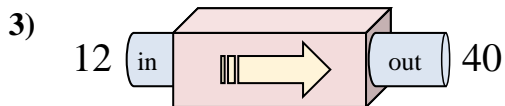
Determine which rule the function machine is using.



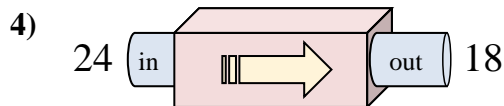
- A. Add 30
- B. Subtract 32
- C. Subtract 31
- D. Subtract 27



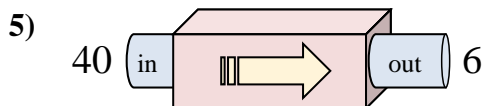
- A. Add 23
- B. Subtract 29
- C. Subtract 21
- D. Add 25



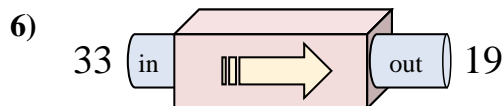
- A. Subtract 30
- B. Add 33
- C. Add 29
- D. Add 28



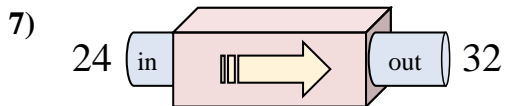
- A. Add 4
- B. Subtract 2
- C. Subtract 6
- D. Subtract 5



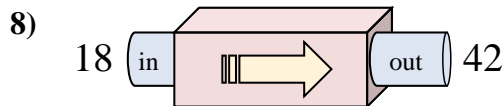
- A. Add 29
- B. Subtract 39
- C. Subtract 34
- D. Add 30



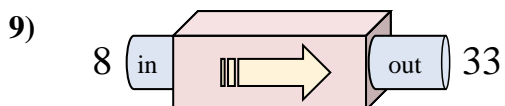
- A. Add 16
- B. Subtract 17
- C. Subtract 14
- D. Subtract 9



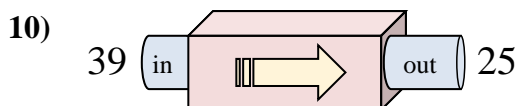
- A. Add 11
- B. Add 8
- C. Subtract 12
- D. Add 12



- A. Add 24
- B. Add 23
- C. Subtract 23
- D. Add 21



- A. Add 25
- B. Subtract 24
- C. Subtract 26
- D. Add 27



- A. Add 9
- B. Add 14
- C. Subtract 10
- D. Subtract 14

Answers

- 1. **D**
- 2. **D**
- 3. **D**
- 4. **C**
- 5. **C**
- 6. **C**
- 7. **B**
- 8. **A**
- 9. **A**
- 10. **D**