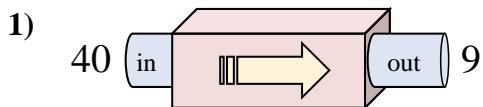


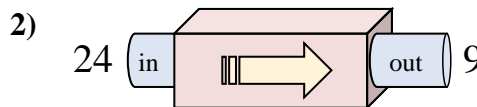


Determine which rule the function machine is using.

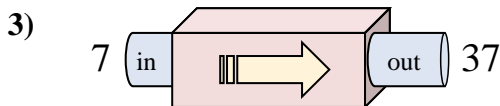
Answers



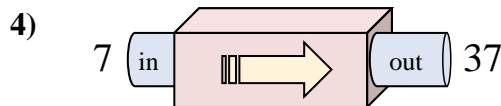
- A. Subtract 31
- B. Subtract 32
- C. Add 29
- D. Subtract 33



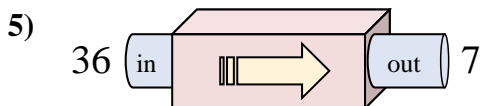
- A. Subtract 10
- B. Subtract 15
- C. Add 15
- D. Subtract 14



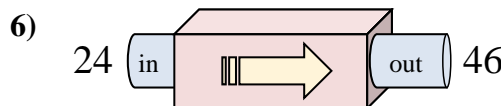
- A. Subtract 32
- B. Add 25
- C. Add 30
- D. Add 33



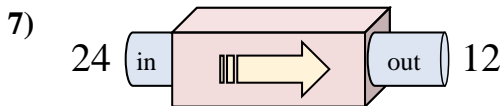
- A. Subtract 25
- B. Add 27
- C. Subtract 35
- D. Add 30



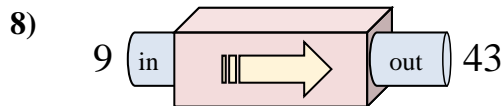
- A. Subtract 29
- B. Add 33
- C. Subtract 33
- D. Subtract 30



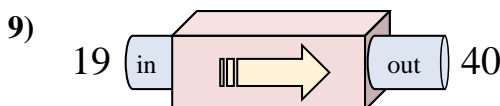
- A. Subtract 17
- B. Add 21
- C. Add 18
- D. Add 22



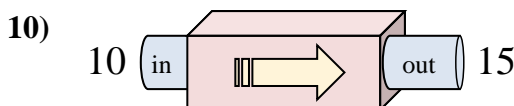
- A. Subtract 13
- B. Add 12
- C. Subtract 11
- D. Subtract 12



- A. Add 34
- B. Add 29
- C. Add 32
- D. Subtract 38



- A. Add 21
- B. Add 20
- C. Add 26
- D. Subtract 24

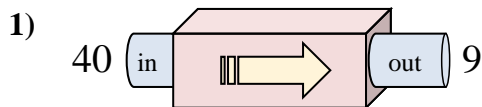


- A. Add 1
- B. Subtract 7
- C. Add 5
- D. Subtract 2

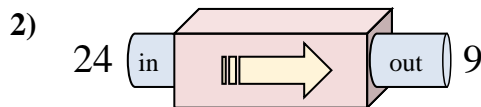
1. _____
2. _____
3. _____
4. _____
5. _____
6. _____
7. _____
8. _____
9. _____
10. _____



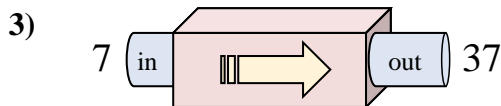
Determine which rule the function machine is using.



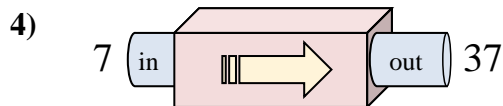
- A. Subtract 31
- B. Subtract 32
- C. Add 29
- D. Subtract 33



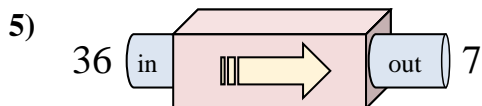
- A. Subtract 10
- B. Subtract 15
- C. Add 15
- D. Subtract 14



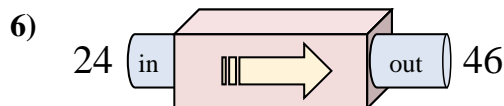
- A. Subtract 32
- B. Add 25
- C. Add 30
- D. Add 33



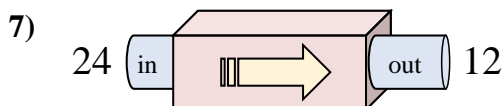
- A. Subtract 25
- B. Add 27
- C. Subtract 35
- D. Add 30



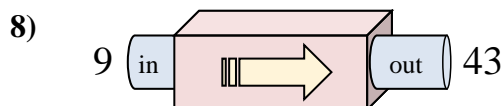
- A. Subtract 29
- B. Add 33
- C. Subtract 33
- D. Subtract 30



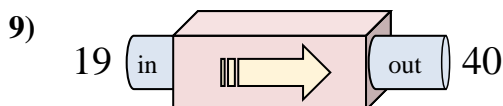
- A. Subtract 17
- B. Add 21
- C. Add 18
- D. Add 22



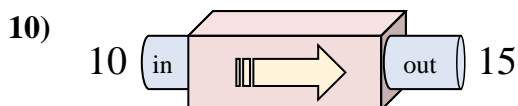
- A. Subtract 13
- B. Add 12
- C. Subtract 11
- D. Subtract 12



- A. Add 34
- B. Add 29
- C. Add 32
- D. Subtract 38



- A. Add 21
- B. Add 20
- C. Add 26
- D. Subtract 24



- A. Add 1
- B. Subtract 7
- C. Add 5
- D. Subtract 2

Answers1. **A**2. **B**3. **C**4. **D**5. **A**6. **D**7. **D**8. **A**9. **A**10. **C**