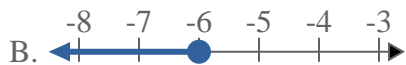
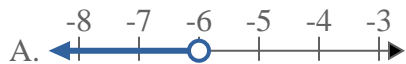




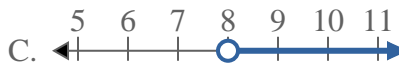
Solve each problem.

**Answers**

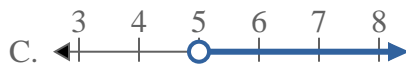
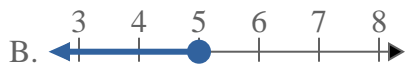
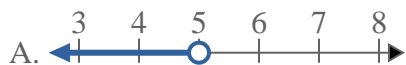
1) Which option best shows  $X < -6$



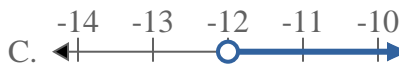
2) Which option best shows  $X < 8$



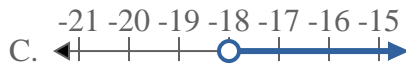
3) Which option best shows  $X \leq 5$



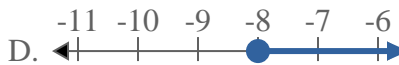
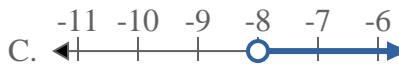
4) Which option best shows  $X \geq -12$



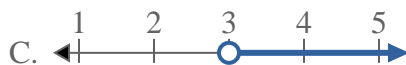
5) Which option best shows  $X \geq -18$



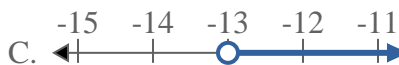
6) Which option best shows  $X \geq -8$



7) Which option best shows  $X < 3$



8) Which option best shows  $X < -13$

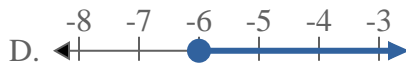
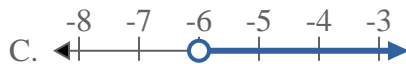
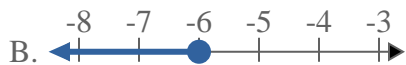
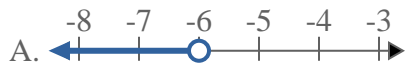


1. \_\_\_\_\_
2. \_\_\_\_\_
3. \_\_\_\_\_
4. \_\_\_\_\_
5. \_\_\_\_\_
6. \_\_\_\_\_
7. \_\_\_\_\_
8. \_\_\_\_\_

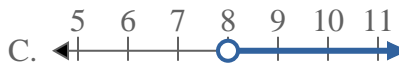


Solve each problem.

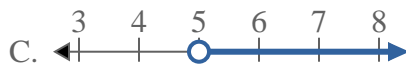
1) Which option best shows  $X < -6$



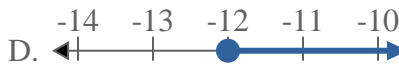
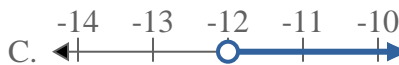
2) Which option best shows  $X < 8$



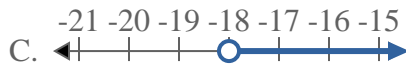
3) Which option best shows  $X \leq 5$



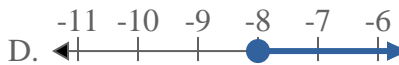
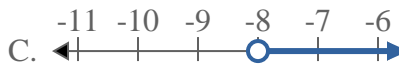
4) Which option best shows  $X \geq -12$



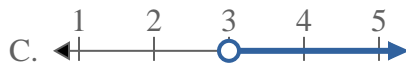
5) Which option best shows  $X \geq -18$



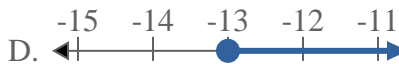
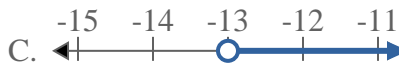
6) Which option best shows  $X \geq -8$



7) Which option best shows  $X < 3$



8) Which option best shows  $X < -13$



**Answers**

1.   **A**  

2.   **A**  

3.   **B**  

4.   **D**  

5.   **D**  

6.   **D**  

7.   **A**  

8.   **A**