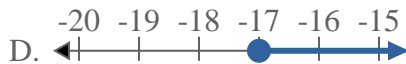
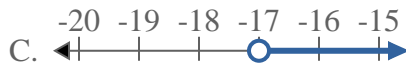




Solve each problem.


1) Which option best shows  $X < -17$



2) Which option best shows  $X \leq 20$



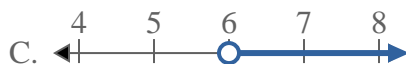
3) Which option best shows  $X \geq 12$



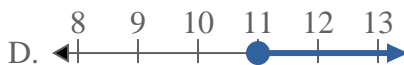
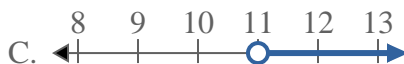
4) Which option best shows  $X \geq -17$



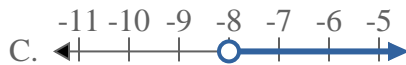
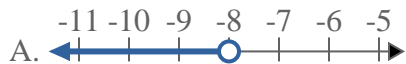
5) Which option best shows  $X \geq 6$



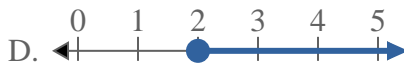
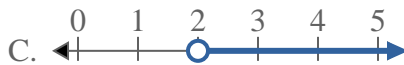
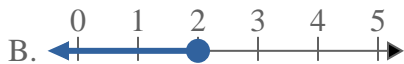
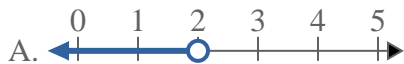
6) Which option best shows  $X \leq 11$



7) Which option best shows  $X \leq -8$



8) Which option best shows  $X > 2$



**Answers**

1. \_\_\_\_\_

2. \_\_\_\_\_

3. \_\_\_\_\_

4. \_\_\_\_\_

5. \_\_\_\_\_

6. \_\_\_\_\_

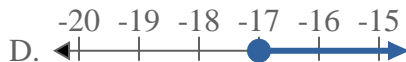
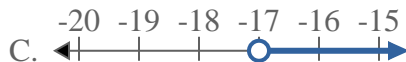
7. \_\_\_\_\_

8. \_\_\_\_\_




Solve each problem.

1) Which option best shows  $X < -17$



2) Which option best shows  $X \leq 20$



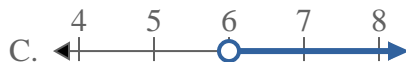
3) Which option best shows  $X \geq 12$



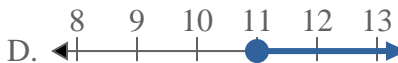
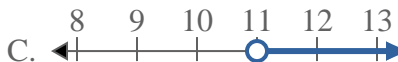
4) Which option best shows  $X \geq -17$



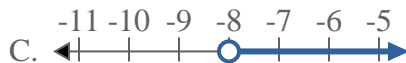
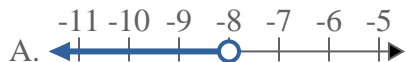
5) Which option best shows  $X \geq 6$



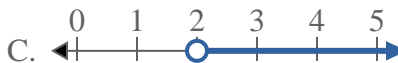
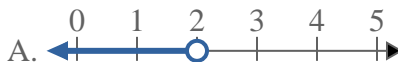
6) Which option best shows  $X \leq 11$



7) Which option best shows  $X \leq -8$



8) Which option best shows  $X > 2$



**Answers**

1.   **A**  

2.   **B**  

3.   **D**  

4.   **D**  

5.   **D**  

6.   **B**  

7.   **B**  

8.   **C**