



Solve each problem.

1) Which option best shows $X > -5$



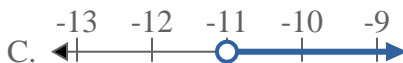
2) Which option best shows $X \geq 12$



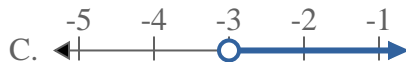
3) Which option best shows $X \leq 20$



4) Which option best shows $X \geq -11$



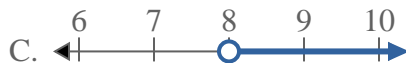
5) Which option best shows $X > -3$



6) Which option best shows $X > 5$



7) Which option best shows $X \leq 8$



8) Which option best shows $X \leq -13$



Answers

1. _____

2. _____

3. _____

4. _____

5. _____

6. _____

7. _____

8. _____



Solve each problem.

1) Which option best shows $X > -5$



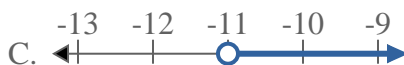
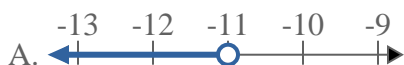
2) Which option best shows $X \geq 12$



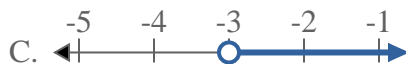
3) Which option best shows $X \leq 20$



4) Which option best shows $X \geq -11$



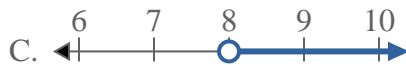
5) Which option best shows $X > -3$



6) Which option best shows $X > 5$



7) Which option best shows $X \leq 8$



8) Which option best shows $X \leq -13$



Answers

1. **C**

2. **D**

3. **B**

4. **D**

5. **C**

6. **C**

7. **B**

8. **B**