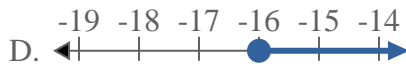
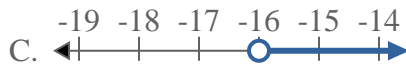


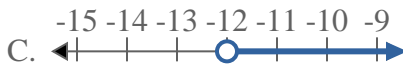


Solve each problem.

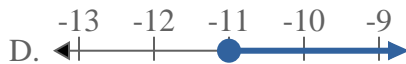
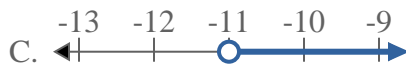
1) Which option best shows  $X > -16$



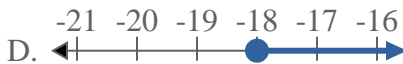
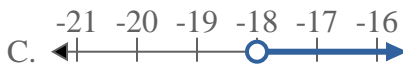
2) Which option best shows  $X \geq -12$



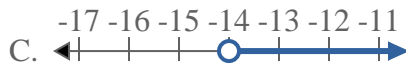
3) Which option best shows  $X \leq -11$



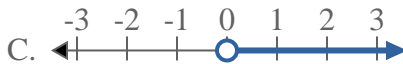
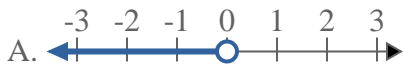
4) Which option best shows  $X \leq -18$



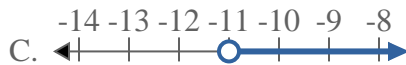
5) Which option best shows  $X \leq -14$



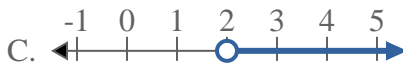
6) Which option best shows  $X < 0$



7) Which option best shows  $X \leq -11$



8) Which option best shows  $X > 2$



**Answers**

1. \_\_\_\_\_

2. \_\_\_\_\_

3. \_\_\_\_\_

4. \_\_\_\_\_

5. \_\_\_\_\_

6. \_\_\_\_\_

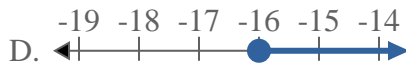
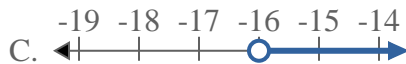
7. \_\_\_\_\_

8. \_\_\_\_\_

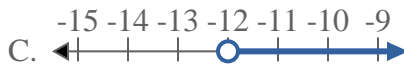


Solve each problem.

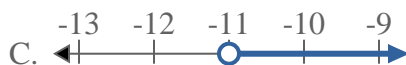
1) Which option best shows  $X > -16$



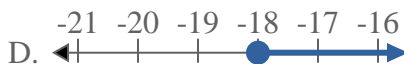
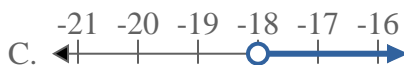
2) Which option best shows  $X \geq -12$



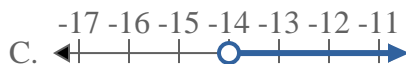
3) Which option best shows  $X \leq -11$



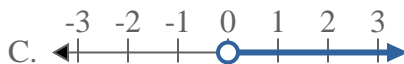
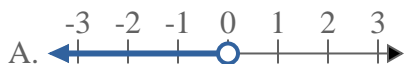
4) Which option best shows  $X \leq -18$



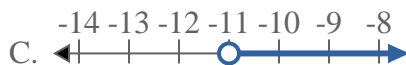
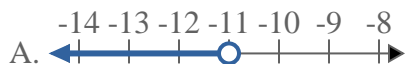
5) Which option best shows  $X \leq -14$



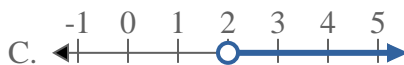
6) Which option best shows  $X < 0$



7) Which option best shows  $X \leq -11$



8) Which option best shows  $X > 2$



**Answers**

1.     **C**    

2.     **D**    

3.     **B**    

4.     **B**    

5.     **B**    

6.     **A**    

7.     **B**    

8.     **C**