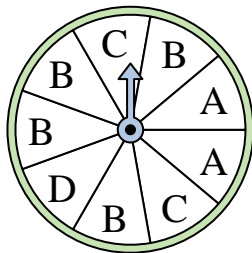





Solve each problem.

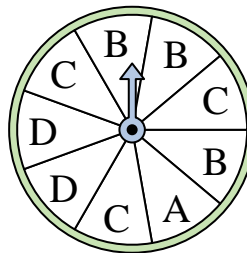
- 1) Which letter is the spinner most likely to land on?



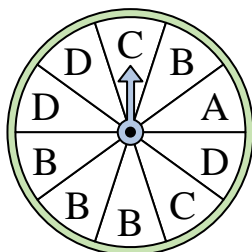
- 2) Which number is the spinner least likely to land on?



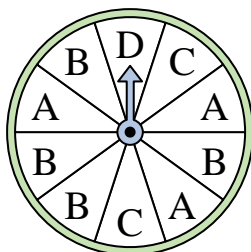
- 3) Which two letters is the spinner equally likely to land on?



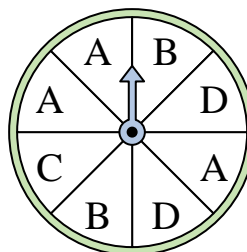
- 4) Which letter is the spinner most likely to land on?




- 5) Which letter is the spinner least likely to land on?




- 6) Which two letters is the spinner equally likely to land on?



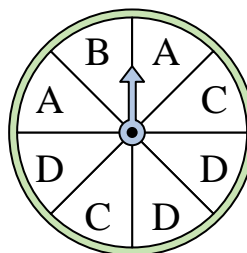
- 7) Which number is the spinner least likely to land on?



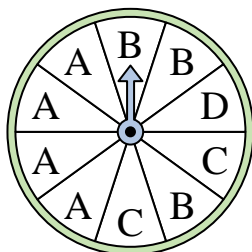
- 8) Which number is the spinner least likely to land on?



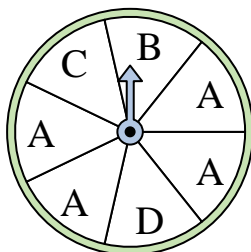
- 9) Which two letters is the spinner equally likely to land on?



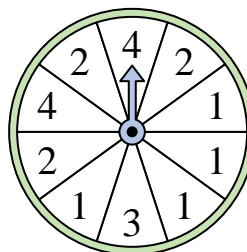
- 10) Which letter is the spinner most likely to land on?



- 11) Which letter is the spinner most likely to land on?



- 12) Which number is the spinner most likely to land on?



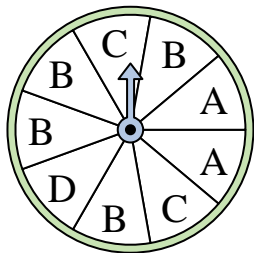
Answers

- 1. \_\_\_\_\_
- 2. \_\_\_\_\_
- 3. \_\_\_\_\_
- 4. \_\_\_\_\_
- 5. \_\_\_\_\_
- 6. \_\_\_\_\_
- 7. \_\_\_\_\_
- 8. \_\_\_\_\_
- 9. \_\_\_\_\_
- 10. \_\_\_\_\_
- 11. \_\_\_\_\_
- 12. \_\_\_\_\_




Solve each problem.

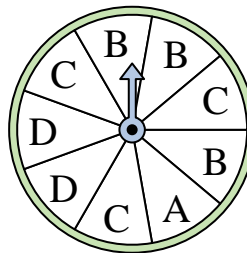
- 1) Which letter is the spinner most likely to land on?



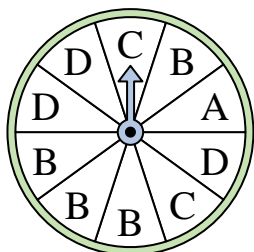
- 2) Which number is the spinner least likely to land on?



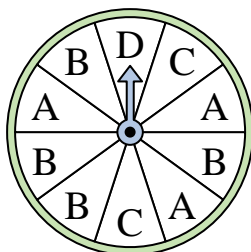
- 3) Which two letters is the spinner equally likely to land on?



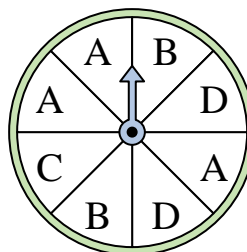
- 4) Which letter is the spinner most likely to land on?




- 5) Which letter is the spinner least likely to land on?




- 6) Which two letters is the spinner equally likely to land on?



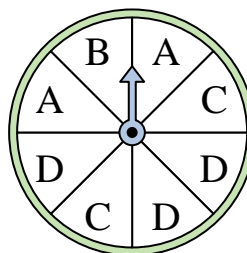
- 7) Which number is the spinner least likely to land on?



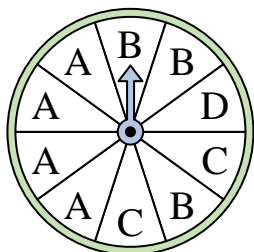
- 8) Which number is the spinner least likely to land on?



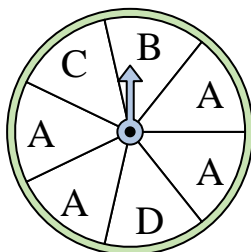
- 9) Which two letters is the spinner equally likely to land on?



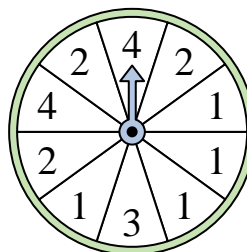
- 10) Which letter is the spinner most likely to land on?



- 11) Which letter is the spinner most likely to land on?



- 12) Which number is the spinner most likely to land on?



Answers

1.     **B**
2.     **4**
3.     **B & C**
4.     **B**
5.     **D**
6.     **B & D**
7.     **1**
8.     **1**
9.     **A & C**
10.     **A**
11.     **A**
12.     **1**