


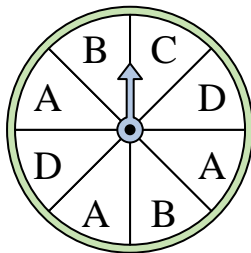


Solve each problem.

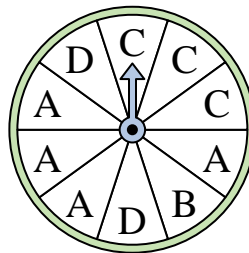
- 1) Which number is the spinner least likely to land on?



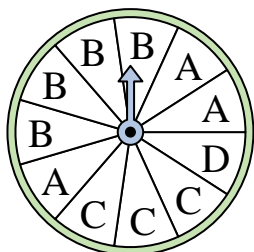
- 2) Which two letters is the spinner equally likely to land on?



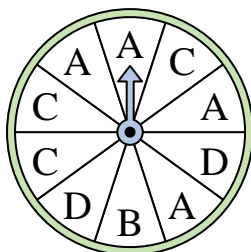
- 3) Which letter is the spinner least likely to land on?



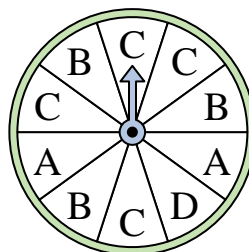
- 4) Which letter is the spinner least likely to land on?



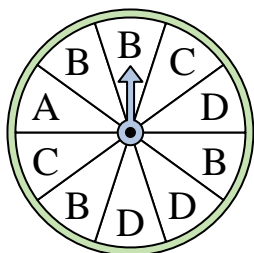
- 5) Which letter is the spinner most likely to land on?



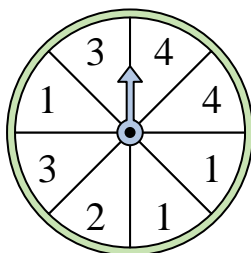
- 6) Which letter is the spinner most likely to land on?



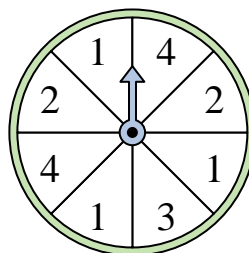
- 7) Which letter is the spinner most likely to land on?



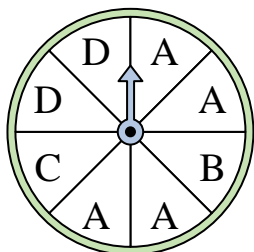
- 8) Which number is the spinner most likely to land on?



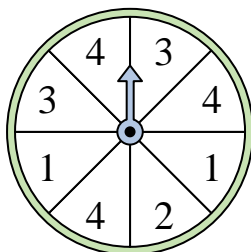
- 9) Which two numbers is the spinner equally likely to land on?



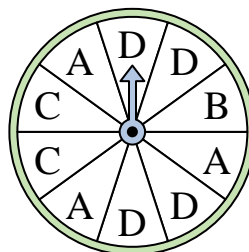
- 10) Which letter is the spinner most likely to land on?



- 11) Which two numbers is the spinner equally likely to land on?



- 12) Which letter is the spinner least likely to land on?




Answers

1. _____
2. _____
3. _____
4. _____
5. _____
6. _____
7. _____
8. _____
9. _____
10. _____
11. _____
12. _____

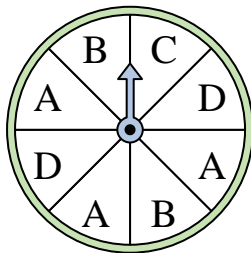


Solve each problem.

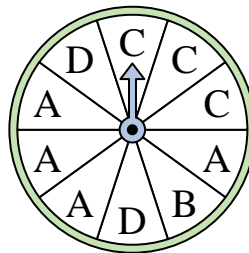
- 1) Which number is the spinner least likely to land on?



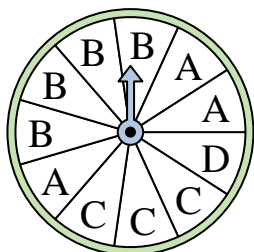
- 2) Which two letters is the spinner equally likely to land on?



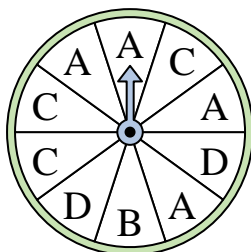
- 3) Which letter is the spinner least likely to land on?



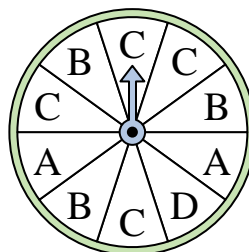
- 4) Which letter is the spinner least likely to land on?



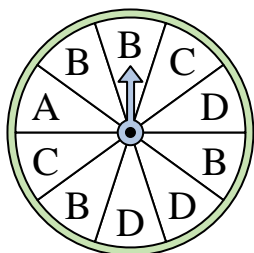
- 5) Which letter is the spinner most likely to land on?



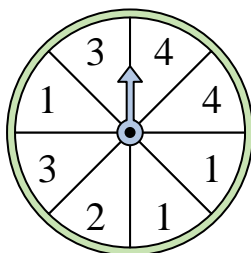
- 6) Which letter is the spinner most likely to land on?



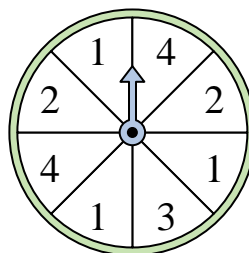
- 7) Which letter is the spinner most likely to land on?



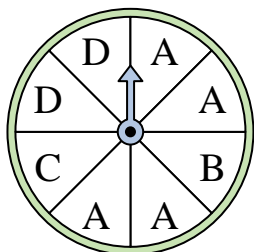
- 8) Which number is the spinner most likely to land on?



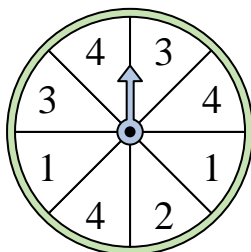
- 9) Which two numbers is the spinner equally likely to land on?



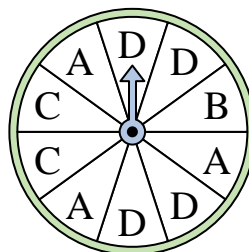
- 10) Which letter is the spinner most likely to land on?



- 11) Which two numbers is the spinner equally likely to land on?



- 12) Which letter is the spinner least likely to land on?



Answers

1. **4**

2. **B & D**

3. **B**

4. **D**

5. **A**

6. **C**

7. **B**

8. **1**

9. **2 & 4**

10. **A**

11. **1 & 3**

12. **B**