


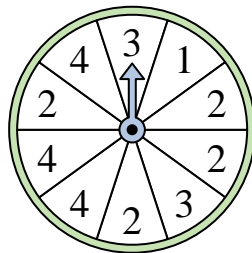


Solve each problem.

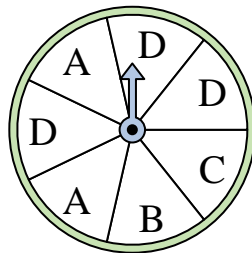
- 1) Which number is the spinner least likely to land on?



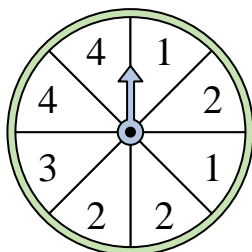
- 2) Which number is the spinner least likely to land on?



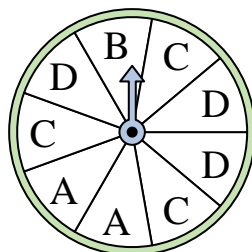
- 3) Which two letters is the spinner equally likely to land on?



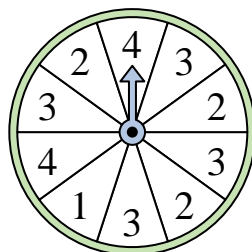
- 4) Which number is the spinner most likely to land on?




- 5) Which two letters is the spinner equally likely to land on?




- 6) Which number is the spinner least likely to land on?



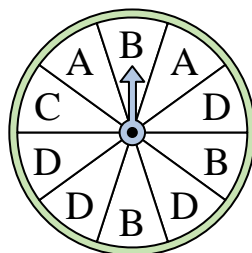
- 7) Which two numbers is the spinner equally likely to land on?



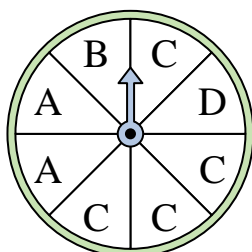
- 8) Which number is the spinner least likely to land on?



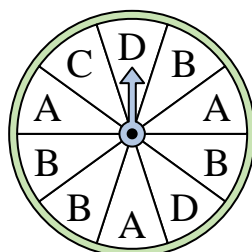
- 9) Which letter is the spinner most likely to land on?



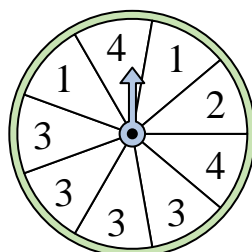
- 10) Which letter is the spinner most likely to land on?



- 11) Which letter is the spinner most likely to land on?



- 12) Which number is the spinner most likely to land on?




Answers

- 1. \_\_\_\_\_
- 2. \_\_\_\_\_
- 3. \_\_\_\_\_
- 4. \_\_\_\_\_
- 5. \_\_\_\_\_
- 6. \_\_\_\_\_
- 7. \_\_\_\_\_
- 8. \_\_\_\_\_
- 9. \_\_\_\_\_
- 10. \_\_\_\_\_
- 11. \_\_\_\_\_
- 12. \_\_\_\_\_

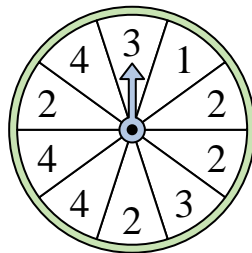


Solve each problem.

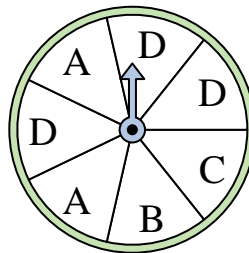
- 1) Which number is the spinner least likely to land on?



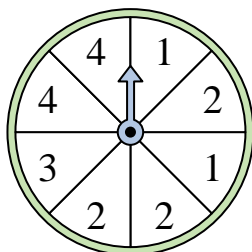
- 2) Which number is the spinner least likely to land on?



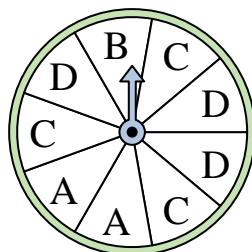
- 3) Which two letters is the spinner equally likely to land on?



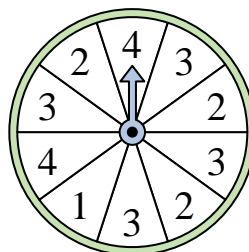
- 4) Which number is the spinner most likely to land on?




- 5) Which two letters is the spinner equally likely to land on?




- 6) Which number is the spinner least likely to land on?



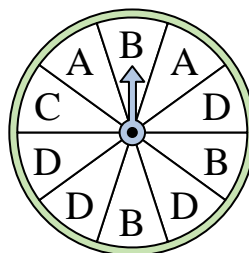
- 7) Which two numbers is the spinner equally likely to land on?



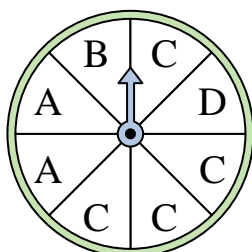
- 8) Which number is the spinner least likely to land on?



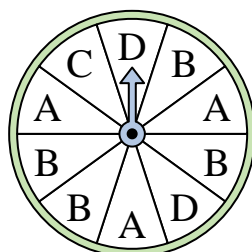
- 9) Which letter is the spinner most likely to land on?



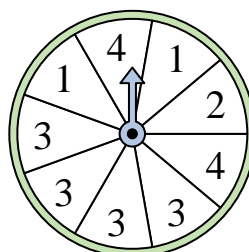
- 10) Which letter is the spinner most likely to land on?



- 11) Which letter is the spinner most likely to land on?



- 12) Which number is the spinner most likely to land on?



Answers

1. 1
2. 1
3. B & C
4. 2
5. C & D
6. 1
7. 1 & 2
8. 4
9. D
10. C
11. B
12. 3