

**Use the double numberline to solve the problems.****Answers**

- 1) A recipe call for 6 teaspoons of seasoning for every 7 batches of chicken. If you have 28 batches of chicken, how many teaspoons of seasoning will you need?
- chicken
seasoning

1. _____

2. _____

- 2) For every 9 cans Victor collected for recycling he earned 3 cents. After he collected 45 cans, how much money would he have earned?
- cans
money

3. _____

4. _____

5. _____

- 3) A builder could get 2 sheets of sheetrock for \$8. If he bought 18 sheets, how much money would he have spent?
- sheetrock
price

6. _____

7. _____

- 4) On her MP3 player for every 10 pop song Paige had she also had 3 country song. If she has 70 pop songs on her MP3 player, how many country songs does she have?
- pop
country

8. _____

- 5) A box of candy had 9 cherry pieces for every 5 lemon pieces. If the box had 35 lemon pieces, how many cherry pieces would there be?
- lemon
cherry

- 6) In a video game for every 10 enemies defeat, you earned 2 points. If you defeated 100 enemies, how many points would you have earned?
- enemies
points

- 7) A store had a sale where you could get 3 bags of cashews for \$7. If you wanted to buy 27 bags, how much would it cost?
- cashews
price

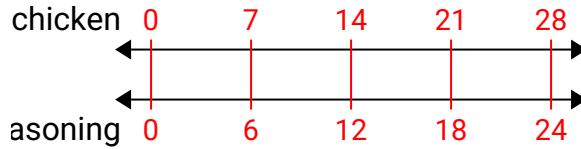
- 8) At a school fundraiser for every 2 boxes of chocolate sold you earn 3 points. If you were to sell 8 boxes, how many points would you have earned?
- boxes
points



Use the double numberline to solve the problems.

Answers

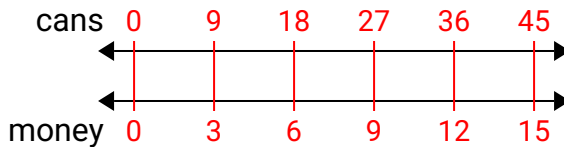
- 1) A recipe call for 6 teaspoons of seasoning for every 7 batches of chicken. If you have 28 batches of chicken, how many teaspoons of seasoning will you need?



1. **24**

2. **15**

- 2) For every 9 cans Victor collected for recycling he earned 3 cents. After he collected 45 cans, how much money would he have earned?

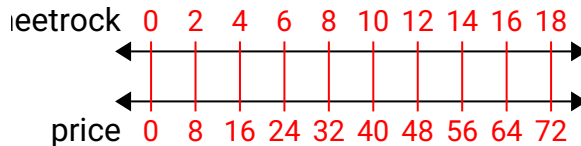


3. **72**

4. **21**

5. **63**

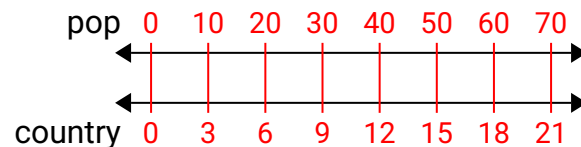
- 3) A builder could get 2 sheets of sheetrock for \$8. If he bought 18 sheets, how much money would he have spent?



6. **20**

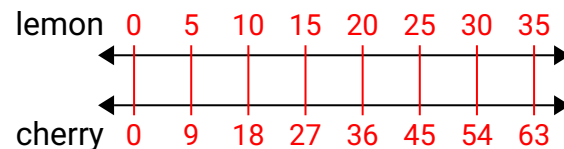
7. **63**

- 4) On her MP3 player for every 10 pop song Paige had she also had 3 country song. If she has 70 pop songs on her MP3 player, how many country songs does she have?

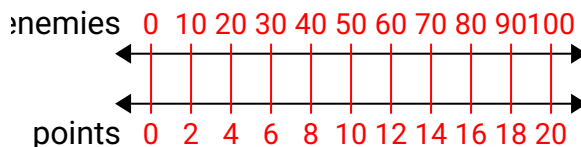


8. **12**

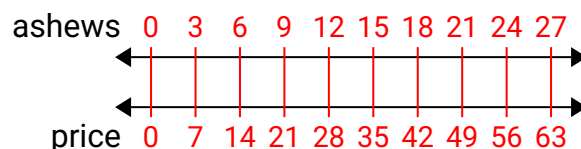
- 5) A box of candy had 9 cherry pieces for every 5 lemon pieces. If the box had 35 lemon pieces, how many cherry pieces would there be?



- 6) In a video game for every 10 enemies defeat, you earned 2 points. If you defeated 100 enemies, how many points would you have earned?



- 7) A store had a sale where you could get 3 bags of cashews for \$7. If you wanted to buy 27 bags, how much would it cost?



- 8) At a school fundraiser for every 2 boxes of chocolate sold you earn 3 points. If you were to sell 8 boxes, how many points would you have earned?

