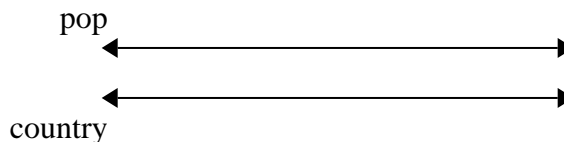




Use the double numberline to solve the problems.

Answers

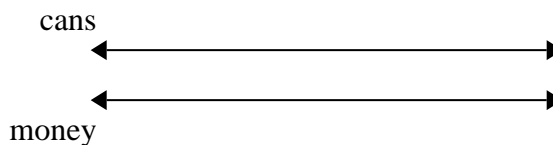
1) On her MP3 player for every 5 pop song Faye had she also had 6 country song. If she has 40 pop songs on her MP3 player, how many country songs does she have?



1. _____

2. _____

2) For every 2 cans Jerry collected for recycling he earned 7 cents. After he collected 10 cans, how much money would he have earned?




3. _____

4. _____

5. _____


3) A movie theater put 3 cups of oil for every 7 batches of popcorn they made. After they had made 14 batches of popcorn, how much oil would they have used?



6. _____


7. _____

4) The ratio of boys to girls at the park was 6 to 7. If there were 24 boys, how many girls were there?




8. _____

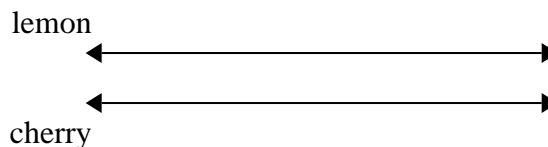
5) A recipe call for 10 teaspoons of seasoning for every 5 batches of chicken. If you have 50 batches of chicken, how many teaspoons of seasoning will you need?



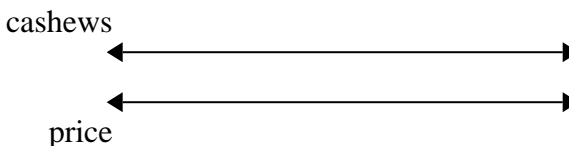
6) A builder could get 4 sheets of sheetrock for \$2. If he bought 12 sheets, how much money would he have spent?



7) A box of candy had 7 cherry pieces for every 8 lemon pieces. If the box had 72 lemon pieces, how many cherry pieces would there be?



8) A store had a sale where you could get 9 bags of cashews for \$10. If you wanted to buy 27 bags, how much would it cost?

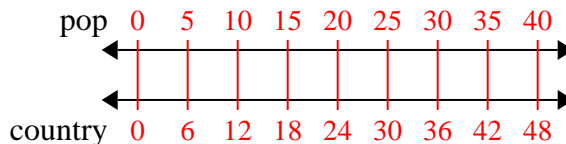




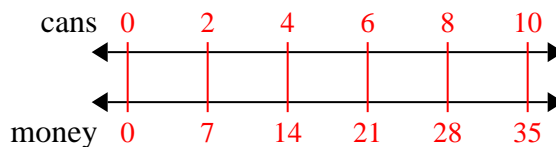
Use the double numberline to solve the problems.

Answers

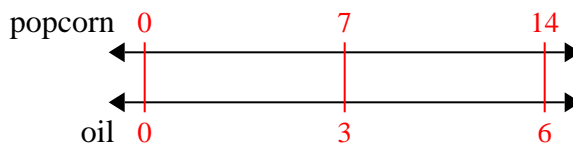
- 1) On her MP3 player for every 5 pop song Faye had she also had 6 country song. If she has 40 pop songs on her MP3 player, how many country songs does she have?

1. 48

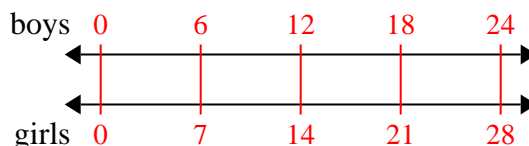
- 2) For every 2 cans Jerry collected for recycling he earned 7 cents. After he collected 10 cans, how much money would he have earned?

2. 35

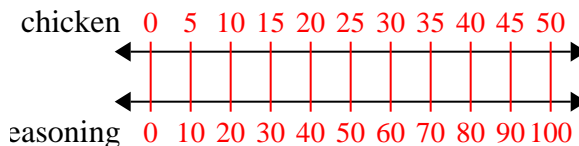
- 3) A movie theater put 3 cups of oil for every 7 batches of popcorn they made. After they had made 14 batches of popcorn, how much oil would they have used?

3. 6

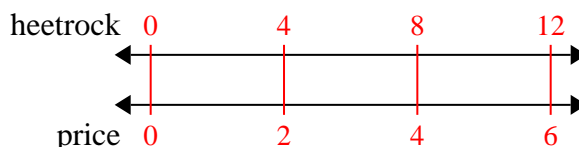
- 4) The ratio of boys to girls at the park was 6 to 7. If there were 24 boys, how many girls were there?

4. 28

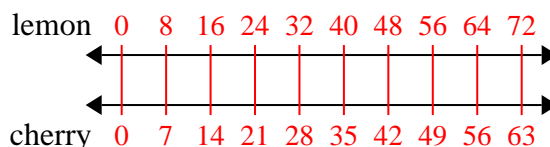
- 5) A recipe call for 10 teaspoons of seasoning for every 5 batches of chicken. If you have 50 batches of chicken, how many teaspoons of seasoning will you need?

5. 100

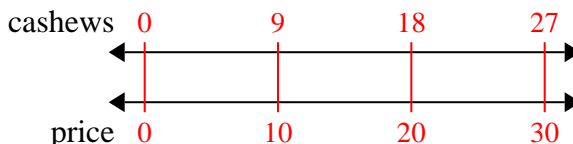
- 6) A builder could get 4 sheets of sheetrock for \$2. If he bought 12 sheets, how much money would he have spent?

6. 6

- 7) A box of candy had 7 cherry pieces for every 8 lemon pieces. If the box had 72 lemon pieces, how many cherry pieces would there be?

7. 63

- 8) A store had a sale where you could get 9 bags of cashews for \$10. If you wanted to buy 27 bags, how much would it cost?

8. 30