



Use the double numberline to solve the problems.

Answers

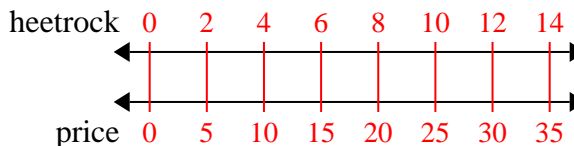
- 1) A builder could get 2 sheets of sheetrock for \$5. If he bought 14 sheets, how much money would he have spent?
- heetrock ←————→
- price ←————→
- 2) A movie theater put 9 cups of oil for every 4 batches of popcorn they made. After they had made 36 batches of popcorn, how much oil would they have used?
- popcorn ←————→
- oil ←————→
- 3) On her MP3 player for every 2 pop song Katie had she also had 3 country song. If she has 14 pop songs on her MP3 player, how many country songs does she have?
- pop ←————→
- country ←————→
- 4) A sloppy joe restaurant gave 3 napkins for every 7 items ordered. If someone bought 63 items, how many napkins should they get?
- item ←————→
- napkins ←————→
- 5) In a video game for every 2 enemies defeat, you earned 3 points. If you defeated 8 enemies, how many points would you have earned?
- enemies ←————→
- points ←————→
- 6) A box of candy had 9 cherry pieces for every 6 lemon pieces. If the box had 60 lemon pieces, how many cherry pieces would there be?
- lemon ←————→
- cherry ←————→
- 7) A recipe call for 9 teaspoons of seasoning for every 5 batches of chicken. If you have 45 batches of chicken, how many teaspoons of seasoning will you need?
- chicken ←————→
- seasoning ←————→
- 8) For every 2 cans Cody collected for recycling he earned 5 cents. After he collected 20 cans, how much money would he have earned?
- cans ←————→
- money ←————→
1. \_\_\_\_\_
2. \_\_\_\_\_
3. \_\_\_\_\_
4. \_\_\_\_\_
5. \_\_\_\_\_
6. \_\_\_\_\_
7. \_\_\_\_\_
8. \_\_\_\_\_



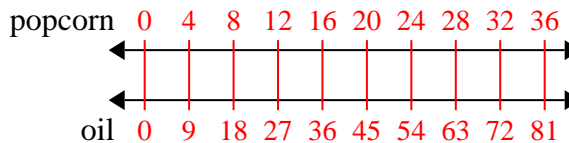
Use the double numberline to solve the problems.

Answers

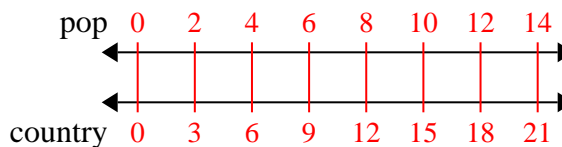
- 1) A builder could get 2 sheets of sheetrock for \$5. If he bought 14 sheets, how much money would he have spent?

1. 35

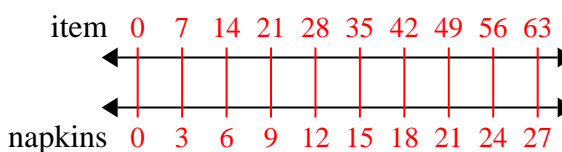
- 2) A movie theater put 9 cups of oil for every 4 batches of popcorn they made. After they had made 36 batches of popcorn, how much oil would they have used?

2. 813. 21

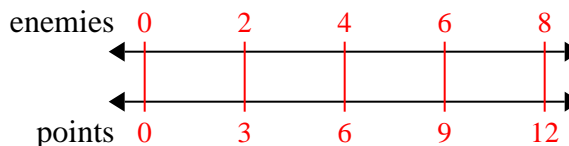
- 3) On her MP3 player for every 2 pop songs Katie had she also had 3 country songs. If she has 14 pop songs on her MP3 player, how many country songs does she have?

4. 275. 12

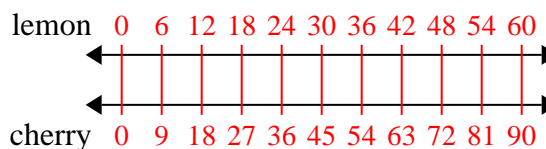
- 4) A sloppy joe restaurant gave 3 napkins for every 7 items ordered. If someone bought 63 items, how many napkins should they get?

6. 907. 81

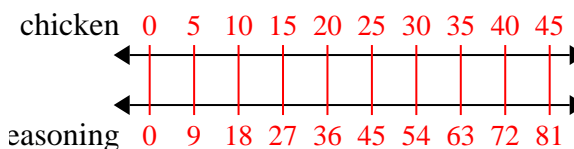
- 5) In a video game for every 2 enemies defeated, you earned 3 points. If you defeated 8 enemies, how many points would you have earned?

8. 50

- 6) A box of candy had 9 cherry pieces for every 6 lemon pieces. If the box had 60 lemon pieces, how many cherry pieces would there be?



- 7) A recipe call for 9 teaspoons of seasoning for every 5 batches of chicken. If you have 45 batches of chicken, how many teaspoons of seasoning will you need?



- 8) For every 2 cans Cody collected for recycling he earned 5 cents. After he collected 20 cans, how much money would he have earned?

