



Use the numberlines to round each number to the nearest 100.

Ex)

25,932



Ex. 25,900

1)

28,551



1. \_\_\_\_\_

2)

854



2. \_\_\_\_\_

3)

831



3. \_\_\_\_\_

4)

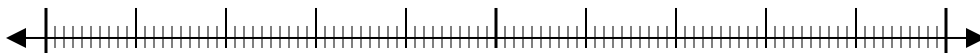
274



4. \_\_\_\_\_

5)

12,793



5. \_\_\_\_\_

6)

5,558



6. \_\_\_\_\_

7)

5,688



7. \_\_\_\_\_

8)

134



8. \_\_\_\_\_

9)

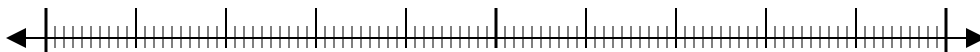
9,335



9. \_\_\_\_\_

10)

36,045

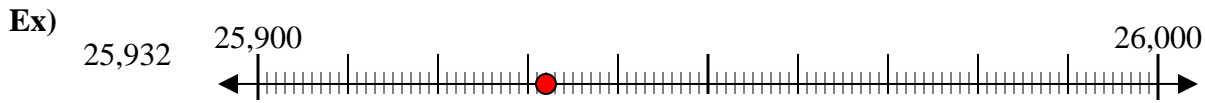


10. \_\_\_\_\_

Answers



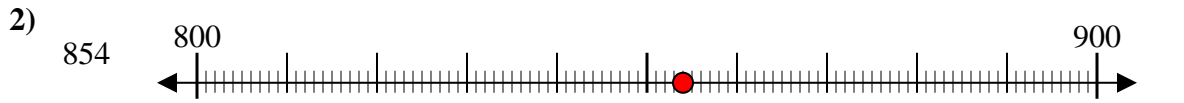
Use the numberlines to round each number to the nearest 100.



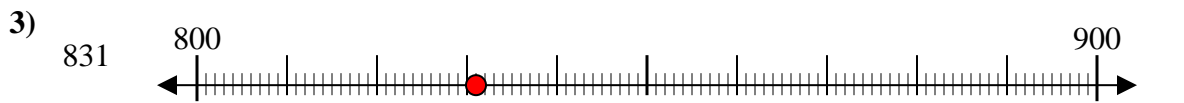
Answers  
Ex. 25,900



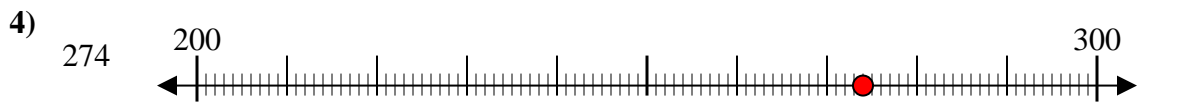
1. 28,600



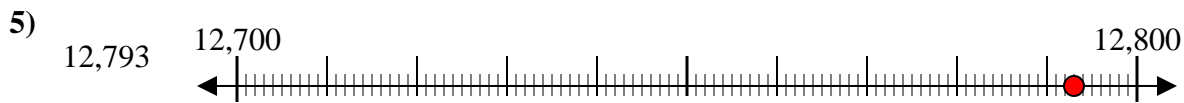
2. 900



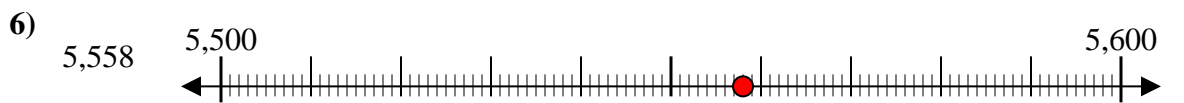
3. 800



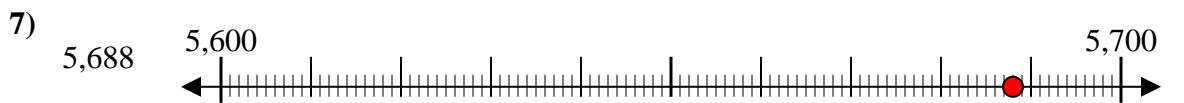
4. 300



5. 12,800



6. 5,600



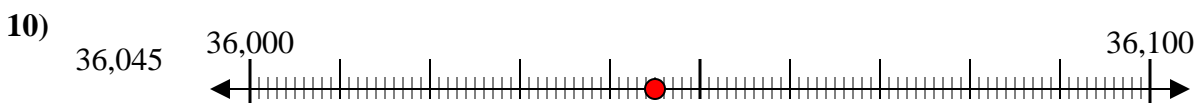
7. 5,700



8. 100



9. 9,300



10. 36,000