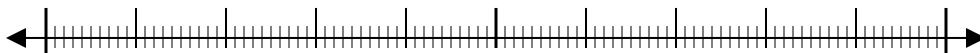




Use the numberlines to round each number to the nearest 100.

Ex)

22,128



Ex. 22,100

1)

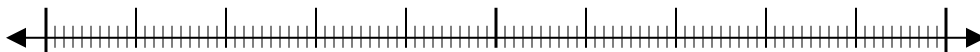
7,798



1. _____

2)

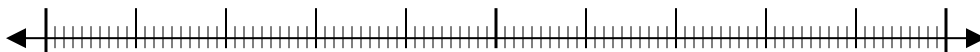
73,791



2. _____

3)

48,807



3. _____

4)

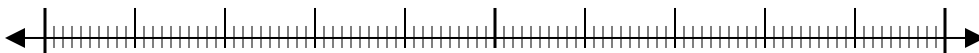
1,381



4. _____

5)

746



5. _____

6)

140



6. _____

7)

904



7. _____

8)

93,445



8. _____

9)

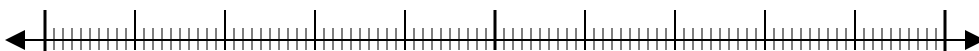
4,176



9. _____

10)

369

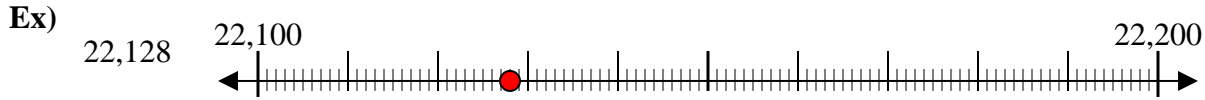


10. _____

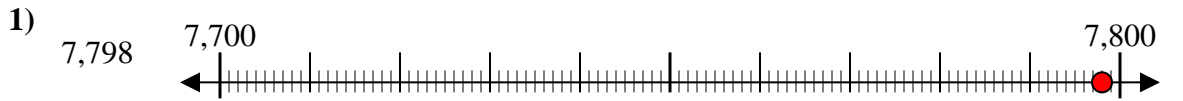
Answers



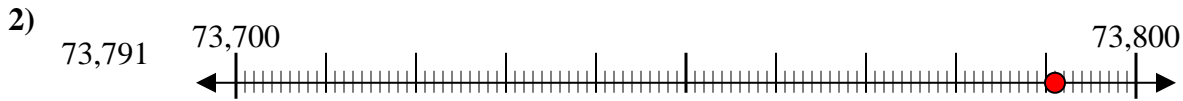
Use the numberlines to round each number to the nearest 100.



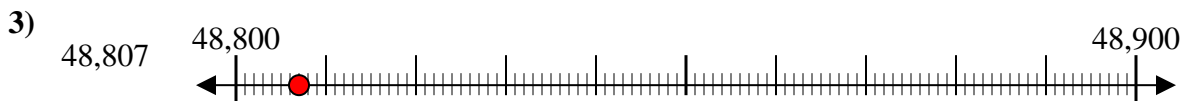
Answers
Ex. 22,100



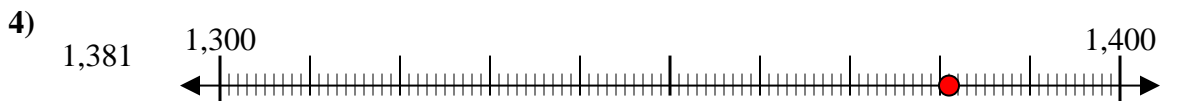
1. 7,800



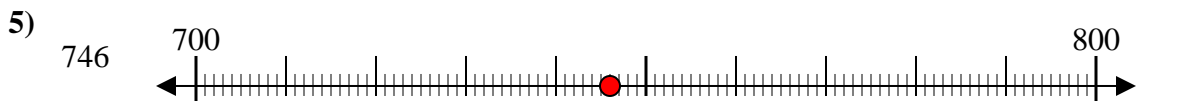
2. 73,800



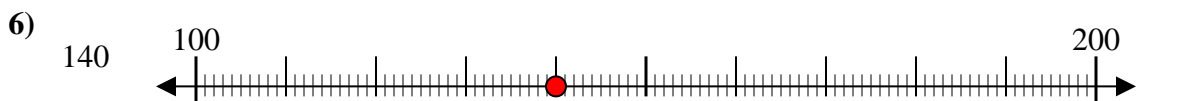
3. 48,800



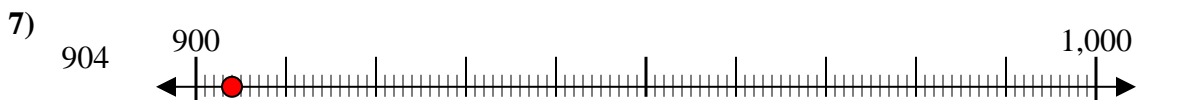
4. 1,400



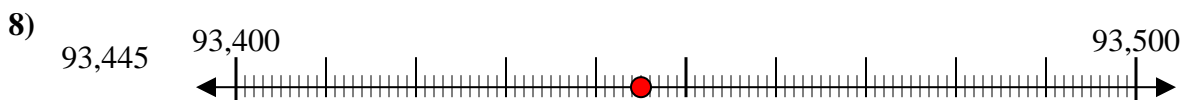
5. 700



6. 100



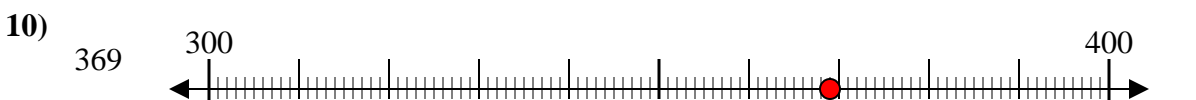
7. 900



8. 93,400



9. 4,200



10. 400