



Mark the location (approximate) on the numberline and then solve.

Answers

1) Round 1,241 to the nearest thousand.



1. _____

2) Round 768 to the nearest hundred.



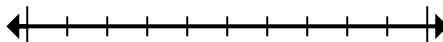
2. _____

3) Round 318,652 to the nearest hundred.



3. _____

4) Round 5,553,802 to the nearest thousand.



4. _____

5) Round 447,430 to the nearest hundred thousand.



5. _____

6) Round 619,618 to the nearest ten thousand.



6. _____

7) Round 59,257 to the nearest thousand.



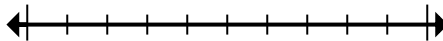
7. _____

8) Round 2,862,338 to the nearest ten thousand.



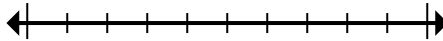
8. _____

9) Round 39,911,169 to the nearest hundred thousand.



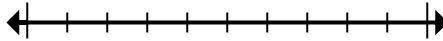
9. _____

10) Round 404 to the nearest hundred.



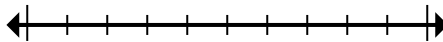
10. _____

11) Round 76,673 to the nearest ten thousand.



11. _____

12) Round 4,894 to the nearest thousand.

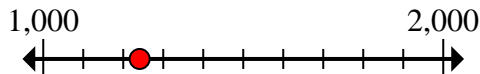


12. _____

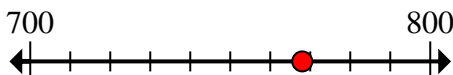


Mark the location (approximate) on the numberline and then solve.

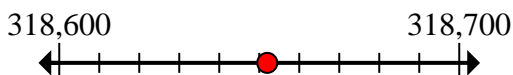
1) Round 1,241 to the nearest thousand.



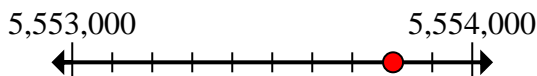
2) Round 768 to the nearest hundred.



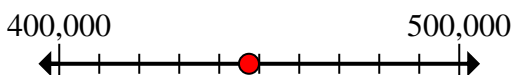
3) Round 318,652 to the nearest hundred.



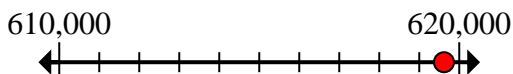
4) Round 5,553,802 to the nearest thousand.



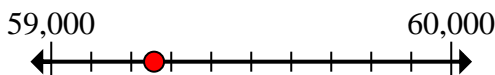
5) Round 447,430 to the nearest hundred thousand.



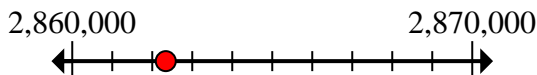
6) Round 619,618 to the nearest ten thousand.



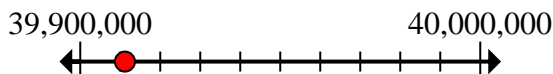
7) Round 59,257 to the nearest thousand.



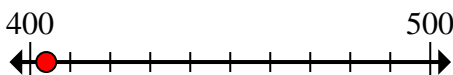
8) Round 2,862,338 to the nearest ten thousand.



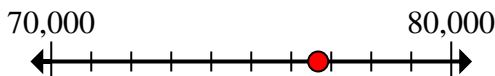
9) Round 39,911,169 to the nearest hundred thousand.



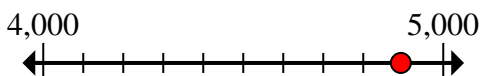
10) Round 404 to the nearest hundred.



11) Round 76,673 to the nearest ten thousand.



12) Round 4,894 to the nearest thousand.



Answers

1. 1,000

2. 800

3. 318,700

4. 5,554,000

5. 400,000

6. 620,000

7. 59,000

8. 2,860,000

9. 39,900,000

10. 400

11. 80,000

12. 5,000

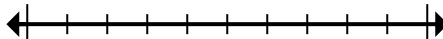


Mark the location (approximate) on the numberline and then solve.

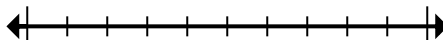
Answers

800	2,860,000	620,000	39,900,000
59,000	80,000	400,000	400
5,554,000	1,000	318,700	5,000

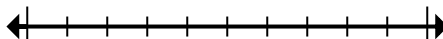
1) Round 1,241 to the nearest thousand.



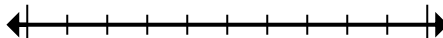
2) Round 768 to the nearest hundred.



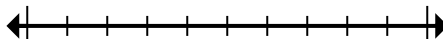
3) Round 318,652 to the nearest hundred.



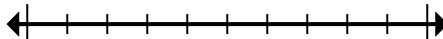
4) Round 5,553,802 to the nearest thousand.



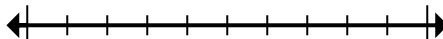
5) Round 447,430 to the nearest hundred thousand.



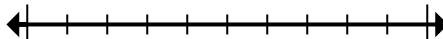
6) Round 619,618 to the nearest ten thousand.



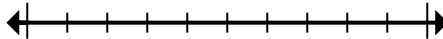
7) Round 59,257 to the nearest thousand.



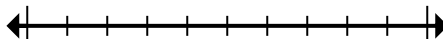
8) Round 2,862,338 to the nearest ten thousand.



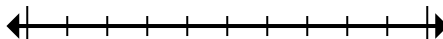
9) Round 39,911,169 to the nearest hundred thousand.



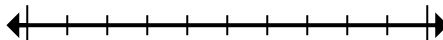
10) Round 404 to the nearest hundred.



11) Round 76,673 to the nearest ten thousand.



12) Round 4,894 to the nearest thousand.



1. _____
2. _____
3. _____
4. _____
5. _____
6. _____
7. _____
8. _____
9. _____
10. _____
11. _____
12. _____