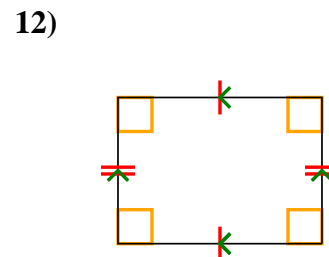
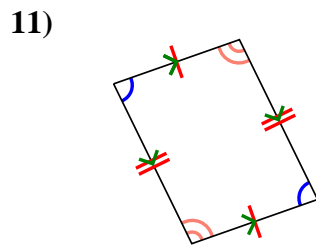
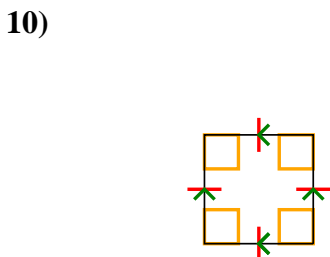
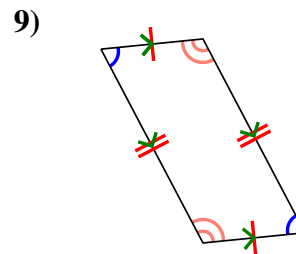
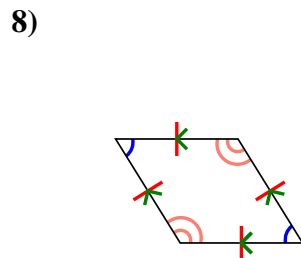
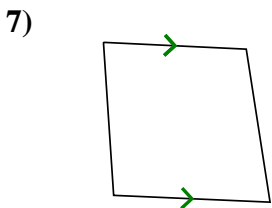
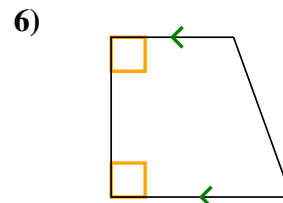
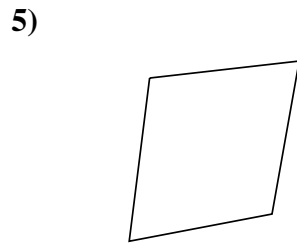
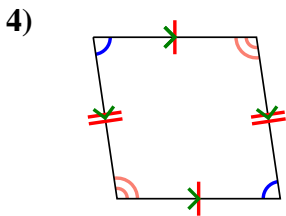
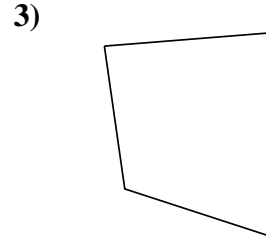
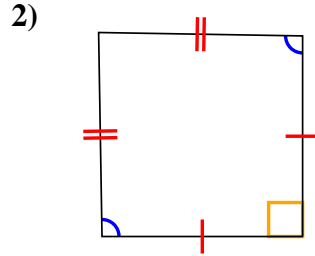
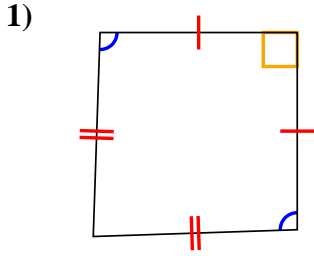




Determine if the shape shown is a Quadrilateral, Kite, Trapezoid, Parallelogram, Rhombus, Rectangle or Square (can be more than one).

Answers

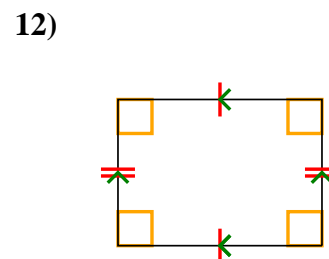
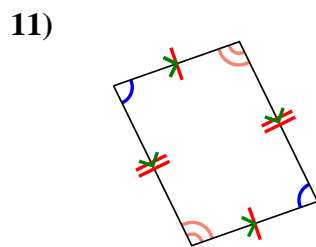
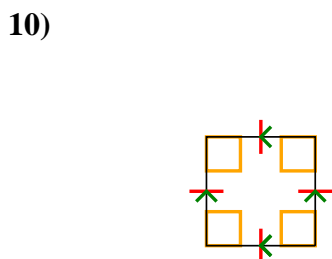
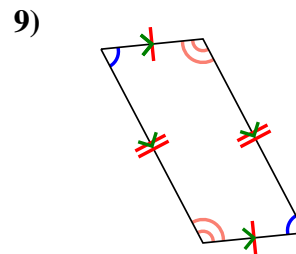
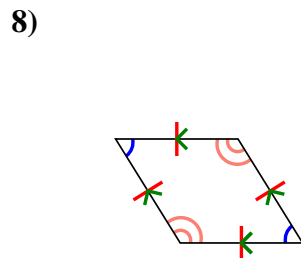
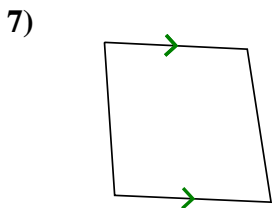
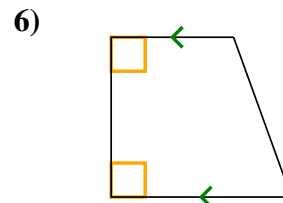
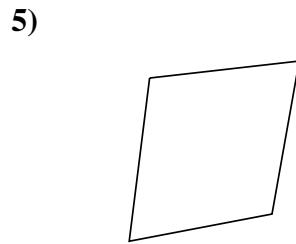
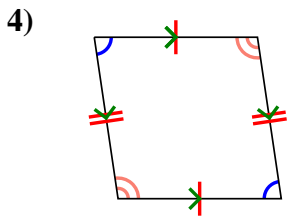
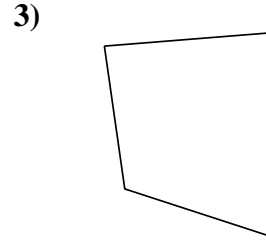
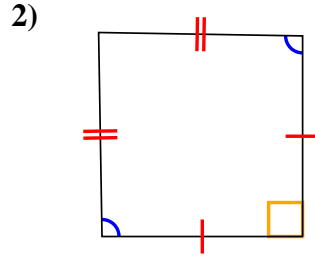
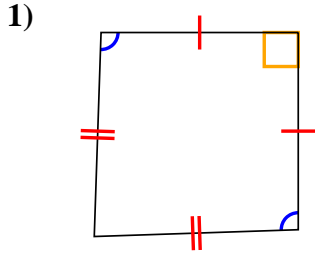


- 1. _____
- 2. _____
- 3. _____
- 4. _____
- 5. _____
- 6. _____
- 7. _____
- 8. _____
- 9. _____
- 10. _____
- 11. _____
- 12. _____



Determine if the shape shown is a Quadrilateral, Kite, Trapezoid, Parallelogram, Rhombus, Rectangle or Square (can be more than one).

Answers



1. Q,K

2. Q,K

3. Q

4. Q,P

5. Q

6. Q,T

7. Q,T

8. Q,P,H

9. Q,P

10. Q,P,H,R,S

11. Q,P

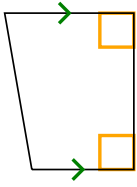
12. Q,P,R



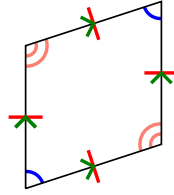
Determine if the shape shown is a Quadrilateral, Kite, Trapezoid, Parallelogram, Rhombus, Rectangle or Square (can be more than one).

Answers

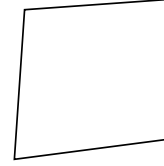
1)



2)



3)



1. _____

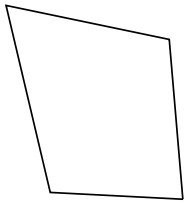
2. _____

3. _____

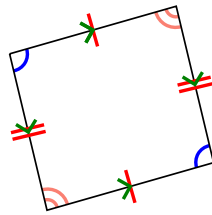
4. _____

5. _____

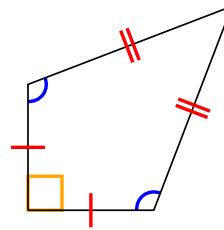
4)



5)



6)



6. _____

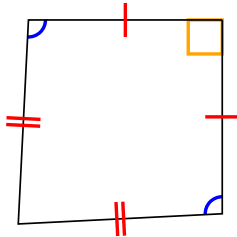
7. _____

8. _____

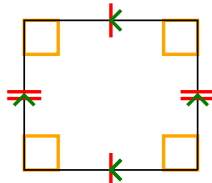
9. _____

10. _____

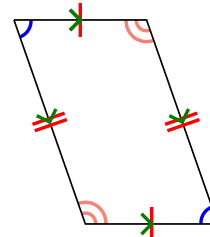
7)



8)



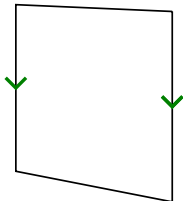
9)



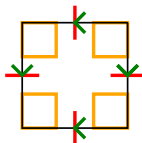
11. _____

12. _____


10)



11)



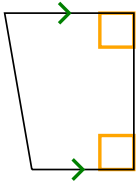
12)



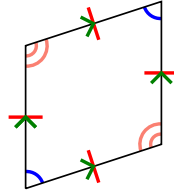


Determine if the shape shown is a Quadrilateral, Kite, Trapezoid, Parallelogram, Rhombus, Rectangle or Square (can be more than one).


1)



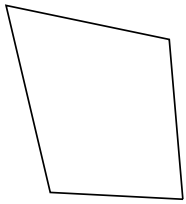
2)



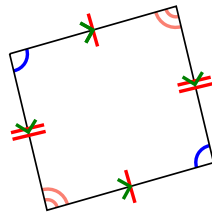
3)



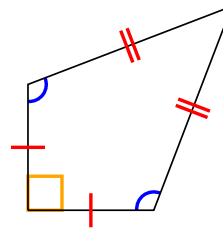
4)



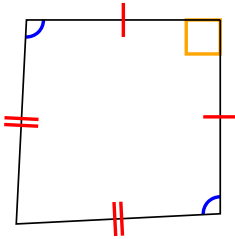
5)



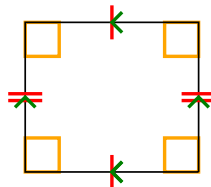
6)



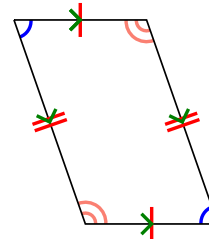
7)



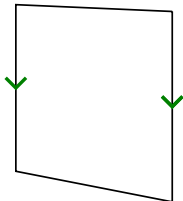
8)



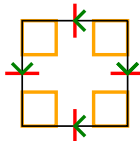
9)




10)



11)



12)



Answers

1. Q,T

2. Q,P,H

3. Q

4. Q

5. Q,P

6. Q,K

7. Q,K

8. Q,P,R

9. Q,P

10. Q,T

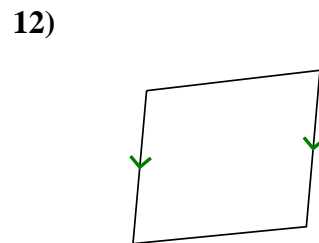
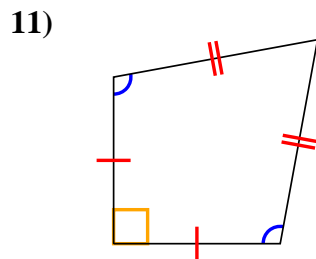
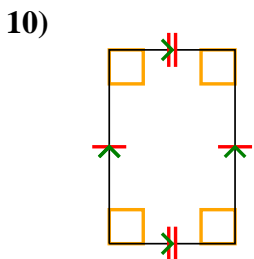
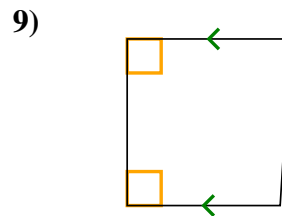
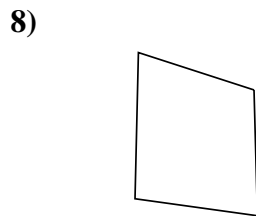
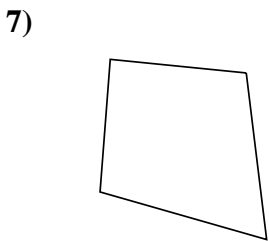
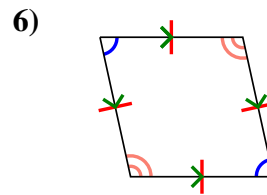
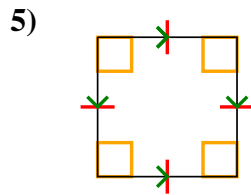
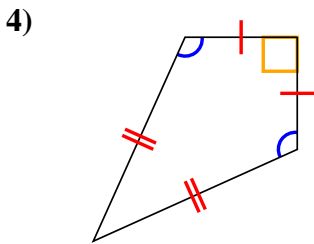
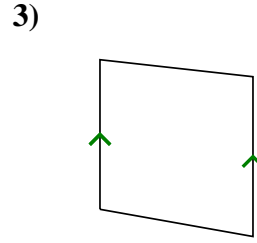
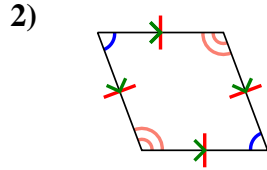
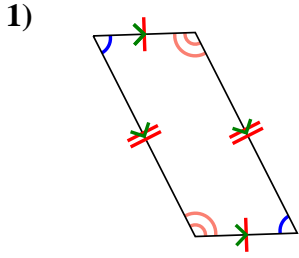
11. Q,P,H,R,S

12. Q



Determine if the shape shown is a Quadrilateral, Kite, Trapezoid, Parallelogram, Rhombus, Rectangle or Square (can be more than one).

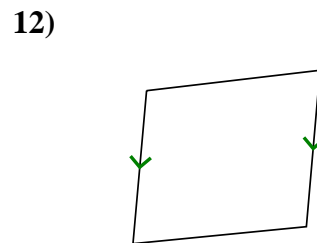
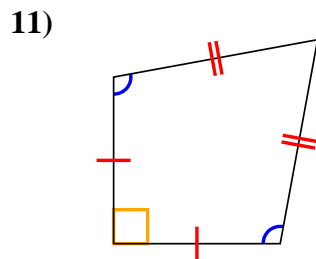
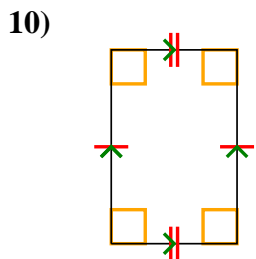
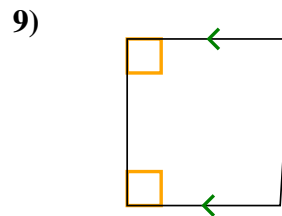
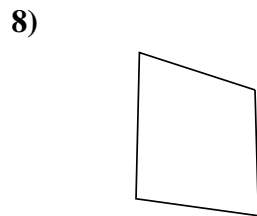
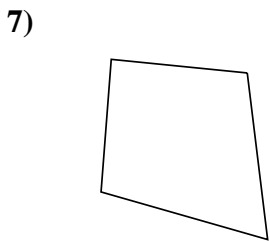
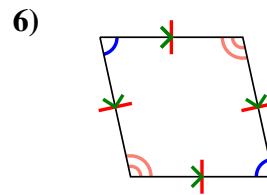
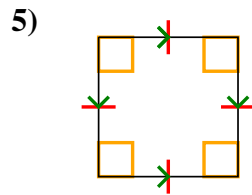
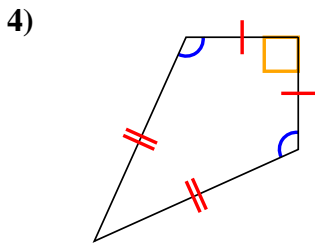
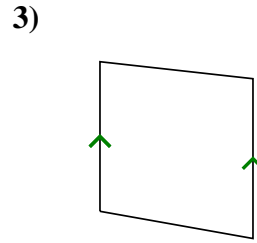
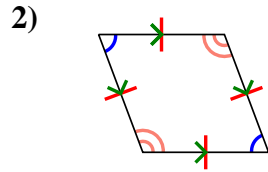
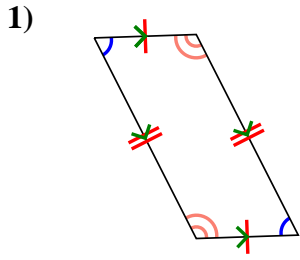
Answers



- 1. _____
- 2. _____
- 3. _____
- 4. _____
- 5. _____
- 6. _____
- 7. _____
- 8. _____
- 9. _____
- 10. _____
- 11. _____
- 12. _____



Determine if the shape shown is a Quadrilateral, Kite, Trapezoid, Parallelogram, Rhombus, Rectangle or Square (can be more than one).



Answers

1. Q,P

2. Q,P,H

3. Q,T

4. Q,K

5. Q,P,H,R,S

6. Q,P,H

7. Q

8. Q

9. Q,T

10. Q,P,R

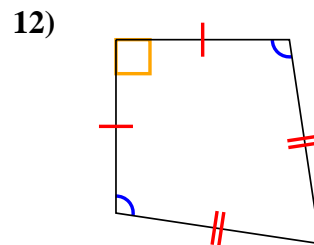
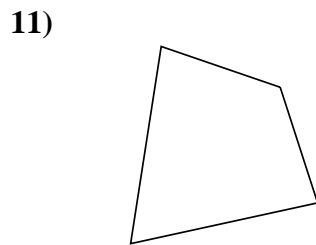
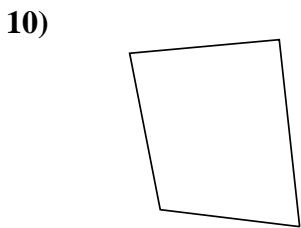
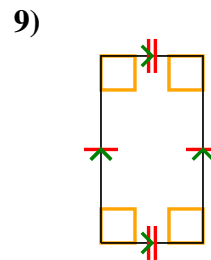
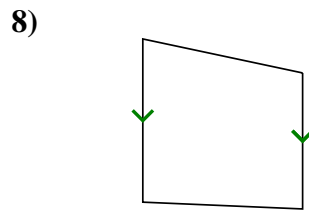
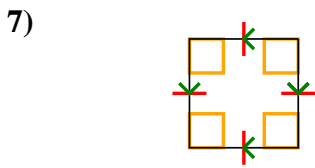
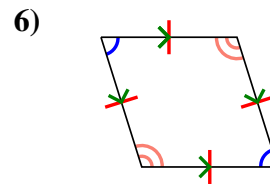
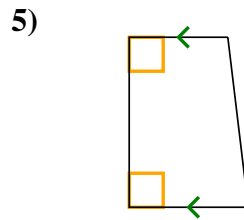
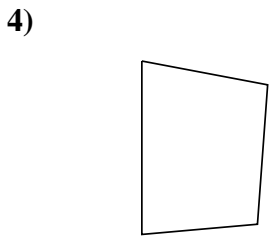
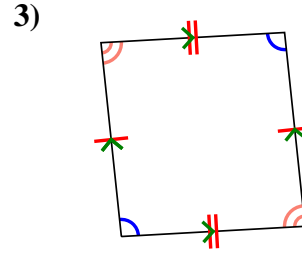
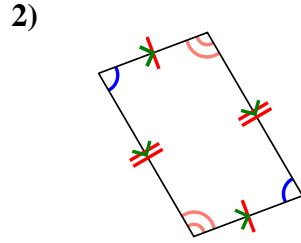
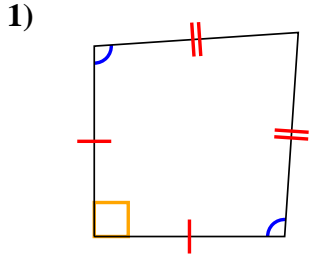
11. Q,K

12. Q,T



Determine if the shape shown is a Quadrilateral, Kite, Trapezoid, Parallelogram, Rhombus, Rectangle or Square (can be more than one).

Answers

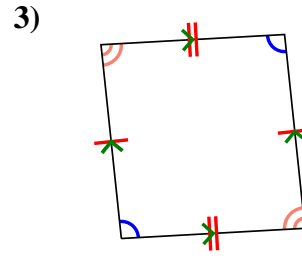
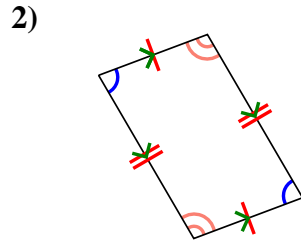
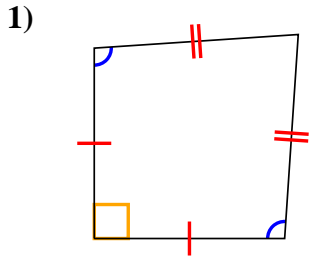


- 1. _____
- 2. _____
- 3. _____
- 4. _____
- 5. _____
- 6. _____
- 7. _____
- 8. _____
- 9. _____
- 10. _____
- 11. _____
- 12. _____



Determine if the shape shown is a Quadrilateral, Kite, Trapezoid, Parallelogram, Rhombus, Rectangle or Square (can be more than one).

Answers



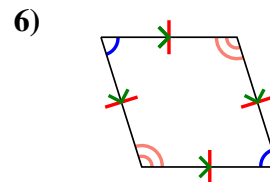
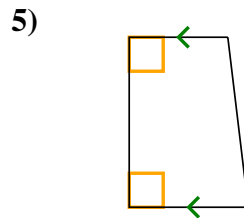
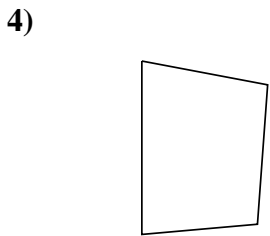
1. Q,K

2. Q,P

3. Q,P

4. Q

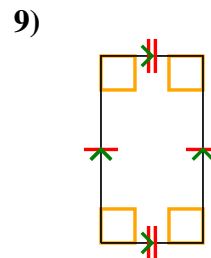
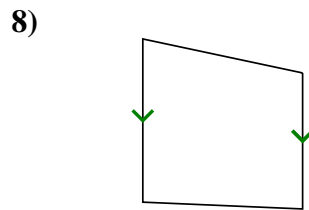
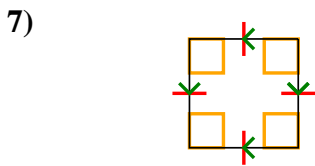
5. Q,T



6. Q,P,H

7. Q,P,H,R,S

8. Q,T

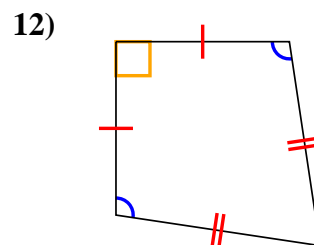
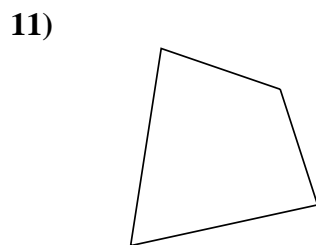
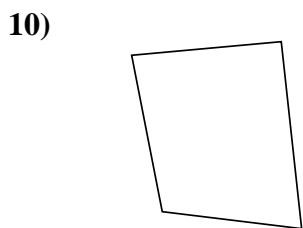


9. Q,P,R

10. Q

11. Q

12. Q,K

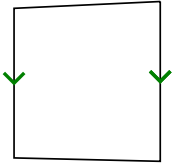




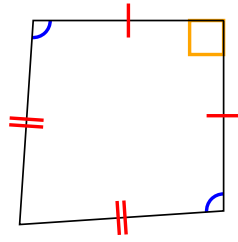
Determine if the shape shown is a Quadrilateral, Kite, Trapezoid, Parallelogram, Rhombus, Rectangle or Square (can be more than one).

Answers

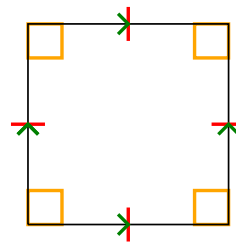
1)



2)



3)



1. _____

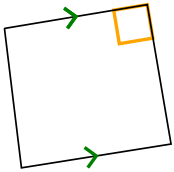
2. _____

3. _____

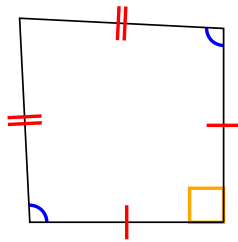
4. _____

5. _____

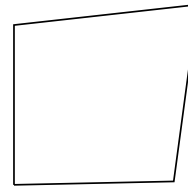
4)



5)



6)



6. _____

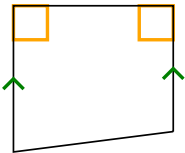
7. _____

8. _____

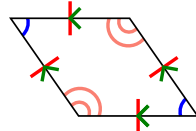
9. _____

10. _____

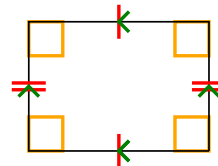
7)



8)



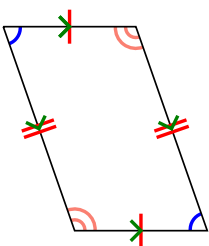
9)



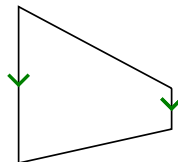
11. _____

12. _____

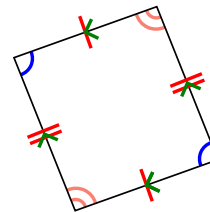
10)



11)



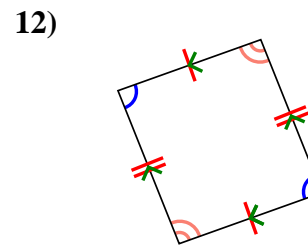
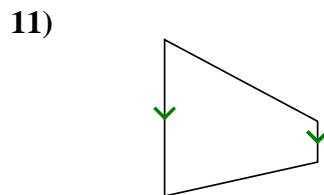
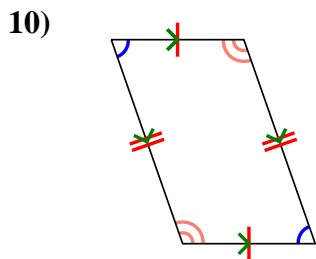
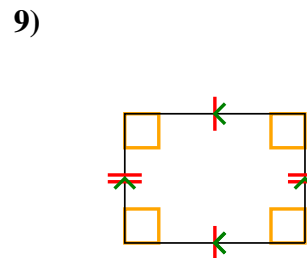
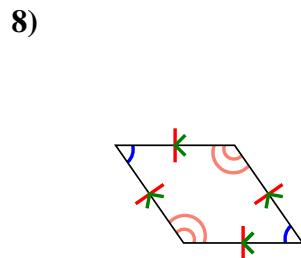
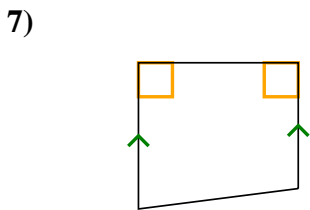
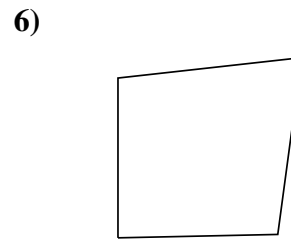
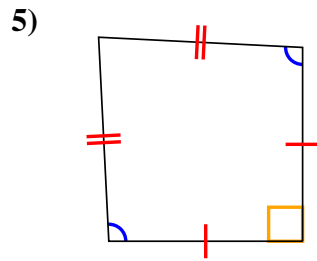
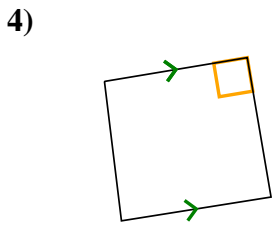
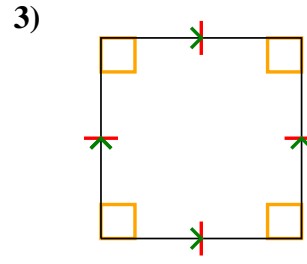
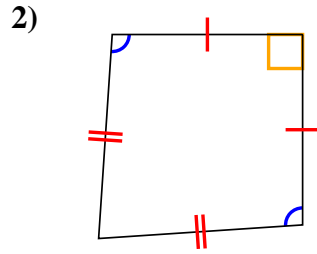
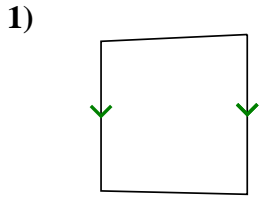
12)





Determine if the shape shown is a Quadrilateral, Kite, Trapezoid, Parallelogram, Rhombus, Rectangle or Square (can be more than one).

Answers



1. Q,T

2. Q,K

3. Q,P,H,R,S

4. Q,T

5. Q,K

6. Q

7. Q,T

8. Q,P,H

9. Q,P,R

10. Q,P

11. Q,T

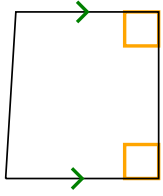
12. Q,P



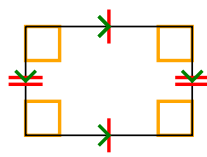
Determine if the shape shown is a Quadrilateral, Kite, Trapezoid, Parallelogram, Rhombus, Rectangle or Square (can be more than one).

Answers


1)



2)



3)



1. _____

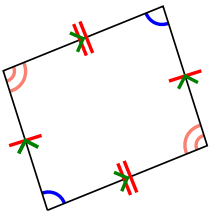
2. _____

3. _____

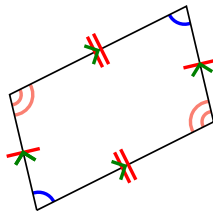
4. _____

5. _____

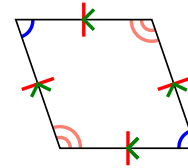
4)



5)



6)



6. _____

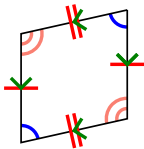
7. _____

8. _____

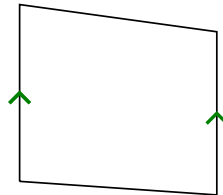
9. _____

10. _____

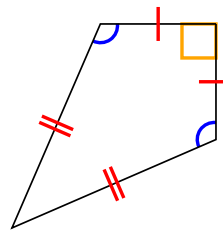
7)



8)



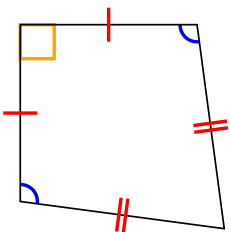
9)



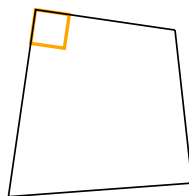
11. _____

12. _____


10)



11)



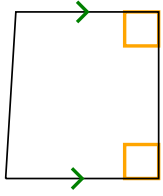
12)



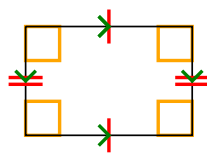


Determine if the shape shown is a Quadrilateral, Kite, Trapezoid, Parallelogram, Rhombus, Rectangle or Square (can be more than one).


1)



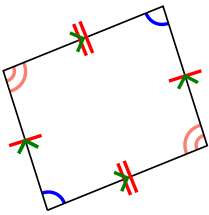
2)



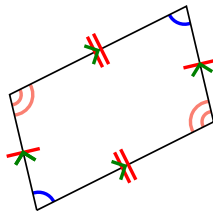
3)



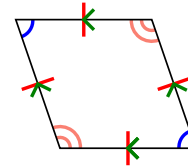
4)



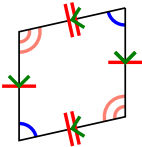
5)



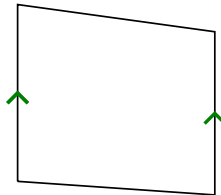
6)



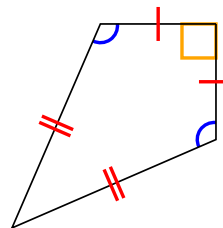
7)



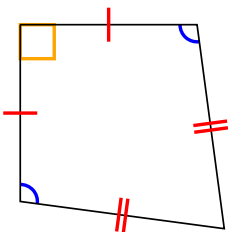
8)



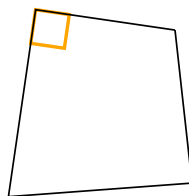
9)




10)



11)



12)



Answers

1. Q,T

2. Q,P,R

3. Q

4. Q,P

5. Q,P

6. Q,P,H

7. Q,P

8. Q,T

9. Q,K

10. Q,K

11. Q

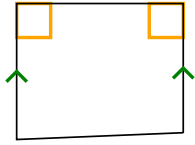
12. Q



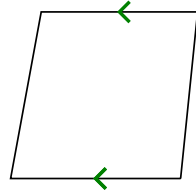
Determine if the shape shown is a Quadrilateral, Kite, Trapezoid, Parallelogram, Rhombus, Rectangle or Square (can be more than one).

Answers


1)



2)



3)



1. _____

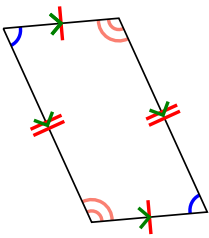
2. _____

3. _____

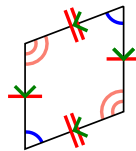
4. _____

5. _____

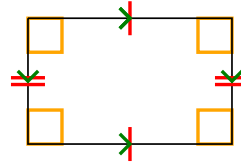
4)



5)



6)



6. _____

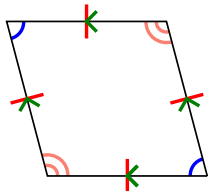
7. _____

8. _____

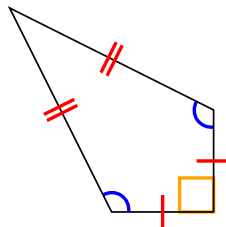
9. _____

10. _____

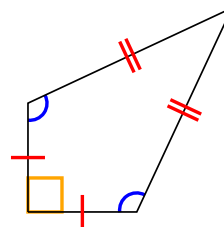
7)



8)



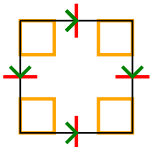
9)



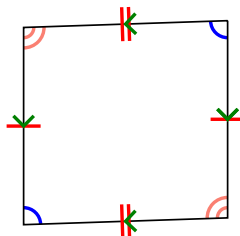
11. _____

12. _____


10)



11)

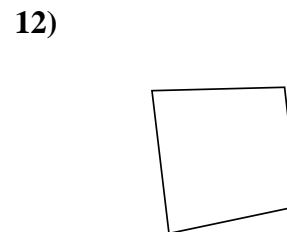
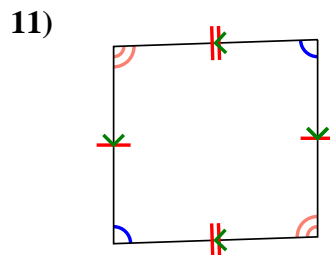
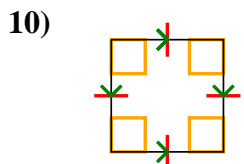
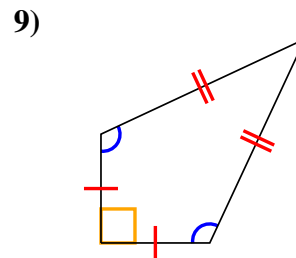
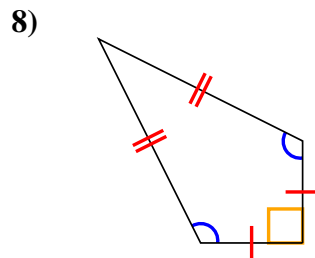
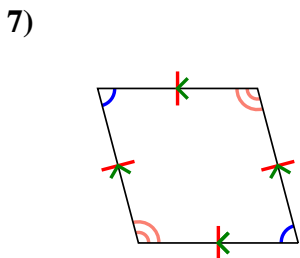
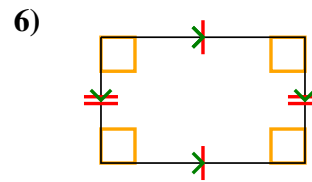
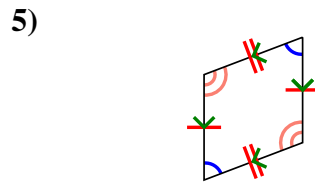
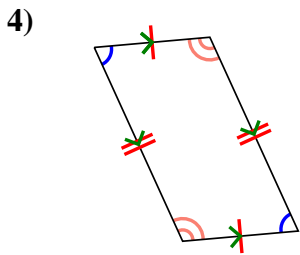
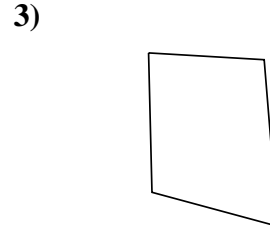
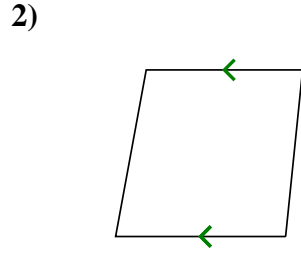
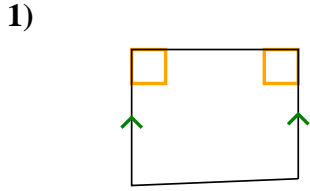


12)





Determine if the shape shown is a Quadrilateral, Kite, Trapezoid, Parallelogram, Rhombus, Rectangle or Square (can be more than one).



Answers

1. Q,T

2. Q,T

3. Q

4. Q,P

5. Q,P

6. Q,P,R

7. Q,P,H

8. Q,K

9. Q,K

10. Q,P,H,R,S

11. Q,P

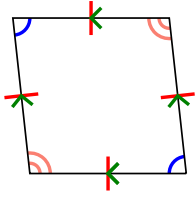
12. Q



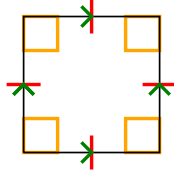
Determine if the shape shown is a Quadrilateral, Kite, Trapezoid, Parallelogram, Rhombus, Rectangle or Square (can be more than one).

Answers

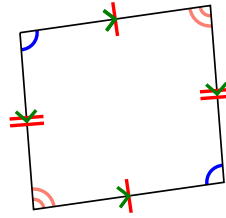
1)



2)



3)



1. _____


2. _____

3. _____

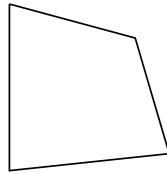
4. _____

5. _____

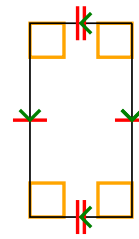
4)



5)



6)



6. _____

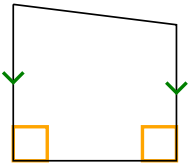
7. _____

8. _____

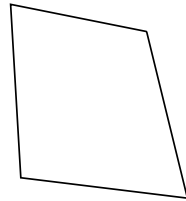
9. _____

10. _____

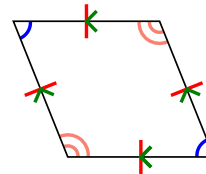
7)



8)



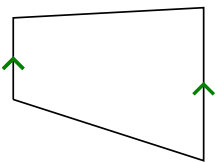
9)



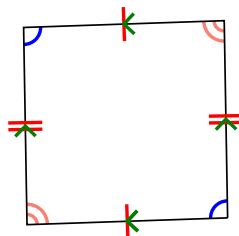
11. _____

12. _____

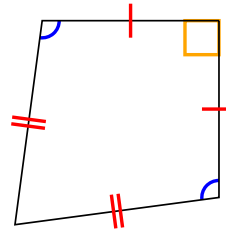
10)



11)

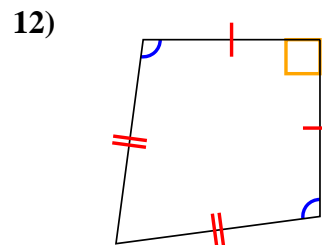
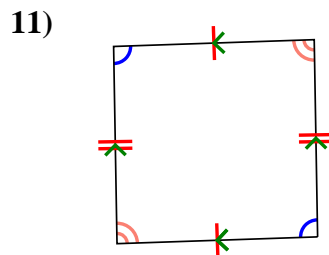
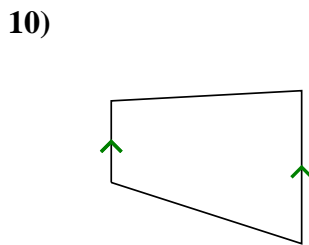
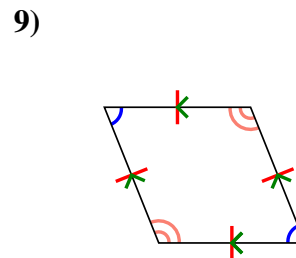
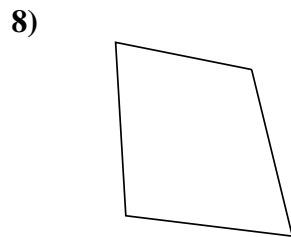
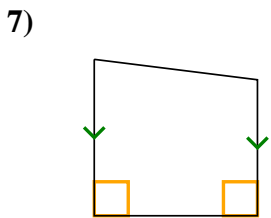
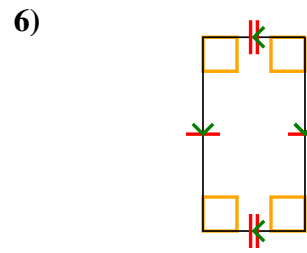
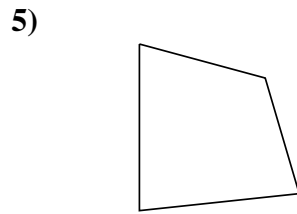
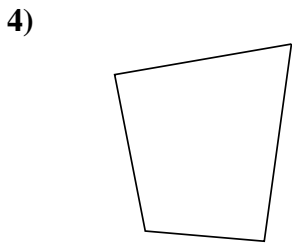
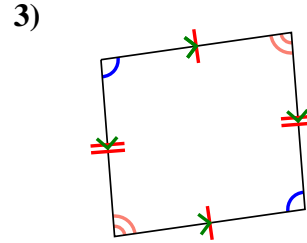
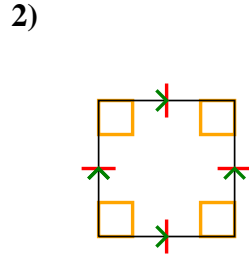
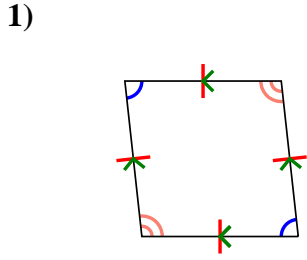


12)





Determine if the shape shown is a Quadrilateral, Kite, Trapezoid, Parallelogram, Rhombus, Rectangle or Square (can be more than one).



Answers

1. Q,P,H

2. Q,P,H,R,S

3. Q,P

4. Q

5. Q

6. Q,P,R

7. Q,T

8. Q

9. Q,P,H

10. Q,T

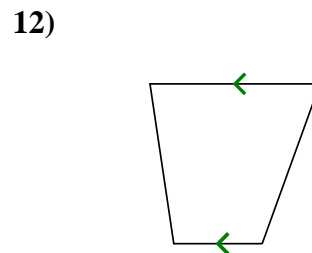
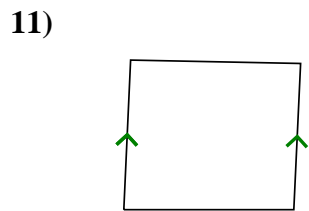
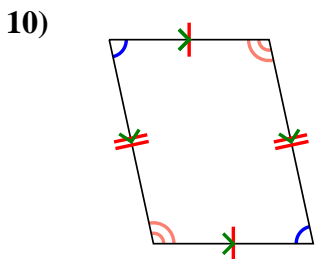
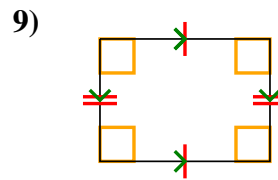
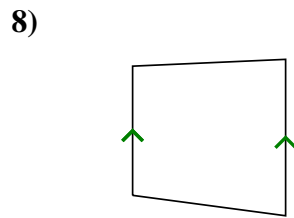
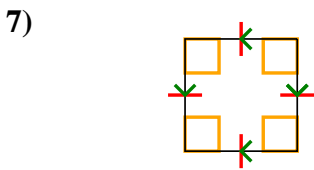
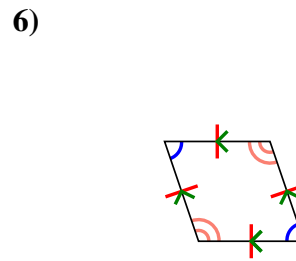
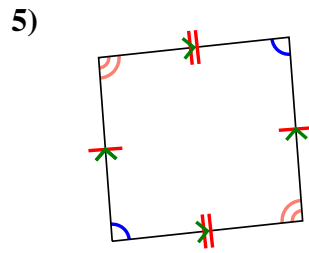
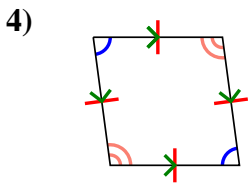
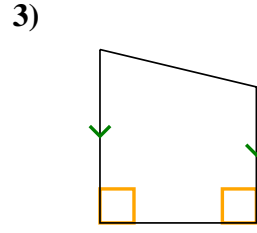
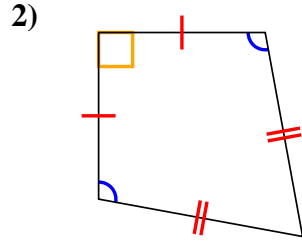
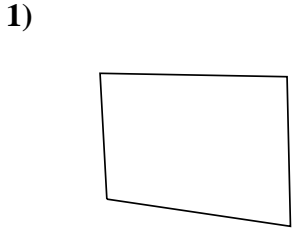
11. Q,P

12. Q,K



Determine if the shape shown is a Quadrilateral, Kite, Trapezoid, Parallelogram, Rhombus, Rectangle or Square (can be more than one).

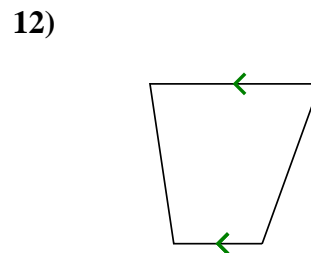
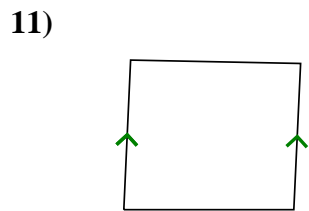
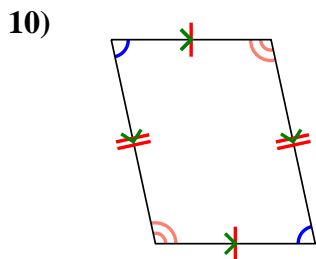
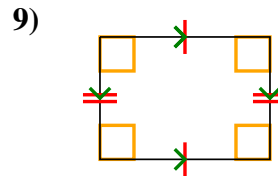
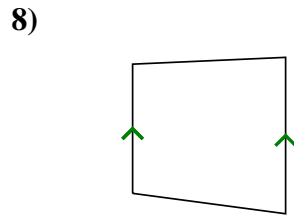
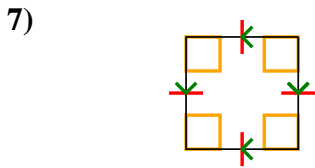
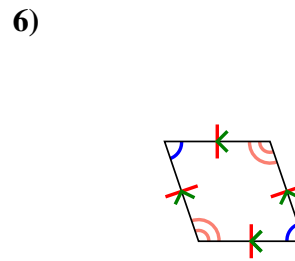
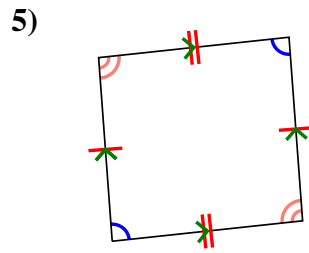
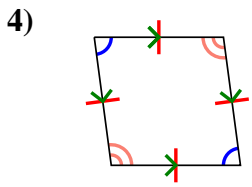
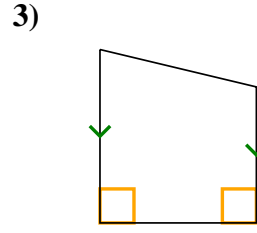
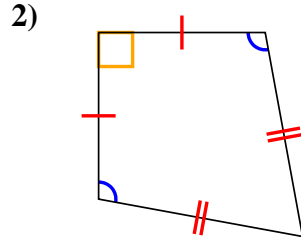

Answers



1. _____
2. _____
3. _____
4. _____
5. _____
6. _____
7. _____
8. _____
9. _____
10. _____
11. _____
12. _____



Determine if the shape shown is a Quadrilateral, Kite, Trapezoid, Parallelogram, Rhombus, Rectangle or Square (can be more than one).



Answers

1. Q

2. Q,K

3. Q,T

4. Q,P,H

5. Q,P

6. Q,P,H

7. Q,P,H,R,S

8. Q,T

9. Q,P,R

10. Q,P

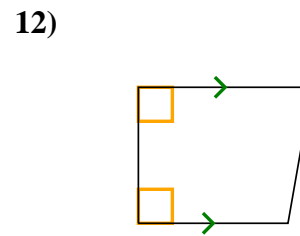
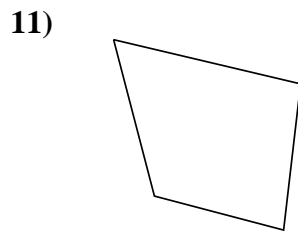
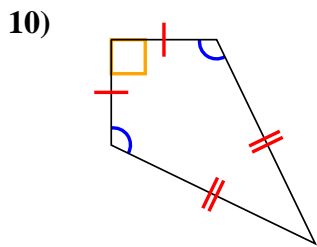
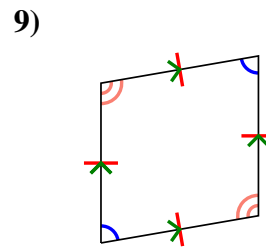
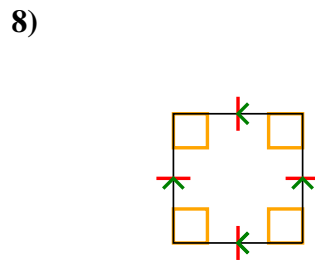
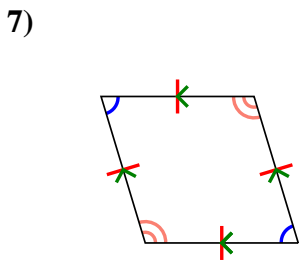
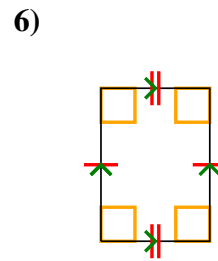
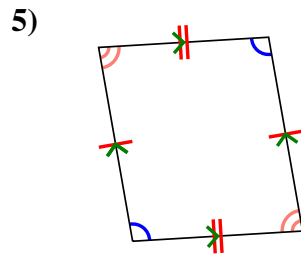
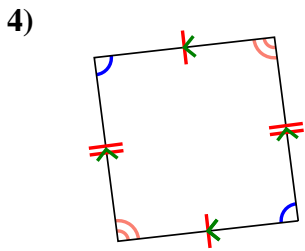
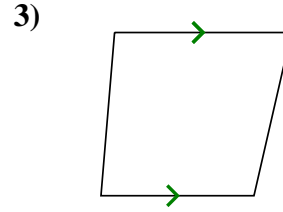
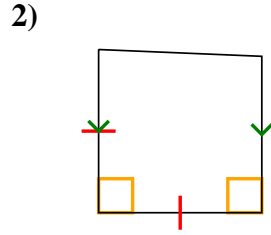
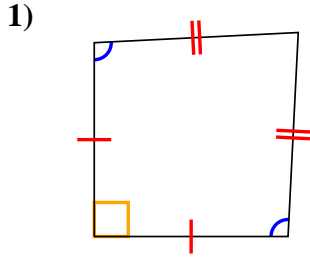
11. Q,T

12. Q,T



Determine if the shape shown is a Quadrilateral, Kite, Trapezoid, Parallelogram, Rhombus, Rectangle or Square (can be more than one).

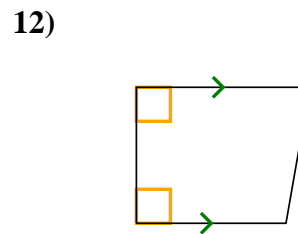
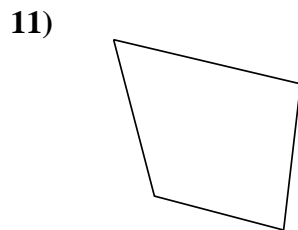
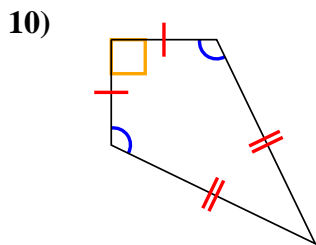
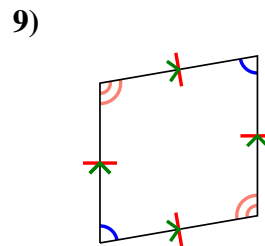
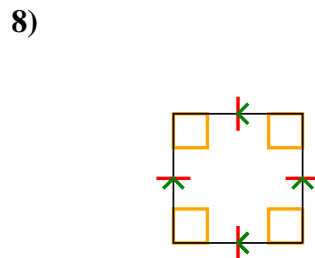
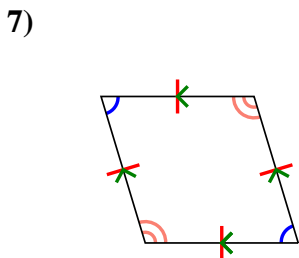
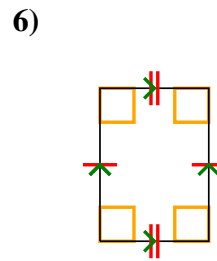
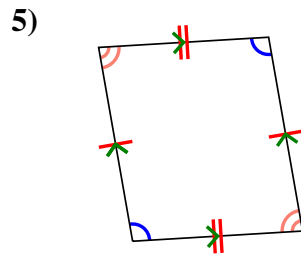
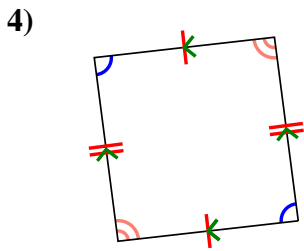
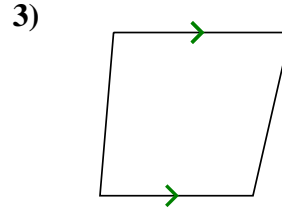
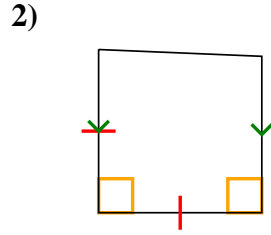
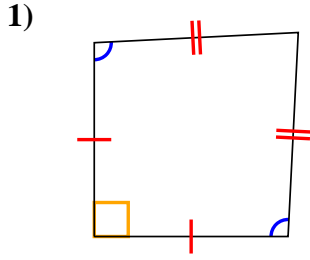
Answers



1. _____
2. _____
3. _____
4. _____
5. _____
6. _____
7. _____
8. _____
9. _____
10. _____
11. _____
12. _____



Determine if the shape shown is a Quadrilateral, Kite, Trapezoid, Parallelogram, Rhombus, Rectangle or Square (can be more than one).



Answers

1. Q,K

2. Q,T

3. Q,T

4. Q,P

5. Q,P

6. Q,P,R

7. Q,P,H

8. Q,P,H,R,S

9. Q,P,H

10. Q,K

11. Q

12. Q,T