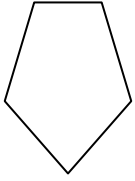




Determine which letter BEST represents the shapes that were used to create the figure shown.

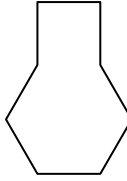
**Answers**

1)



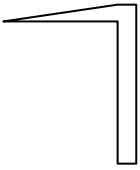
- A. hexagon & triangle
- B. quadrilateral & triangle
- C. rectangle & pentagon
- D. rectangle & octagon

2)



- A. pentagon & square
- B. square & heptagon
- C. hexagon & square
- D. square & triangle

3)




- A. quadrilateral & triangle
- B. square & quadrilateral
- C. heptagon & octagon
- D. hexagon & heptagon

4)



- A. rectangle & square
- B. hexagon & square
- C. quadrilateral & octagon
- D. rectangle & triangle

5)



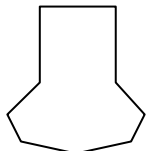
- A. triangle & triangle
- B. rectangle & hexagon
- C. pentagon & quadrilateral
- D. rectangle & quadrilateral

6)



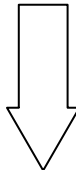
- A. quadrilateral & hexagon
- B. quadrilateral & heptagon
- C. hexagon & quadrilateral
- D. quadrilateral & triangle

7)



- A. heptagon & rectangle
- B. square & rectangle
- C. heptagon & quadrilateral
- D. pentagon & octagon

8)



- A. hexagon & octagon
- B. octagon & square
- C. triangle & pentagon
- D. rectangle & triangle

- 1. \_\_\_\_\_
- 2. \_\_\_\_\_
- 3. \_\_\_\_\_
- 4. \_\_\_\_\_
- 5. \_\_\_\_\_
- 6. \_\_\_\_\_
- 7. \_\_\_\_\_
- 8. \_\_\_\_\_

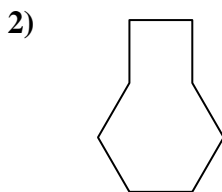


Determine which letter BEST represents the shapes that were used to create the figure shown.

**Answers**



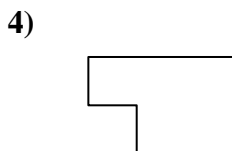
- A. hexagon & triangle
- B. quadrilateral & triangle
- C. rectangle & pentagon
- D. rectangle & octagon



- A. pentagon & square
- B. square & heptagon
- C. hexagon & square
- D. square & triangle



- A. quadrilateral & triangle
- B. square & quadrilateral
- C. heptagon & octagon
- D. hexagon & heptagon



- A. rectangle & square
- B. hexagon & square
- C. quadrilateral & octagon
- D. rectangle & triangle



- A. triangle & triangle
- B. rectangle & hexagon
- C. pentagon & quadrilateral
- D. rectangle & quadrilateral



- A. quadrilateral & hexagon
- B. quadrilateral & heptagon
- C. hexagon & quadrilateral
- D. quadrilateral & triangle



- A. heptagon & rectangle
- B. square & rectangle
- C. heptagon & quadrilateral
- D. pentagon & octagon



- A. hexagon & octagon
- B. octagon & square
- C. triangle & pentagon
- D. rectangle & triangle

- 1. **B**
- 2. **C**
- 3. **A**
- 4. **A**
- 5. **A**
- 6. **C**
- 7. **C**
- 8. **D**