



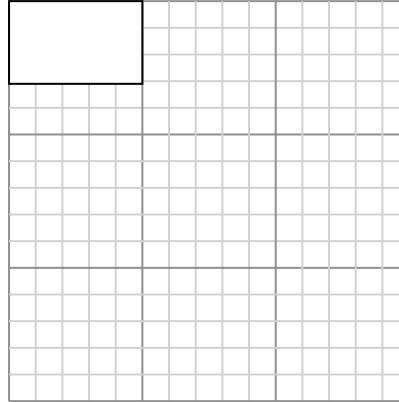
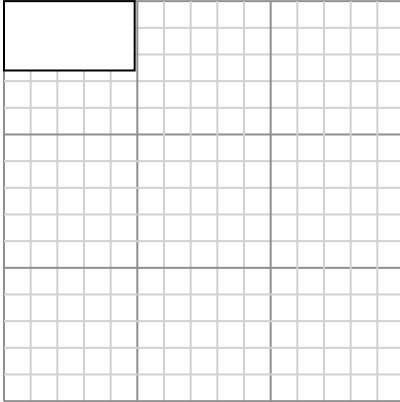
Draw each rectangle to the scale shown and determine the new dimensions.

Answers

- 1) The rectangle below has the dimensions:  
 $4.9 \times 2.6$

- 2) The rectangle below has the dimensions:  
 $5 \times 3.1$

1. \_\_\_\_\_



2. \_\_\_\_\_

3. \_\_\_\_\_

4. \_\_\_\_\_

5. \_\_\_\_\_

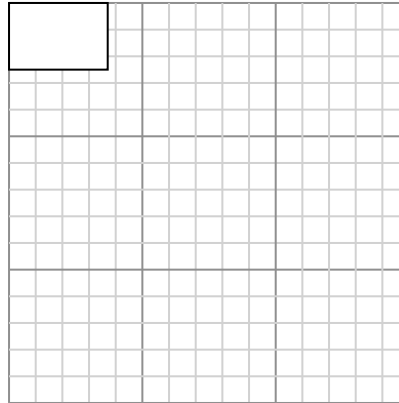
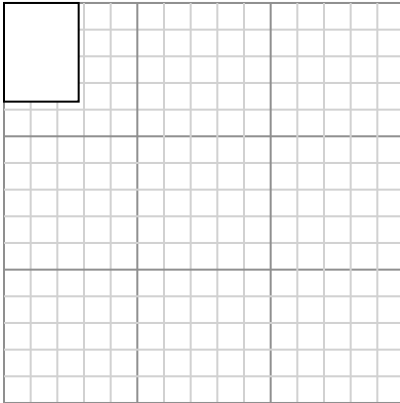
Create another rectangle that is scaled to 9 times the size of the current rectangle.

Create another rectangle that is scaled to 9 times the size of the current rectangle.

6. \_\_\_\_\_

- 3) The rectangle below has the dimensions:  
 $2.8 \times 3.7$

- 4) The rectangle below has the dimensions:  
 $3.7 \times 2.5$

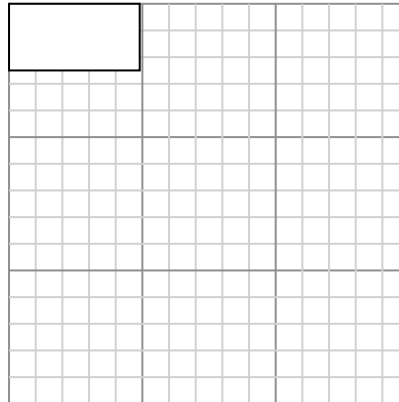
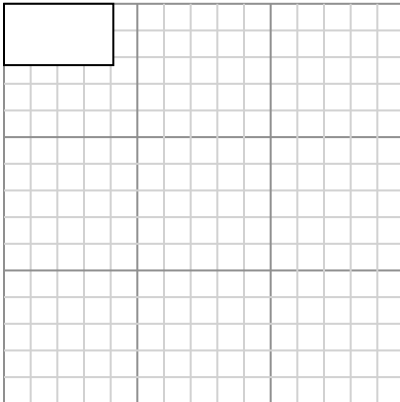


Create another rectangle that is scaled to 9 times the size of the current rectangle.

Create another rectangle that is scaled to 9 times the size of the current rectangle.

- 5) The rectangle below has the dimensions:  
 $4.1 \times 2.3$

- 6) The rectangle below has the dimensions:  
 $4.9 \times 2.5$



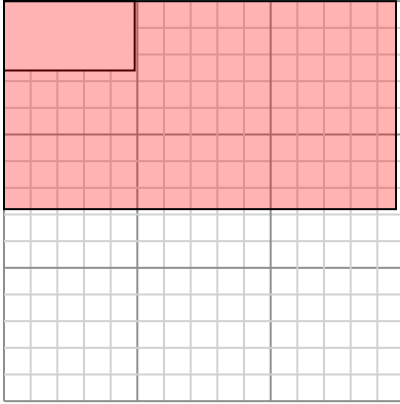
Create another rectangle that is scaled to 9 times the size of the current rectangle.

Create another rectangle that is scaled to 9 times the size of the current rectangle.



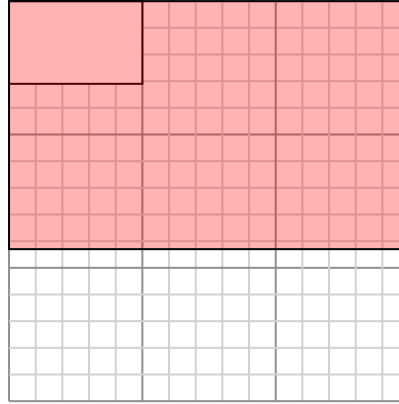
Draw each rectangle to the scale shown and determine the new dimensions.

- 1) The rectangle below has the dimensions:  
 $4.9 \times 2.6$



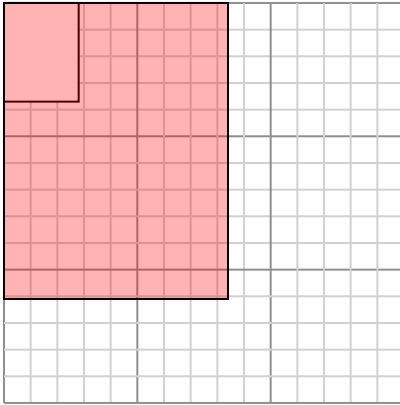
Create another rectangle that is scaled to 9 times the size of the current rectangle.

- 2) The rectangle below has the dimensions:  
 $5 \times 3.1$



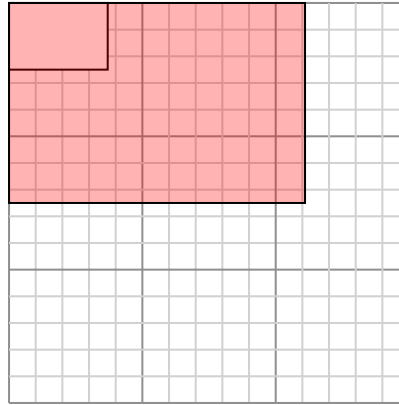
Create another rectangle that is scaled to 9 times the size of the current rectangle.

- 3) The rectangle below has the dimensions:  
 $2.8 \times 3.7$



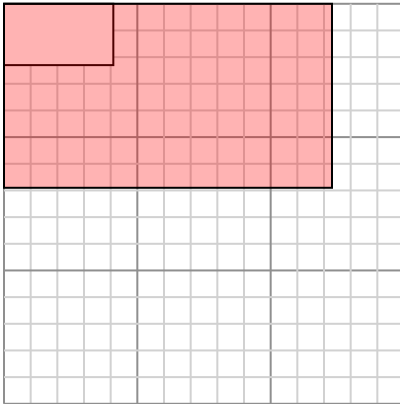
Create another rectangle that is scaled to 9 times the size of the current rectangle.

- 4) The rectangle below has the dimensions:  
 $3.7 \times 2.5$



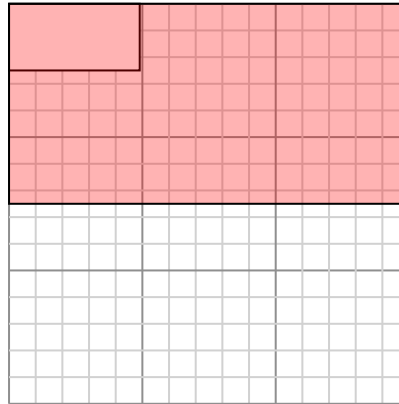
Create another rectangle that is scaled to 9 times the size of the current rectangle.

- 5) The rectangle below has the dimensions:  
 $4.1 \times 2.3$



Create another rectangle that is scaled to 9 times the size of the current rectangle.

- 6) The rectangle below has the dimensions:  
 $4.9 \times 2.5$



Create another rectangle that is scaled to 9 times the size of the current rectangle.

Answers

1.  $14.7 \times 7.8$

2.  $15 \times 9.3$

3.  $8.4 \times 11.1$

4.  $11.1 \times 7.5$

5.  $12.3 \times 6.9$

6.  $14.7 \times 7.5$