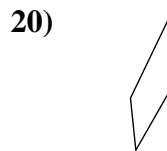
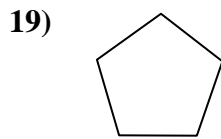
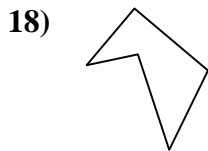
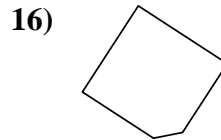
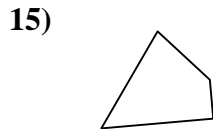
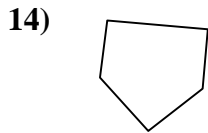
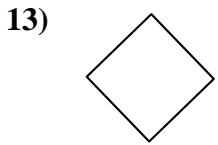
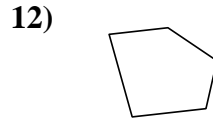
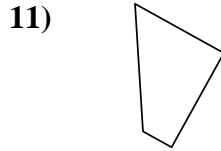
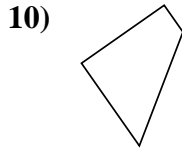
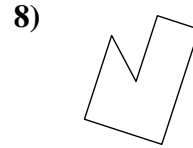
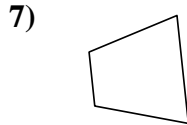
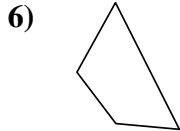
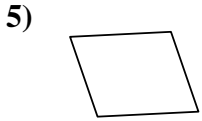
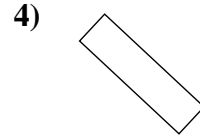
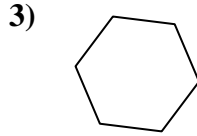
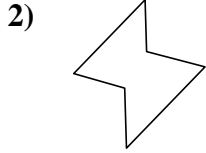
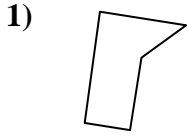




Determine if the shape shown is a quadrilateral (yes) or not (no).

Answers

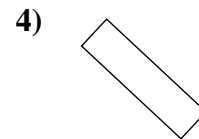
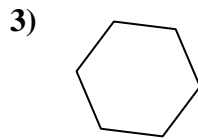
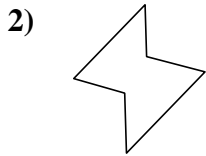
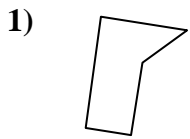


- 1. _____
- 2. _____
- 3. _____
- 4. _____
- 5. _____
- 6. _____
- 7. _____
- 8. _____
- 9. _____
- 10. _____
- 11. _____
- 12. _____
- 13. _____
- 14. _____
- 15. _____
- 16. _____
- 17. _____
- 18. _____
- 19. _____
- 20. _____



Determine if the shape shown is a quadrilateral (yes) or not (no).

Answers

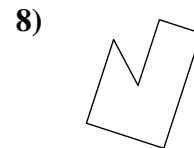
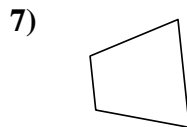
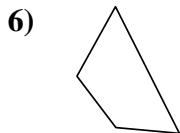
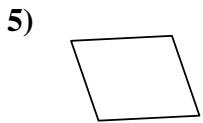


1. no

2. no

3. no

4. yes


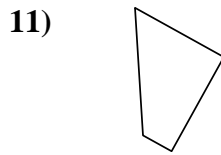
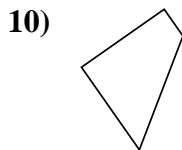


5. yes

6. yes

7. yes

8. no

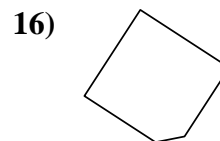
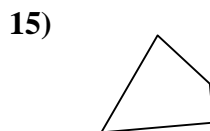
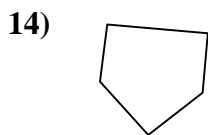
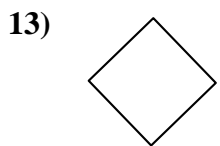


9. yes

10. yes

11. yes

12. no

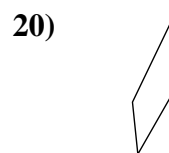
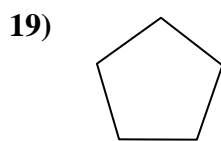
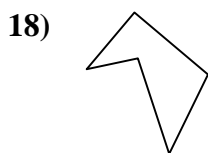


13. yes

14. no

15. yes

16. no



17. no

18. no

19. no

20. yes

20. yes