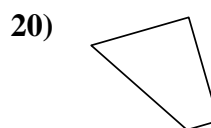
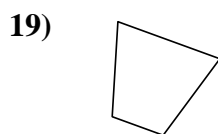
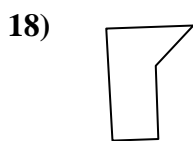
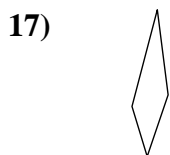
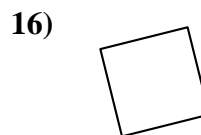
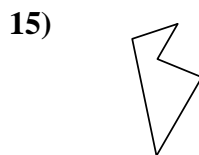
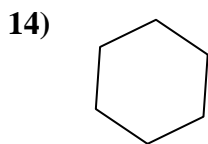
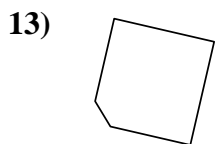
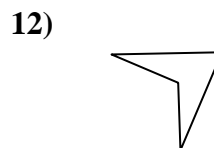
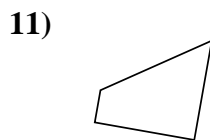
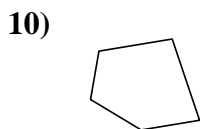
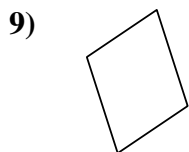
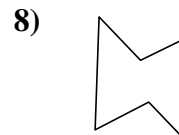
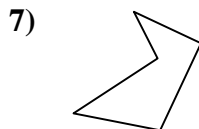
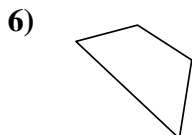
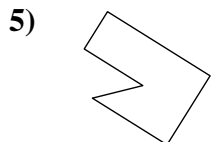
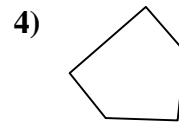
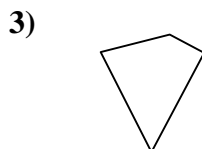
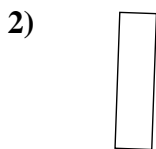
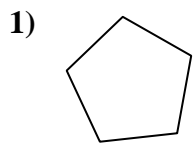




Determine if the shape shown is a quadrilateral (yes) or not (no).

Answers

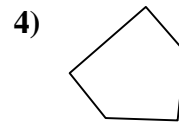
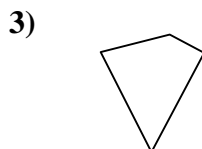
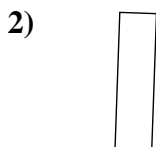
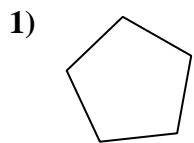


1. _____
2. _____
3. _____
4. _____
5. _____
6. _____
7. _____
8. _____
9. _____
10. _____
11. _____
12. _____
13. _____
14. _____
15. _____
16. _____
17. _____
18. _____
19. _____
20. _____



Determine if the shape shown is a quadrilateral (yes) or not (no).

Answers

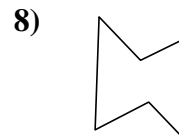
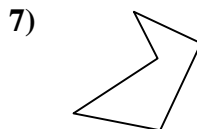
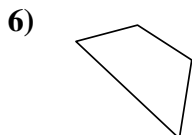
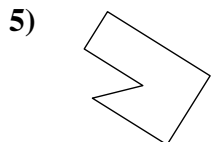


1. no

2. yes

3. yes

4. no

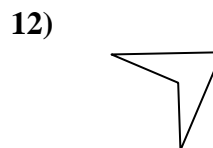
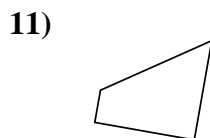
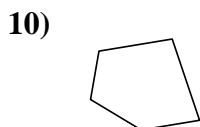
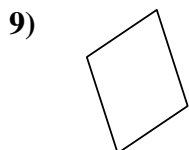


5. no

6. yes

7. no

8. no

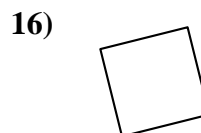
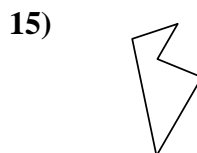
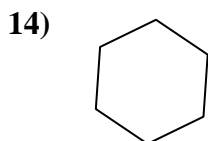
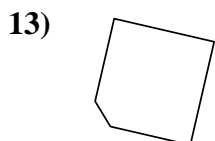


9. yes

10. no

11. yes

12. yes

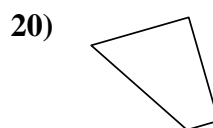
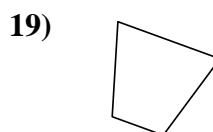
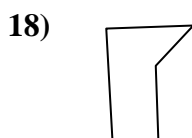
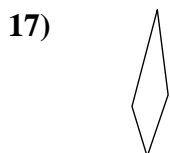


13. no

14. no

15. no

16. yes



17. yes

18. no

19. yes

20. yes