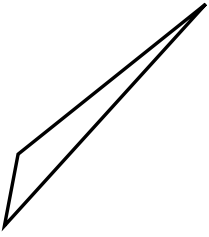




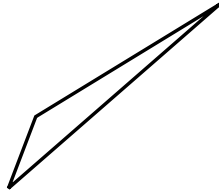
Determine if the triangle shown is a right triangle (yes) or not (no).

Answers

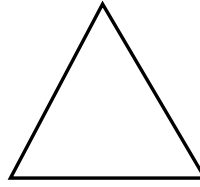
1)



2)



3)



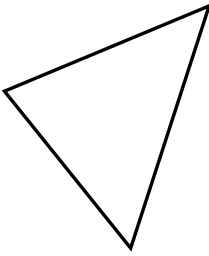
1. _____

2. _____

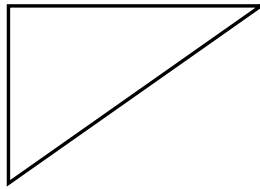
3. _____

4. _____


4)



5)



6)




5. _____

6. _____

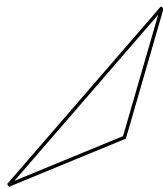
7. _____

8. _____


7)



8)



9)



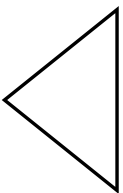
9. _____

10. _____

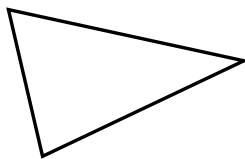
11. _____

12. _____

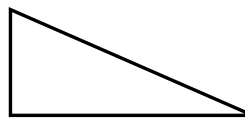
10)



11)



12)

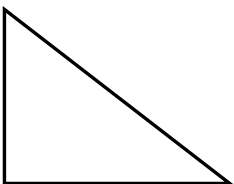


13. _____

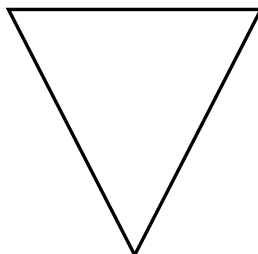
14. _____

15. _____

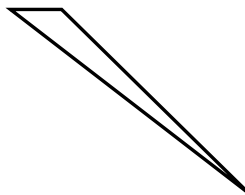
13)



14)



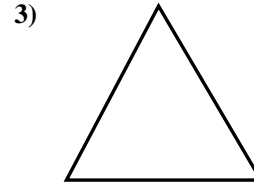
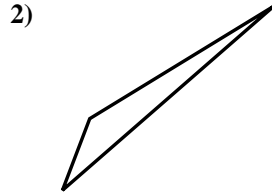
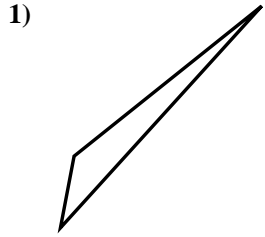
15)





Determine if the triangle shown is a right triangle (yes) or not (no).

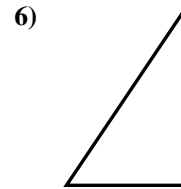
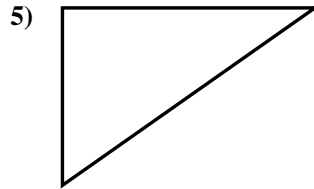
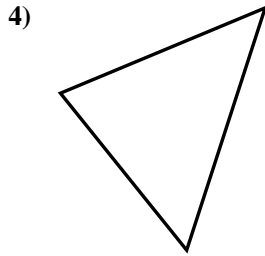
Answers



1. no

2. no

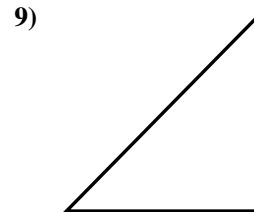
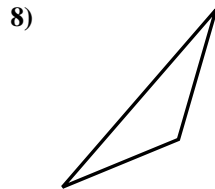
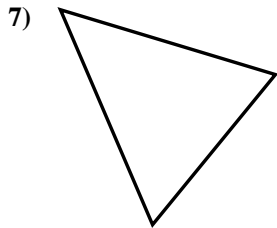
3. no



4. no

5. yes

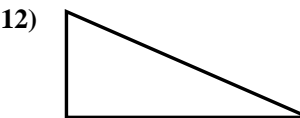

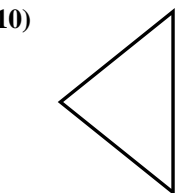
6. yes



7. no

8. no

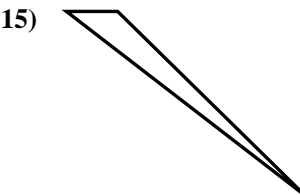
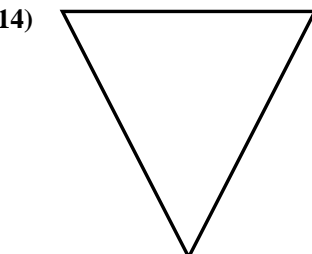
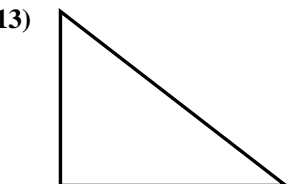
9. yes



10. no

11. no

12. yes



13. yes

14. no

15. no