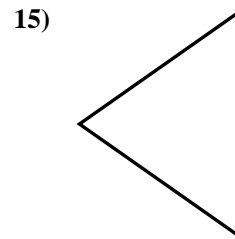
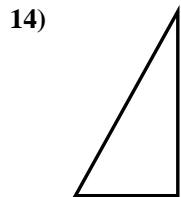
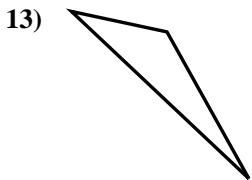
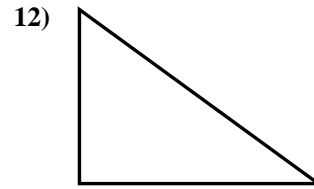
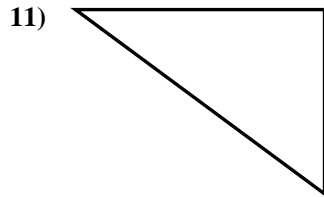
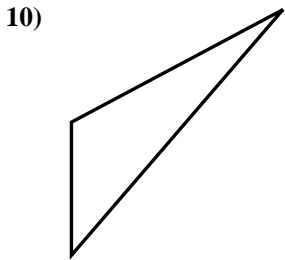
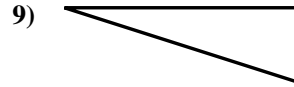
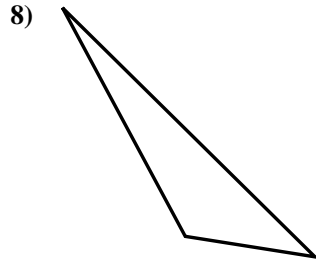
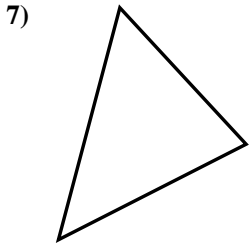
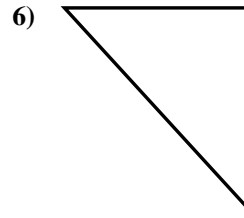
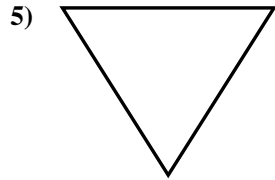
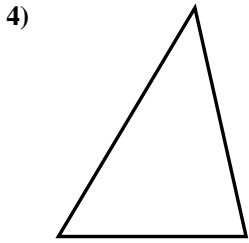
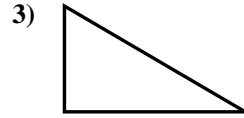
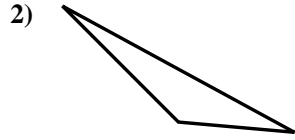
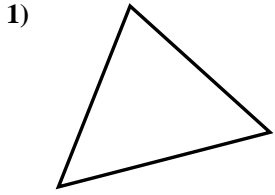




Determine if the triangle shown is a right triangle (yes) or not (no).

Answers

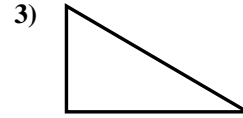
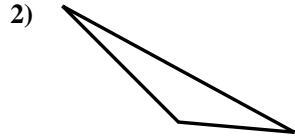
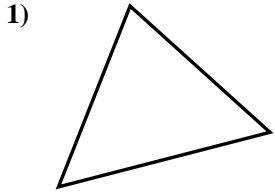


- 1. \_\_\_\_\_
- 2. \_\_\_\_\_
- 3. \_\_\_\_\_
- 4. \_\_\_\_\_
- 5. \_\_\_\_\_
- 6. \_\_\_\_\_
- 7. \_\_\_\_\_
- 8. \_\_\_\_\_
- 9. \_\_\_\_\_
- 10. \_\_\_\_\_
- 11. \_\_\_\_\_
- 12. \_\_\_\_\_
- 13. \_\_\_\_\_
- 14. \_\_\_\_\_
- 15. \_\_\_\_\_



Determine if the triangle shown is a right triangle (yes) or not (no).

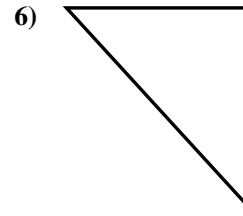
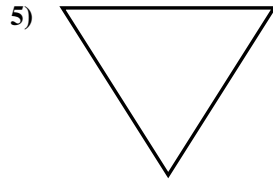
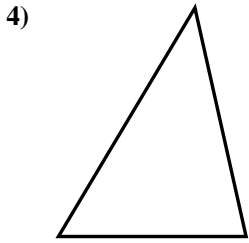
Answers



1. no

2. no

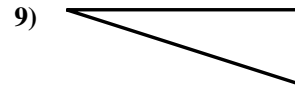
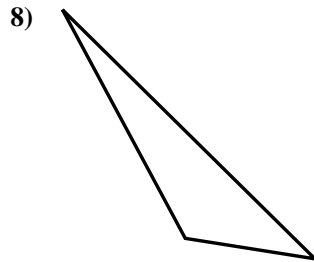
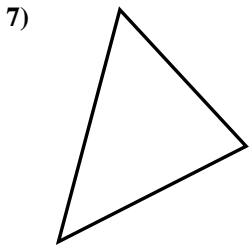
3. yes



4. no

5. no

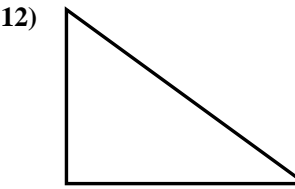
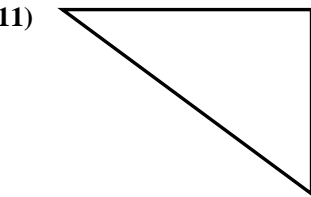
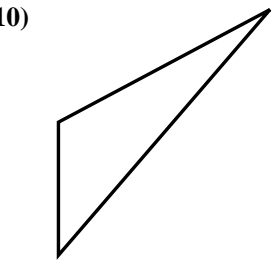
6. yes



7. no

8. no

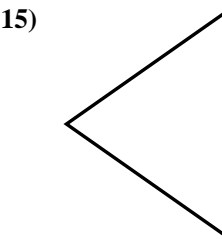
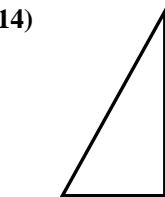
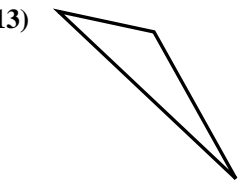
9. yes



10. no

11. yes

12. yes



13. no

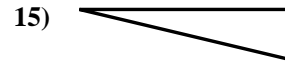
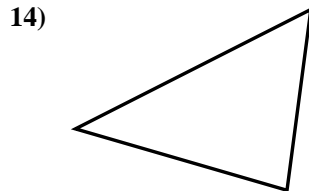
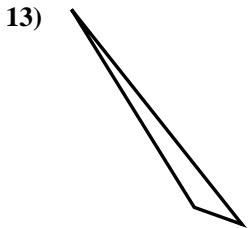
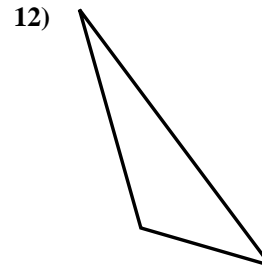
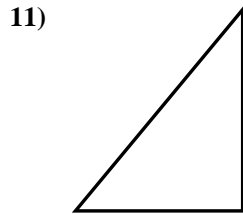
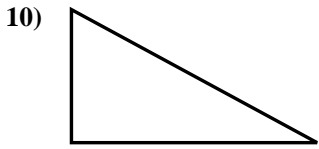
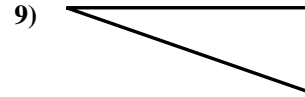
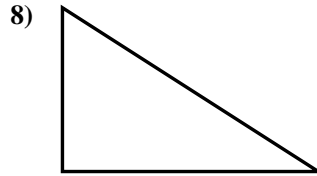
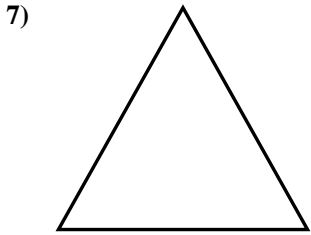
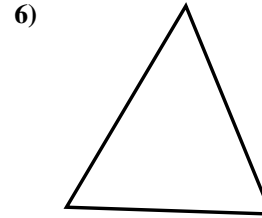

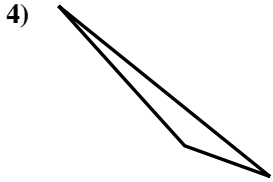
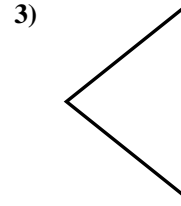
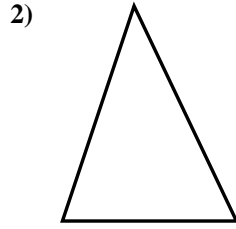
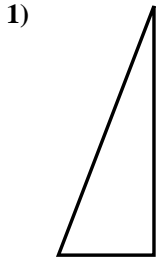
14. yes

15. no



Determine if the triangle shown is a right triangle (yes) or not (no).

Answers

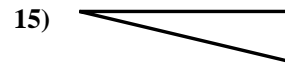
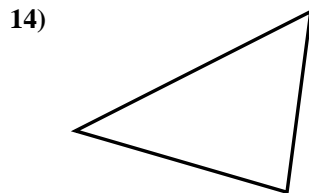
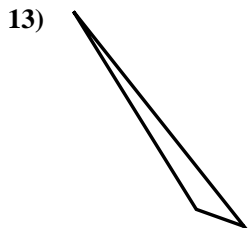
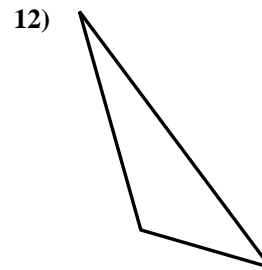
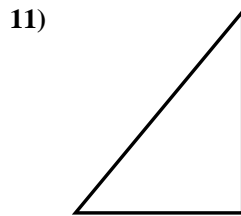
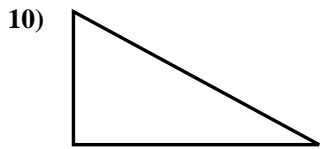
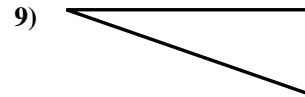
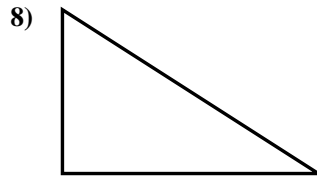
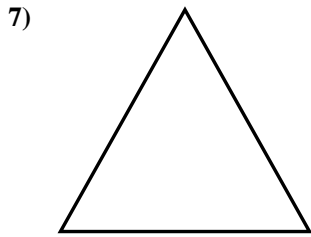
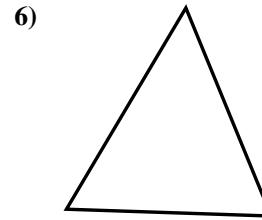

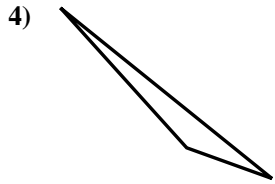
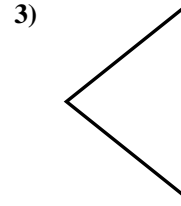
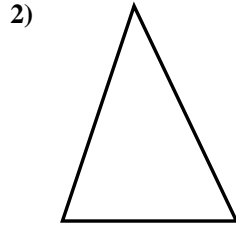
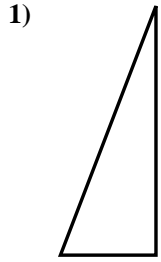


- 1. \_\_\_\_\_
- 2. \_\_\_\_\_
- 3. \_\_\_\_\_
- 4. \_\_\_\_\_
- 5. \_\_\_\_\_
- 6. \_\_\_\_\_
- 7. \_\_\_\_\_
- 8. \_\_\_\_\_
- 9. \_\_\_\_\_
- 10. \_\_\_\_\_
- 11. \_\_\_\_\_
- 12. \_\_\_\_\_
- 13. \_\_\_\_\_
- 14. \_\_\_\_\_
- 15. \_\_\_\_\_



Determine if the triangle shown is a right triangle (yes) or not (no).

Answers



1. yes

2. no

3. no

4. no

5. no

6. no

7. no

8. yes

9. yes

10. yes

11. yes

12. no

13. no

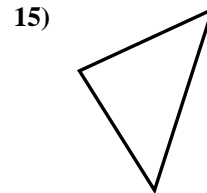

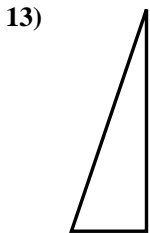
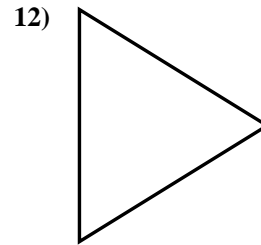
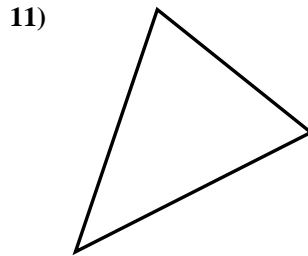
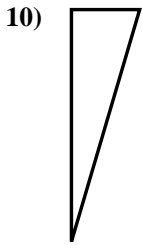
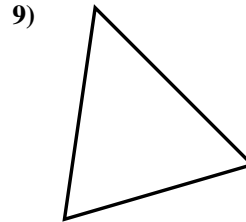
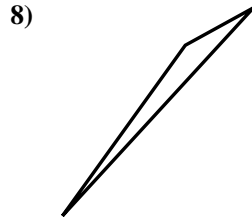
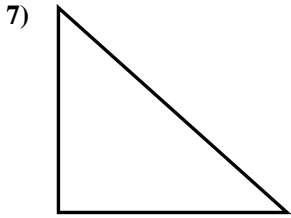
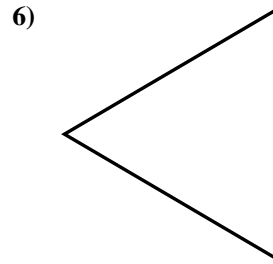
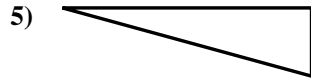
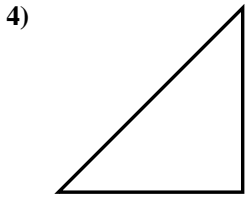
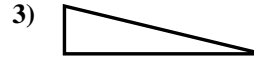
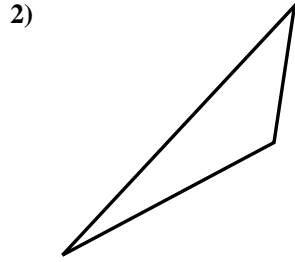
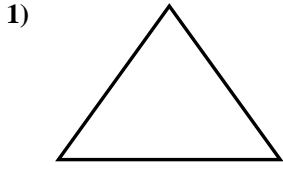
14. no

15. yes



Determine if the triangle shown is a right triangle (yes) or not (no).

Answers

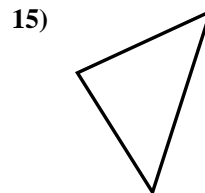

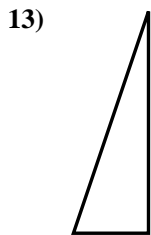
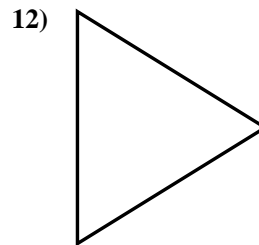
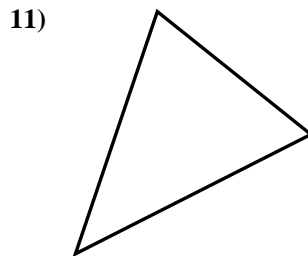
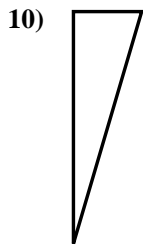
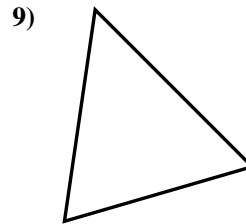
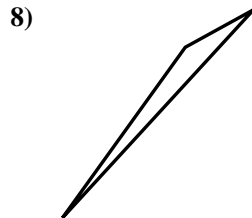
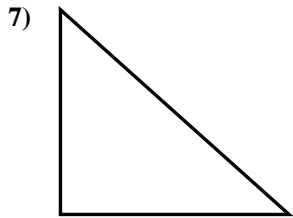
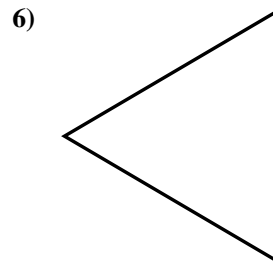
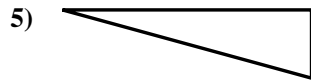
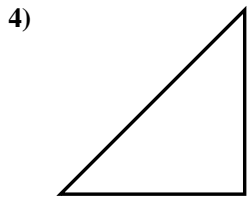
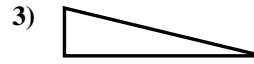
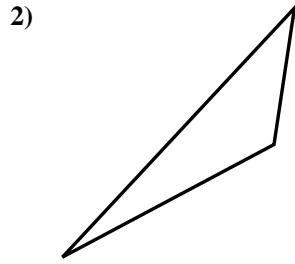
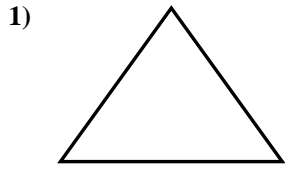


- 1. \_\_\_\_\_
- 2. \_\_\_\_\_
- 3. \_\_\_\_\_
- 4. \_\_\_\_\_
- 5. \_\_\_\_\_
- 6. \_\_\_\_\_
- 7. \_\_\_\_\_
- 8. \_\_\_\_\_
- 9. \_\_\_\_\_
- 10. \_\_\_\_\_
- 11. \_\_\_\_\_
- 12. \_\_\_\_\_
- 13. \_\_\_\_\_
- 14. \_\_\_\_\_
- 15. \_\_\_\_\_



Determine if the triangle shown is a right triangle (yes) or not (no).

Answers



1. no

2. no

3. yes

4. yes

5. yes

6. no

7. yes

8. no

9. no

10. yes

11. no

12. no

13. yes

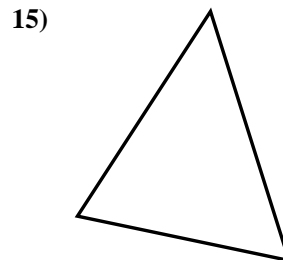
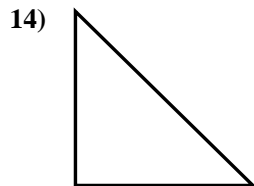
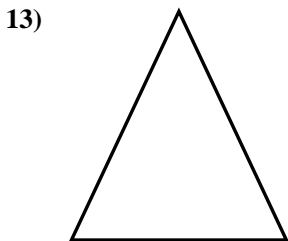
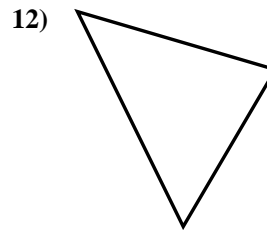
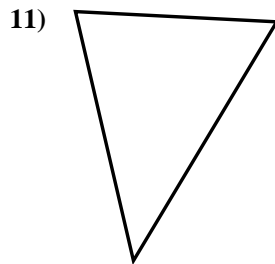
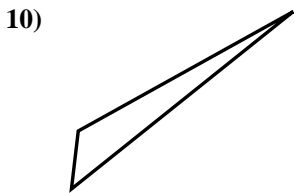
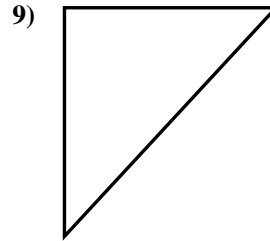
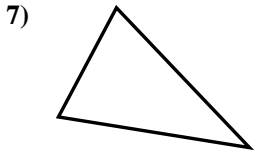
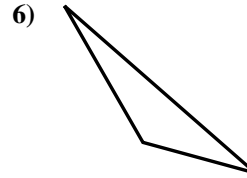
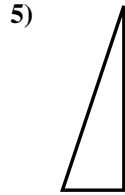
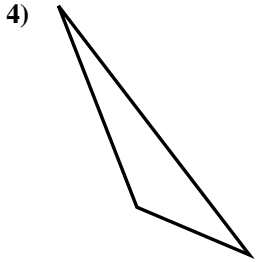
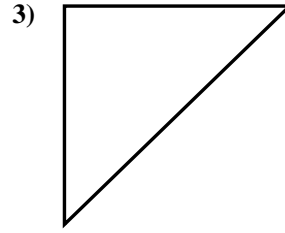
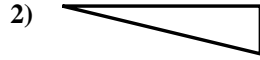
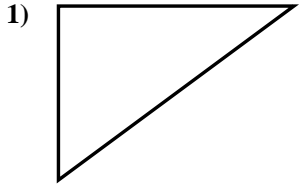
14. no

15. no



Determine if the triangle shown is a right triangle (yes) or not (no).

Answers

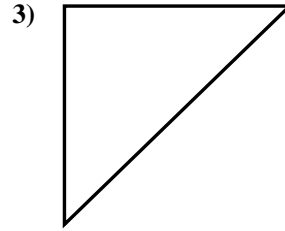
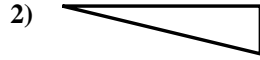
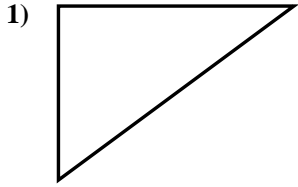


- 1. \_\_\_\_\_
- 2. \_\_\_\_\_
- 3. \_\_\_\_\_
- 4. \_\_\_\_\_
- 5. \_\_\_\_\_
- 6. \_\_\_\_\_
- 7. \_\_\_\_\_
- 8. \_\_\_\_\_
- 9. \_\_\_\_\_
- 10. \_\_\_\_\_
- 11. \_\_\_\_\_
- 12. \_\_\_\_\_
- 13. \_\_\_\_\_
- 14. \_\_\_\_\_
- 15. \_\_\_\_\_

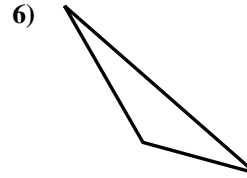
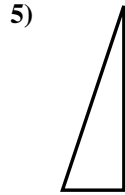
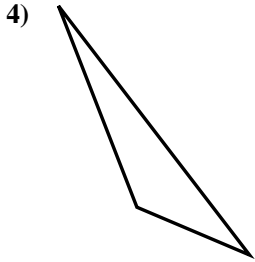


Determine if the triangle shown is a right triangle (yes) or not (no).

Answers



1. yes



2. yes

3. yes

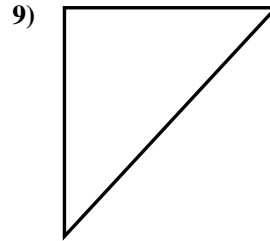
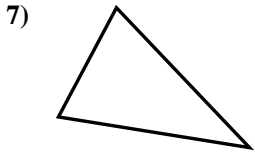
4. no

5. yes

6. no

7. no

8. yes

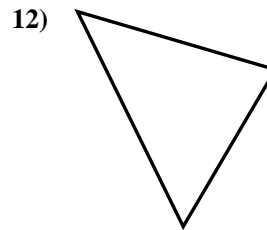
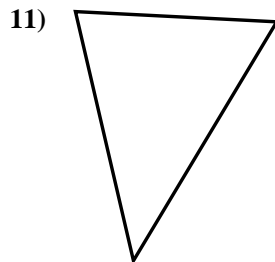
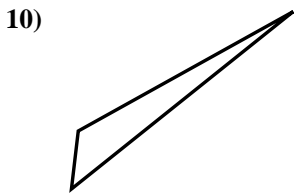


9. yes

10. no

11. no

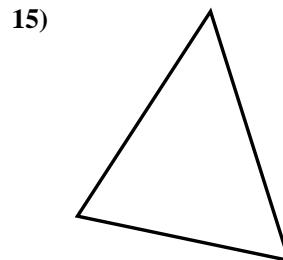
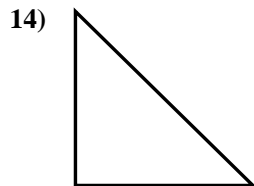
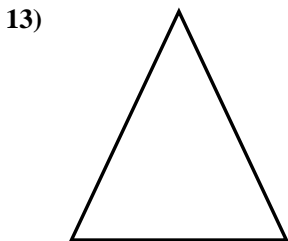
12. no



13. no

14. yes

15. no

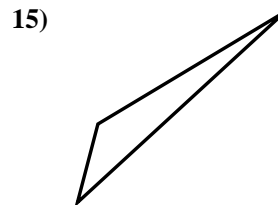
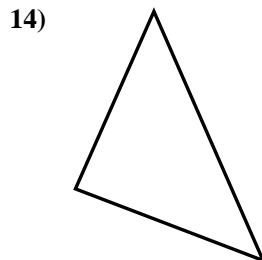
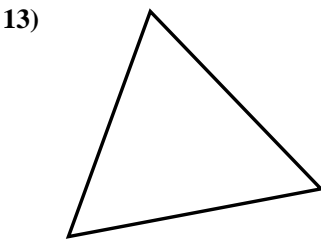

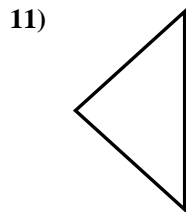
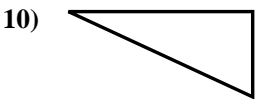
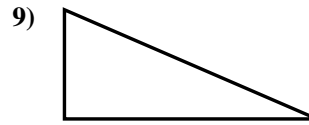
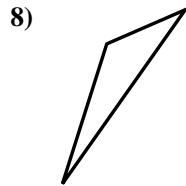

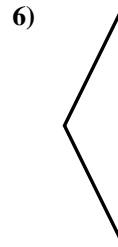

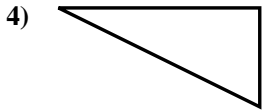
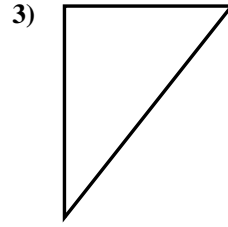







Determine if the triangle shown is a right triangle (yes) or not (no).

Answers

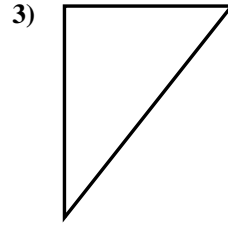



- 1. \_\_\_\_\_
- 2. \_\_\_\_\_
- 3. \_\_\_\_\_
- 4. \_\_\_\_\_
- 5. \_\_\_\_\_
- 6. \_\_\_\_\_
- 7. \_\_\_\_\_
- 8. \_\_\_\_\_
- 9. \_\_\_\_\_
- 10. \_\_\_\_\_
- 11. \_\_\_\_\_
- 12. \_\_\_\_\_
- 13. \_\_\_\_\_
- 14. \_\_\_\_\_
- 15. \_\_\_\_\_

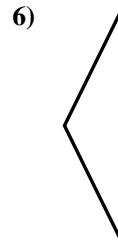

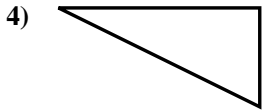


Determine if the triangle shown is a right triangle (yes) or not (no).

Answers



1. yes



2. yes

3. yes

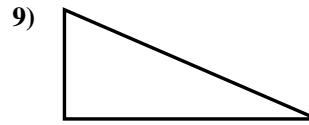
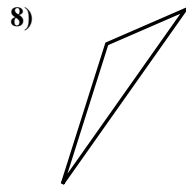

4. yes

5. no

6. no

7. no

8. no


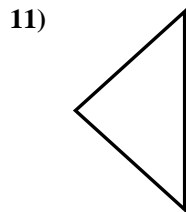
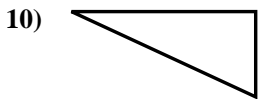


9. yes

10. yes

11. no

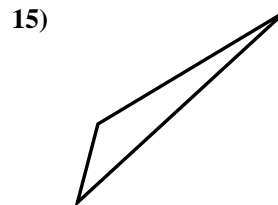
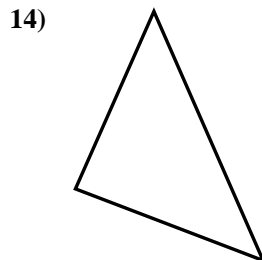
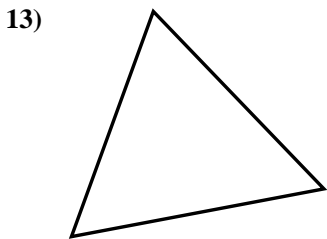
12. yes



13. no

14. yes

15. no

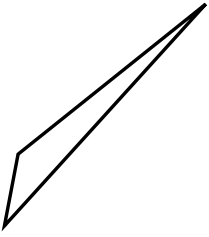




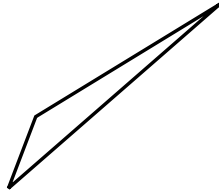
Determine if the triangle shown is a right triangle (yes) or not (no).

Answers

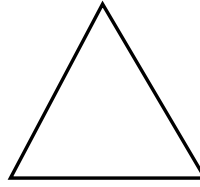
1)



2)



3)



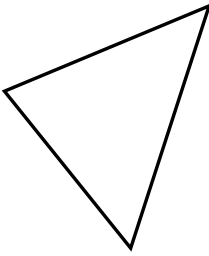
1. \_\_\_\_\_

2. \_\_\_\_\_

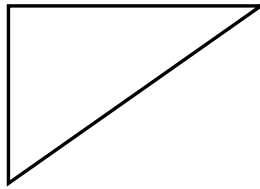
3. \_\_\_\_\_

4. \_\_\_\_\_


4)



5)



6)




5. \_\_\_\_\_

6. \_\_\_\_\_

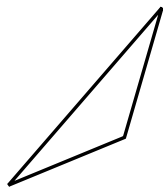
7. \_\_\_\_\_

8. \_\_\_\_\_


7)



8)



9)



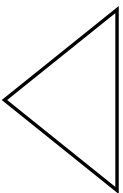
9. \_\_\_\_\_

10. \_\_\_\_\_

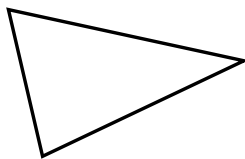
11. \_\_\_\_\_

12. \_\_\_\_\_

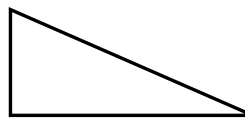
10)



11)



12)

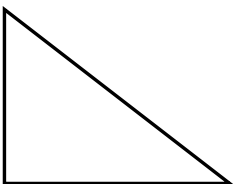


13. \_\_\_\_\_

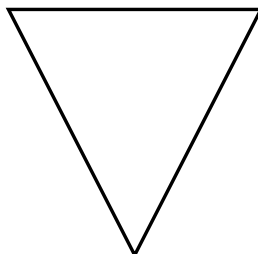
14. \_\_\_\_\_

15. \_\_\_\_\_

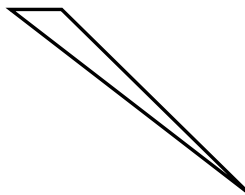
13)



14)



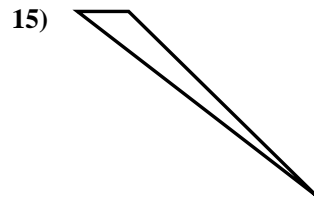
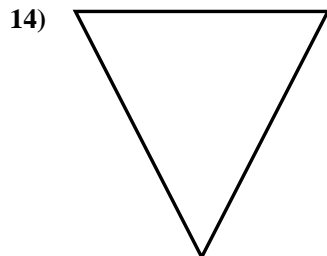
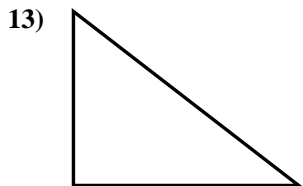
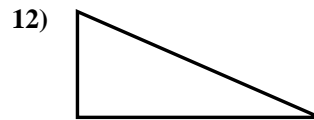
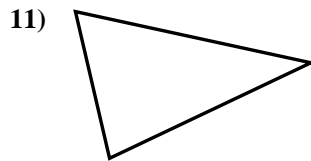
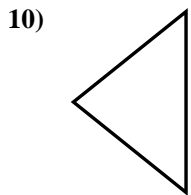
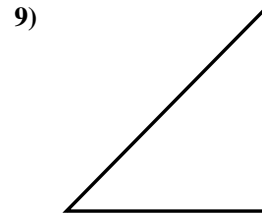
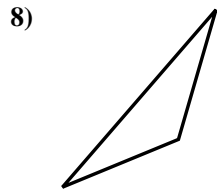
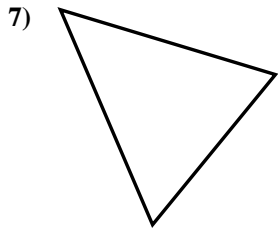
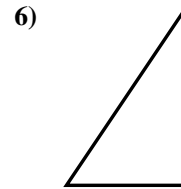
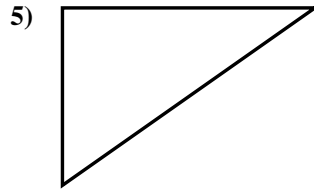
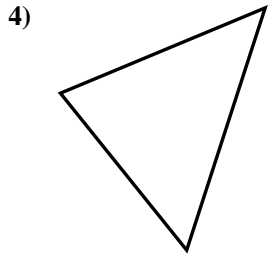
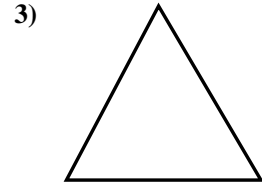
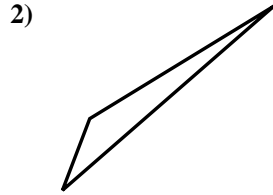
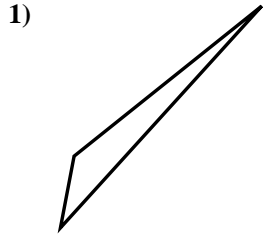
15)





Determine if the triangle shown is a right triangle (yes) or not (no).

Answers



1. no

2. no

3. no

4. no

5. yes

6. yes

7. no

8. no

9. yes

10. no

11. no

12. yes

13. yes

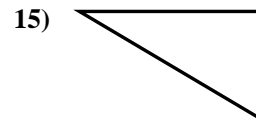
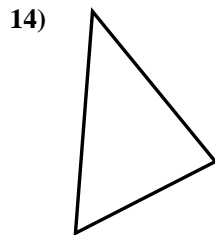
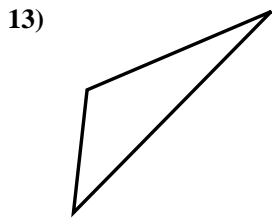
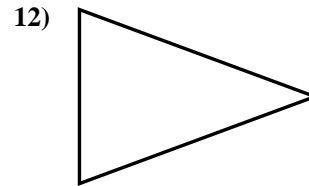
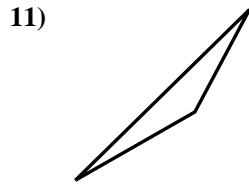
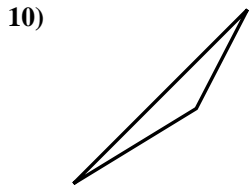
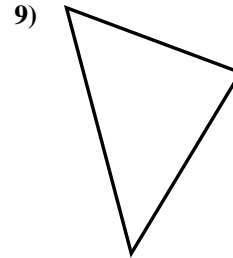
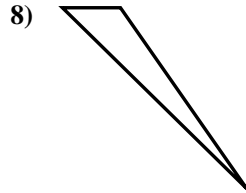
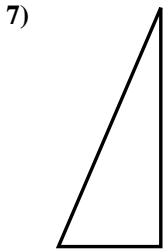
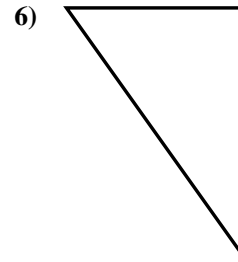
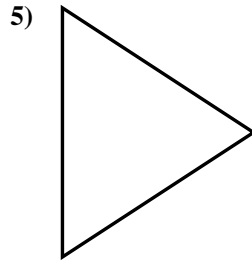
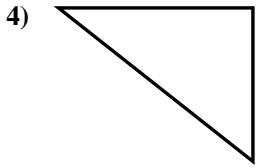
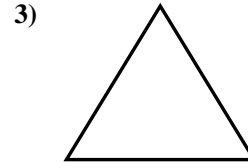
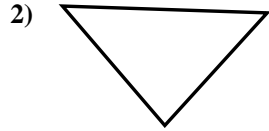
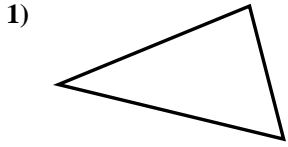
14. no

15. no



Determine if the triangle shown is a right triangle (yes) or not (no).

Answers

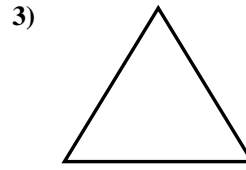
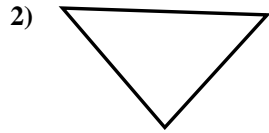
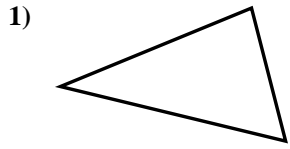


- 1. \_\_\_\_\_
- 2. \_\_\_\_\_
- 3. \_\_\_\_\_
- 4. \_\_\_\_\_
- 5. \_\_\_\_\_
- 6. \_\_\_\_\_
- 7. \_\_\_\_\_
- 8. \_\_\_\_\_
- 9. \_\_\_\_\_
- 10. \_\_\_\_\_
- 11. \_\_\_\_\_
- 12. \_\_\_\_\_
- 13. \_\_\_\_\_
- 14. \_\_\_\_\_
- 15. \_\_\_\_\_

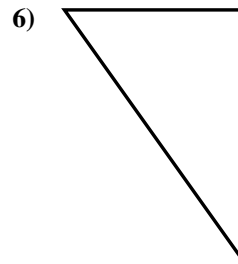
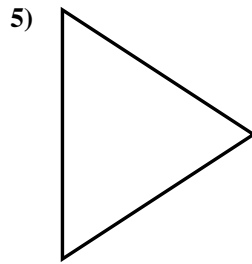
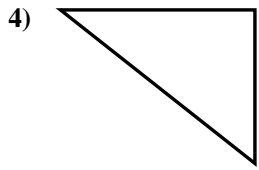


Determine if the triangle shown is a right triangle (yes) or not (no).

Answers



1. no



2. no

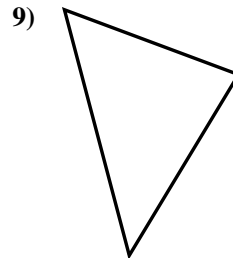
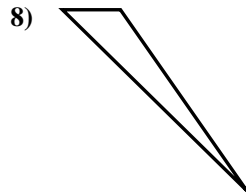
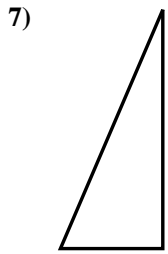
3. no

4. yes

5. no

6. yes

7. yes



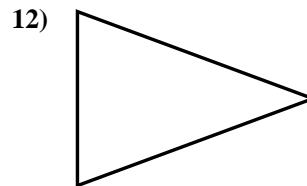
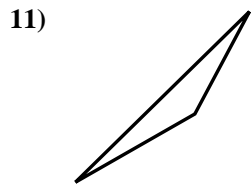
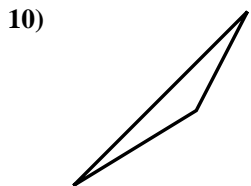
8. no

9. no

10. no

11. no

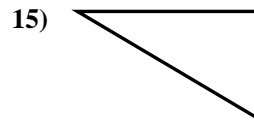
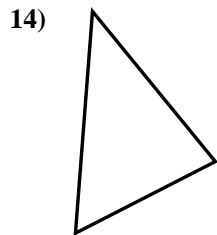
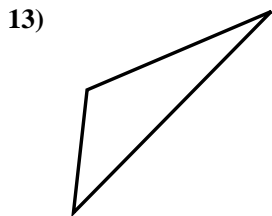
12. no



13. no

14. no

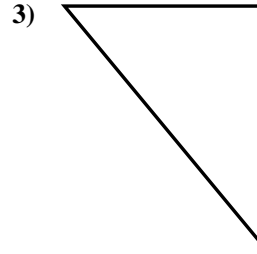
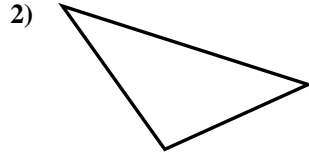
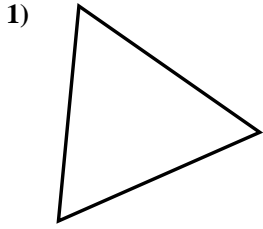
15. yes





Determine if the triangle shown is a right triangle (yes) or not (no).

Answers

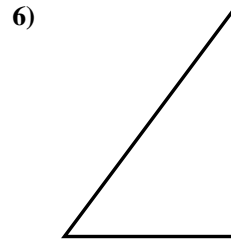
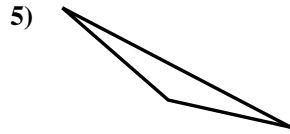
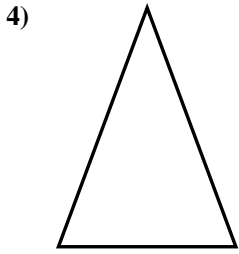


1. \_\_\_\_\_

2. \_\_\_\_\_

3. \_\_\_\_\_

4. \_\_\_\_\_

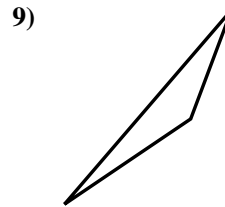
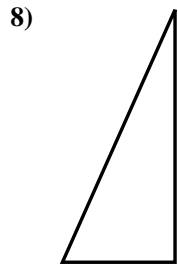



5. \_\_\_\_\_

6. \_\_\_\_\_

7. \_\_\_\_\_

8. \_\_\_\_\_

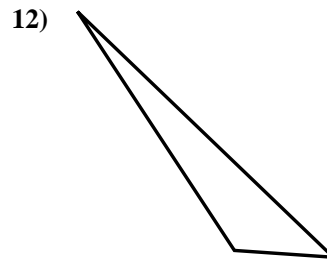
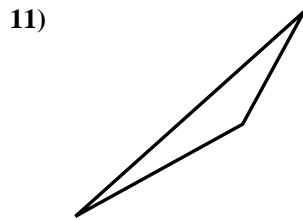
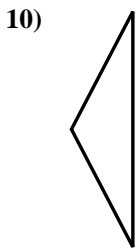


9. \_\_\_\_\_

10. \_\_\_\_\_

11. \_\_\_\_\_

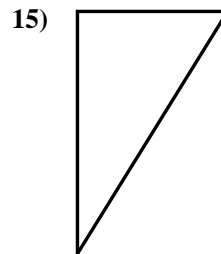
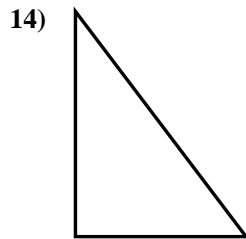
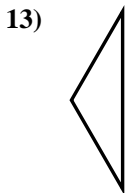
12. \_\_\_\_\_



13. \_\_\_\_\_

14. \_\_\_\_\_

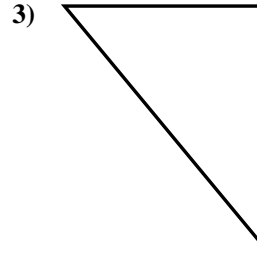
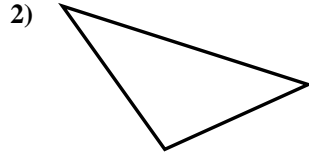
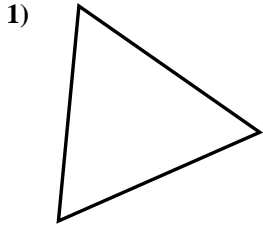
15. \_\_\_\_\_





Determine if the triangle shown is a right triangle (yes) or not (no).

Answers

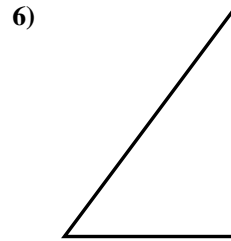
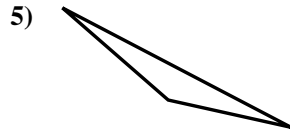
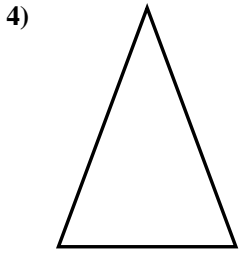


1. no

2. no

3. yes

4. no

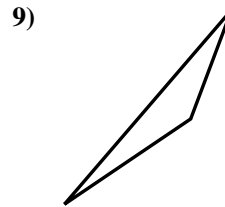
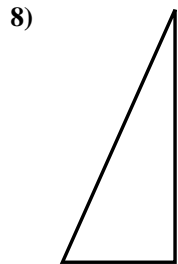



5. no

6. yes

7. no

8. yes

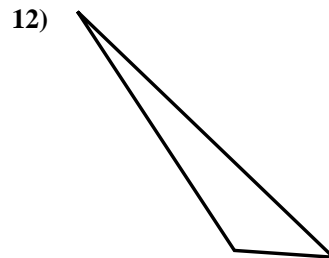
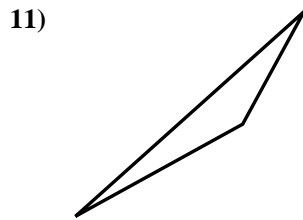
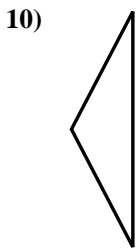


9. no

10. no

11. no

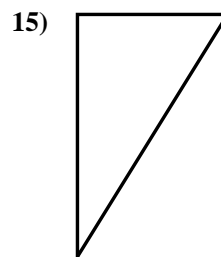
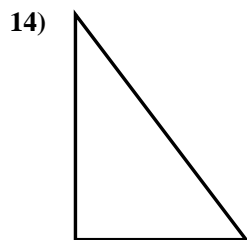
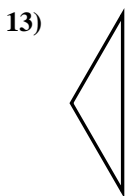
12. no



13. no

14. yes

15. yes

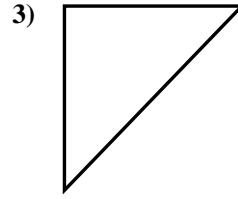
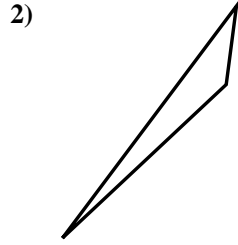
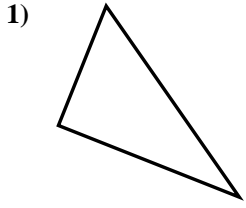






Determine if the triangle shown is a right triangle (yes) or not (no).

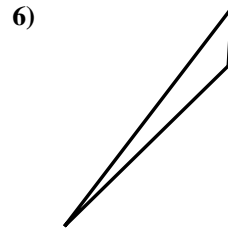
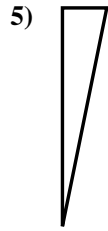
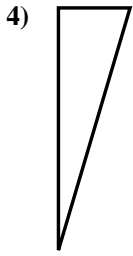
Answers



1. \_\_\_\_\_

2. \_\_\_\_\_

3. \_\_\_\_\_



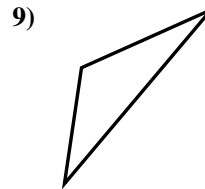
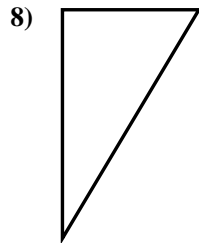
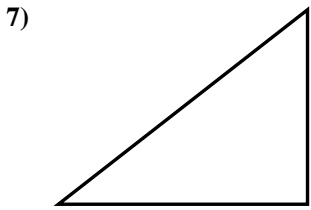
4. \_\_\_\_\_

5. \_\_\_\_\_

6. \_\_\_\_\_

7. \_\_\_\_\_

8. \_\_\_\_\_

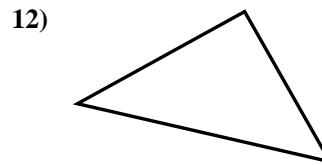
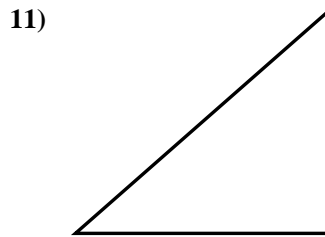
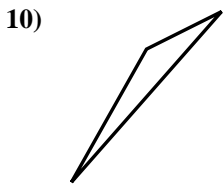


9. \_\_\_\_\_

10. \_\_\_\_\_

11. \_\_\_\_\_

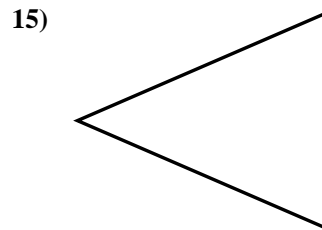
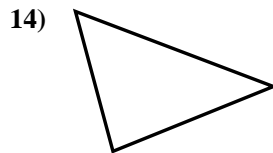
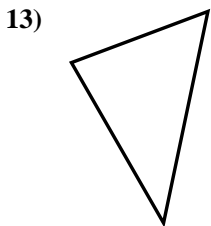
12. \_\_\_\_\_



13. \_\_\_\_\_

14. \_\_\_\_\_

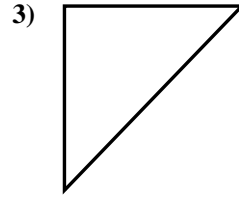
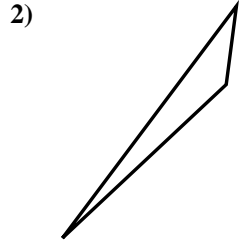
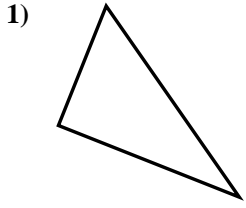
15. \_\_\_\_\_



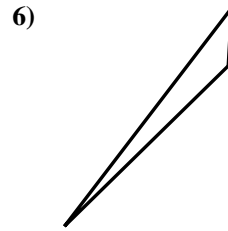
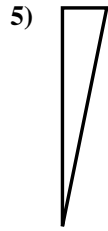
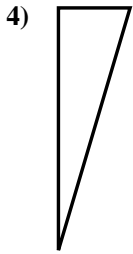


Determine if the triangle shown is a right triangle (yes) or not (no).

Answers



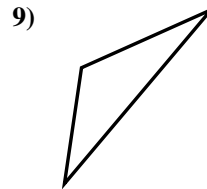
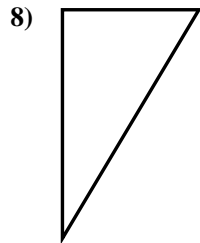
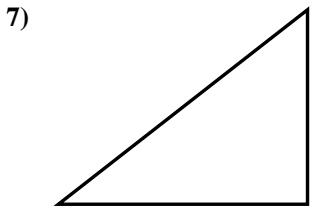
1. yes



2. no

3. yes

4. yes

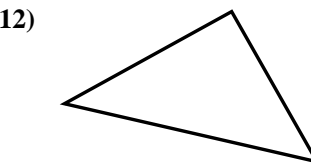
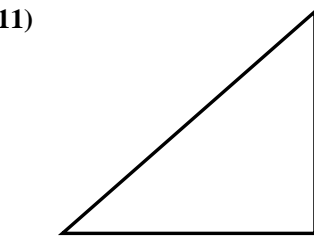
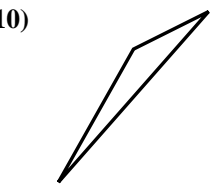


5. yes

6. no

7. yes

8. yes



9. no

10. no

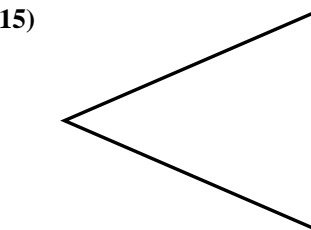

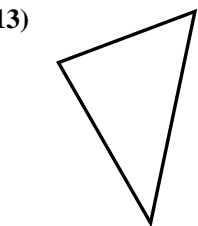
11. yes

12. yes

13. no

14. no

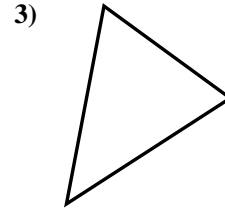
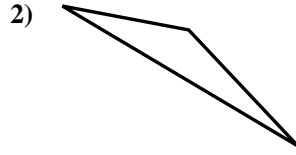
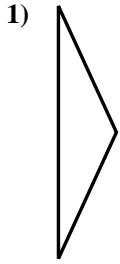
15. no





Determine if the triangle shown is a right triangle (yes) or not (no).

Answers

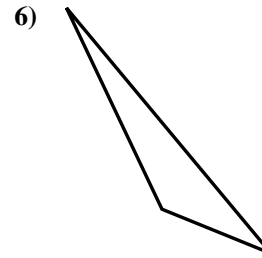
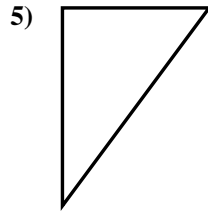
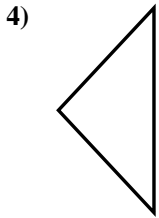


1. \_\_\_\_\_

2. \_\_\_\_\_

3. \_\_\_\_\_

4. \_\_\_\_\_

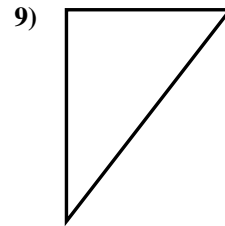
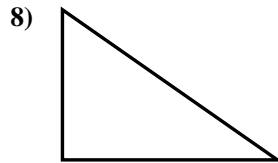


5. \_\_\_\_\_

6. \_\_\_\_\_

7. \_\_\_\_\_

8. \_\_\_\_\_

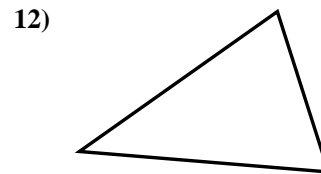
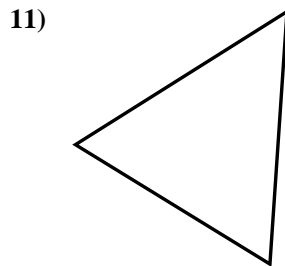
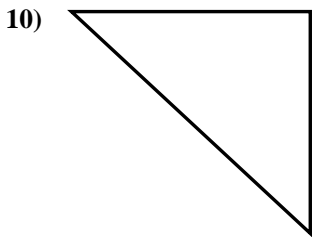


9. \_\_\_\_\_

10. \_\_\_\_\_

11. \_\_\_\_\_

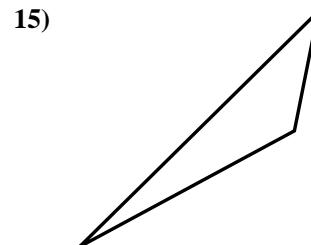
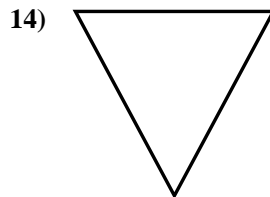
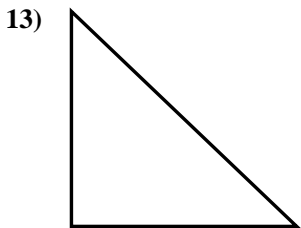
12. \_\_\_\_\_



13. \_\_\_\_\_

14. \_\_\_\_\_

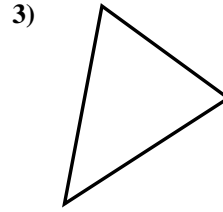
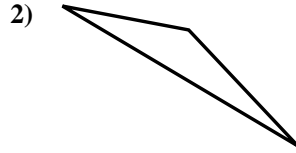
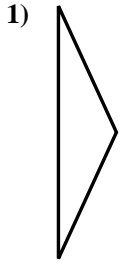
15. \_\_\_\_\_



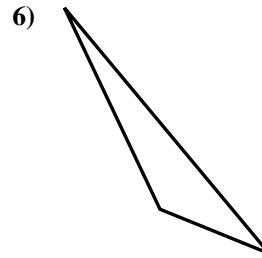
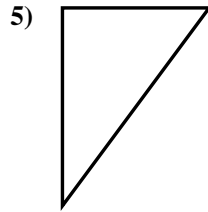
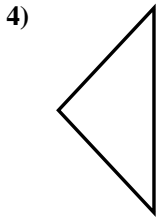


Determine if the triangle shown is a right triangle (yes) or not (no).

Answers



1. no



2. no

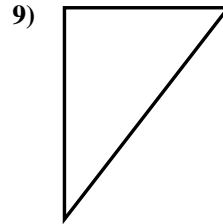
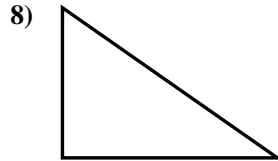
3. no

4. no

5. yes

6. no

7. yes

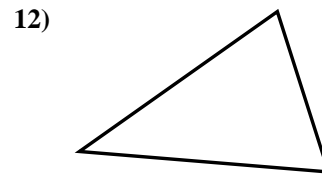
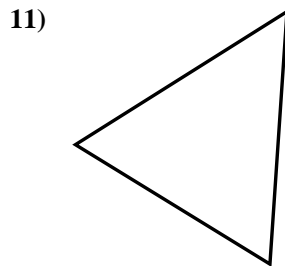
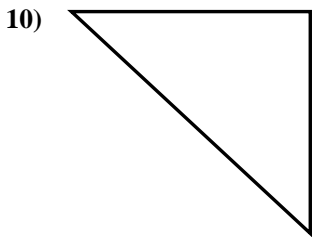


8. yes

9. yes

10. yes

11. no



12. no

13. yes

14. no

15. no

