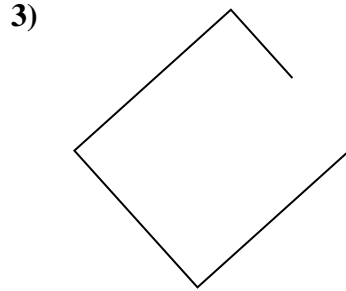
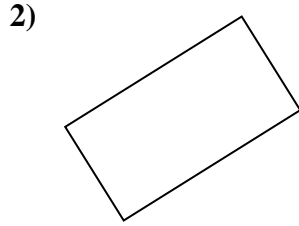
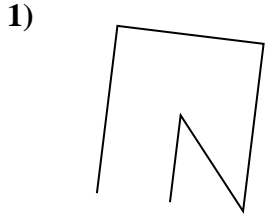




Determine if the figure shown is a 'Triangle', 'Square', 'Rectangle', 'Hexagon' or 'Other'.

Answers


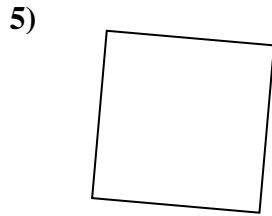



1. \_\_\_\_\_

2. \_\_\_\_\_

3. \_\_\_\_\_

4. \_\_\_\_\_

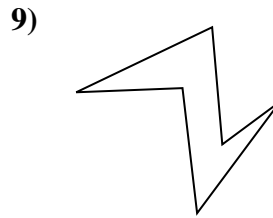
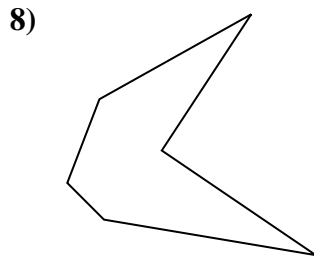
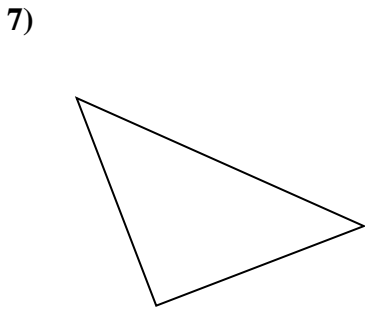


5. \_\_\_\_\_

6. \_\_\_\_\_

7. \_\_\_\_\_

8. \_\_\_\_\_

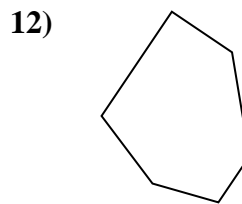
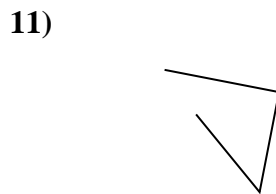
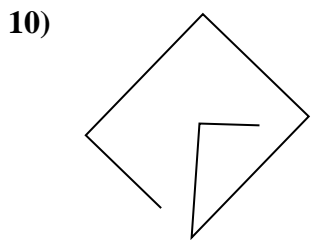


9. \_\_\_\_\_

10. \_\_\_\_\_

11. \_\_\_\_\_

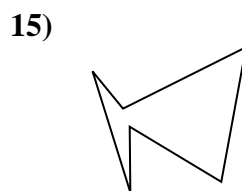
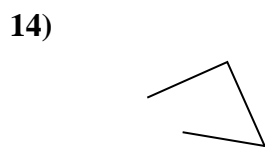
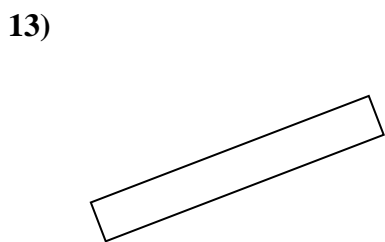
12. \_\_\_\_\_



13. \_\_\_\_\_

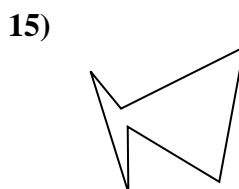
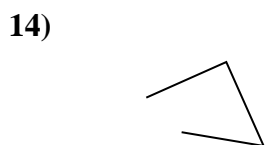
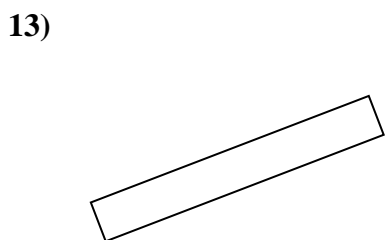
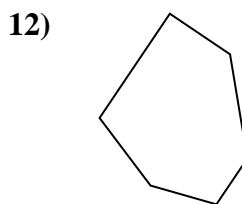
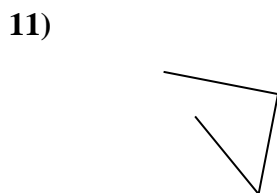
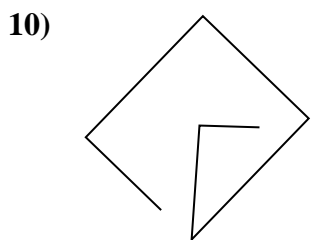
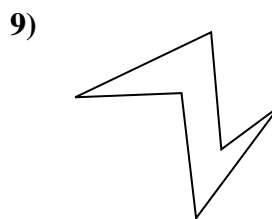
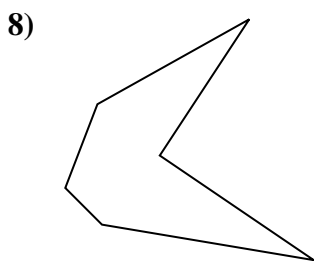
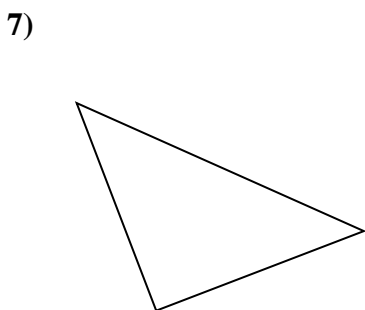
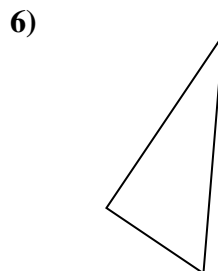
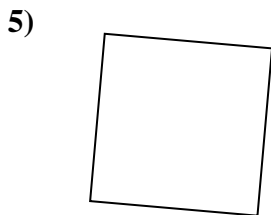

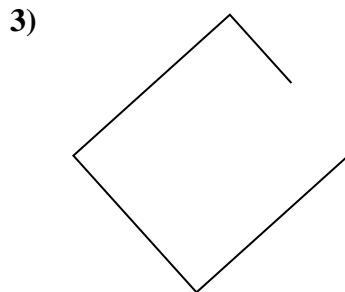
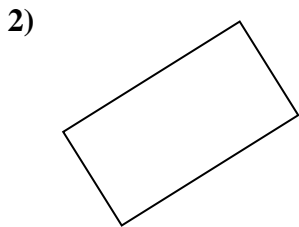
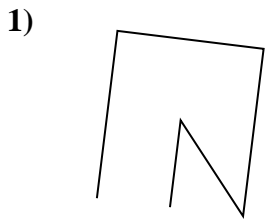
14. \_\_\_\_\_

15. \_\_\_\_\_





Determine if the figure shown is a 'Triangle', 'Square', 'Rectangle', 'Hexagon' or 'Other'.



Answers

1. other

2. rectangle

3. other

4. rectangle

5. square

6. triangle

7. triangle

8. hexagon

9. hexagon

10. other

11. other

12. hexagon

13. rectangle

14. other

15. hexagon



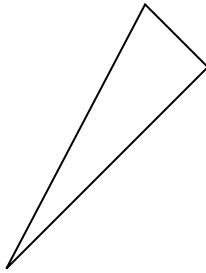
Determine if the figure shown is a 'Triangle', 'Square', 'Rectangle', 'Hexagon' or 'Other'.

Answers

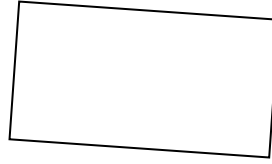
1)



2)



3)



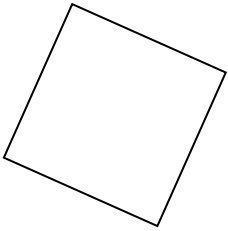
1. \_\_\_\_\_

2. \_\_\_\_\_

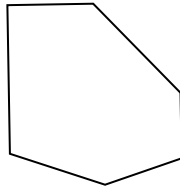
3. \_\_\_\_\_

4. \_\_\_\_\_

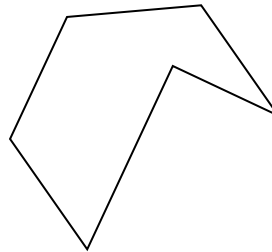
4)



5)



6)



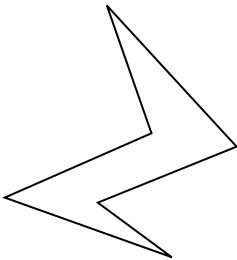
5. \_\_\_\_\_

6. \_\_\_\_\_

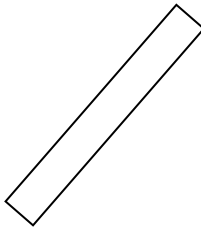
7. \_\_\_\_\_

8. \_\_\_\_\_

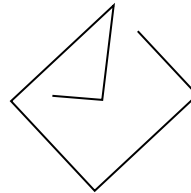
7)



8)



9)



9. \_\_\_\_\_

10. \_\_\_\_\_

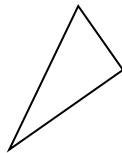
11. \_\_\_\_\_

12. \_\_\_\_\_

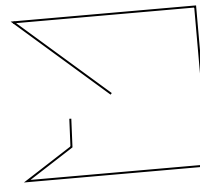
10)



11)



12)




13. \_\_\_\_\_


14. \_\_\_\_\_

15. \_\_\_\_\_

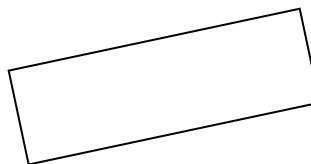
13)



14)



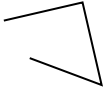
15)



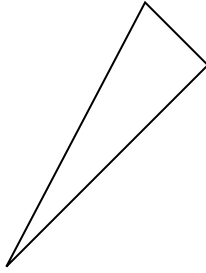


Determine if the figure shown is a 'Triangle', 'Square', 'Rectangle', 'Hexagon' or 'Other'.

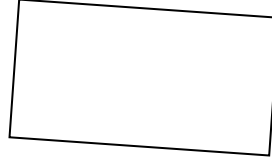
1)



2)



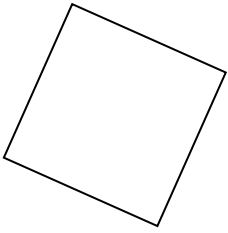
3)



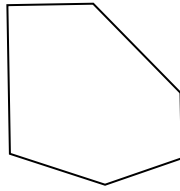
1.

**other**

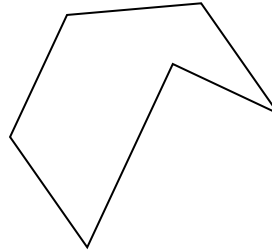
4)



5)



6)



2.

**triangle**

3.

**rectangle**

4.

**square**

5.

**hexagon**

6.

**hexagon**

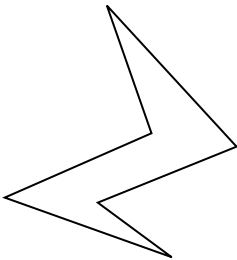
7.

**hexagon**

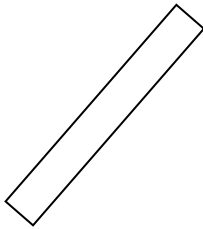
8.

**rectangle**

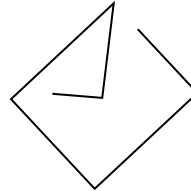
7)



8)



9)



9.

**other**

10.

**triangle**

11.

**triangle**

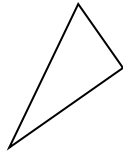
12.

**other**

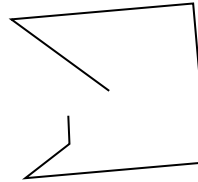
10)



11)



12)



13.

**other**


14.

**triangle**


15.

**rectangle**

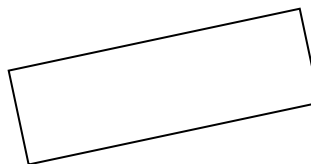
13)



14)



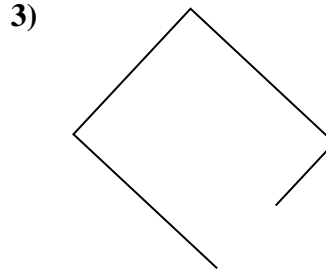
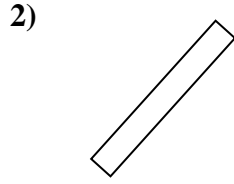
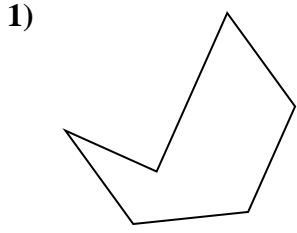
15)



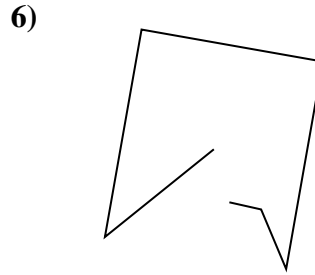
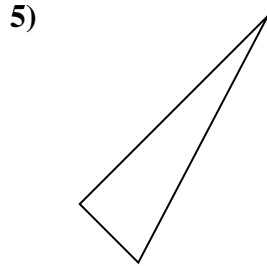
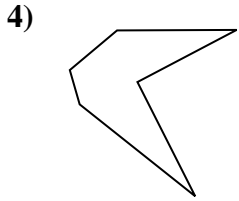


Determine if the figure shown is a 'Triangle', 'Square', 'Rectangle', 'Hexagon' or 'Other'.

Answers



1. \_\_\_\_\_



2. \_\_\_\_\_

3. \_\_\_\_\_


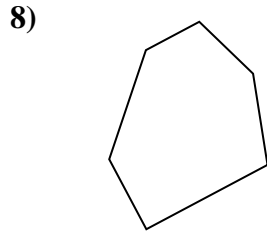
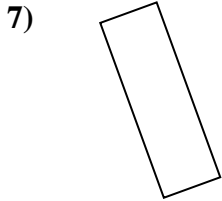
4. \_\_\_\_\_

5. \_\_\_\_\_

6. \_\_\_\_\_

7. \_\_\_\_\_

8. \_\_\_\_\_

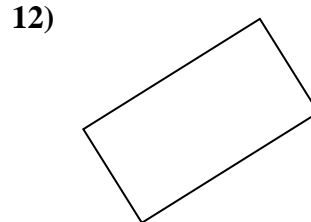
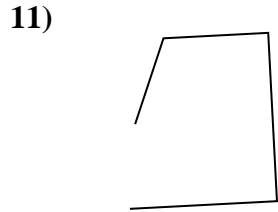
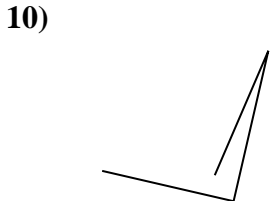


9. \_\_\_\_\_

10. \_\_\_\_\_

11. \_\_\_\_\_

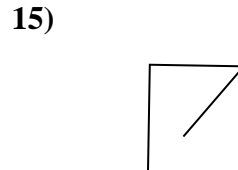
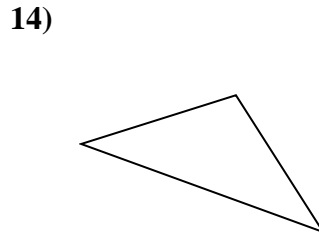
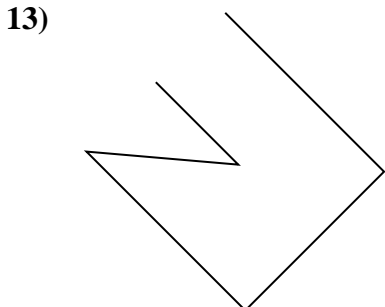
12. \_\_\_\_\_



13. \_\_\_\_\_

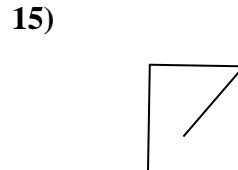
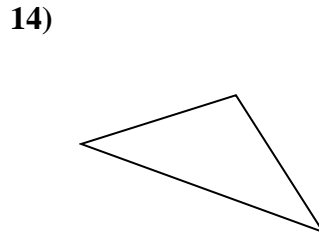
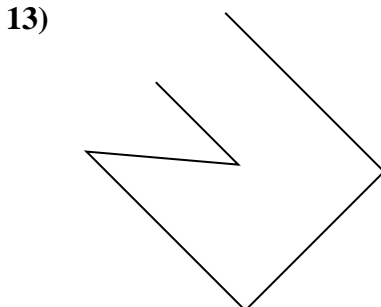
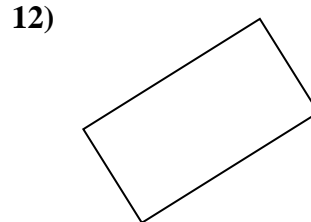
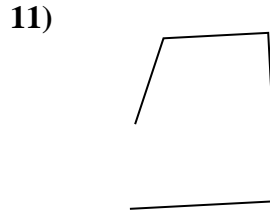
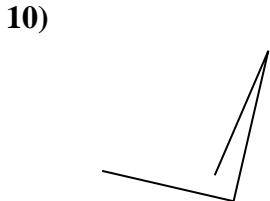

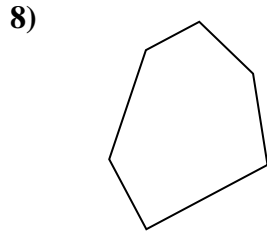
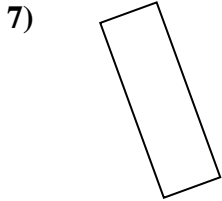
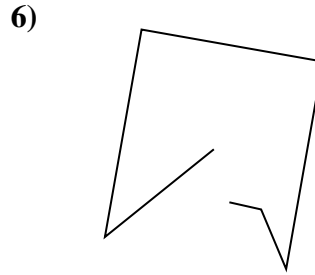
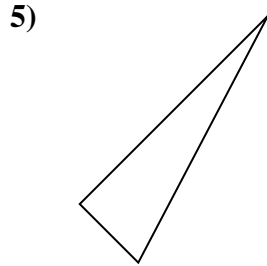
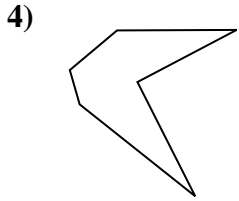
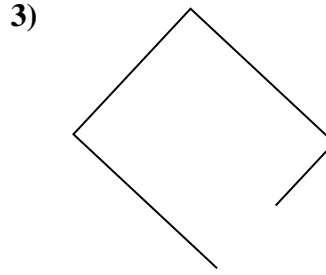
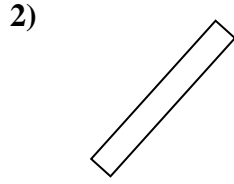
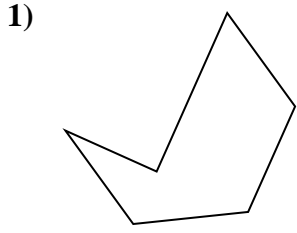
14. \_\_\_\_\_

15. \_\_\_\_\_





Determine if the figure shown is a 'Triangle', 'Square', 'Rectangle', 'Hexagon' or 'Other'.



Answers

1. hexagon

2. rectangle

3. other

4. hexagon

5. triangle

6. other

7. rectangle

8. hexagon

9. triangle

10. other

11. other

12. rectangle

13. other

14. triangle

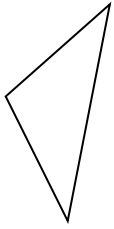
15. other



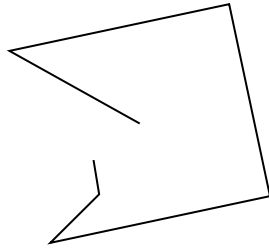
Determine if the figure shown is a 'Triangle', 'Square', 'Rectangle', 'Hexagon' or 'Other'.

Answers

1)



2)



3)



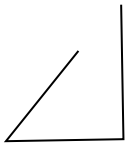
1. \_\_\_\_\_

2. \_\_\_\_\_

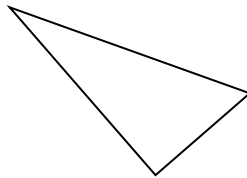
3. \_\_\_\_\_

4. \_\_\_\_\_

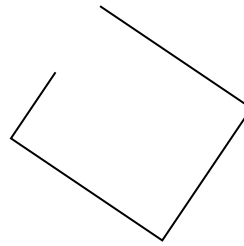
4)



5)



6)



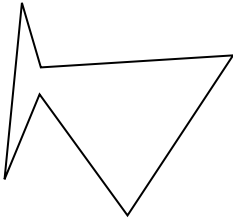
5. \_\_\_\_\_

6. \_\_\_\_\_

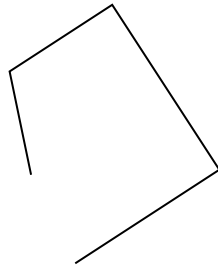
7. \_\_\_\_\_

8. \_\_\_\_\_


7)



8)



9)




9. \_\_\_\_\_

10. \_\_\_\_\_

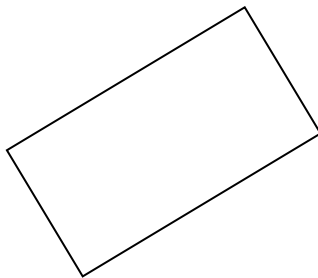
11. \_\_\_\_\_

12. \_\_\_\_\_


10)



11)



12)

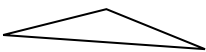


13. \_\_\_\_\_


14. \_\_\_\_\_

15. \_\_\_\_\_

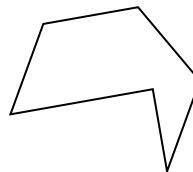
13)



14)

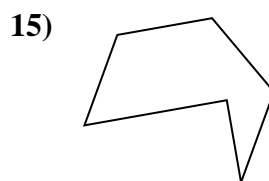
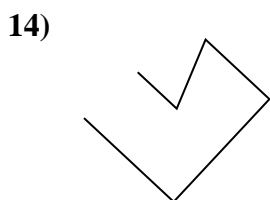
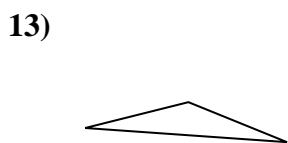
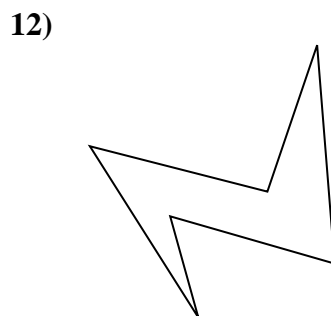
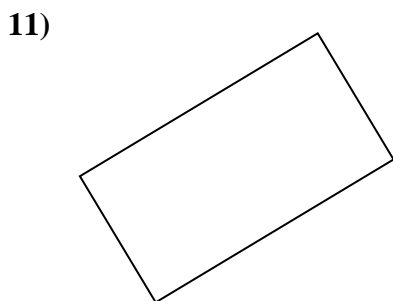
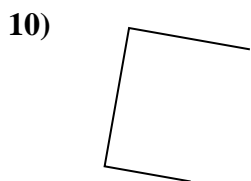
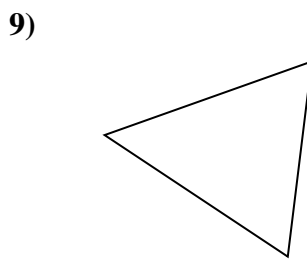
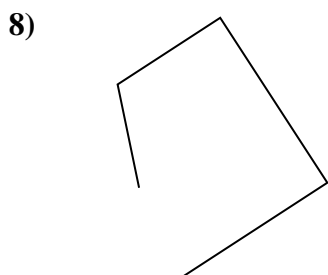
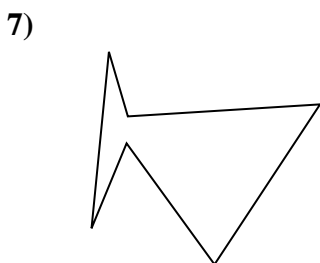
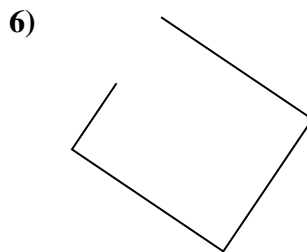
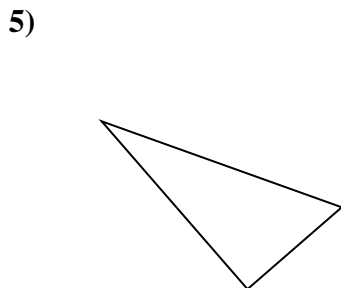
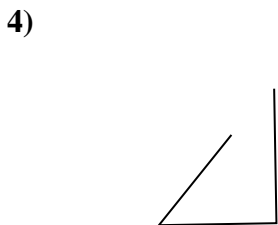
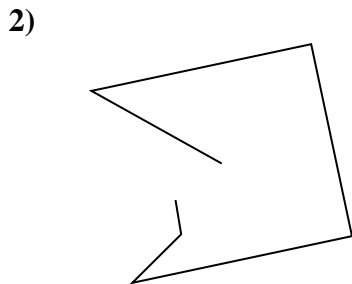
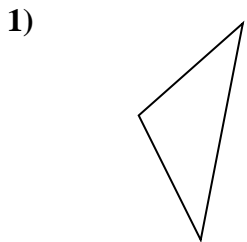


15)





Determine if the figure shown is a 'Triangle', 'Square', 'Rectangle', 'Hexagon' or 'Other'.



Answers

1. triangle

2. other

3. other

4. other

5. triangle

6. other

7. hexagon

8. other

9. triangle

10. other

11. rectangle

12. hexagon

13. triangle

14. other

15. hexagon





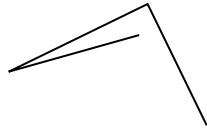
Determine if the figure shown is a 'Triangle', 'Square', 'Rectangle', 'Hexagon' or 'Other'.

Answers

1)



2)



3)



1. \_\_\_\_\_

2. \_\_\_\_\_

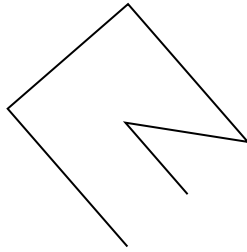
3. \_\_\_\_\_

4. \_\_\_\_\_

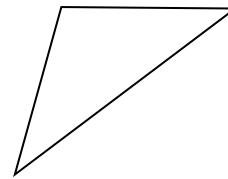
4)



5)



6)



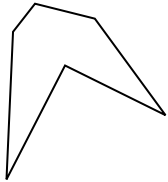
5. \_\_\_\_\_

6. \_\_\_\_\_

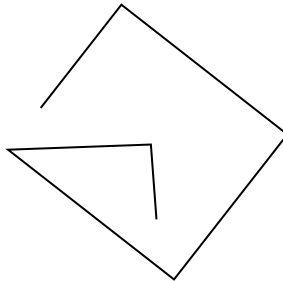
7. \_\_\_\_\_

8. \_\_\_\_\_


7)



8)



9)




9. \_\_\_\_\_

10. \_\_\_\_\_

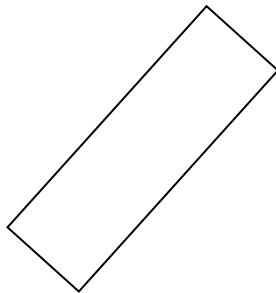
11. \_\_\_\_\_

12. \_\_\_\_\_

10)



11)



12)

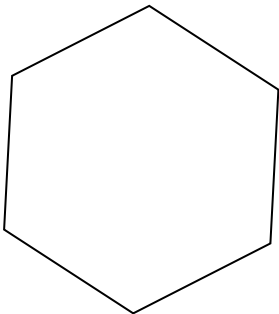


13. \_\_\_\_\_

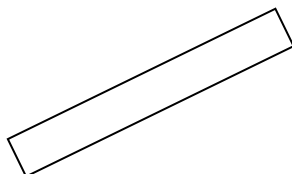
14. \_\_\_\_\_

15. \_\_\_\_\_

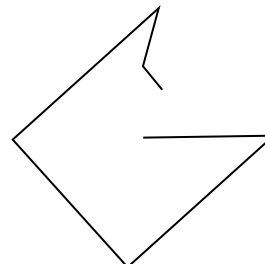
13)



14)



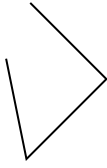
15)



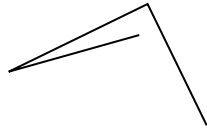


Determine if the figure shown is a 'Triangle', 'Square', 'Rectangle', 'Hexagon' or 'Other'.

1)



2)



3)



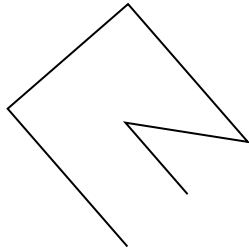
1.

**other**

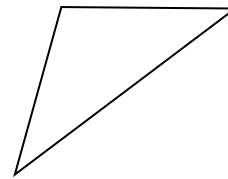
4)



5)



6)



2.

**other**

3.

**triangle**

4.

**other**

5.

**other**

6.

**triangle**

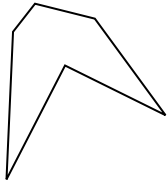
7.

**hexagon**

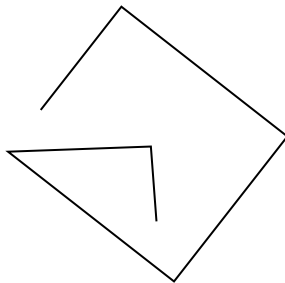
8.

**other**


7)



8)



9)



9.

**triangle**

10.

**square**


11.

**rectangle**

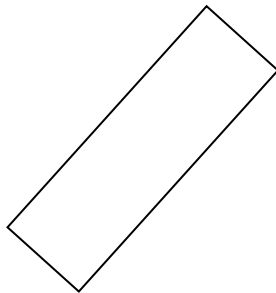
12.

**rectangle**

10)



11)



12)



13.

**hexagon**

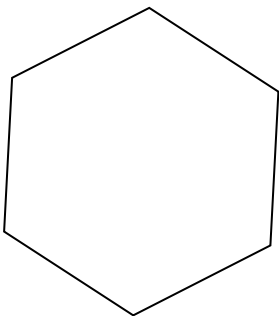
14.

**rectangle**

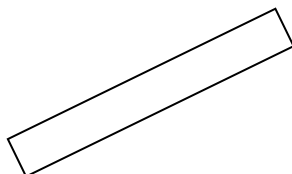
15.

**other**

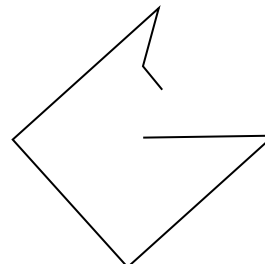
13)



14)



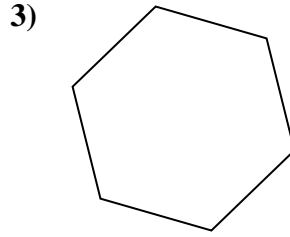
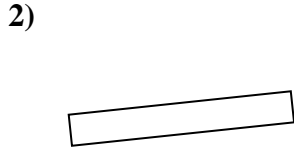
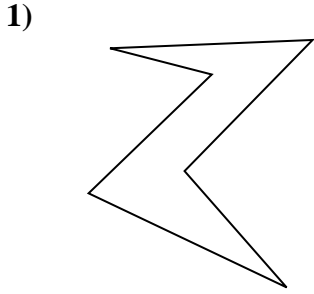
15)



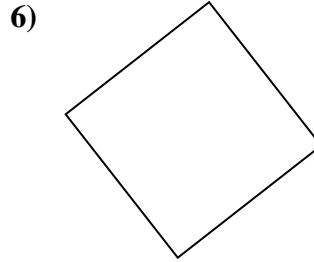
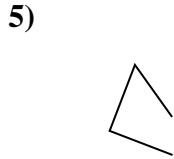
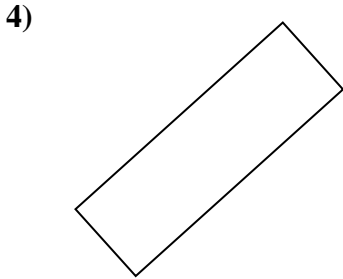


Determine if the figure shown is a 'Triangle', 'Square', 'Rectangle', 'Hexagon' or 'Other'.


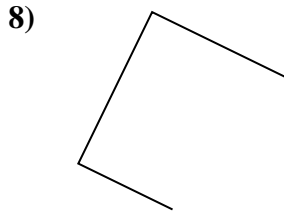
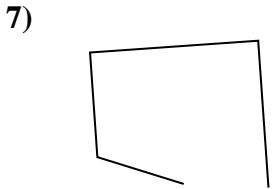
Answers



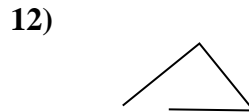
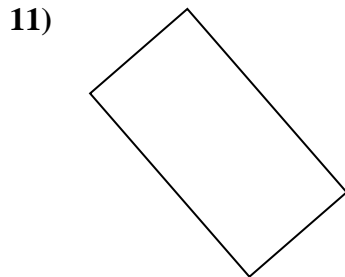
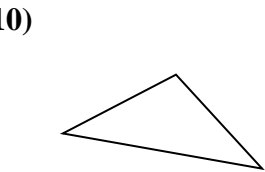
1. \_\_\_\_\_



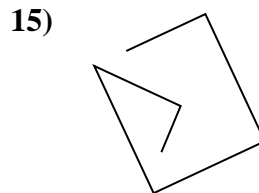
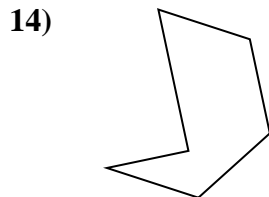
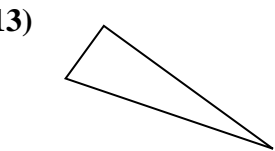
2. \_\_\_\_\_



3. \_\_\_\_\_



4. \_\_\_\_\_



5. \_\_\_\_\_

6. \_\_\_\_\_

7. \_\_\_\_\_

8. \_\_\_\_\_

9. \_\_\_\_\_

10. \_\_\_\_\_

11. \_\_\_\_\_

12. \_\_\_\_\_

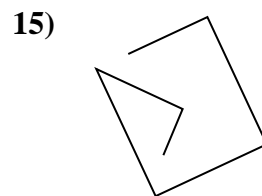
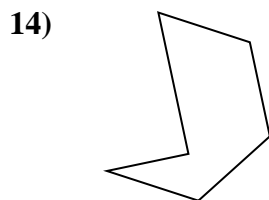
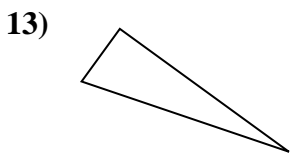
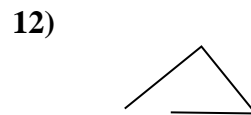
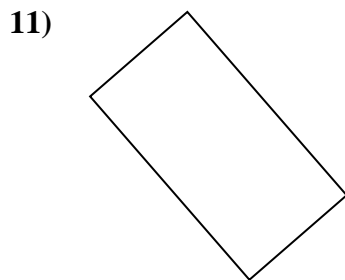
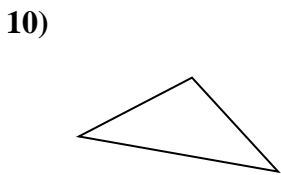

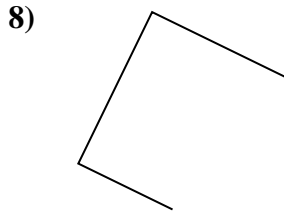
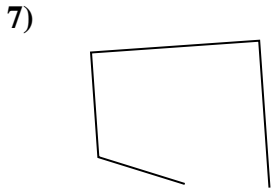
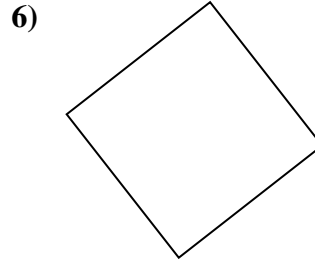
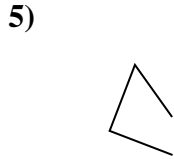
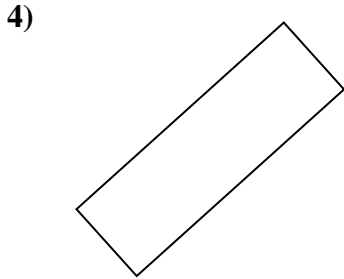
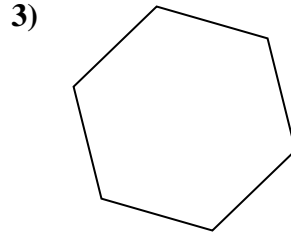
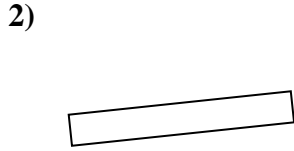
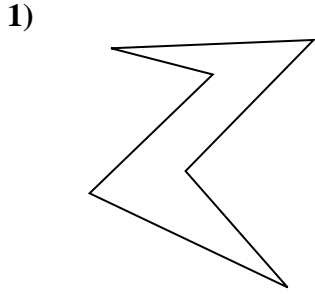
13. \_\_\_\_\_

14. \_\_\_\_\_

15. \_\_\_\_\_



Determine if the figure shown is a 'Triangle', 'Square', 'Rectangle', 'Hexagon' or 'Other'.



Answers

1. hexagon

2. rectangle

3. hexagon

4. rectangle

5. other

6. square

7. other

8. other

9. other

10. triangle

11. rectangle

12. other

13. triangle


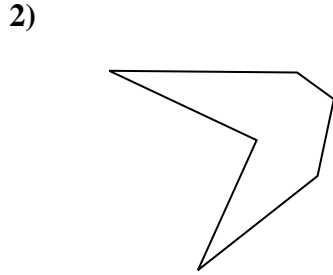
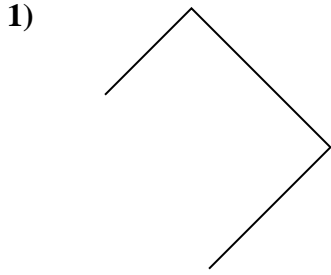
14. hexagon

15. other



Determine if the figure shown is a 'Triangle', 'Square', 'Rectangle', 'Hexagon' or 'Other'.

Answers

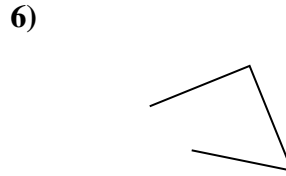
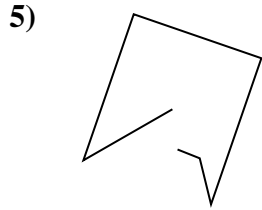
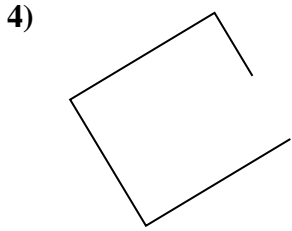


1. \_\_\_\_\_

2. \_\_\_\_\_

3. \_\_\_\_\_

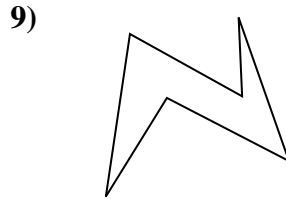
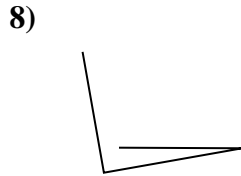

4. \_\_\_\_\_



5. \_\_\_\_\_

6. \_\_\_\_\_

7. \_\_\_\_\_

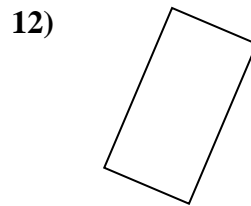
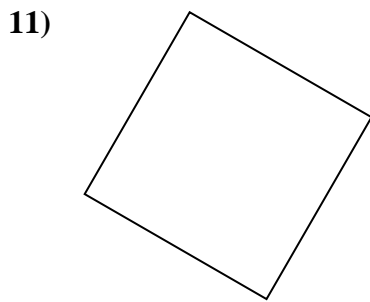
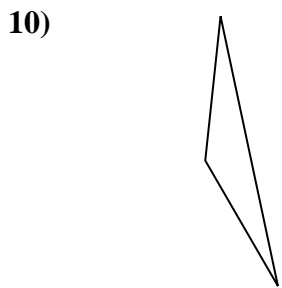


8. \_\_\_\_\_

9. \_\_\_\_\_

10. \_\_\_\_\_

11. \_\_\_\_\_

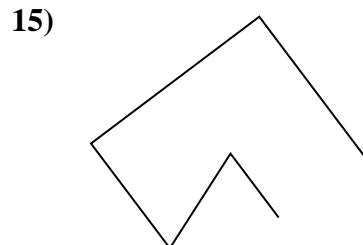
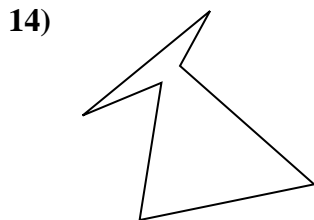
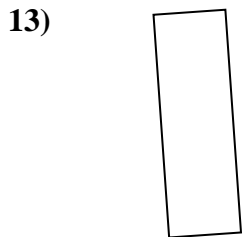


12. \_\_\_\_\_

13. \_\_\_\_\_

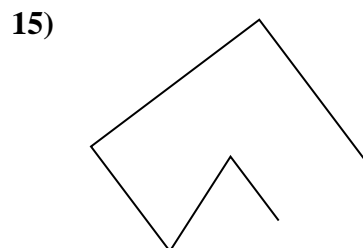

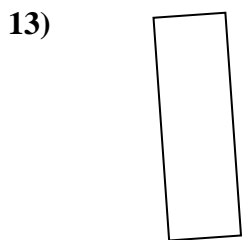
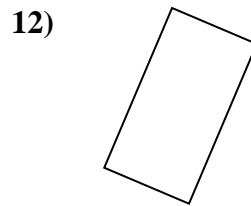
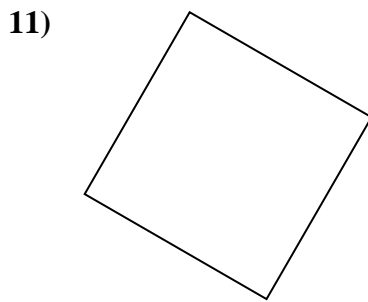
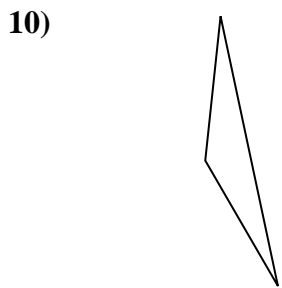

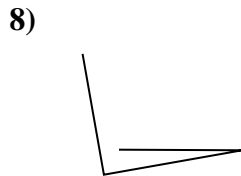

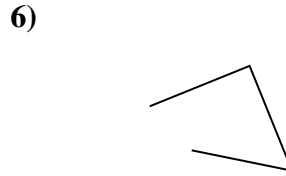
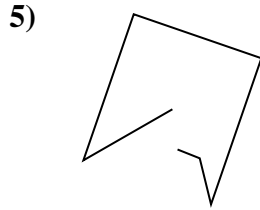
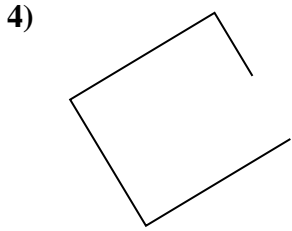

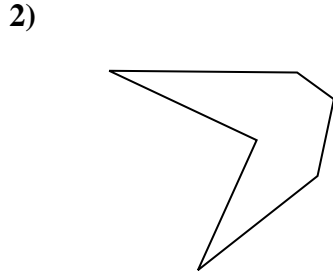
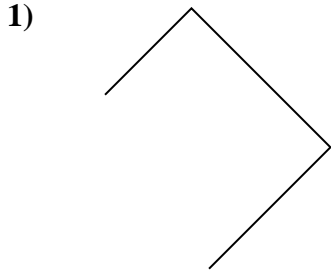
14. \_\_\_\_\_

15. \_\_\_\_\_





Determine if the figure shown is a 'Triangle', 'Square', 'Rectangle', 'Hexagon' or 'Other'.



Answers

1. other

2. hexagon

3. rectangle

4. other

5. other

6. other

7. triangle

8. other

9. hexagon

10. triangle

11. square

12. rectangle

13. rectangle


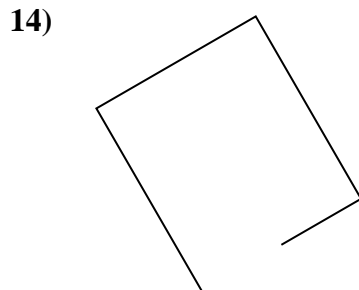
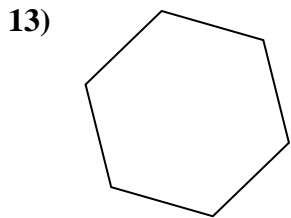
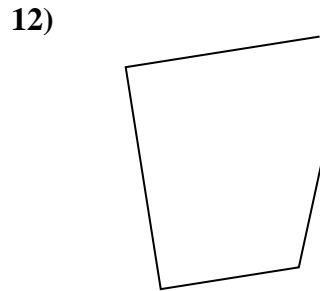
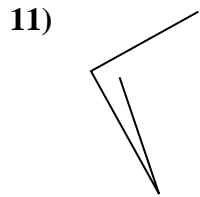
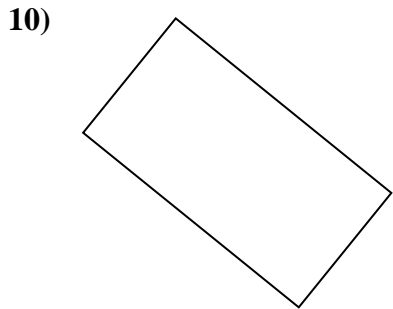
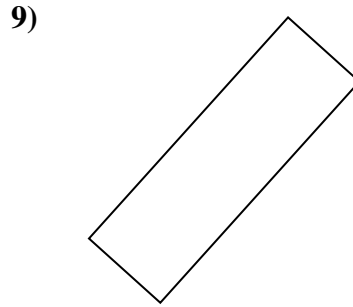
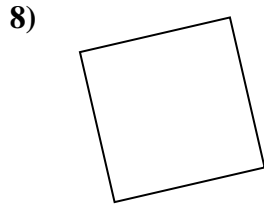
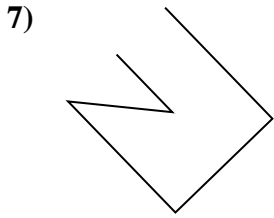
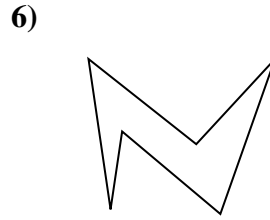
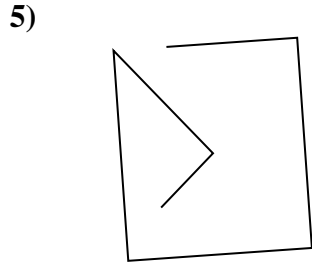
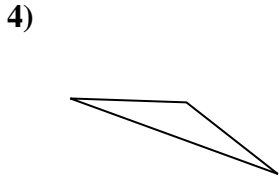
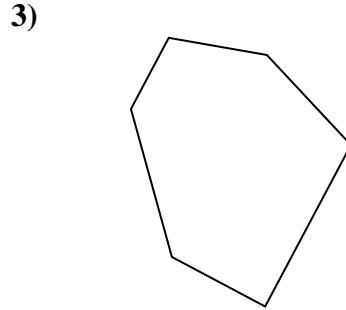
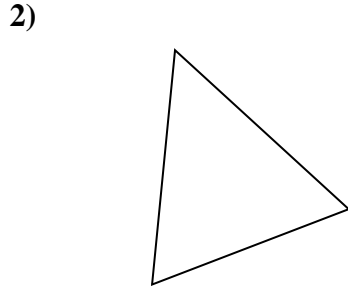
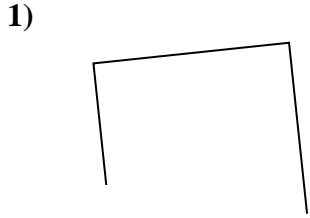
14. hexagon

15. other



Determine if the figure shown is a 'Triangle', 'Square', 'Rectangle', 'Hexagon' or 'Other'.


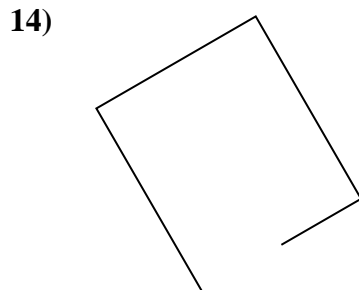
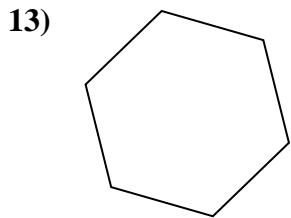
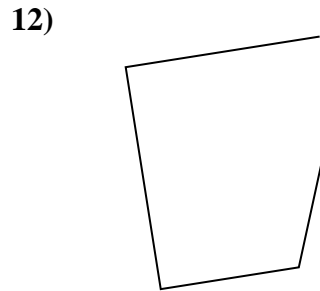
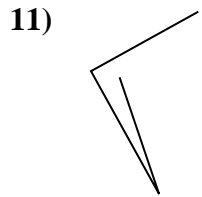
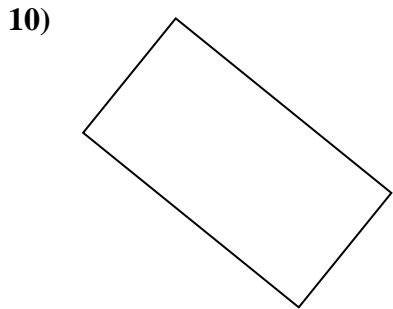
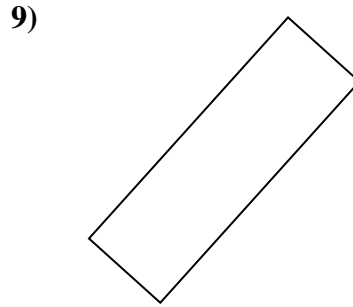
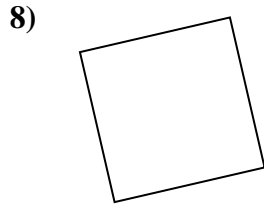
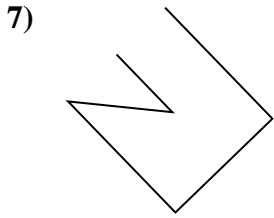
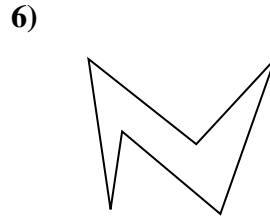
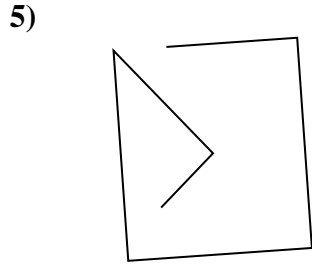
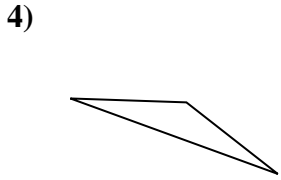
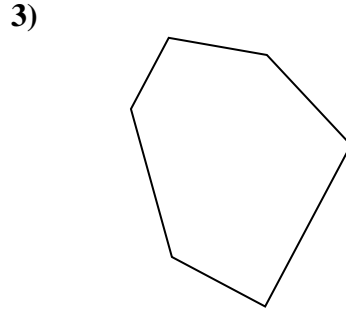
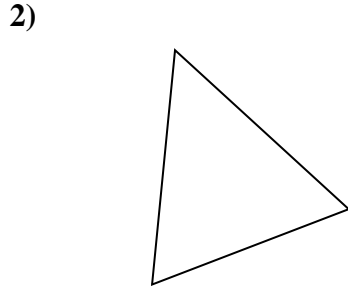
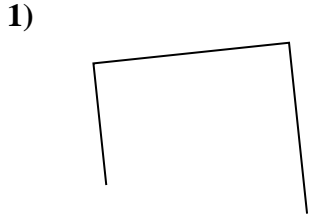
Answers



1. \_\_\_\_\_
2. \_\_\_\_\_
3. \_\_\_\_\_
4. \_\_\_\_\_
5. \_\_\_\_\_
6. \_\_\_\_\_
7. \_\_\_\_\_
8. \_\_\_\_\_
9. \_\_\_\_\_
10. \_\_\_\_\_
11. \_\_\_\_\_
12. \_\_\_\_\_
13. \_\_\_\_\_
14. \_\_\_\_\_
15. \_\_\_\_\_



Determine if the figure shown is a 'Triangle', 'Square', 'Rectangle', 'Hexagon' or 'Other'.



Answers

1. other

2. triangle

3. hexagon

4. triangle

5. other

6. hexagon

7. other

8. square

9. rectangle

10. rectangle

11. other

12. other

13. hexagon

14. other

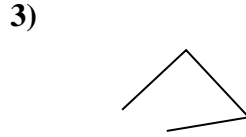
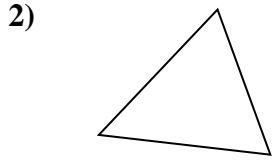
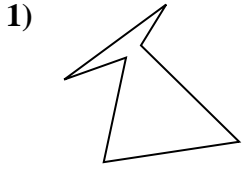
15. triangle





Determine if the figure shown is a 'Triangle', 'Square', 'Rectangle', 'Hexagon' or 'Other'.

Answers

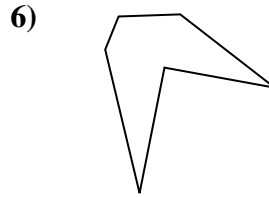
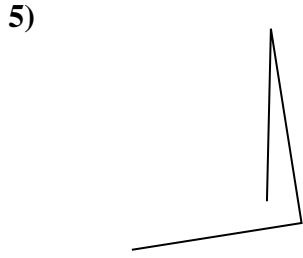
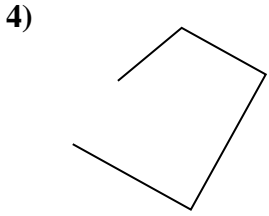


1. \_\_\_\_\_

2. \_\_\_\_\_

3. \_\_\_\_\_

4. \_\_\_\_\_

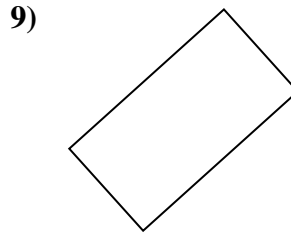
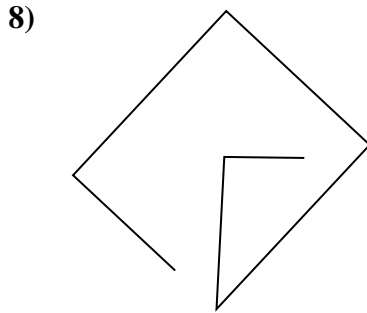
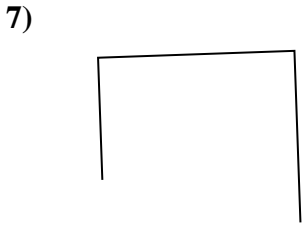


5. \_\_\_\_\_

6. \_\_\_\_\_

7. \_\_\_\_\_

8. \_\_\_\_\_

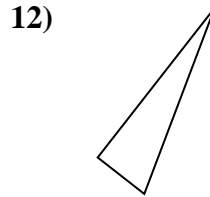
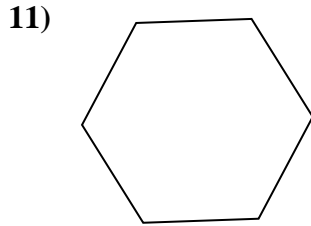
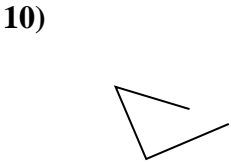


9. \_\_\_\_\_

10. \_\_\_\_\_

11. \_\_\_\_\_

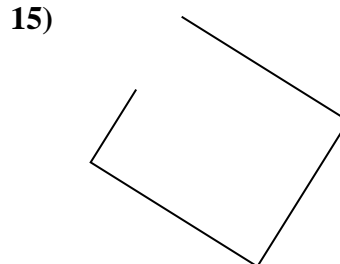
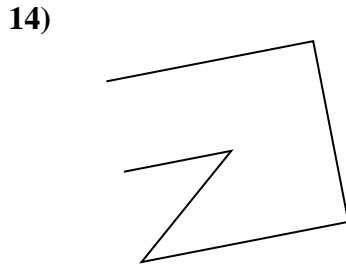
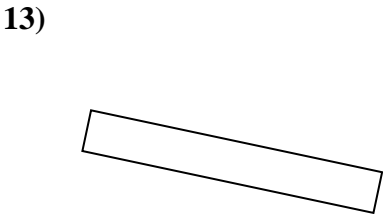
12. \_\_\_\_\_



13. \_\_\_\_\_

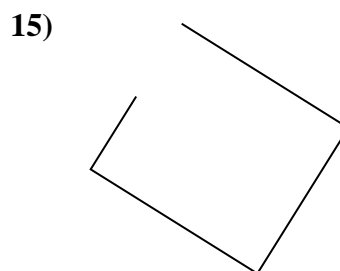
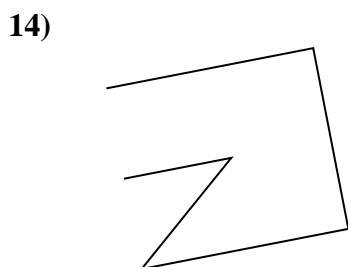

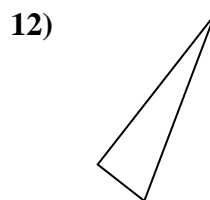
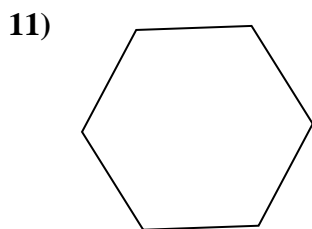
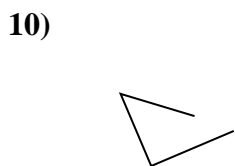
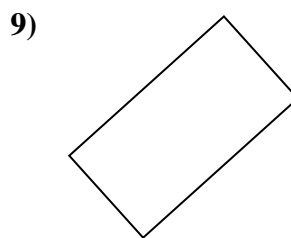
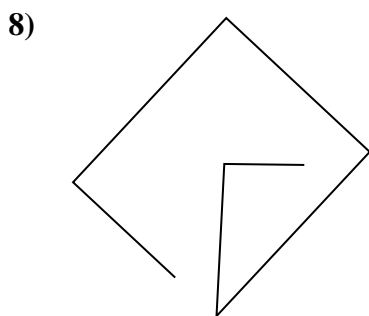
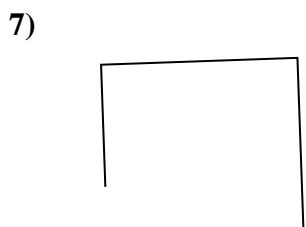
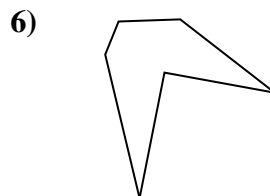
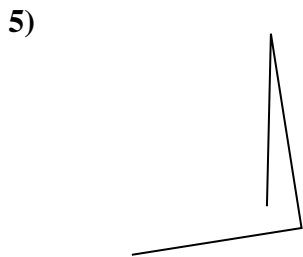
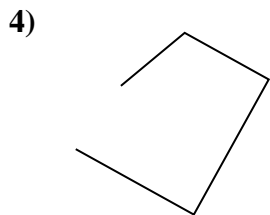
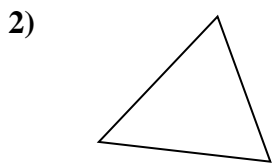
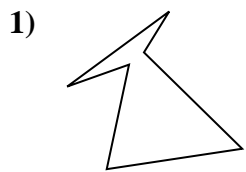
14. \_\_\_\_\_

15. \_\_\_\_\_





Determine if the figure shown is a 'Triangle', 'Square', 'Rectangle', 'Hexagon' or 'Other'.



Answers

1. hexagon

2. triangle

3. other

4. other

5. other

6. hexagon

7. other

8. other

9. rectangle

10. other

11. hexagon

12. triangle

13. rectangle

14. other

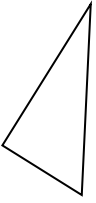
15. other



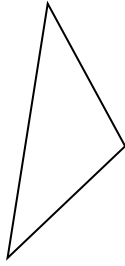
Determine if the figure shown is a 'Triangle', 'Square', 'Rectangle', 'Hexagon' or 'Other'.

Answers

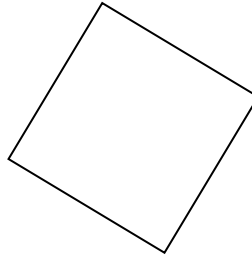
1)



2)



3)



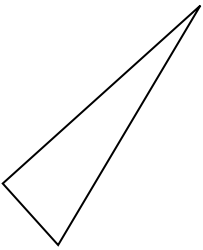
1. \_\_\_\_\_

2. \_\_\_\_\_

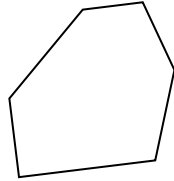
3. \_\_\_\_\_

4. \_\_\_\_\_

4)



5)



6)



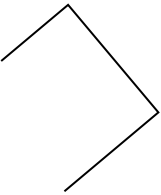
5. \_\_\_\_\_

6. \_\_\_\_\_


7. \_\_\_\_\_

8. \_\_\_\_\_

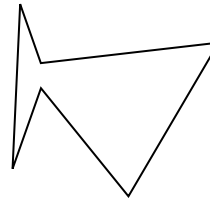
7)



8)



9)



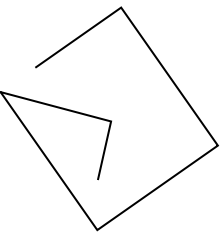
9. \_\_\_\_\_

10. \_\_\_\_\_

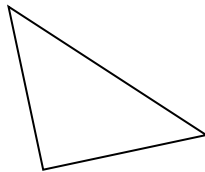
11. \_\_\_\_\_

12. \_\_\_\_\_

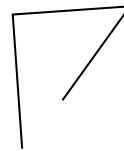
10)



11)



12)

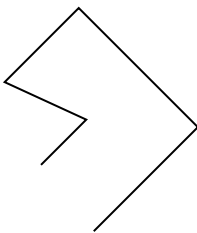


13. \_\_\_\_\_

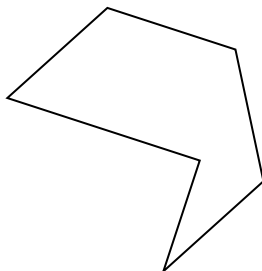
14. \_\_\_\_\_

15. \_\_\_\_\_

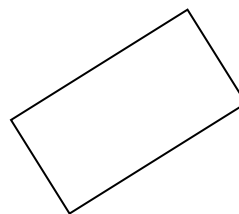
13)



14)



15)



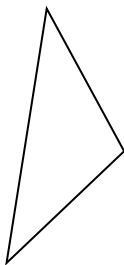


Determine if the figure shown is a 'Triangle', 'Square', 'Rectangle', 'Hexagon' or 'Other'.

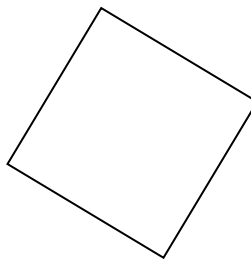
1)



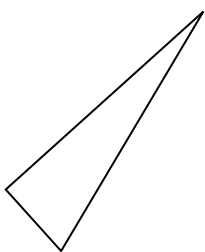
2)



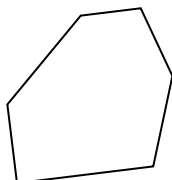
3)



4)



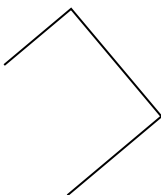
5)




6)



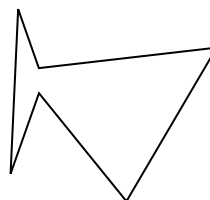
7)



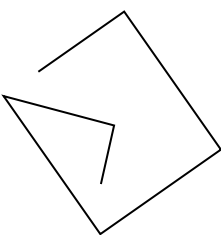
8)



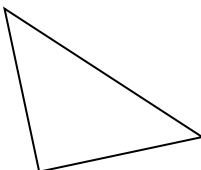
9)



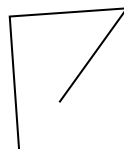
10)



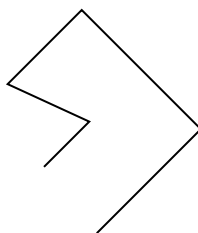
11)



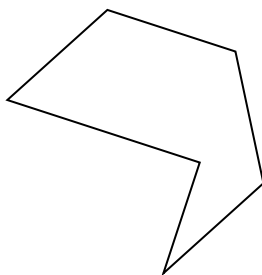
12)



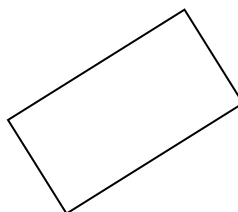
13)



14)



15)



Answers

1. triangle

2. triangle

3. square

4. triangle

5. hexagon

6. other

7. other

8. other

9. hexagon

10. other

11. triangle

12. other

13. other

14. hexagon

15. rectangle