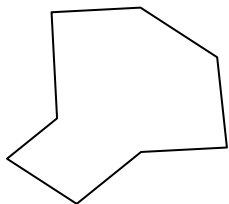




Identify the type of shape shown.

Answers

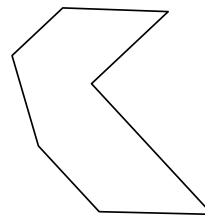
1)



2)




3)

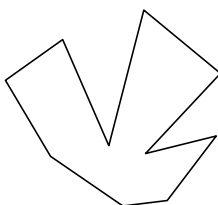


1. \_\_\_\_\_

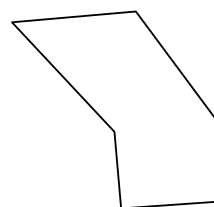
4)



5)

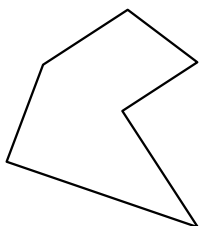


6)

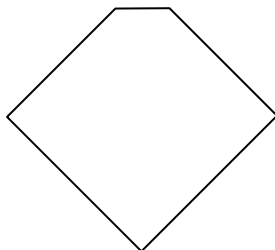


2. \_\_\_\_\_

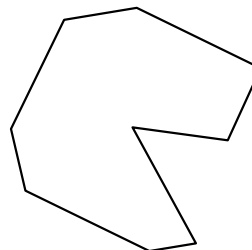
7)



8)

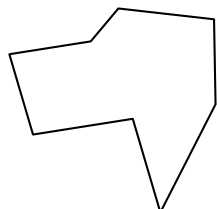


9)

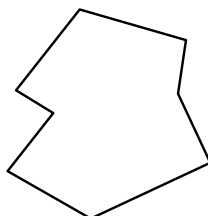


3. \_\_\_\_\_

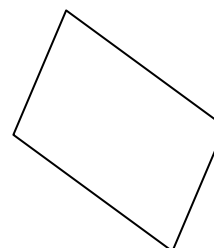
10)



11)

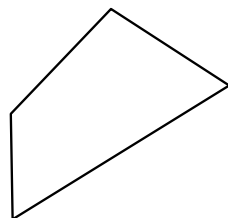


12)




4. \_\_\_\_\_

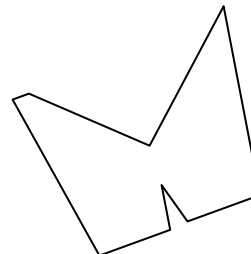
13)



14)

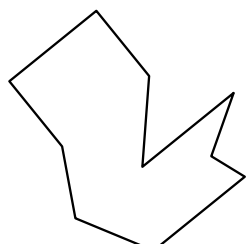


15)




5. \_\_\_\_\_

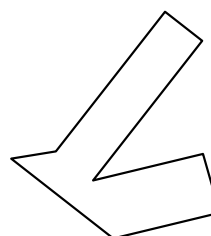
16)



17)



18)



6. \_\_\_\_\_

7. \_\_\_\_\_

8. \_\_\_\_\_

9. \_\_\_\_\_

10. \_\_\_\_\_

11. \_\_\_\_\_

12. \_\_\_\_\_

13. \_\_\_\_\_

14. \_\_\_\_\_

15. \_\_\_\_\_

16. \_\_\_\_\_

17. \_\_\_\_\_

18. \_\_\_\_\_

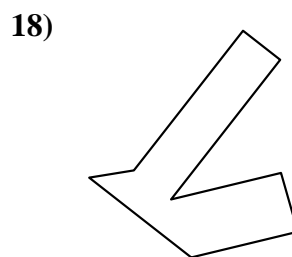
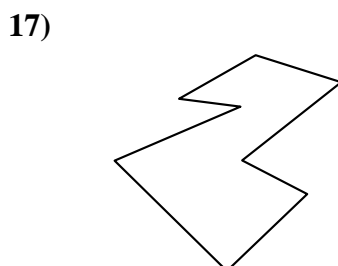
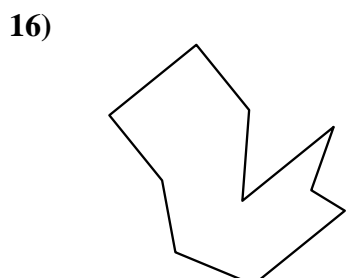
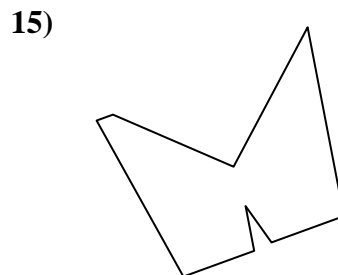

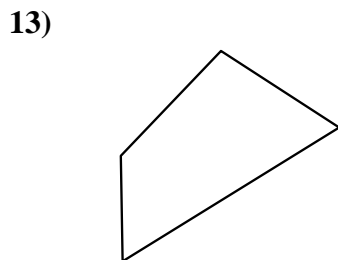
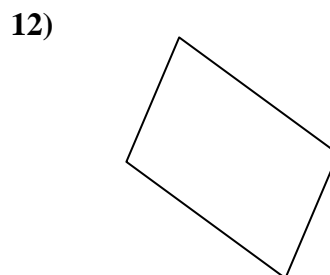
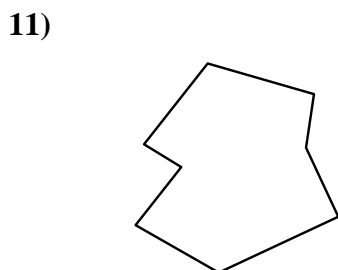
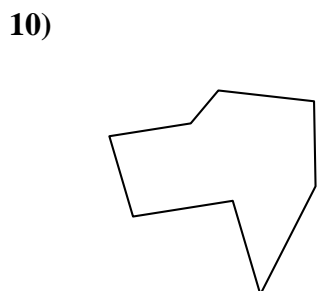
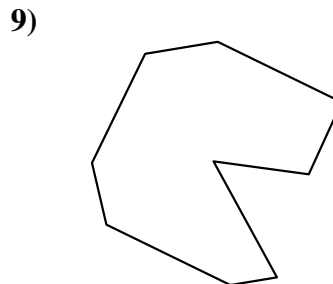
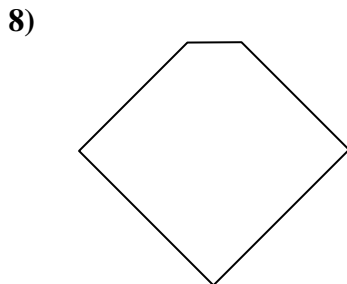
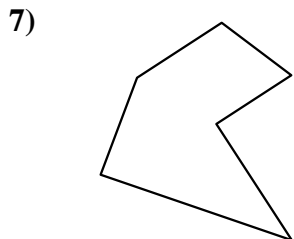
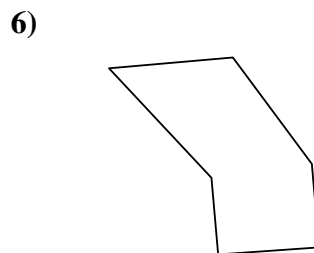
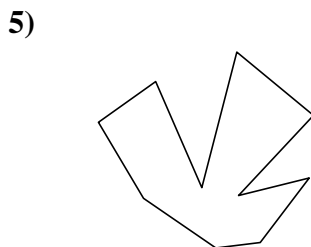
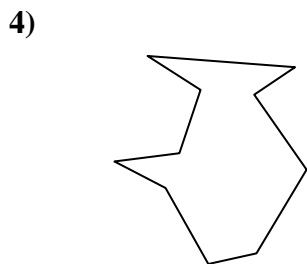
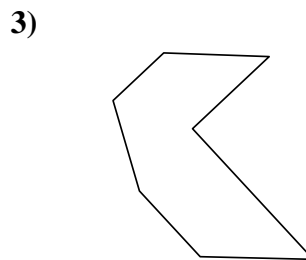
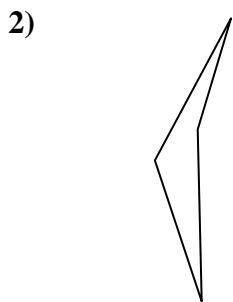
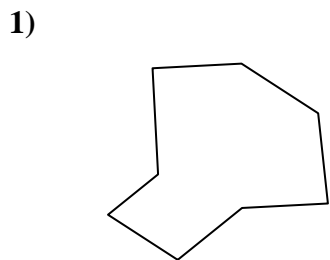
19. \_\_\_\_\_

20. \_\_\_\_\_

21. \_\_\_\_\_



Identify the type of shape shown.



Answers

1. octagon

2. quadrilateral

3. heptagon

4. decagon

5. decagon

6. hexagon

7. hexagon

8. pentagon

9. nonagon

10. octagon

11. octagon

12. quadrilateral

13. quadrilateral

14. octagon

15. nonagon

16. decagon

17. octagon

18. octagon

19. quadrilateral

20. heptagon

21. nonagon