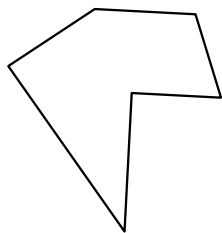





Identify the type of shape shown.

Answers

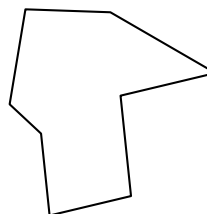
1)



2)

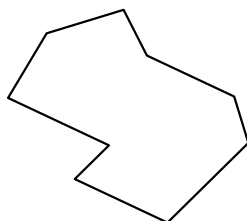


3)

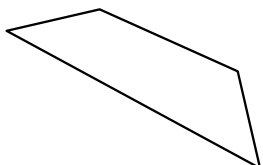


1. _____

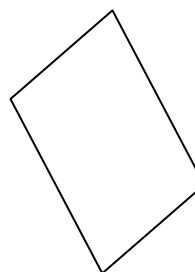
4)



5)



6)



2. _____


3. _____

4. _____

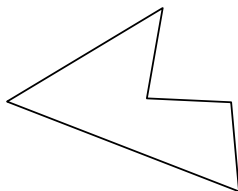
5. _____

6. _____


7)



8)



9)



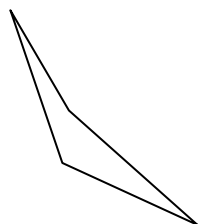
7. _____

8. _____

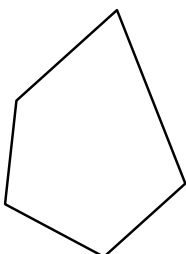
9. _____

10. _____

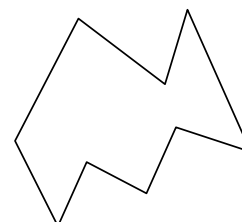
10)



11)



12)



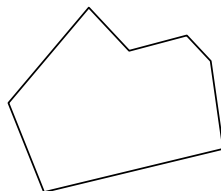
11. _____

12. _____

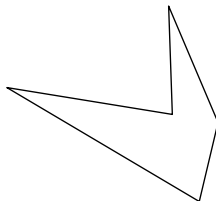
13. _____

14. _____

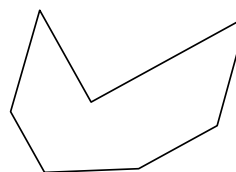
13)



14)



15)

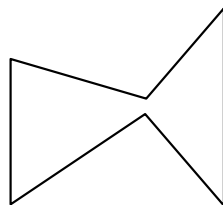


15. _____

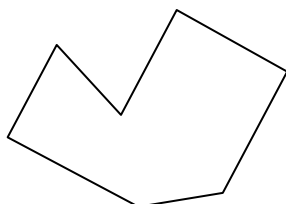
16. _____

17. _____

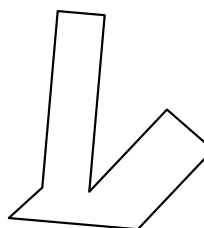
16)



17)



18)



18. _____

19. _____

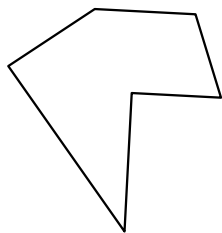
20. _____

21. _____




Identify the type of shape shown.

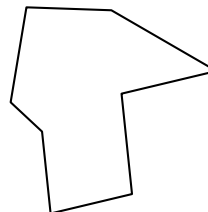
1)



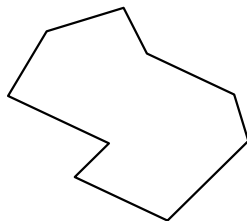
2)



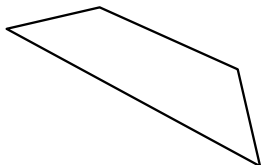
3)



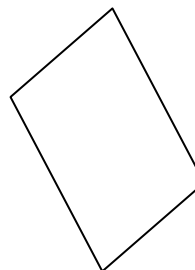
4)




5)



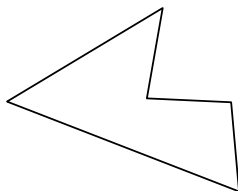
6)




7)



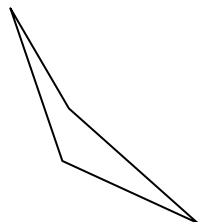
8)



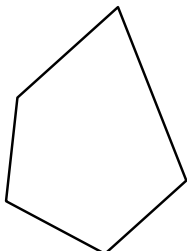
9)



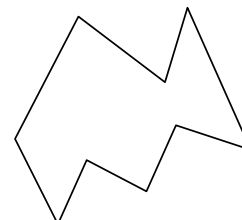
10)



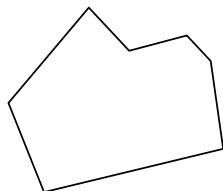
11)



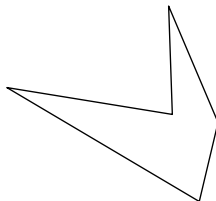
12)



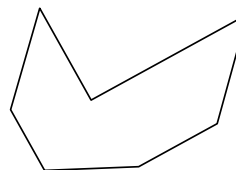
13)



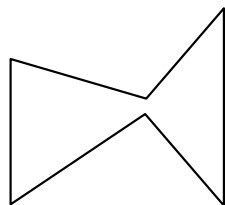
14)



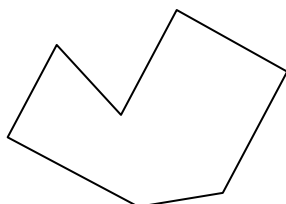
15)



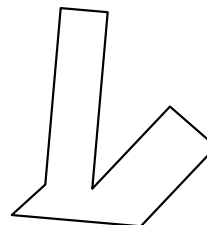
16)



17)



18)



Answers

1. hexagon

2. nonagon

3. octagon

4. nonagon

5. quadrilateral

6. quadrilateral

7. quadrilateral

8. pentagon

9. heptagon

10. quadrilateral

11. pentagon

12. nonagon

13. heptagon

14. pentagon

15. heptagon

16. hexagon

17. heptagon

18. octagon

19. octagon

20. heptagon

21. octagon