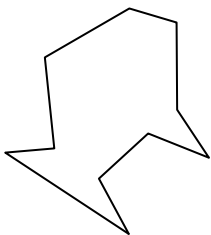




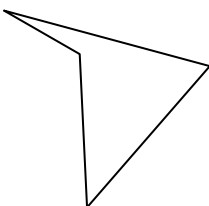
Identify the type of shape shown.

Answers

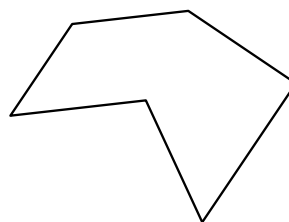
1)




2)



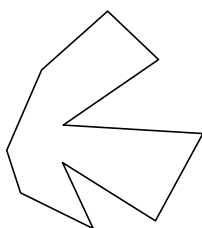
3)



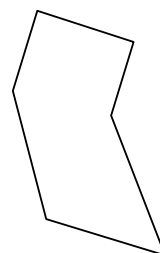
4)



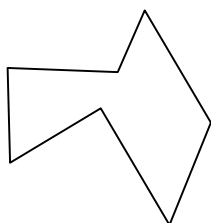
5)



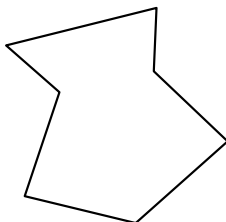
6)



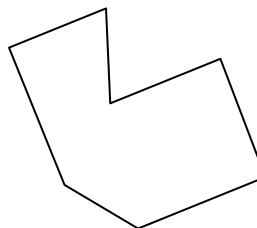
7)



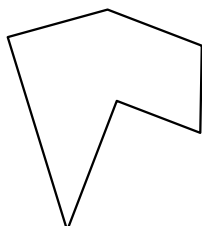
8)



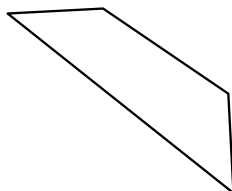
9)



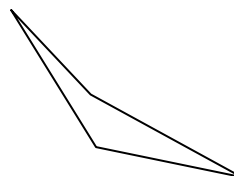
10)



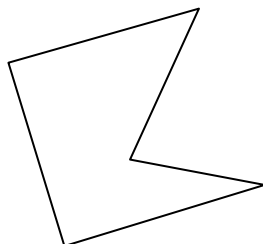
11)



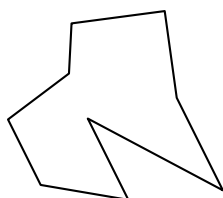
12)




13)



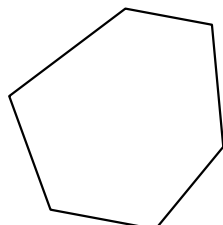
14)




15)



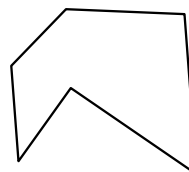
16)



17)



18)

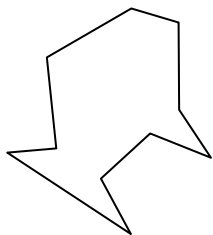


- 1. _____
- 2. _____
- 3. _____
- 4. _____
- 5. _____
- 6. _____
- 7. _____
- 8. _____
- 9. _____
- 10. _____
- 11. _____
- 12. _____
- 13. _____
- 14. _____
- 15. _____
- 16. _____
- 17. _____
- 18. _____
- 19. _____
- 20. _____
- 21. _____




Identify the type of shape shown.

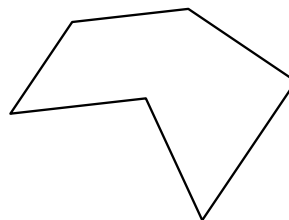
1)




2)



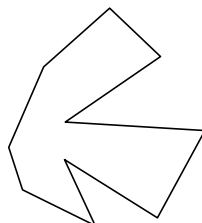
3)



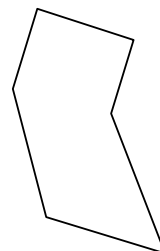
4)



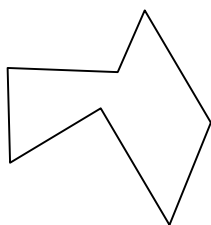
5)



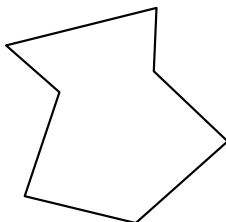
6)



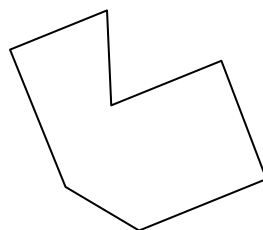
7)



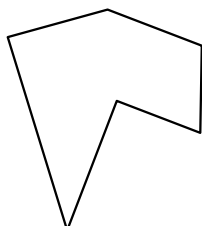
8)



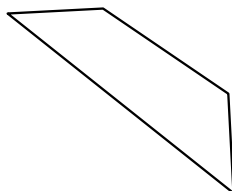
9)



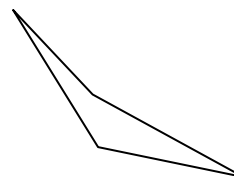
10)



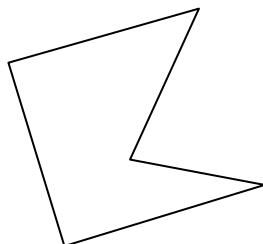
11)



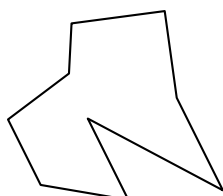
12)



13)



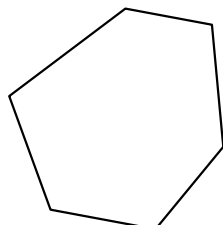
14)




15)



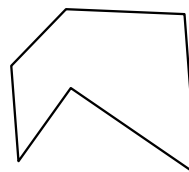
16)



17)



18)



Answers

1. decagon

2. quadrilateral

3. hexagon

4. pentagon

5. decagon

6. hexagon

7. heptagon

8. heptagon

9. heptagon

10. hexagon

11. quadrilateral

12. quadrilateral

13. pentagon

14. nonagon

15. octagon

16. hexagon

17. quadrilateral

18. hexagon

19. octagon

20. nonagon

21. heptagon