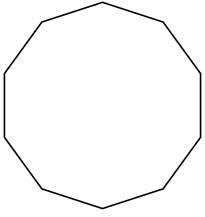


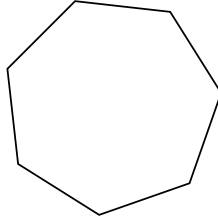


Identifying the type of shape shown.

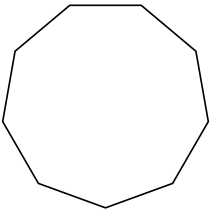
1)



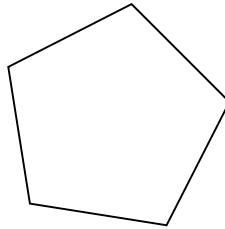
2)




3)




4)



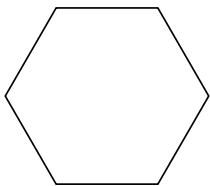
5)



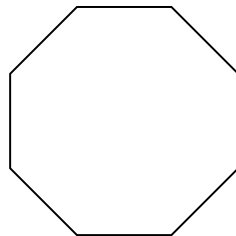
6)



7)



8)



Answers

1. \_\_\_\_\_

2. \_\_\_\_\_

3. \_\_\_\_\_

4. \_\_\_\_\_

5. \_\_\_\_\_

6. \_\_\_\_\_

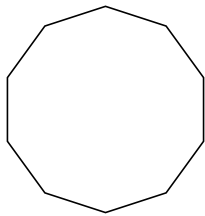
7. \_\_\_\_\_

8. \_\_\_\_\_

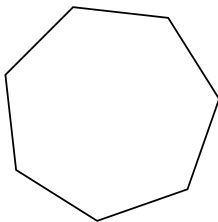


Identifying the type of shape shown.

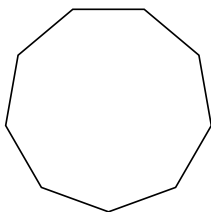
1)



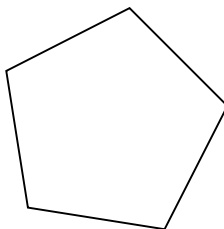
2)




3)



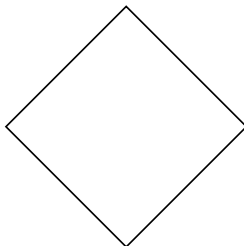
4)



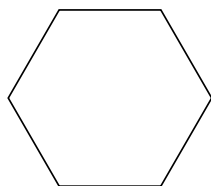
5)



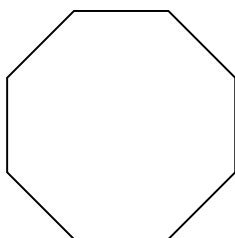
6)



7)



8)

Answers1. decagon2. heptagon3. nonagon4. pentagon5. triangle6. quadrilateral7. hexagon8. octagon