




Determine if the shapes shown are 'similar', 'congruent' or 'neither'.

Answers

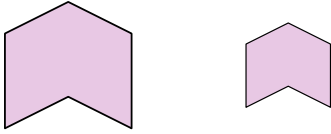
1)



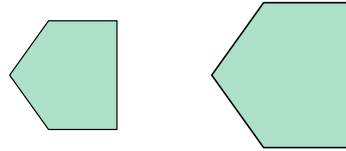
2)



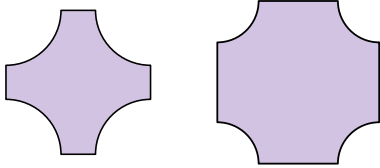
3)



4)



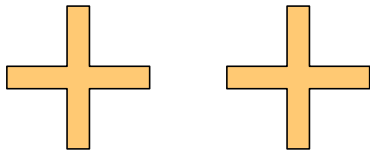
5)



6)



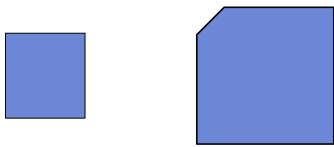
7)



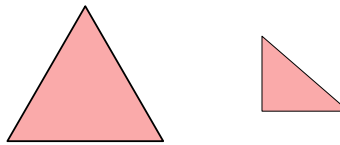
8)



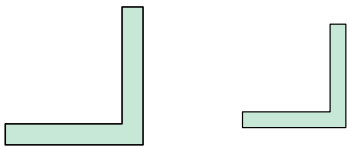
9)



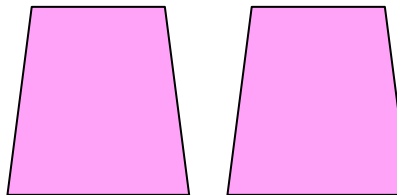
10)



11)



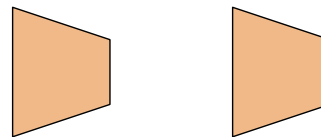
12)



13)



14)



15)



16)



1. _____
2. _____
3. _____
4. _____
5. _____
6. _____
7. _____
8. _____
9. _____
10. _____
11. _____
12. _____
13. _____
14. _____
15. _____
16. _____




Determine if the shapes shown are 'similar', 'congruent' or 'neither'.

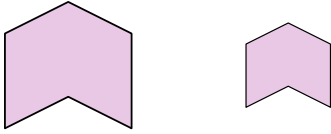
1)



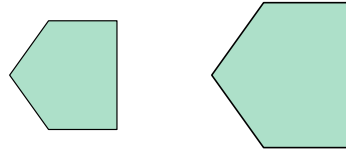
2)



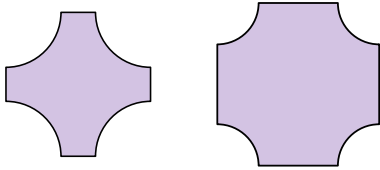
3)



4)



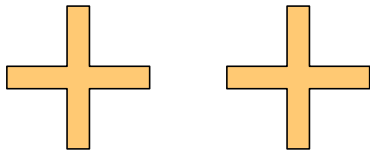
5)



6)



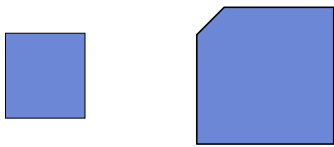
7)



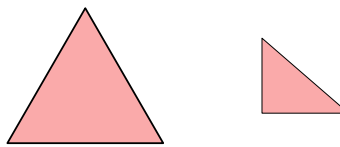
8)



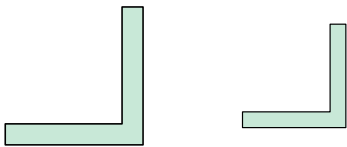
9)



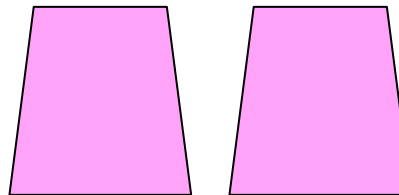
10)



11)



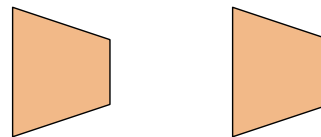
12)



13)



14)



15)



16)



Answers

1. similar

2. similar

3. similar

4. similar

5. neither

6. neither

7. congruent

8. congruent

9. neither

10. neither

11. similar

12. congruent

13. similar

14. congruent

15. similar

16. neither