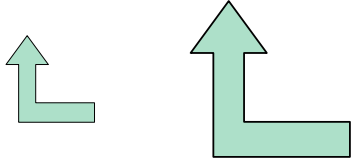




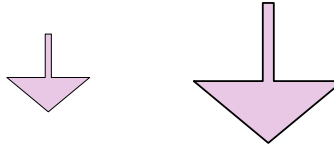
Determine if the shapes shown are 'similar', 'congruent' or 'neither'.

Answers

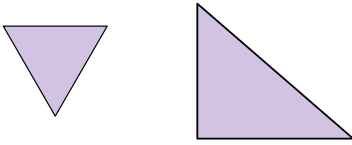
1)



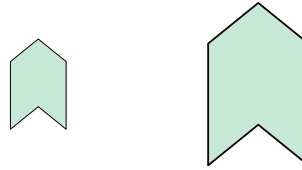
2)



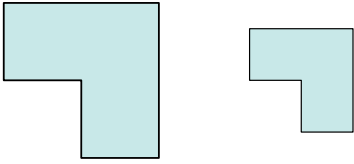
3)



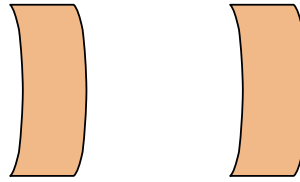
4)



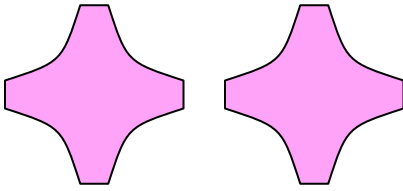
5)




6)



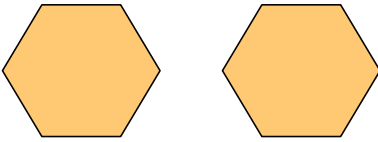
7)



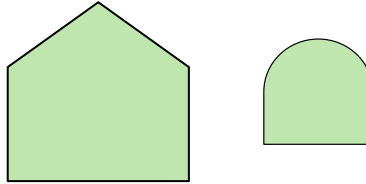
8)



9)



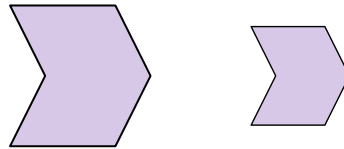
10)



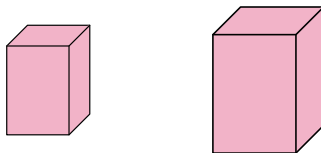
11)



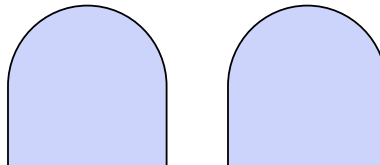
12)



13)



14)



15)



16)



1. \_\_\_\_\_

2. \_\_\_\_\_

3. \_\_\_\_\_

4. \_\_\_\_\_

5. \_\_\_\_\_

6. \_\_\_\_\_

7. \_\_\_\_\_

8. \_\_\_\_\_

9. \_\_\_\_\_

10. \_\_\_\_\_

11. \_\_\_\_\_

12. \_\_\_\_\_

13. \_\_\_\_\_

14. \_\_\_\_\_

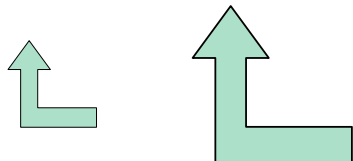
15. \_\_\_\_\_

16. \_\_\_\_\_

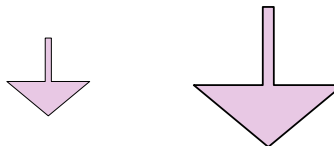


Determine if the shapes shown are 'similar', 'congruent' or 'neither'.

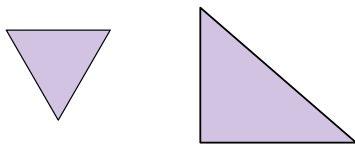
1)



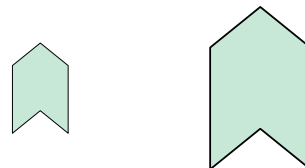
2)



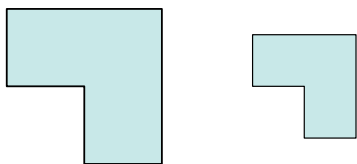
3)



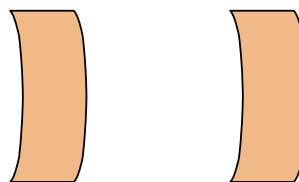
4)



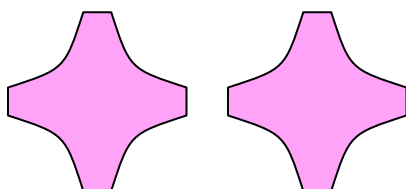
5)




6)



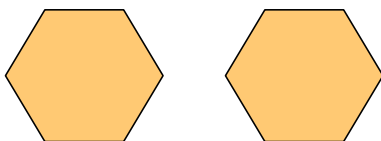
7)



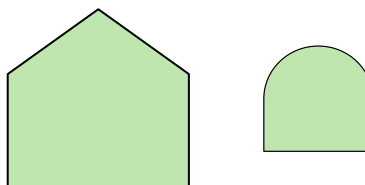
8)




9)



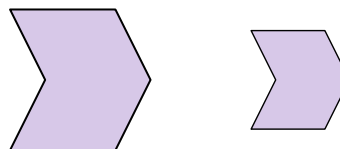
10)



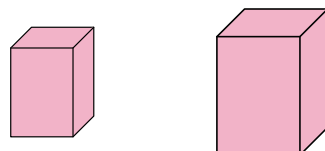
11)



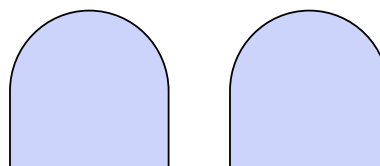
12)



13)



14)



15)



16)



Answers

1. similar

2. similar

3. neither

4. similar

5. similar

6. congruent

7. congruent

8. neither

9. congruent

10. neither

11. congruent

12. similar

13. similar

14. congruent

15. congruent

16. congruent