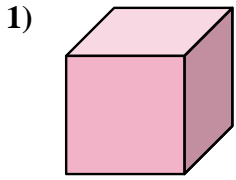


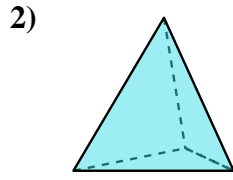


Determine which choice BEST describes the shape shown.

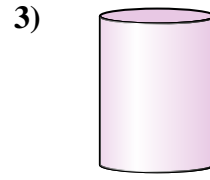
**Answers**



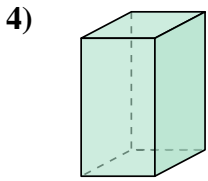
- A. cylinder
- B. triangular pyramid
- C. triangular prism
- D. cube



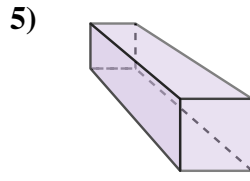
- A. rectangular pyramid
- B. triangular pyramid
- C. triangular prism
- D. rectangular prism



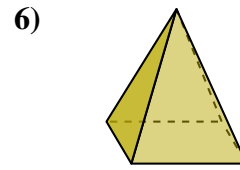
- A. cylinder
- B. sphere
- C. cone
- D. cube



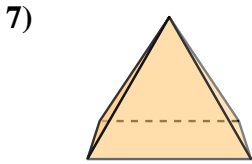
- A. cylinder
- B. rectangular pyramid
- C. sphere
- D. rectangular prism



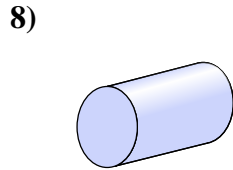
- A. rectangular prism
- B. cylinder
- C. cube
- D. sphere



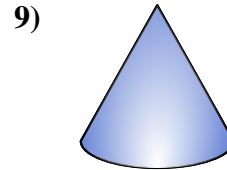
- A. rectangular pyramid
- B. triangular prism
- C. sphere
- D. cone



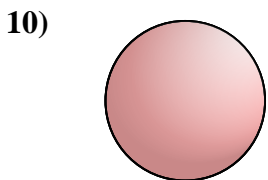
- A. cone
- B. triangular prism
- C. rectangular pyramid
- D. sphere



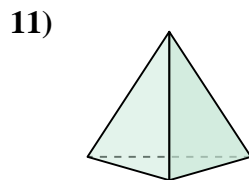
- A. triangular pyramid
- B. cylinder
- C. rectangular pyramid
- D. sphere



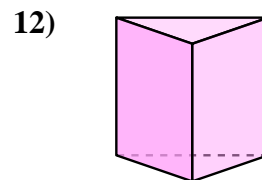
- A. cone
- B. cylinder
- C. triangular pyramid
- D. sphere



- A. cylinder
- B. triangular prism
- C. sphere
- D. cube



- A. sphere
- B. triangular pyramid
- C. rectangular pyramid
- D. rectangular prism

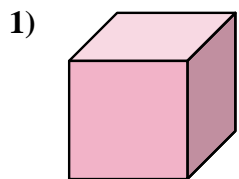


- A. triangular prism
- B. cylinder
- C. rectangular prism
- D. triangular pyramid

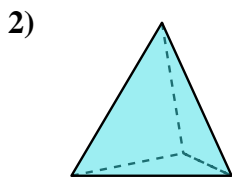
- 1. \_\_\_\_\_
- 2. \_\_\_\_\_
- 3. \_\_\_\_\_
- 4. \_\_\_\_\_
- 5. \_\_\_\_\_
- 6. \_\_\_\_\_
- 7. \_\_\_\_\_
- 8. \_\_\_\_\_
- 9. \_\_\_\_\_
- 10. \_\_\_\_\_
- 11. \_\_\_\_\_
- 12. \_\_\_\_\_



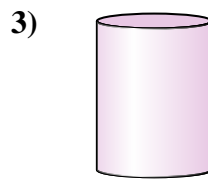
Determine which choice BEST describes the shape shown.



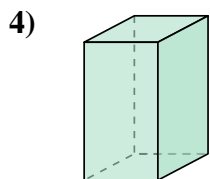
- 1)   
 A. cylinder   
 B. triangular pyramid   
 C. triangular prism   
 D. cube



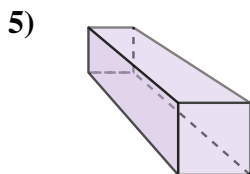
- 2)   
 A. rectangular pyramid   
 B. triangular pyramid   
 C. triangular prism   
 D. rectangular prism



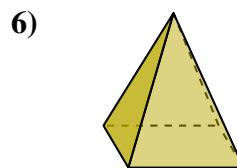
- 3)   
 A. cylinder   
 B. sphere   
 C. cone   
 D. cube



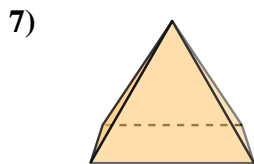
- 4)   
 A. cylinder   
 B. rectangular pyramid   
 C. sphere   
 D. rectangular prism



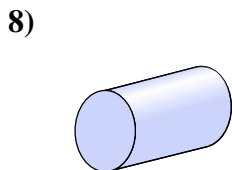
- 5)   
 A. rectangular prism   
 B. cylinder   
 C. cube   
 D. sphere



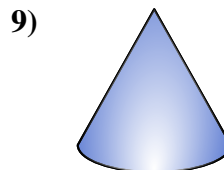
- 6)   
 A. rectangular pyramid   
 B. triangular prism   
 C. sphere   
 D. cone



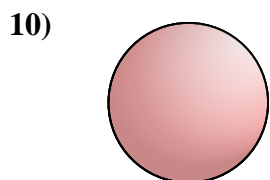
- 7)   
 A. cone   
 B. triangular prism   
 C. rectangular pyramid   
 D. sphere



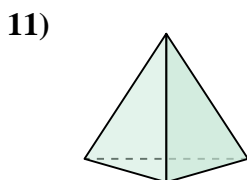
- 8)   
 A. triangular pyramid   
 B. cylinder   
 C. rectangular pyramid   
 D. sphere



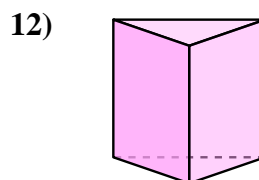
- 9)   
 A. cone   
 B. cylinder   
 C. triangular pyramid   
 D. sphere



- 10)   
 A. cylinder   
 B. triangular prism   
 C. sphere   
 D. cube



- 11)   
 A. sphere   
 B. triangular pyramid   
 C. rectangular pyramid   
 D. rectangular prism



- 12)   
 A. triangular prism   
 B. cylinder   
 C. rectangular prism   
 D. triangular pyramid

**Answers**

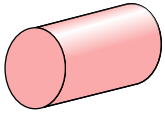
1.   **D**     
 2.   **B**     
 3.   **A**     
 4.   **D**     
 5.   **A**     
 6.   **A**     
 7.   **C**     
 8.   **B**     
 9.   **A**     
 10.   **C**     
 11.   **B**     
 12.   **A**



Determine which choice BEST describes the shape shown.

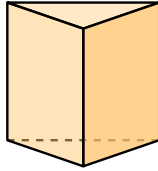
**Answers**

1)



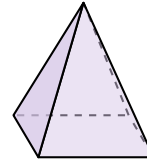
- A. sphere
- B. triangular pyramid
- C. rectangular pyramid
- D. cylinder

2)




- A. triangular prism
- B. cone
- C. triangular pyramid
- D. rectangular prism

3)



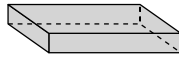
- A. rectangular pyramid
- B. sphere
- C. rectangular prism
- D. triangular prism

4)



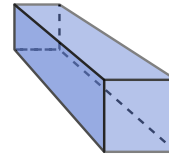
- A. triangular pyramid
- B. cylinder
- C. triangular prism
- D. sphere

5)



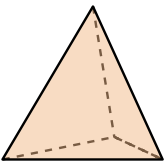
- A. rectangular pyramid
- B. sphere
- C. rectangular prism
- D. triangular prism

6)



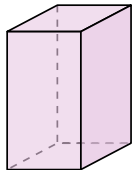
- A. cube
- B. cone
- C. triangular pyramid
- D. rectangular prism

7)



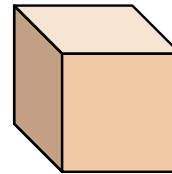
- A. triangular pyramid
- B. triangular prism
- C. cone
- D. rectangular pyramid

8)



- A. cube
- B. cylinder
- C. rectangular pyramid
- D. rectangular prism

9)



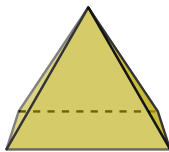
- A. cone
- B. cube
- C. triangular prism
- D. rectangular pyramid

10)




- A. cylinder
- B. sphere
- C. triangular pyramid
- D. cone

11)



- A. rectangular pyramid
- B. rectangular prism
- C. sphere
- D. cube

12)



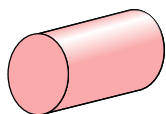
- A. cone
- B. triangular pyramid
- C. triangular prism
- D. sphere

- 1. \_\_\_\_\_
- 2. \_\_\_\_\_
- 3. \_\_\_\_\_
- 4. \_\_\_\_\_
- 5. \_\_\_\_\_
- 6. \_\_\_\_\_
- 7. \_\_\_\_\_
- 8. \_\_\_\_\_
- 9. \_\_\_\_\_
- 10. \_\_\_\_\_
- 11. \_\_\_\_\_
- 12. \_\_\_\_\_



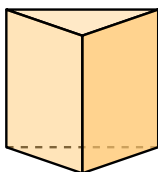
Determine which choice BEST describes the shape shown.

1)



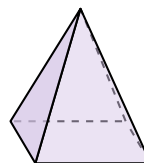
- A. sphere
- B. triangular pyramid
- C. rectangular pyramid
- D. cylinder

2)



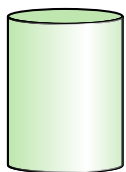
- A. triangular prism
- B. cone
- C. triangular pyramid
- D. rectangular prism

3)



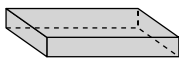
- A. rectangular pyramid
- B. sphere
- C. rectangular prism
- D. triangular prism

4)



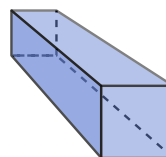
- A. triangular pyramid
- B. cylinder
- C. triangular prism
- D. sphere

5)



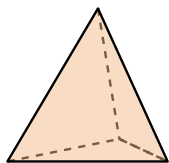
- A. rectangular pyramid
- B. sphere
- C. rectangular prism
- D. triangular prism

6)



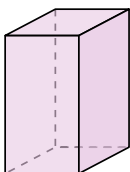
- A. cube
- B. cone
- C. triangular pyramid
- D. rectangular prism

7)



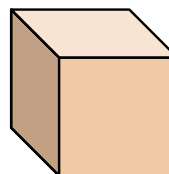
- A. triangular pyramid
- B. triangular prism
- C. cone
- D. rectangular pyramid

8)



- A. cube
- B. cylinder
- C. rectangular pyramid
- D. rectangular prism

9)



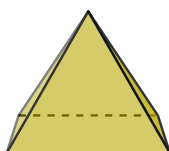
- A. cone
- B. cube
- C. triangular prism
- D. rectangular pyramid

10)




- A. cylinder
- B. sphere
- C. triangular pyramid
- D. cone

11)



- A. rectangular pyramid
- B. rectangular prism
- C. sphere
- D. cube

12)



- A. cone
- B. triangular pyramid
- C. triangular prism
- D. sphere

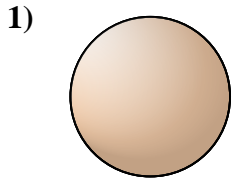
**Answers**

- 1.     **D**
- 2.     **A**
- 3.     **A**
- 4.     **B**
- 5.     **C**
- 6.     **D**
- 7.     **A**
- 8.     **D**
- 9.     **B**
- 10.     **D**
- 11.     **A**
- 12.     **D**

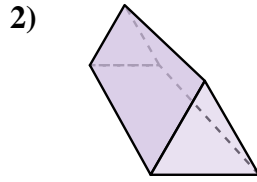


Determine which choice BEST describes the shape shown.

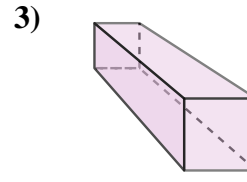
**Answers**



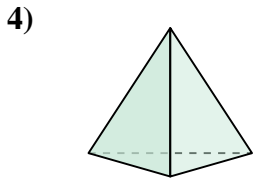
- A. triangular pyramid
- B. sphere
- C. rectangular pyramid
- D. rectangular prism



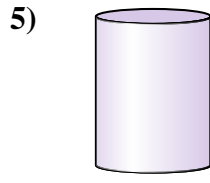
- A. triangular pyramid
- B. cone
- C. triangular prism
- D. cube



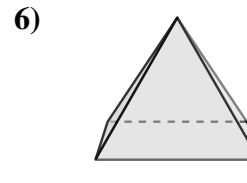
- A. cube
- B. triangular prism
- C. rectangular prism
- D. rectangular pyramid



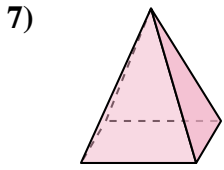
- A. triangular pyramid
- B. sphere
- C. triangular prism
- D. cube



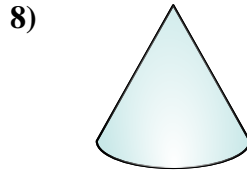
- A. rectangular prism
- B. rectangular pyramid
- C. cylinder
- D. triangular pyramid



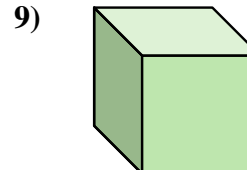
- A. cone
- B. triangular pyramid
- C. rectangular pyramid
- D. cylinder



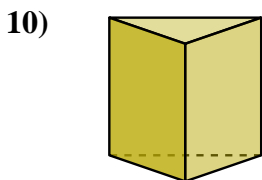
- A. triangular pyramid
- B. cube
- C. rectangular prism
- D. rectangular pyramid



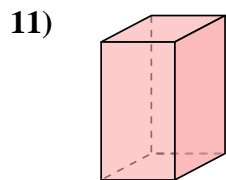
- A. rectangular pyramid
- B. cube
- C. triangular prism
- D. cone



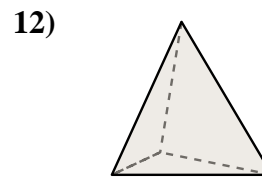
- A. cylinder
- B. rectangular prism
- C. triangular prism
- D. cube



- A. cylinder
- B. sphere
- C. cone
- D. triangular prism



- A. triangular prism
- B. cube
- C. rectangular prism
- D. cone

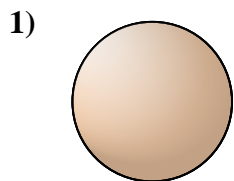


- A. sphere
- B. triangular prism
- C. cube
- D. triangular pyramid

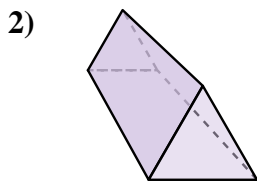
- 1. \_\_\_\_\_
- 2. \_\_\_\_\_
- 3. \_\_\_\_\_
- 4. \_\_\_\_\_
- 5. \_\_\_\_\_
- 6. \_\_\_\_\_
- 7. \_\_\_\_\_
- 8. \_\_\_\_\_
- 9. \_\_\_\_\_
- 10. \_\_\_\_\_
- 11. \_\_\_\_\_
- 12. \_\_\_\_\_



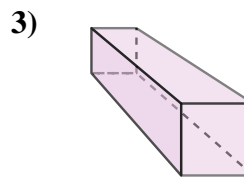
Determine which choice BEST describes the shape shown.



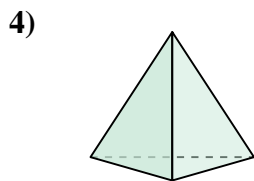
- A. triangular pyramid
- B. sphere
- C. rectangular pyramid
- D. rectangular prism



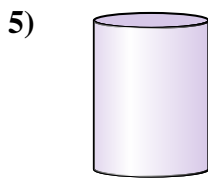
- A. triangular pyramid
- B. cone
- C. triangular prism
- D. cube



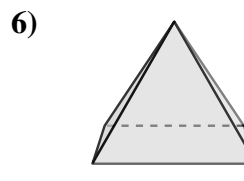
- A. cube
- B. triangular prism
- C. rectangular prism
- D. rectangular pyramid



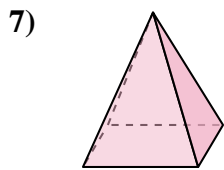
- A. triangular pyramid
- B. sphere
- C. triangular prism
- D. cube



- A. rectangular prism
- B. rectangular pyramid
- C. cylinder
- D. triangular pyramid



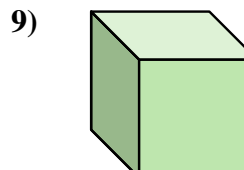
- A. cone
- B. triangular pyramid
- C. rectangular pyramid
- D. cylinder



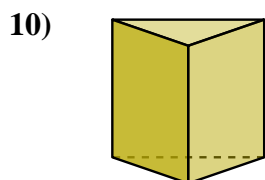
- A. triangular pyramid
- B. cube
- C. rectangular prism
- D. rectangular pyramid



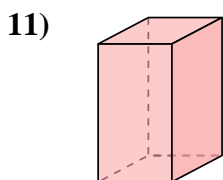
- A. rectangular pyramid
- B. cube
- C. triangular prism
- D. cone



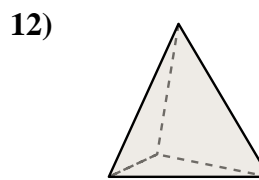
- A. cylinder
- B. rectangular prism
- C. triangular prism
- D. cube



- A. cylinder
- B. sphere
- C. cone
- D. triangular prism



- A. triangular prism
- B. cube
- C. rectangular prism
- D. cone



- A. sphere
- B. triangular prism
- C. cube
- D. triangular pyramid

**Answers**

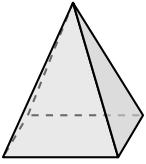
- 1.   **B**
- 2.   **C**
- 3.   **C**
- 4.   **A**
- 5.   **C**
- 6.   **C**
- 7.   **D**
- 8.   **D**
- 9.   **D**
- 10.   **D**
- 11.   **C**
- 12.   **D**



Determine which choice BEST describes the shape shown.


**Answers**

1)



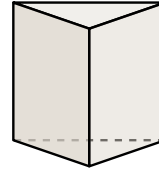
- A. sphere
- B. rectangular prism
- C. rectangular pyramid
- D. cube

2)



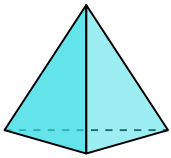
- A. cylinder
- B. rectangular pyramid
- C. rectangular prism
- D. sphere

3)



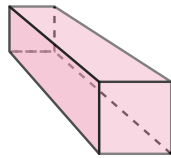
- A. triangular prism
- B. cylinder
- C. sphere
- D. cube

4)



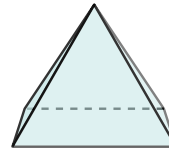
- A. triangular pyramid
- B. cube
- C. rectangular pyramid
- D. sphere

5)



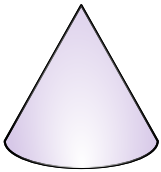
- A. rectangular prism
- B. sphere
- C. rectangular pyramid
- D. triangular pyramid

6)



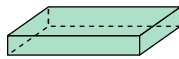
- A. sphere
- B. cube
- C. rectangular pyramid
- D. triangular prism

7)



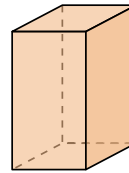
- A. cube
- B. cone
- C. triangular pyramid
- D. sphere

8)



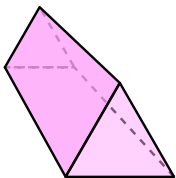
- A. cylinder
- B. rectangular prism
- C. sphere
- D. cube

9)



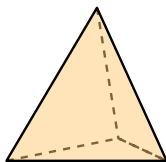
- A. cone
- B. cylinder
- C. triangular prism
- D. rectangular prism

10)



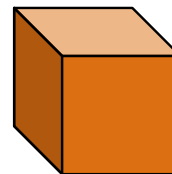
- A. rectangular pyramid
- B. sphere
- C. triangular prism
- D. cylinder

11)



- A. cube
- B. cylinder
- C. cone
- D. triangular pyramid

12)

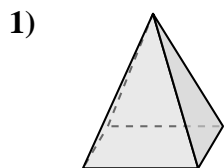


- A. cube
- B. rectangular prism
- C. rectangular pyramid
- D. triangular pyramid


- 1. \_\_\_\_\_
- 2. \_\_\_\_\_
- 3. \_\_\_\_\_
- 4. \_\_\_\_\_
- 5. \_\_\_\_\_
- 6. \_\_\_\_\_
- 7. \_\_\_\_\_
- 8. \_\_\_\_\_
- 9. \_\_\_\_\_
- 10. \_\_\_\_\_
- 11. \_\_\_\_\_
- 12. \_\_\_\_\_



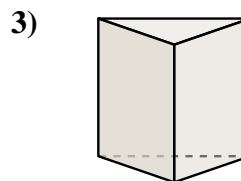
Determine which choice BEST describes the shape shown.



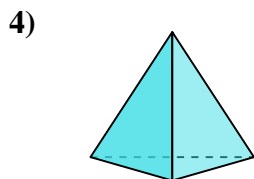
- A. sphere
- B. rectangular prism
- C. rectangular pyramid
- D. cube



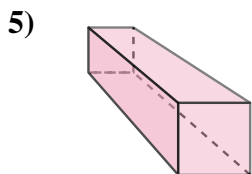
- A. cylinder
- B. rectangular pyramid
- C. rectangular prism
- D. sphere



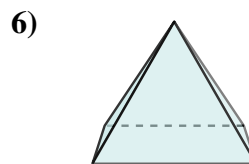
- A. triangular prism
- B. cylinder
- C. sphere
- D. cube



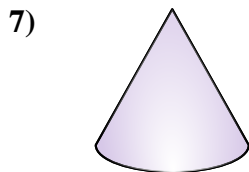
- A. triangular pyramid
- B. cube
- C. rectangular pyramid
- D. sphere



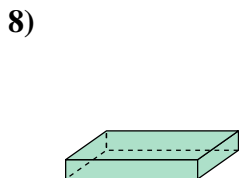
- A. rectangular prism
- B. sphere
- C. rectangular pyramid
- D. triangular pyramid



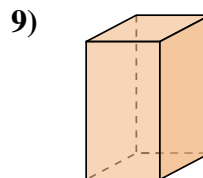
- A. sphere
- B. cube
- C. rectangular pyramid
- D. triangular prism



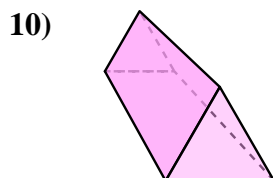
- A. cube
- B. cone
- C. triangular pyramid
- D. sphere



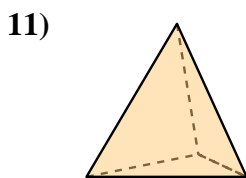
- A. cylinder
- B. rectangular prism
- C. sphere
- D. cube



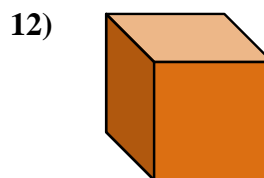
- A. cone
- B. cylinder
- C. triangular prism
- D. rectangular prism



- A. rectangular pyramid
- B. sphere
- C. triangular prism
- D. cylinder



- A. cube
- B. cylinder
- C. cone
- D. triangular pyramid



- A. cube
- B. rectangular prism
- C. rectangular pyramid
- D. triangular pyramid

**Answers**

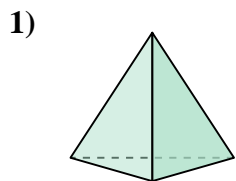
- 1.   **C**
- 2.   **D**
- 3.   **A**
- 4.   **A**
- 5.   **A**
- 6.   **C**
- 7.   **B**
- 8.   **B**
- 9.   **D**
- 10.   **C**
- 11.   **D**
- 12.   **A**



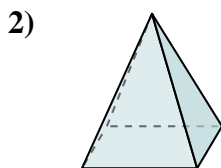


Determine which choice BEST describes the shape shown.

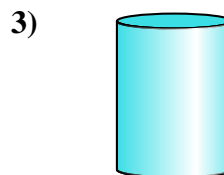
**Answers**



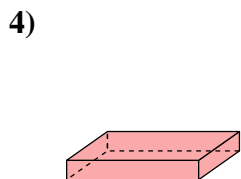
- A. triangular pyramid
- B. sphere
- C. cylinder
- D. rectangular pyramid



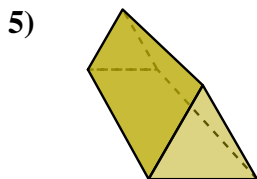
- A. triangular pyramid
- B. cone
- C. cube
- D. rectangular pyramid



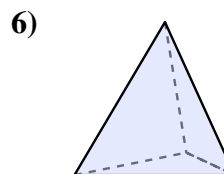
- A. rectangular pyramid
- B. rectangular prism
- C. cylinder
- D. sphere



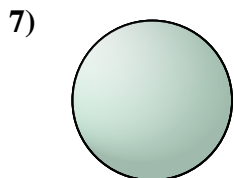
- A. rectangular prism
- B. rectangular pyramid
- C. triangular pyramid
- D. cone



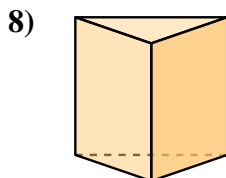
- A. rectangular pyramid
- B. rectangular prism
- C. triangular prism
- D. triangular pyramid



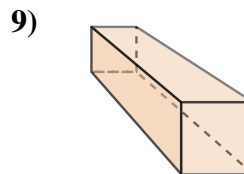
- A. triangular pyramid
- B. rectangular prism
- C. triangular prism
- D. cube



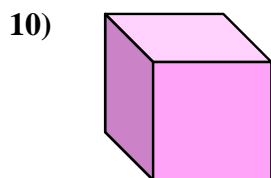
- A. triangular prism
- B. rectangular prism
- C. sphere
- D. cube




- A. cone
- B. triangular prism
- C. cube
- D. rectangular prism



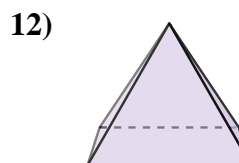
- A. cylinder
- B. sphere
- C. rectangular prism
- D. rectangular pyramid



- A. rectangular pyramid
- B. cube
- C. triangular prism
- D. cone



- A. rectangular pyramid
- B. sphere
- C. triangular prism
- D. cone

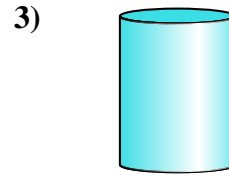
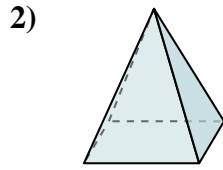
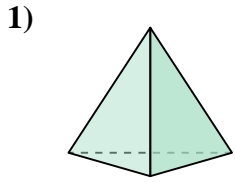


- A. triangular prism
- B. triangular pyramid
- C. cube
- D. rectangular pyramid

- 1. \_\_\_\_\_
- 2. \_\_\_\_\_
- 3. \_\_\_\_\_
- 4. \_\_\_\_\_
- 5. \_\_\_\_\_
- 6. \_\_\_\_\_
- 7. \_\_\_\_\_
- 8. \_\_\_\_\_
- 9. \_\_\_\_\_
- 10. \_\_\_\_\_
- 11. \_\_\_\_\_
- 12. \_\_\_\_\_



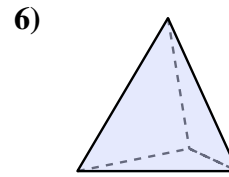
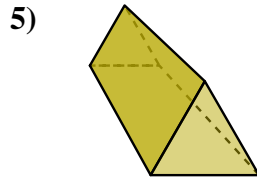
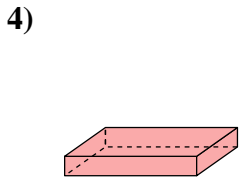
Determine which choice BEST describes the shape shown.



- 1) A. triangular pyramid
- B. sphere
- C. cylinder
- D. rectangular pyramid

- 2) A. triangular pyramid
- B. cone
- C. cube
- D. rectangular pyramid

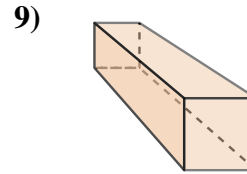
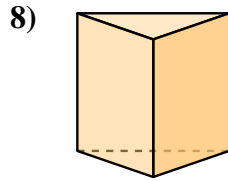
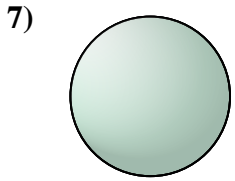
- 3) A. rectangular pyramid
- B. rectangular prism
- C. cylinder
- D. sphere



- 4) A. rectangular prism
- B. rectangular pyramid
- C. triangular pyramid
- D. cone

- 5) A. rectangular pyramid
- B. rectangular prism
- C. triangular prism
- D. triangular pyramid

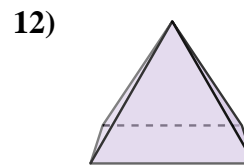

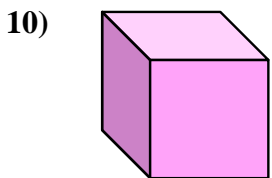
- 6) A. triangular pyramid
- B. rectangular prism
- C. triangular prism
- D. cube



- 7) A. triangular prism
- B. rectangular prism
- C. sphere
- D. cube

- 8) A. cone
- B. triangular prism
- C. cube
- D. rectangular prism

- 9) A. cylinder
- B. sphere
- C. rectangular prism
- D. rectangular pyramid



- 10) A. rectangular pyramid
- B. cube
- C. triangular prism
- D. cone

- 11) A. rectangular pyramid
- B. sphere
- C. triangular prism
- D. cone

- 12) A. triangular prism
- B. triangular pyramid
- C. cube
- D. rectangular pyramid

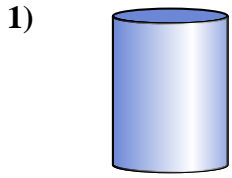
**Answers**

- 1. **A**
- 2. **D**
- 3. **C**
- 4. **A**
- 5. **C**
- 6. **A**
- 7. **C**
- 8. **B**
- 9. **C**
- 10. **B**
- 11. **D**
- 12. **D**

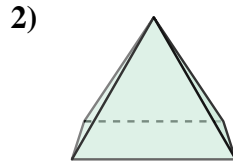


Determine which choice BEST describes the shape shown.

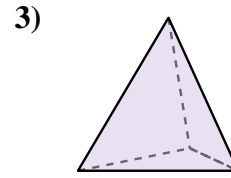
**Answers**



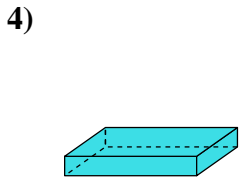
- A. rectangular prism
- B. cylinder
- C. cone
- D. sphere



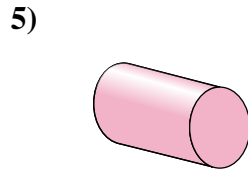
- A. cylinder
- B. triangular prism
- C. rectangular pyramid
- D. triangular pyramid



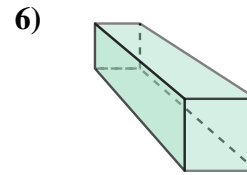
- A. cone
- B. cylinder
- C. sphere
- D. triangular pyramid



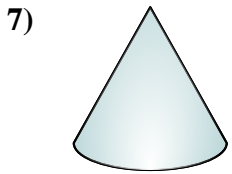
- A. triangular prism
- B. cylinder
- C. rectangular prism
- D. sphere



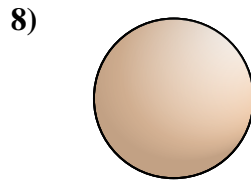
- A. cylinder
- B. cube
- C. rectangular prism
- D. rectangular pyramid



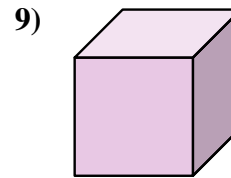
- A. triangular pyramid
- B. rectangular prism
- C. cube
- D. cone



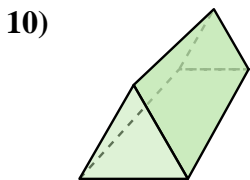
- A. sphere
- B. cylinder
- C. cone
- D. cube



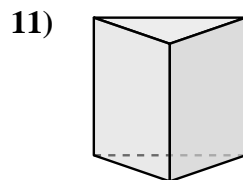
- A. cube
- B. sphere
- C. cone
- D. cylinder



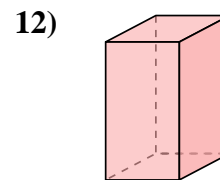
- A. triangular pyramid
- B. cube
- C. triangular prism
- D. rectangular prism



- A. triangular pyramid
- B. cone
- C. triangular prism
- D. sphere



- A. triangular prism
- B. triangular pyramid
- C. cylinder
- D. rectangular prism

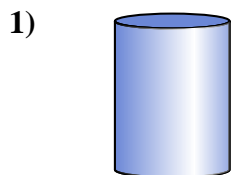


- A. sphere
- B. cube
- C. triangular prism
- D. rectangular prism

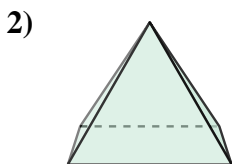
- 1. \_\_\_\_\_
- 2. \_\_\_\_\_
- 3. \_\_\_\_\_
- 4. \_\_\_\_\_
- 5. \_\_\_\_\_
- 6. \_\_\_\_\_
- 7. \_\_\_\_\_
- 8. \_\_\_\_\_
- 9. \_\_\_\_\_
- 10. \_\_\_\_\_
- 11. \_\_\_\_\_
- 12. \_\_\_\_\_



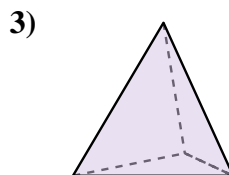
Determine which choice BEST describes the shape shown.



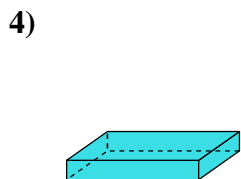
- A. rectangular prism
- B. cylinder
- C. cone
- D. sphere



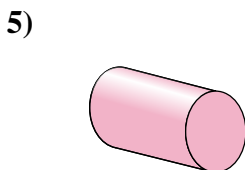
- A. cylinder
- B. triangular prism
- C. rectangular pyramid
- D. triangular pyramid



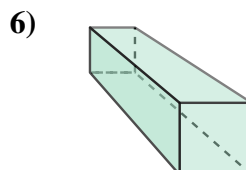
- A. cone
- B. cylinder
- C. sphere
- D. triangular pyramid



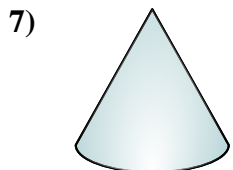
- A. triangular prism
- B. cylinder
- C. rectangular prism
- D. sphere




- A. cylinder
- B. cube
- C. rectangular prism
- D. rectangular pyramid



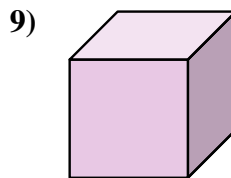
- A. triangular pyramid
- B. rectangular prism
- C. cube
- D. cone



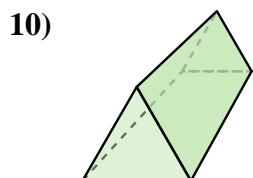
- A. sphere
- B. cylinder
- C. cone
- D. cube



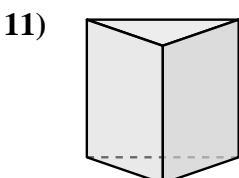
- A. cube
- B. sphere
- C. cone
- D. cylinder



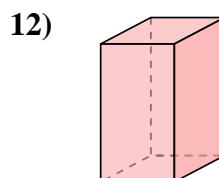
- A. triangular pyramid
- B. cube
- C. triangular prism
- D. rectangular prism



- A. triangular pyramid
- B. cone
- C. triangular prism
- D. sphere



- A. triangular prism
- B. triangular pyramid
- C. cylinder
- D. rectangular prism



- A. sphere
- B. cube
- C. triangular prism
- D. rectangular prism

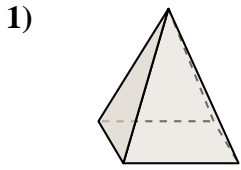
**Answers**

- 1.   **B**
- 2.   **C**
- 3.   **D**
- 4.   **C**
- 5.   **A**
- 6.   **B**
- 7.   **C**
- 8.   **B**
- 9.   **B**
- 10.   **C**
- 11.   **A**
- 12.   **D**

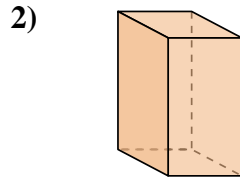


Determine which choice BEST describes the shape shown.

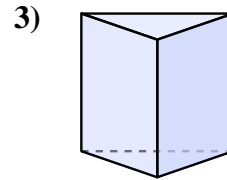
**Answers**



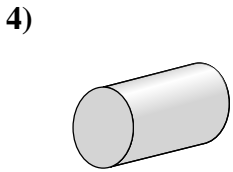
- A. rectangular pyramid
- B. triangular prism
- C. rectangular prism
- D. cube



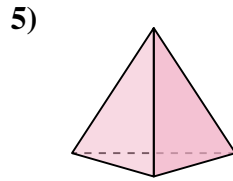
- A. cone
- B. triangular prism
- C. rectangular pyramid
- D. rectangular prism



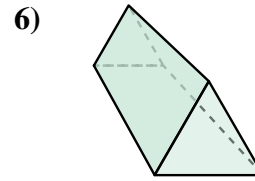
- A. cube
- B. cone
- C. triangular prism
- D. cylinder



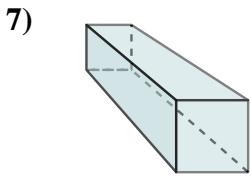
- A. rectangular prism
- B. rectangular pyramid
- C. cylinder
- D. sphere



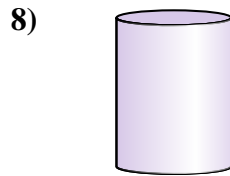
- A. cube
- B. triangular pyramid
- C. rectangular prism
- D. cylinder



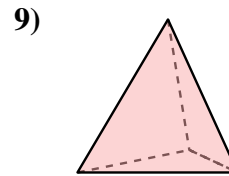
- A. cone
- B. sphere
- C. triangular prism
- D. cylinder



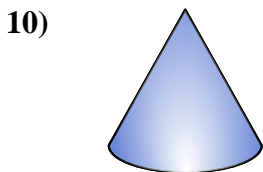
- A. rectangular pyramid
- B. cube
- C. rectangular prism
- D. triangular prism



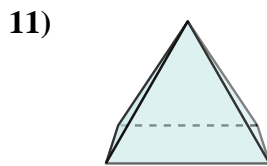
- A. triangular prism
- B. cube
- C. cylinder
- D. cone



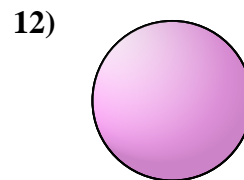
- A. cylinder
- B. cone
- C. triangular pyramid
- D. cube



- A. cylinder
- B. rectangular pyramid
- C. cone
- D. rectangular prism



- A. triangular pyramid
- B. cone
- C. rectangular prism
- D. rectangular pyramid

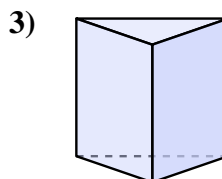
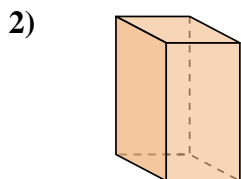
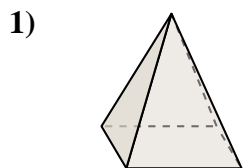


- A. triangular pyramid
- B. rectangular prism
- C. cone
- D. sphere

- 1. \_\_\_\_\_
- 2. \_\_\_\_\_
- 3. \_\_\_\_\_
- 4. \_\_\_\_\_
- 5. \_\_\_\_\_
- 6. \_\_\_\_\_
- 7. \_\_\_\_\_
- 8. \_\_\_\_\_
- 9. \_\_\_\_\_
- 10. \_\_\_\_\_
- 11. \_\_\_\_\_
- 12. \_\_\_\_\_



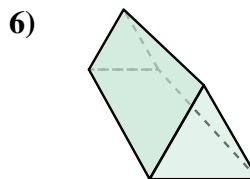
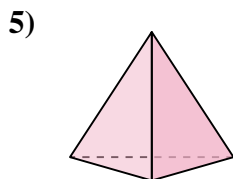
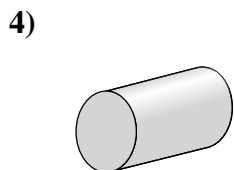
Determine which choice BEST describes the shape shown.



- 1)   
 A. rectangular pyramid   
 B. triangular prism   
 C. rectangular prism   
 D. cube

- 2)   
 A. cone   
 B. triangular prism   
 C. rectangular pyramid   
 D. rectangular prism

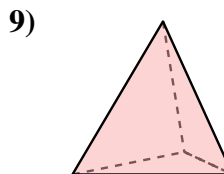

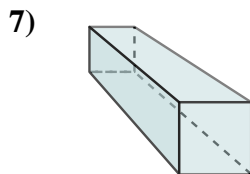
- 3)   
 A. cube   
 B. cone   
 C. triangular prism   
 D. cylinder



- 4)   
 A. rectangular prism   
 B. rectangular pyramid   
 C. cylinder   
 D. sphere

- 5)   
 A. cube   
 B. triangular pyramid   
 C. rectangular prism   
 D. cylinder

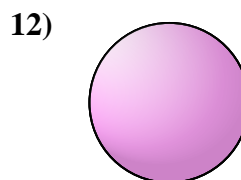
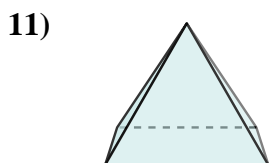
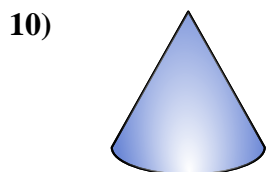
- 6)   
 A. cone   
 B. sphere   
 C. triangular prism   
 D. cylinder



- 7)   
 A. rectangular pyramid   
 B. cube   
 C. rectangular prism   
 D. triangular prism

- 8)   
 A. triangular prism   
 B. cube   
 C. cylinder   
 D. cone

- 9)   
 A. cylinder   
 B. cone   
 C. triangular pyramid   
 D. cube



- 10)   
 A. cylinder   
 B. rectangular pyramid   
 C. cone   
 D. rectangular prism

- 11)   
 A. triangular pyramid   
 B. cone   
 C. rectangular prism   
 D. rectangular pyramid

- 12)   
 A. triangular pyramid   
 B. rectangular prism   
 C. cone   
 D. sphere

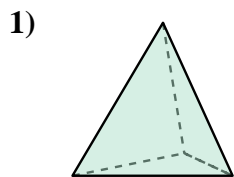
**Answers**

1.   **A**     
 2.   **D**     
 3.   **C**     
 4.   **C**     
 5.   **B**     
 6.   **C**     
 7.   **C**     
 8.   **C**     
 9.   **C**     
 10.   **C**     
 11.   **D**     
 12.   **D**

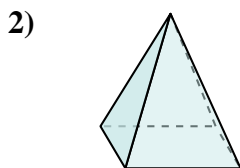


Determine which choice BEST describes the shape shown.

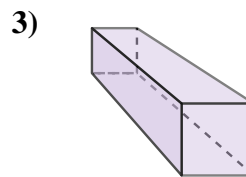
**Answers**



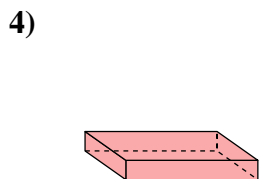
- A. triangular pyramid
- B. triangular prism
- C. rectangular prism
- D. cube



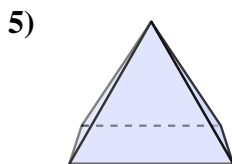
- A. cube
- B. triangular prism
- C. cone
- D. rectangular pyramid



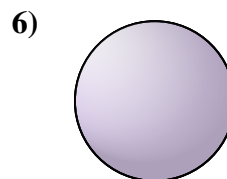
- A. triangular prism
- B. cylinder
- C. rectangular prism
- D. cone



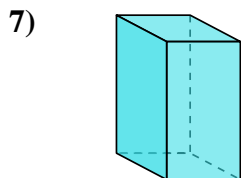
- A. cone
- B. triangular pyramid
- C. cylinder
- D. rectangular prism



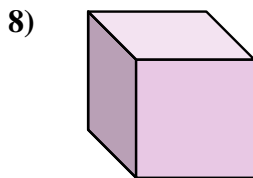
- A. sphere
- B. triangular pyramid
- C. cylinder
- D. rectangular pyramid



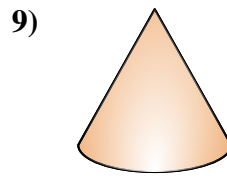
- A. cone
- B. triangular prism
- C. rectangular pyramid
- D. sphere



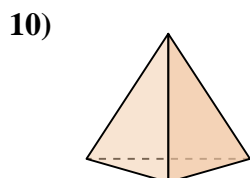
- A. cube
- B. triangular prism
- C. rectangular prism
- D. cone



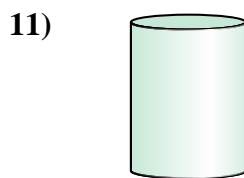
- A. cylinder
- B. cube
- C. rectangular pyramid
- D. triangular pyramid



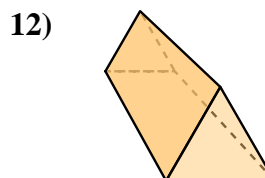
- A. cylinder
- B. rectangular prism
- C. triangular pyramid
- D. cone



- A. cone
- B. triangular pyramid
- C. sphere
- D. triangular prism



- A. cylinder
- B. cube
- C. triangular pyramid
- D. triangular prism

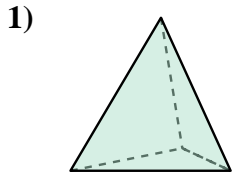


- A. cube
- B. rectangular pyramid
- C. triangular prism
- D. rectangular prism

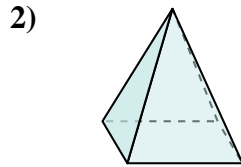
- 1. \_\_\_\_\_
- 2. \_\_\_\_\_
- 3. \_\_\_\_\_
- 4. \_\_\_\_\_
- 5. \_\_\_\_\_
- 6. \_\_\_\_\_
- 7. \_\_\_\_\_
- 8. \_\_\_\_\_
- 9. \_\_\_\_\_
- 10. \_\_\_\_\_
- 11. \_\_\_\_\_
- 12. \_\_\_\_\_



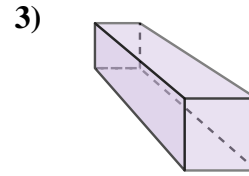
Determine which choice BEST describes the shape shown.



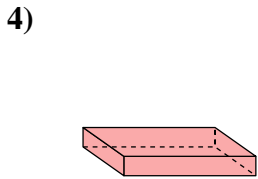
- A. triangular pyramid
- B. triangular prism
- C. rectangular prism
- D. cube



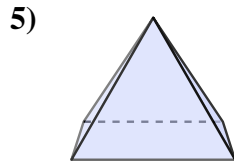
- A. cube
- B. triangular prism
- C. cone
- D. rectangular pyramid



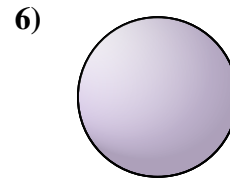
- A. triangular prism
- B. cylinder
- C. rectangular prism
- D. cone



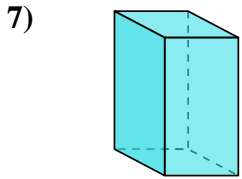
- A. cone
- B. triangular pyramid
- C. cylinder
- D. rectangular prism



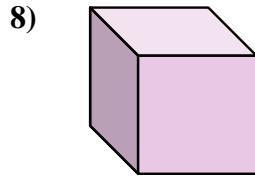
- A. sphere
- B. triangular pyramid
- C. cylinder
- D. rectangular pyramid



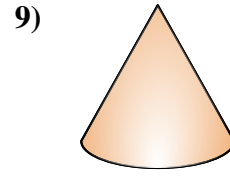
- A. cone
- B. triangular prism
- C. rectangular pyramid
- D. sphere



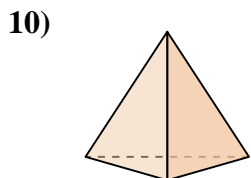
- A. cube
- B. triangular prism
- C. rectangular prism
- D. cone



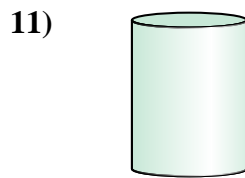
- A. cylinder
- B. cube
- C. rectangular pyramid
- D. triangular pyramid



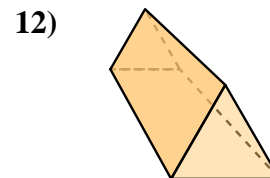
- A. cylinder
- B. rectangular prism
- C. triangular pyramid
- D. cone



- A. cone
- B. triangular pyramid
- C. sphere
- D. triangular prism



- A. cylinder
- B. cube
- C. triangular pyramid
- D. triangular prism



- A. cube
- B. rectangular pyramid
- C. triangular prism
- D. rectangular prism

**Answers**

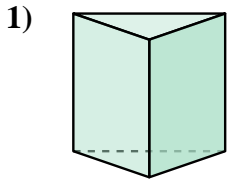
- 1.   **A**
- 2.   **D**
- 3.   **C**
- 4.   **D**
- 5.   **D**
- 6.   **D**
- 7.   **C**
- 8.   **B**
- 9.   **D**
- 10.   **B**
- 11.   **A**
- 12.   **C**



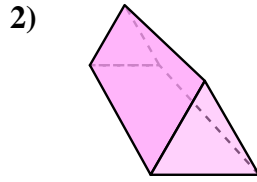


Determine which choice BEST describes the shape shown.

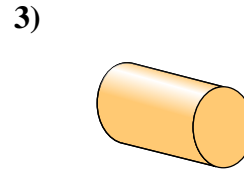
**Answers**



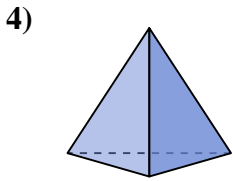
- A. cylinder
- B. cube
- C. triangular pyramid
- D. triangular prism



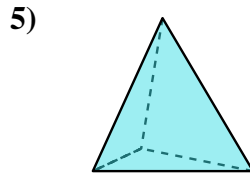
- A. triangular pyramid
- B. triangular prism
- C. cylinder
- D. sphere



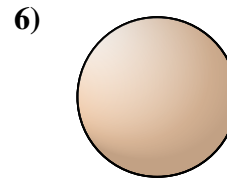
- A. rectangular prism
- B. rectangular pyramid
- C. cylinder
- D. cone



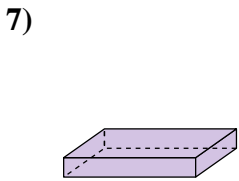
- A. rectangular prism
- B. sphere
- C. triangular pyramid
- D. cone



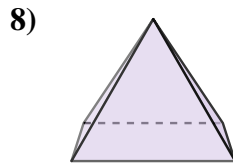
- A. cone
- B. triangular pyramid
- C. rectangular prism
- D. cube



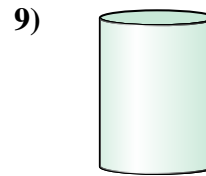
- A. rectangular pyramid
- B. sphere
- C. rectangular prism
- D. cube



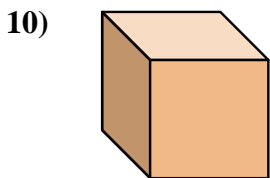
- A. rectangular prism
- B. cone
- C. cube
- D. triangular prism



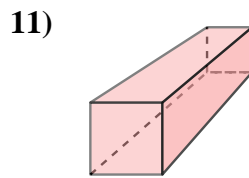
- A. sphere
- B. rectangular pyramid
- C. cylinder
- D. triangular prism



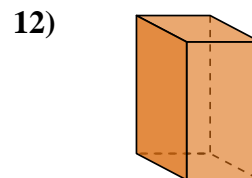
- A. cone
- B. triangular pyramid
- C. sphere
- D. cylinder



- A. rectangular pyramid
- B. sphere
- C. cube
- D. cone



- A. cone
- B. rectangular prism
- C. cube
- D. rectangular pyramid

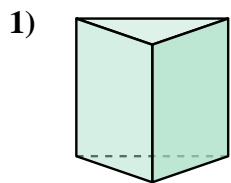


- A. sphere
- B. rectangular prism
- C. cylinder
- D. cube

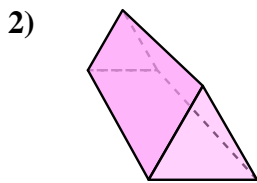
- 1. \_\_\_\_\_
- 2. \_\_\_\_\_
- 3. \_\_\_\_\_
- 4. \_\_\_\_\_
- 5. \_\_\_\_\_
- 6. \_\_\_\_\_
- 7. \_\_\_\_\_
- 8. \_\_\_\_\_
- 9. \_\_\_\_\_
- 10. \_\_\_\_\_
- 11. \_\_\_\_\_
- 12. \_\_\_\_\_



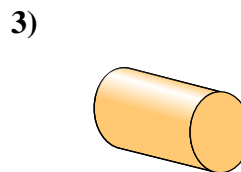
Determine which choice BEST describes the shape shown.



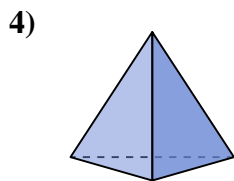
- A. cylinder
- B. cube
- C. triangular pyramid
- D. triangular prism



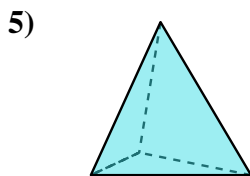
- A. triangular pyramid
- B. triangular prism
- C. cylinder
- D. sphere



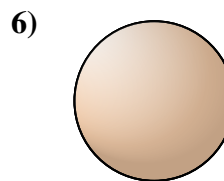
- A. rectangular prism
- B. rectangular pyramid
- C. cylinder
- D. cone



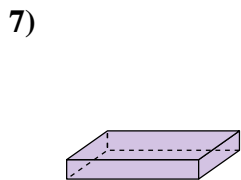
- A. rectangular prism
- B. sphere
- C. triangular pyramid
- D. cone



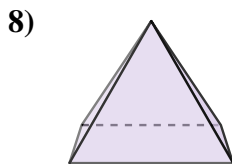
- A. cone
- B. triangular pyramid
- C. rectangular prism
- D. cube



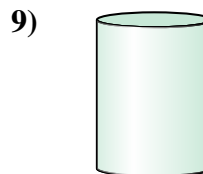
- A. rectangular pyramid
- B. sphere
- C. rectangular prism
- D. cube



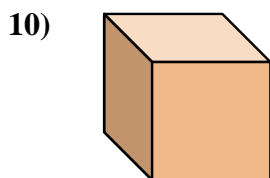
- A. rectangular prism
- B. cone
- C. cube
- D. triangular prism



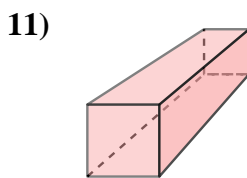
- A. sphere
- B. rectangular pyramid
- C. cylinder
- D. triangular prism



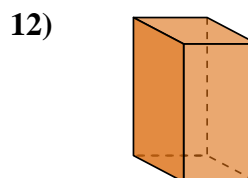
- A. cone
- B. triangular pyramid
- C. sphere
- D. cylinder



- A. rectangular pyramid
- B. sphere
- C. cube
- D. cone



- A. cone
- B. rectangular prism
- C. cube
- D. rectangular pyramid



- A. sphere
- B. rectangular prism
- C. cylinder
- D. cube

**Answers**

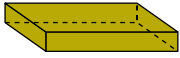
- 1.   **D**
- 2.   **B**
- 3.   **C**
- 4.   **C**
- 5.   **B**
- 6.   **B**
- 7.   **A**
- 8.   **B**
- 9.   **D**
- 10.   **C**
- 11.   **B**
- 12.   **B**



Determine which choice BEST describes the shape shown.

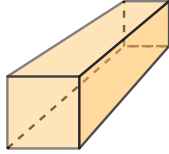
**Answers**

1)



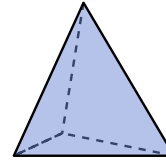
- A. cube
- B. cylinder
- C. triangular prism
- D. rectangular prism

2)



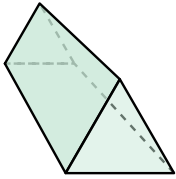
- A. cone
- B. cube
- C. rectangular prism
- D. triangular prism

3)



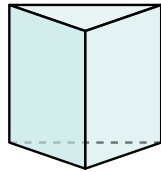
- A. cone
- B. rectangular pyramid
- C. cylinder
- D. triangular pyramid

4)



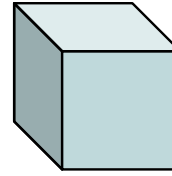
- A. rectangular pyramid
- B. rectangular prism
- C. triangular prism
- D. cube

5)



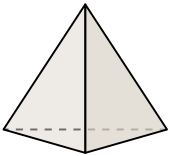
- A. rectangular prism
- B. cube
- C. cone
- D. triangular prism

6)




- A. rectangular pyramid
- B. cone
- C. cylinder
- D. cube

7)



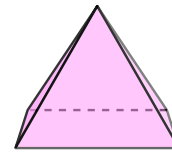
- A. triangular pyramid
- B. cone
- C. rectangular prism
- D. cylinder

8)



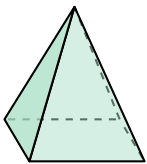
- A. sphere
- B. cylinder
- C. rectangular pyramid
- D. cube

9)



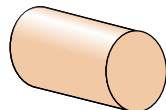
- A. triangular prism
- B. cylinder
- C. rectangular pyramid
- D. cube

10)




- A. rectangular pyramid
- B. rectangular prism
- C. triangular prism
- D. sphere

11)



- A. triangular pyramid
- B. sphere
- C. cylinder
- D. cube

12)



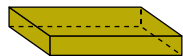
- A. rectangular pyramid
- B. triangular prism
- C. cube
- D. cylinder

- 1. \_\_\_\_\_
- 2. \_\_\_\_\_
- 3. \_\_\_\_\_
- 4. \_\_\_\_\_
- 5. \_\_\_\_\_
- 6. \_\_\_\_\_
- 7. \_\_\_\_\_
- 8. \_\_\_\_\_
- 9. \_\_\_\_\_
- 10. \_\_\_\_\_
- 11. \_\_\_\_\_
- 12. \_\_\_\_\_



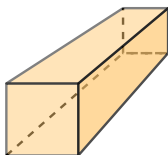
Determine which choice BEST describes the shape shown.

1)



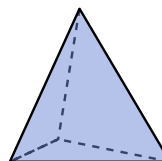
- A. cube
- B. cylinder
- C. triangular prism
- D. rectangular prism

2)



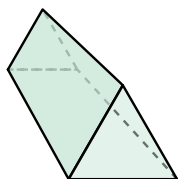
- A. cone
- B. cube
- C. rectangular prism
- D. triangular prism

3)



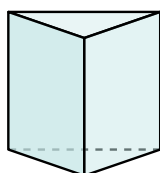
- A. cone
- B. rectangular pyramid
- C. cylinder
- D. triangular pyramid

4)



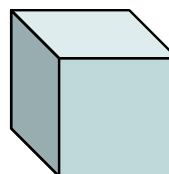
- A. rectangular pyramid
- B. rectangular prism
- C. triangular prism
- D. cube

5)



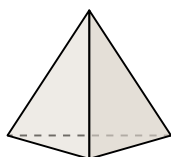
- A. rectangular prism
- B. cube
- C. cone
- D. triangular prism

6)




- A. rectangular pyramid
- B. cone
- C. cylinder
- D. cube

7)



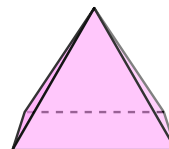
- A. triangular pyramid
- B. cone
- C. rectangular prism
- D. cylinder

8)



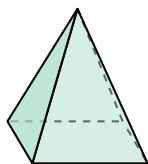
- A. sphere
- B. cylinder
- C. rectangular pyramid
- D. cube

9)




- A. triangular prism
- B. cylinder
- C. rectangular pyramid
- D. cube

10)




- A. rectangular pyramid
- B. rectangular prism
- C. triangular prism
- D. sphere

11)



- A. triangular pyramid
- B. sphere
- C. cylinder
- D. cube

12)



- A. rectangular pyramid
- B. triangular prism
- C. cube
- D. cylinder

**Answers**

- 1.     **D**
- 2.     **C**
- 3.     **D**
- 4.     **C**
- 5.     **D**
- 6.     **D**
- 7.     **A**
- 8.     **A**
- 9.     **C**
- 10.     **A**
- 11.     **C**
- 12.     **D**