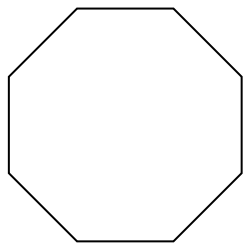





Determine if the shape shown is a regular shape or an irregular shape.

Answers

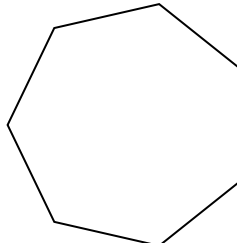
1)



2)



3)




1. _____

2. _____

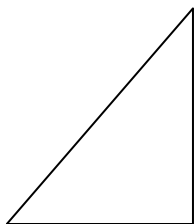
3. _____

4. _____

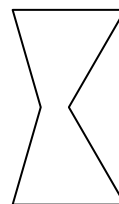
4)



5)



6)



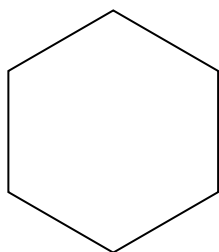
5. _____

6. _____

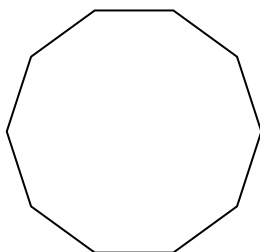
7. _____

8. _____


7)



8)



9)

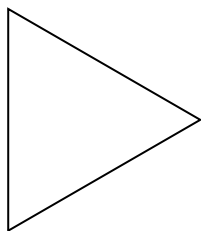


9. _____


10. _____

11. _____


10)



11)



12)




12. _____

13. _____

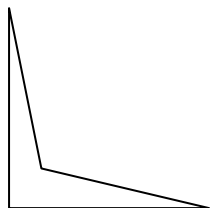
14. _____

15. _____

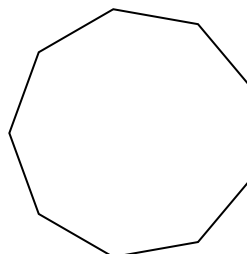
13)



14)



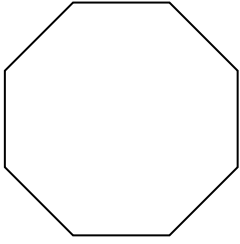
15)






Determine if the shape shown is a regular shape or an irregular shape.

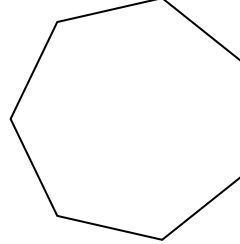
1)



2)



3)



Answers


1. Regular

2. Irregular


3. Regular

4. Irregular

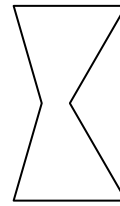
4)



5)



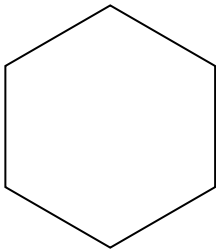
6)



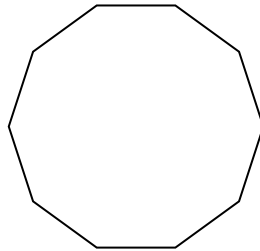
5. Irregular

6. Irregular


7)



8)



9)



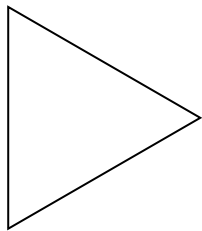
7. Regular

8. Regular


9. Irregular

10. Regular

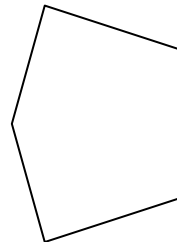
10)



11)



12)




11. Regular

12. Irregular

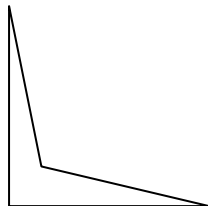
13. Irregular

14. Irregular

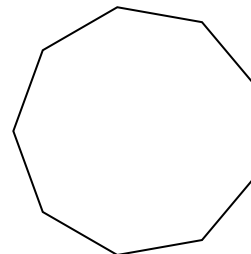
13)



14)



15)



15. Regular