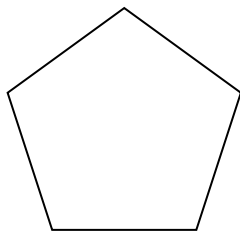




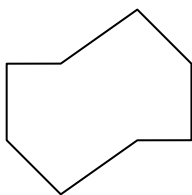
Determine if the shape shown is a regular shape or an irregular shape.

Answers


1)



2)

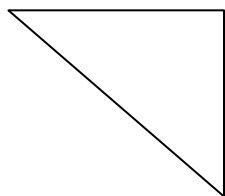


3)

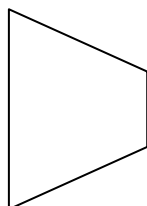


1. \_\_\_\_\_

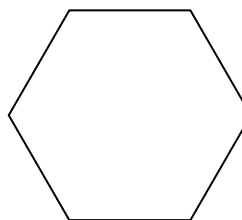
4)



5)




6)




2. \_\_\_\_\_

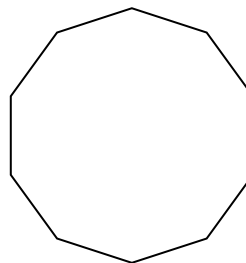
7)



8)



9)



3. \_\_\_\_\_

4. \_\_\_\_\_

5. \_\_\_\_\_

6. \_\_\_\_\_

7. \_\_\_\_\_

8. \_\_\_\_\_

9. \_\_\_\_\_

10. \_\_\_\_\_

11. \_\_\_\_\_

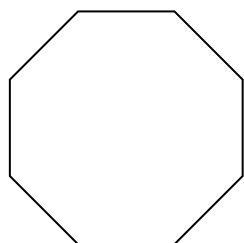
12. \_\_\_\_\_

13. \_\_\_\_\_


14. \_\_\_\_\_

15. \_\_\_\_\_

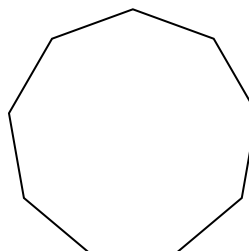
10)



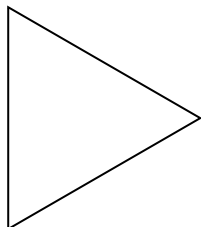
11)




12)



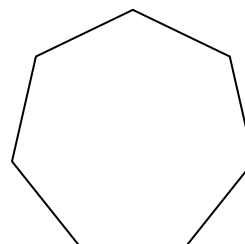
13)



14)



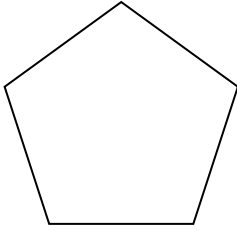
15)



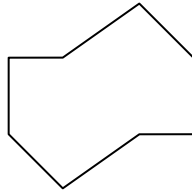


Determine if the shape shown is a regular shape or an irregular shape.


1)



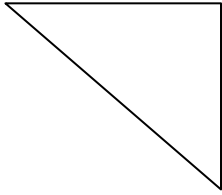
2)



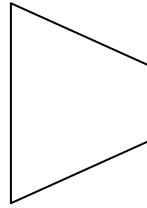
3)



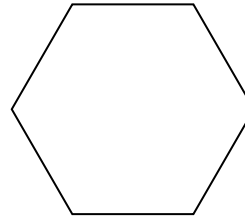
4)




5)




6)



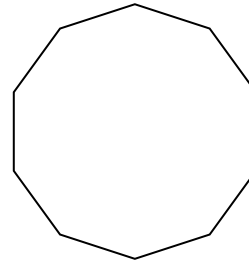
7)



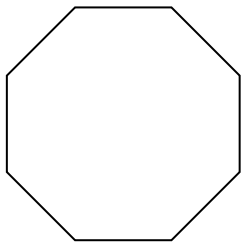
8)




9)



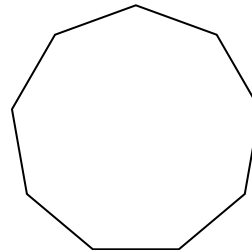
10)



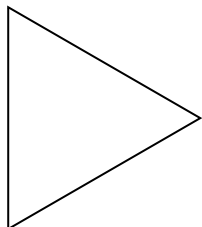
11)




12)



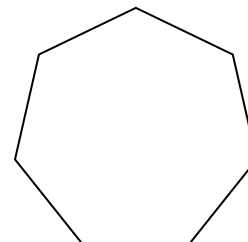
13)



14)



15)



Answers

1. Regular

2. Irregular

3. Regular

4. Irregular

5. Irregular

6. Regular

7. Irregular

8. Irregular

9. Regular

10. Regular

11. Irregular

12. Regular

13. Regular

14. Irregular

15. Regular