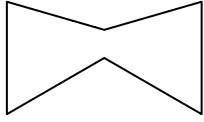




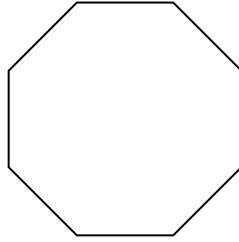
Determine if the shape shown is a regular shape or an irregular shape.

Answers


1)



2)



3)




1. _____

2. _____

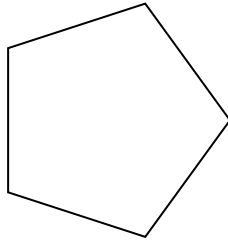
3. _____

4. _____

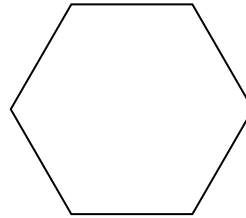
4)



5)



6)



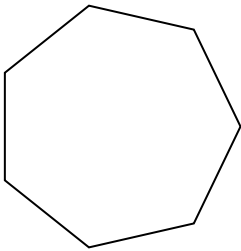
5. _____

6. _____


7. _____

8. _____

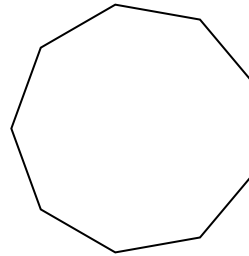
7)



8)



9)



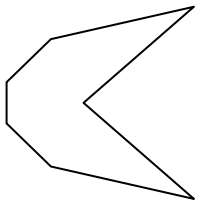
9. _____

10. _____


11. _____

12. _____


10)



11)



12)

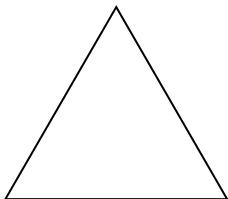


13. _____

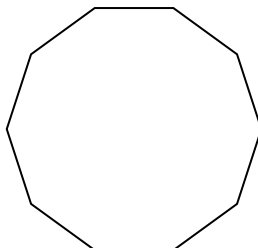
14. _____

15. _____


13)



14)



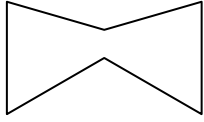
15)



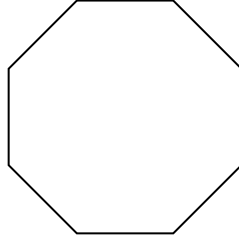


Determine if the shape shown is a regular shape or an irregular shape.


1)



2)



3)



Answers


1. Irregular

2. Regular

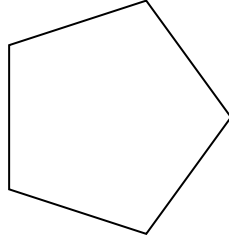
3. Irregular

4. Irregular

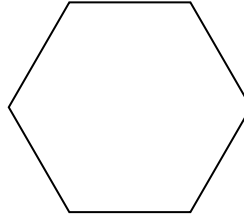
4)



5)



6)

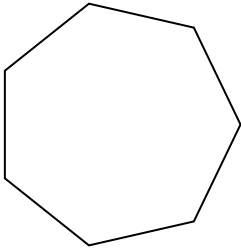


5. Regular


6. Regular

7. Regular

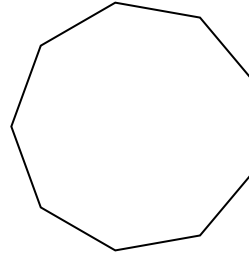
7)



8)



9)



8. Irregular

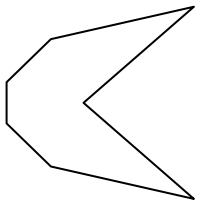
9. Regular

10. Irregular


11. Irregular

12. Irregular


10)



11)



12)

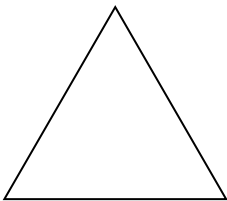


13. Regular

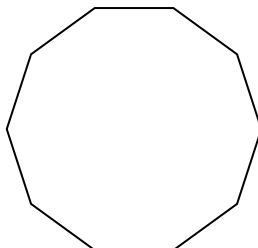
14. Regular

15. Regular

13)



14)



15)

