


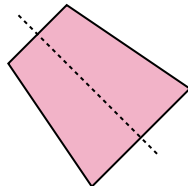


Determine if the line through the figure is a line of symmetry.

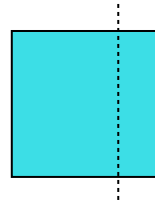
Ex)



1)



2)



Answers

Ex. no

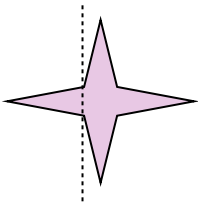
1. _____

2. _____

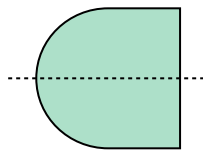
3. _____

4. _____

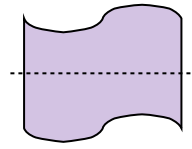
3)



4)



5)




5. _____

6. _____

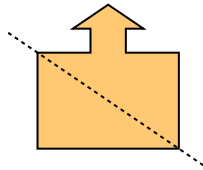
7. _____

8. _____

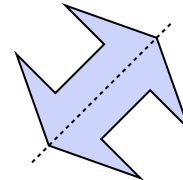
6)



7)



8)

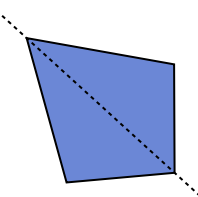


9. _____

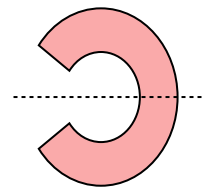
10. _____

11. _____

9)



10)



11)

