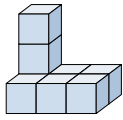








Solve each problem.

Answers

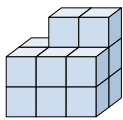
1) If you were looking at the 3d shape from the right side what would you see?







- A.  B.  C.  D. 

1. _____

2) If you were looking at the 3d shape from the back what would you see?



- A.  B.  C.  D. 

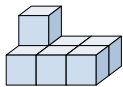
2. _____





3. _____

4. _____

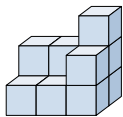
5. _____

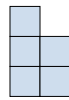

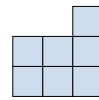
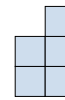
3) If you were looking at the 3d shape from the right side what would you see?



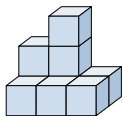
- A.  B.  C.  D. 




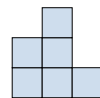
4) If you were looking at the 3d shape from above what would you see?



- A.  B.  C.  D. 

5) If you were looking at the 3d shape from the back what would you see?

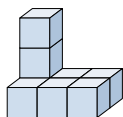


- A.  B.  C.  D. 



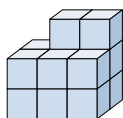
Solve each problem.

1) If you were looking at the 3d shape from the right side what would you see?



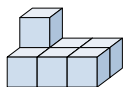
- A.
- B.
- C.
- D.

2) If you were looking at the 3d shape from the back what would you see?



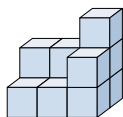
- A.
- B.
- C.
- D.

3) If you were looking at the 3d shape from the right side what would you see?



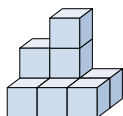
- A.
- B.
- C.
- D.

4) If you were looking at the 3d shape from above what would you see?



- A.
- B.
- C.
- D.

5) If you were looking at the 3d shape from the back what would you see?



- A.
- B.
- C.
- D.

Answers

1. **C**

2. **C**

3. **A**

4. **B**

5. **B**