



Use the visual model to solve each problem.

Answers

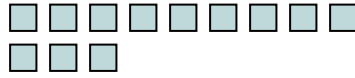
1) There are 11 rectangles below.



If you were to take away 2, how many would be left?

$11 - 2 = ?$

2) There are 12 squares below.



If you were to take away 8, how many would be left?

$12 - 8 = ?$

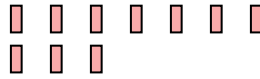
3) There are 11 stars below.



If you were to take away 10, how many would be left?

$11 - 10 = ?$

4) There are 10 rectangles below.



If you were to take away 3, how many would be left?

$10 - 3 = ?$

5) There are 15 stars below.



If you were to take away 2, how many would be left?

$15 - 2 = ?$

6) There are 12 triangles below.



If you were to take away 7, how many would be left?

$12 - 7 = ?$

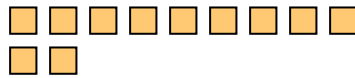
7) There are 3 squares below.



If you were to take away 2, how many would be left?

$3 - 2 = ?$

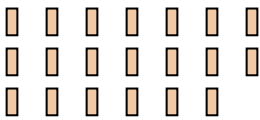
8) There are 11 squares below.



If you were to take away 1, how many would be left?

$11 - 1 = ?$

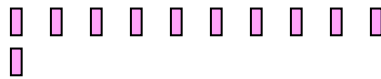
9) There are 20 rectangles below.



If you were to take away 9, how many would be left?

$20 - 9 = ?$

10) There are 11 rectangles below.



If you were to take away 9, how many would be left?

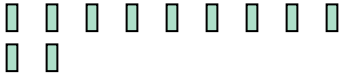
$11 - 9 = ?$

- 1. _____
- 2. _____
- 3. _____
- 4. _____
- 5. _____
- 6. _____
- 7. _____
- 8. _____
- 9. _____
- 10. _____



Use the visual model to solve each problem.

1) There are 11 rectangles below.



If you were to take away 2, how many would be left?

$11 - 2 = ?$

2) There are 12 squares below.



If you were to take away 8, how many would be left?

$12 - 8 = ?$

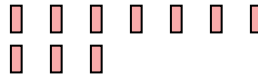
3) There are 11 stars below.



If you were to take away 10, how many would be left?

$11 - 10 = ?$

4) There are 10 rectangles below.



If you were to take away 3, how many would be left?

$10 - 3 = ?$

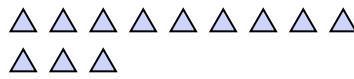
5) There are 15 stars below.



If you were to take away 2, how many would be left?

$15 - 2 = ?$

6) There are 12 triangles below.



If you were to take away 7, how many would be left?

$12 - 7 = ?$

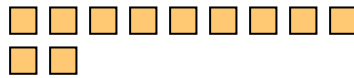
7) There are 3 squares below.



If you were to take away 2, how many would be left?

$3 - 2 = ?$

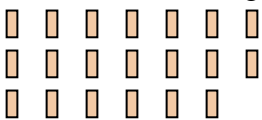
8) There are 11 squares below.



If you were to take away 1, how many would be left?

$11 - 1 = ?$

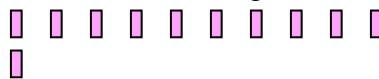
9) There are 20 rectangles below.



If you were to take away 9, how many would be left?

$20 - 9 = ?$

10) There are 11 rectangles below.



If you were to take away 9, how many would be left?

$11 - 9 = ?$

Answers

1. 9

2. 4

3. 1

4. 7

5. 13

6. 5

7. 1

8. 10

9. 11

10. 2