



Use the chart to answer each question.

Name	Boxes of Candy Sold
Sarah	
Debby	
Olivia	
Jerry	
Victor	
Frank	
Oliver	




Answers

- _____
- _____
- _____
- _____
- _____
- _____
- _____
- _____
- _____
- _____

- Who sold the fewest boxes?
- Who sold the greatest number of boxes?
- How many boxes of candy did Oliver sell?
- How many people sold more than 27 boxes?
- How many people sold less than 22 boxes?
- Who sold more? Frank or Oliver?
- Who sold less? Jerry or Olivia?
- How much more did Victor sell than Oliver sold?
- Who sold exactly 40 boxes?
- How much less did Olivia sell than Sarah sold?



Use the chart to answer each question.

Name	Boxes of Candy Sold	
Sarah		32
Debby		22
Olivia		17
Jerry		49
Victor		40
Frank		48
Oliver		27

Answers

- 1. Olivia
- 2. Jerry
- 3. 27
- 4. 4
- 5. 1
- 6. Frank
- 7. Olivia
- 8. 13
- 9. Victor
- 10. 15

- 1) Who sold the fewest boxes?
- 2) Who sold the greatest number of boxes?
- 3) How many boxes of candy did Oliver sell?
- 4) How many people sold more than 27 boxes?
- 5) How many people sold less than 22 boxes?
- 6) Who sold more? Frank or Oliver?
- 7) Who sold less? Jerry or Olivia?
- 8) How much more did Victor sell than Oliver sold?
- 9) Who sold exactly 40 boxes?
- 10) How much less did Olivia sell than Sarah sold?