

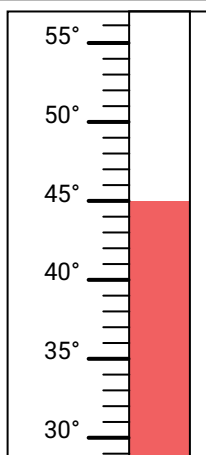


Determine which letter best answers each question.

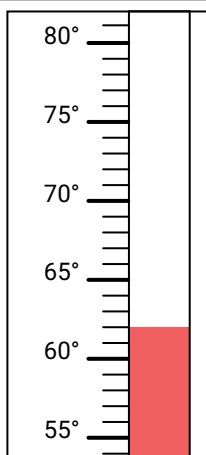
Answers

- 1) Which thermometer best represents the temperature 24°?
- 2) Which thermometer best represents the temperature 45°?
- 3) Which thermometer best represents the temperature 103°?
- 4) Which thermometer best represents the temperature 78°?
- 5) Which thermometer best represents the temperature 93°?
- 6) Which thermometer best represents the temperature 20°?
- 7) Which thermometer best represents the temperature 17°?
- 8) Which thermometer best represents the temperature 30°?
- 9) Which thermometer best represents the temperature 95°?
- 10) Which thermometer best represents the temperature 62°?

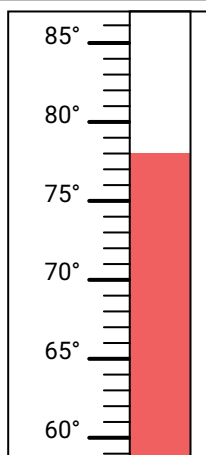
A.



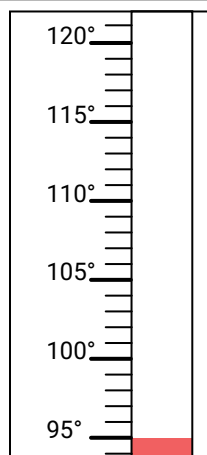
B.



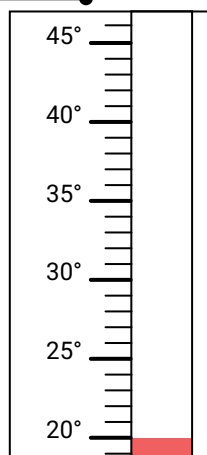
C.



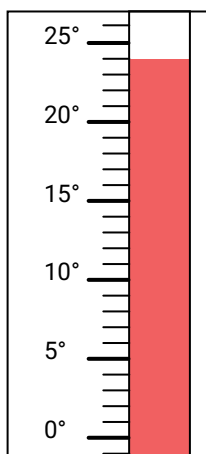
D.



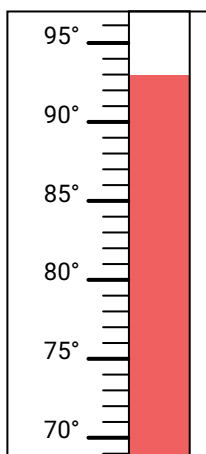
E.



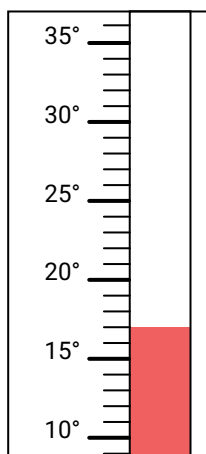
F.



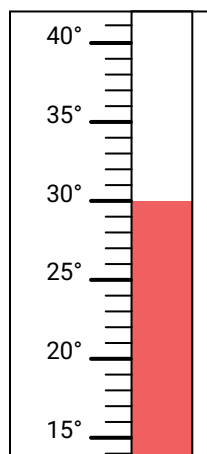
G.



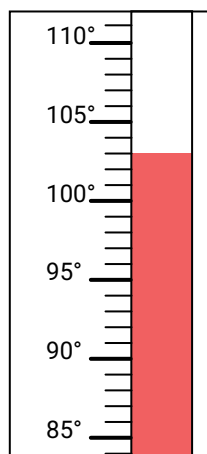
H.



I.



J.



1. _____

2. _____

3. _____

4. _____

5. _____

6. _____

7. _____

8. _____

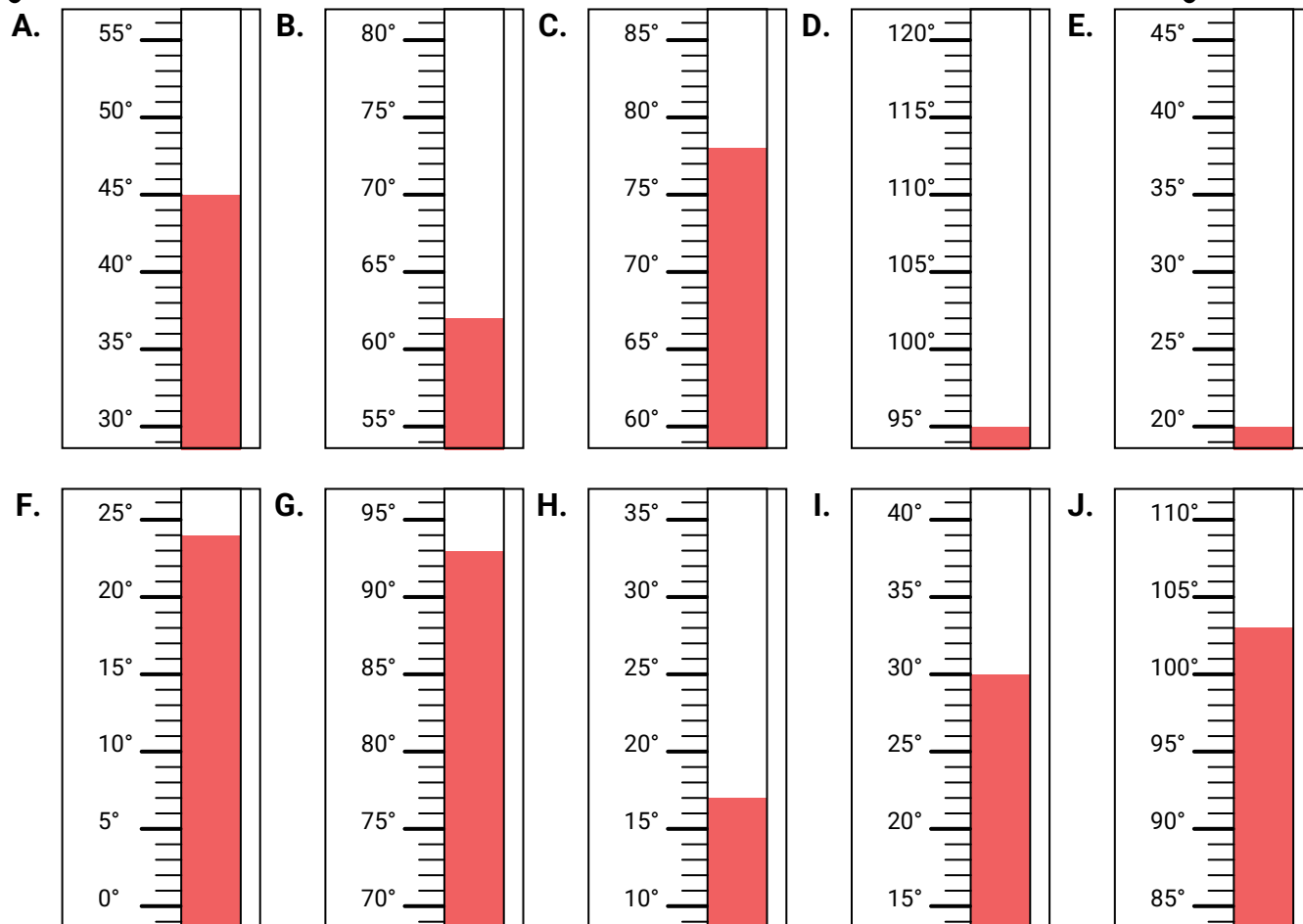
9. _____

10. _____



Determine which letter best answers each question.

- 1) Which thermometer best represents the temperature 24°?
- 2) Which thermometer best represents the temperature 45°?
- 3) Which thermometer best represents the temperature 103°?
- 4) Which thermometer best represents the temperature 78°?
- 5) Which thermometer best represents the temperature 93°?
- 6) Which thermometer best represents the temperature 20°?
- 7) Which thermometer best represents the temperature 17°?
- 8) Which thermometer best represents the temperature 30°?
- 9) Which thermometer best represents the temperature 95°?
- 10) Which thermometer best represents the temperature 62°?

**Answers**

1. **F**
2. **A**
3. **J**
4. **C**
5. **G**
6. **E**
7. **H**
8. **I**
9. **D**
10. **B**