

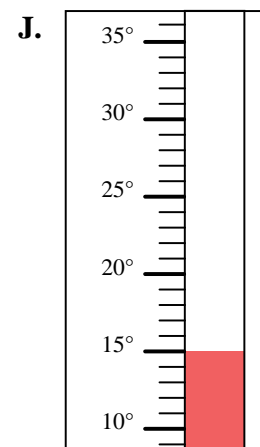
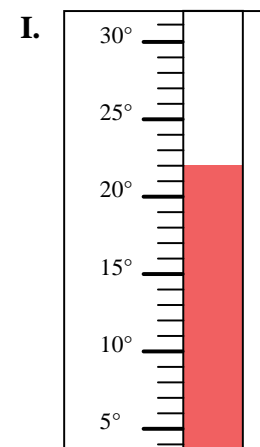
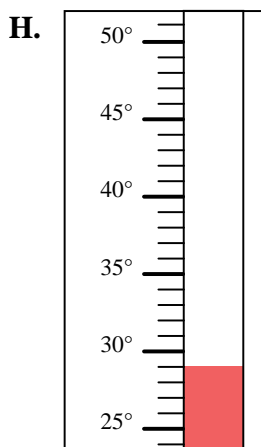
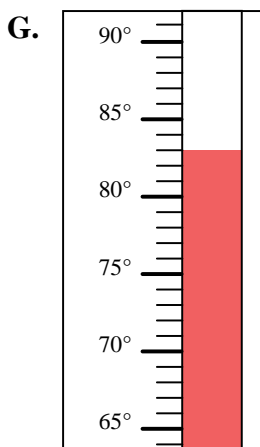
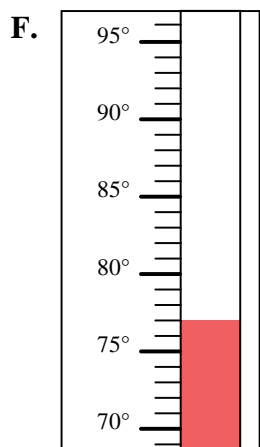
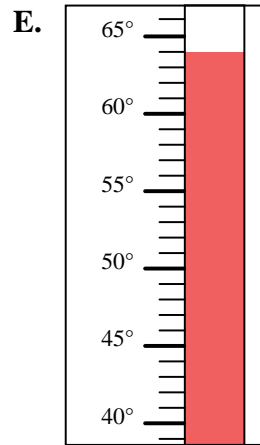
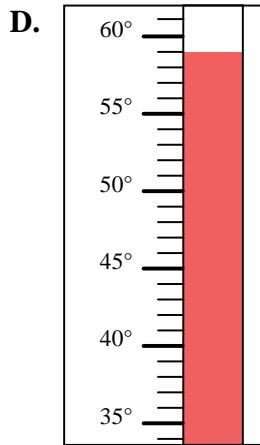
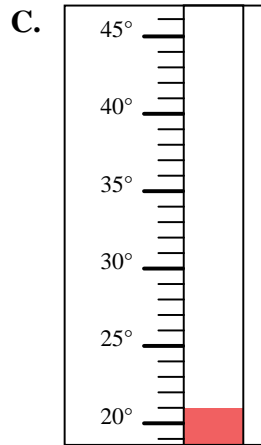
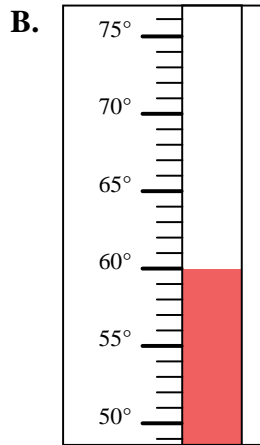
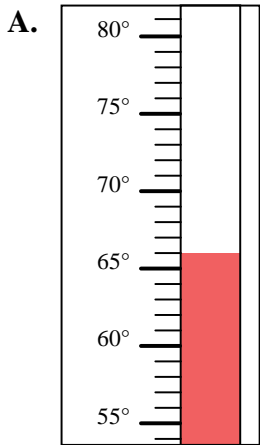


Determine which letter best answers each question.

Answers

- 1) Which thermometer best represents the temperature 22° ?
- 2) Which thermometer best represents the temperature 66° ?
- 3) Which thermometer best represents the temperature 15° ?
- 4) Which thermometer best represents the temperature 83° ?
- 5) Which thermometer best represents the temperature 21° ?
- 6) Which thermometer best represents the temperature 59° ?
- 7) Which thermometer best represents the temperature 60° ?
- 8) Which thermometer best represents the temperature 77° ?
- 9) Which thermometer best represents the temperature 64° ?
- 10) Which thermometer best represents the temperature 29° ?

1. _____
2. _____
3. _____
4. _____
5. _____
6. _____
7. _____
8. _____
9. _____
10. _____





Determine which letter best answers each question.

- 1) Which thermometer best represents the temperature 22° ?
- 2) Which thermometer best represents the temperature 66° ?
- 3) Which thermometer best represents the temperature 15° ?
- 4) Which thermometer best represents the temperature 83° ?
- 5) Which thermometer best represents the temperature 21° ?
- 6) Which thermometer best represents the temperature 59° ?
- 7) Which thermometer best represents the temperature 60° ?
- 8) Which thermometer best represents the temperature 77° ?
- 9) Which thermometer best represents the temperature 64° ?
- 10) Which thermometer best represents the temperature 29° ?

Answers

1. **I**
2. **A**
3. **J**
4. **G**
5. **C**
6. **D**
7. **B**
8. **F**
9. **E**
10. **H**

