

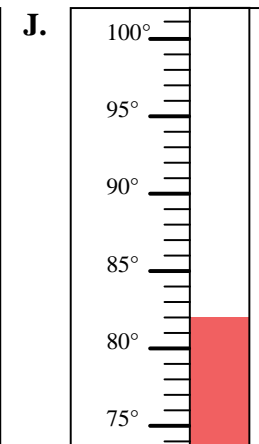
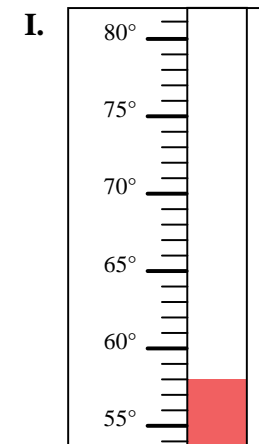
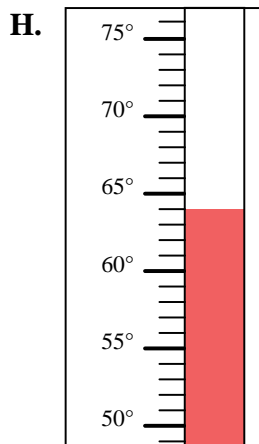
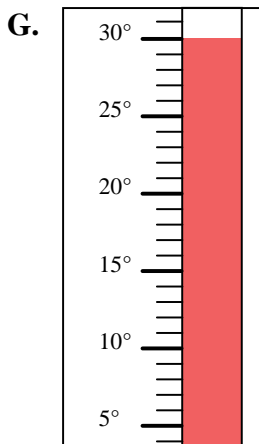
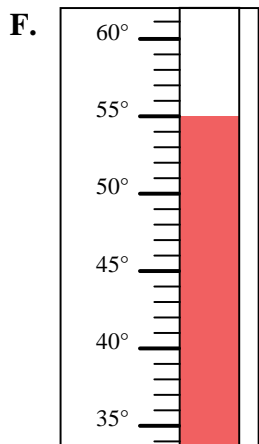
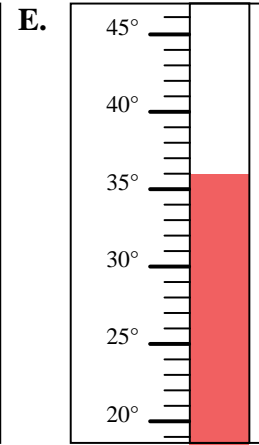
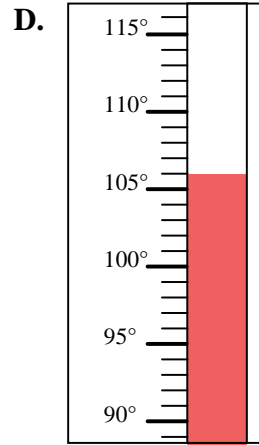
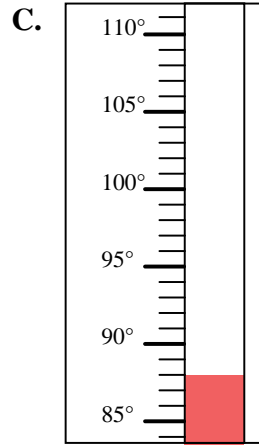
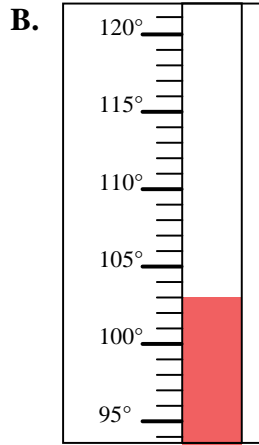
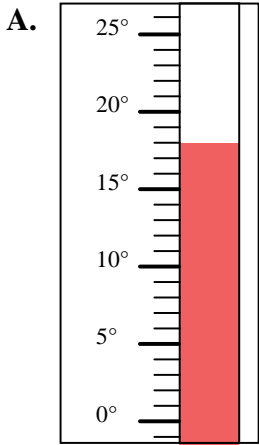


Determine which letter best answers each question.

**Answers**

- 1) Which thermometer best represents the temperature 82°?
- 2) Which thermometer best represents the temperature 64°?
- 3) Which thermometer best represents the temperature 58°?
- 4) Which thermometer best represents the temperature 106°?
- 5) Which thermometer best represents the temperature 88°?
- 6) Which thermometer best represents the temperature 36°?
- 7) Which thermometer best represents the temperature 18°?
- 8) Which thermometer best represents the temperature 30°?
- 9) Which thermometer best represents the temperature 55°?
- 10) Which thermometer best represents the temperature 103°?

1. \_\_\_\_\_
2. \_\_\_\_\_
3. \_\_\_\_\_
4. \_\_\_\_\_
5. \_\_\_\_\_
6. \_\_\_\_\_
7. \_\_\_\_\_
8. \_\_\_\_\_
9. \_\_\_\_\_
10. \_\_\_\_\_





Determine which letter best answers each question.

- 1) Which thermometer best represents the temperature 82°?
- 2) Which thermometer best represents the temperature 64°?
- 3) Which thermometer best represents the temperature 58°?
- 4) Which thermometer best represents the temperature 106°?
- 5) Which thermometer best represents the temperature 88°?
- 6) Which thermometer best represents the temperature 36°?
- 7) Which thermometer best represents the temperature 18°?
- 8) Which thermometer best represents the temperature 30°?
- 9) Which thermometer best represents the temperature 55°?
- 10) Which thermometer best represents the temperature 103°?

**Answers**

1. **J**
2. **H**
3. **I**
4. **D**
5. **C**
6. **E**
7. **A**
8. **G**
9. **F**
10. **B**

