

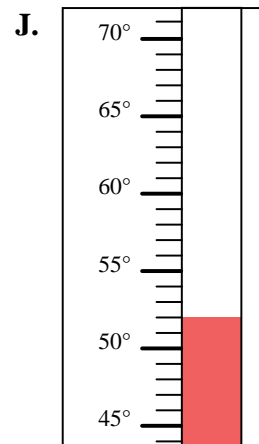
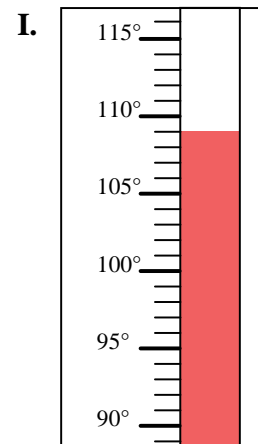
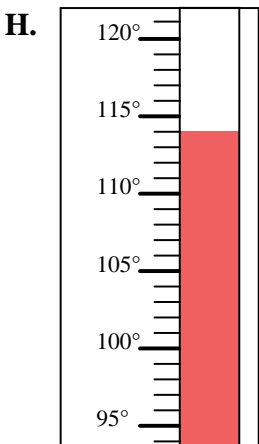
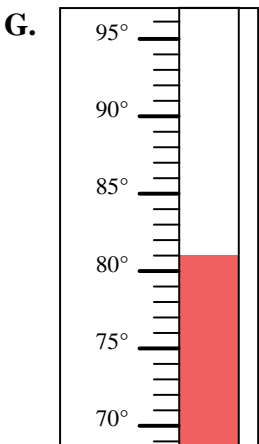
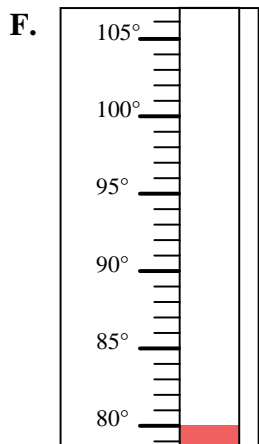
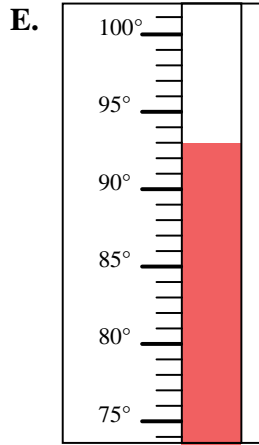
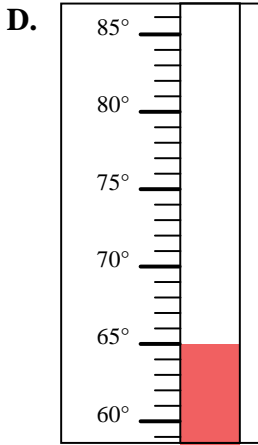
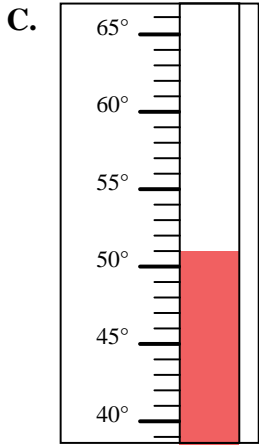
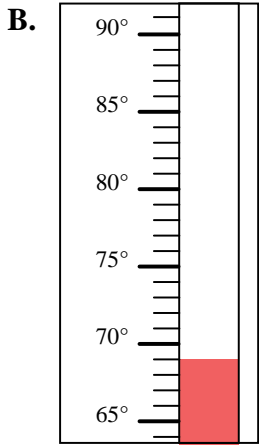
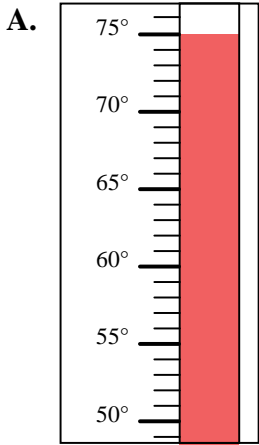


Determine which letter best answers each question.

Answers

- 1) Which thermometer best represents the temperature 80°?
- 2) Which thermometer best represents the temperature 109°?
- 3) Which thermometer best represents the temperature 93°?
- 4) Which thermometer best represents the temperature 69°?
- 5) Which thermometer best represents the temperature 81°?
- 6) Which thermometer best represents the temperature 65°?
- 7) Which thermometer best represents the temperature 75°?
- 8) Which thermometer best represents the temperature 51°?
- 9) Which thermometer best represents the temperature 52°?
- 10) Which thermometer best represents the temperature 114°?

1. _____
2. _____
3. _____
4. _____
5. _____
6. _____
7. _____
8. _____
9. _____
10. _____





Determine which letter best answers each question.

Answers

- 1) Which thermometer best represents the temperature 80°?
- 2) Which thermometer best represents the temperature 109°?
- 3) Which thermometer best represents the temperature 93°?
- 4) Which thermometer best represents the temperature 69°?
- 5) Which thermometer best represents the temperature 81°?
- 6) Which thermometer best represents the temperature 65°?
- 7) Which thermometer best represents the temperature 75°?
- 8) Which thermometer best represents the temperature 51°?
- 9) Which thermometer best represents the temperature 52°?
- 10) Which thermometer best represents the temperature 114°?

1. **F**
2. **I**
3. **E**
4. **B**
5. **G**
6. **D**
7. **A**
8. **C**
9. **J**
10. **H**

