



Draw the hour and minute hand on the clock so it represents the time shown.

1) 3:31



2) 5:45



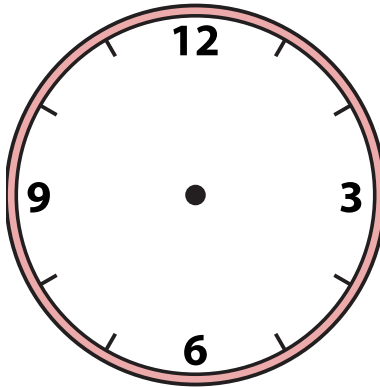
3) 3:29



4) 5:48



5) 12:41



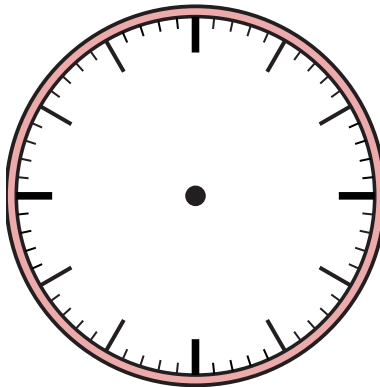
6) 4:38



7) 5:22



8) 12:50




9) 6:55



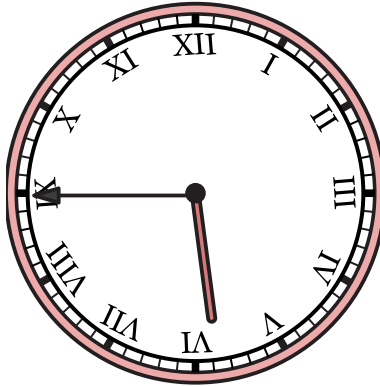


Draw the hour and minute hand on the clock so it represents the time shown.


1) 3:31



2) 5:45




3) 3:29



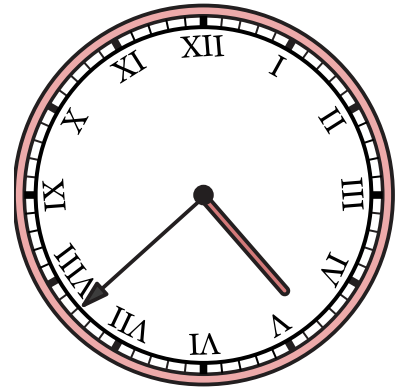
4) 5:48



5) 12:41



6) 4:38



7) 5:22



8) 12:50



9) 6:55

