



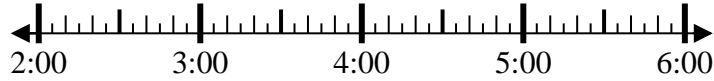
Solve each problem.

Answers

1) Start: 2:15

Elapsed: \_\_\_\_\_

End: 3:55



1. \_\_\_\_\_

2) Start: 2:10

Elapsed: \_\_\_\_\_

End: 4:55

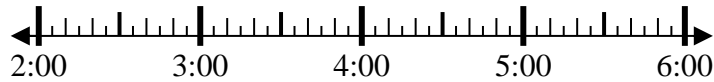


2. \_\_\_\_\_

3) Start: 2:45

Elapsed: \_\_\_\_\_

End: 4:55



3. \_\_\_\_\_

4) Start: 2:20

Elapsed: \_\_\_\_\_

End: 3:40



4. \_\_\_\_\_

5) Start: 11:05

Elapsed: \_\_\_\_\_

End: 1:30



5. \_\_\_\_\_

6) Start: 11:05

Elapsed: \_\_\_\_\_

End: 1:25

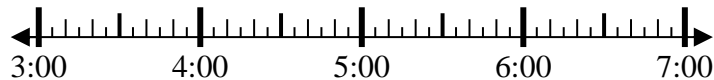


6. \_\_\_\_\_

7) Start: 3:45

Elapsed: \_\_\_\_\_

End: 6:05

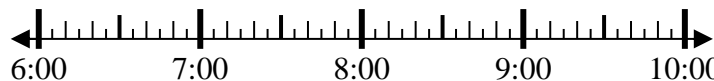


7. \_\_\_\_\_

8) Start: 6:20

Elapsed: \_\_\_\_\_

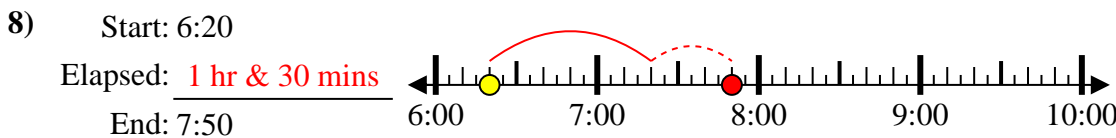
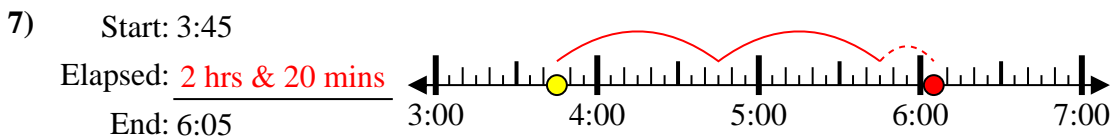
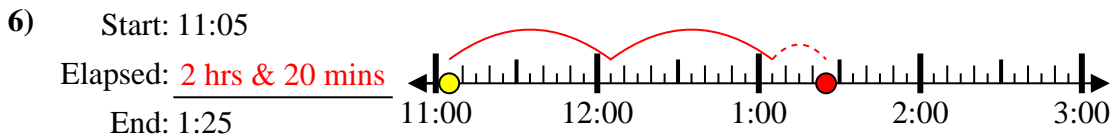
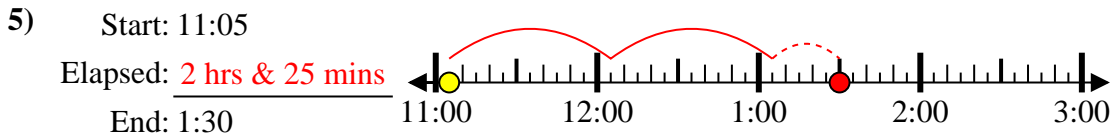
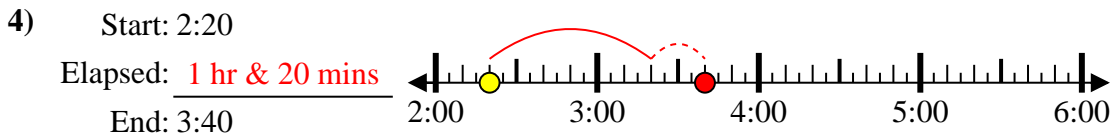
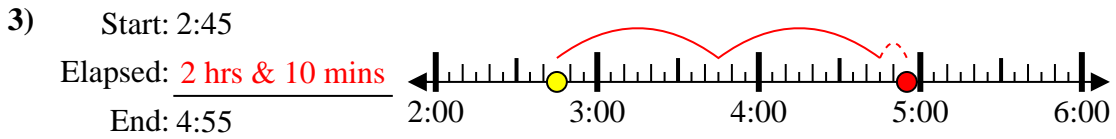
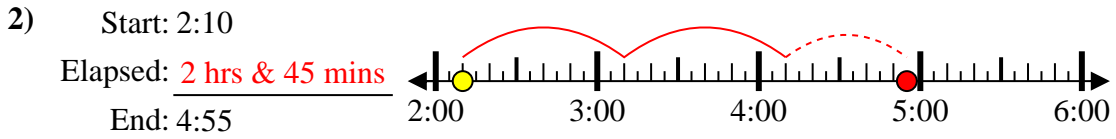
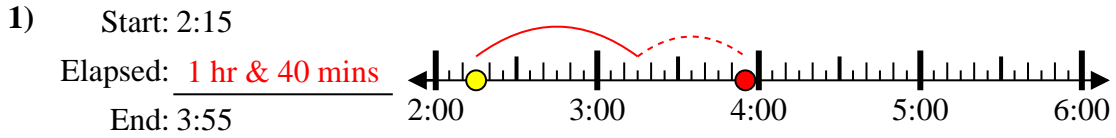
End: 7:50



8. \_\_\_\_\_



Solve each problem.



Answers

1. 1 hr & 40 mins
2. 2 hrs & 45 mins
3. 2 hrs & 10 mins
4. 1 hr & 20 mins
5. 2 hrs & 25 mins
6. 2 hrs & 20 mins
7. 2 hrs & 20 mins
8. 1 hr & 30 mins