



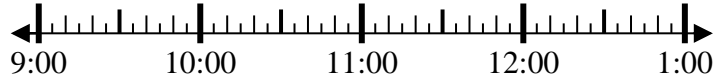
Solve each problem.

Answers

1) Start: 9:35

Elapsed: \_\_\_\_\_

End: 12:05

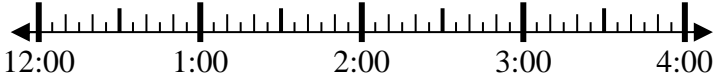


1. \_\_\_\_\_

2) Start: 12:50

Elapsed: \_\_\_\_\_

End: 2:35

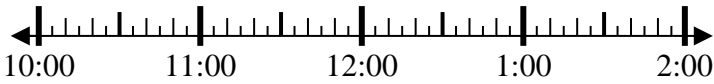


2. \_\_\_\_\_

3) Start: 10:15

Elapsed: \_\_\_\_\_

End: 11:40

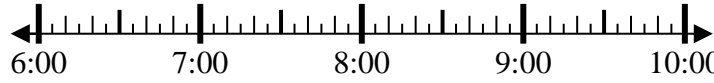


3. \_\_\_\_\_

4) Start: 6:25

Elapsed: \_\_\_\_\_

End: 8:10

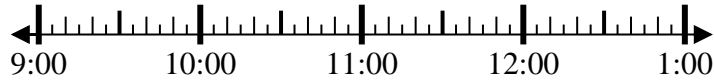


4. \_\_\_\_\_

5) Start: 9:10

Elapsed: \_\_\_\_\_

End: 10:25

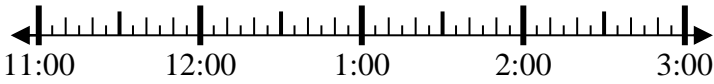


5. \_\_\_\_\_

6) Start: 11:45

Elapsed: \_\_\_\_\_

End: 2:00

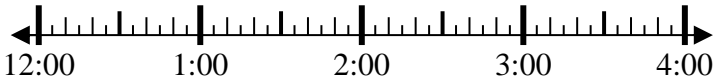


6. \_\_\_\_\_

7) Start: 12:20

Elapsed: \_\_\_\_\_

End: 2:00

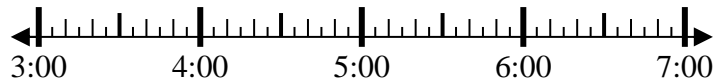


7. \_\_\_\_\_

8) Start: 3:35

Elapsed: \_\_\_\_\_

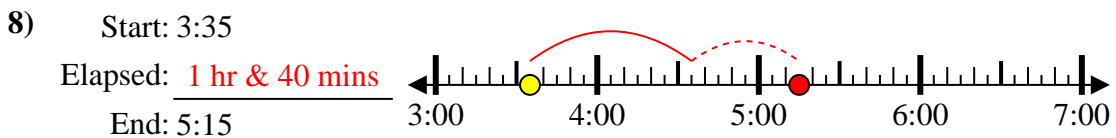
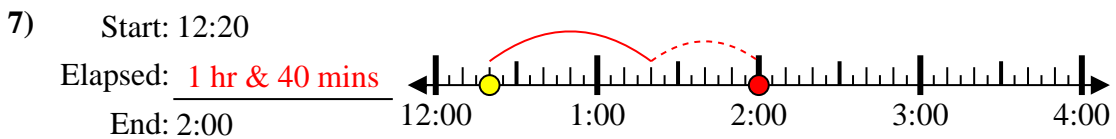
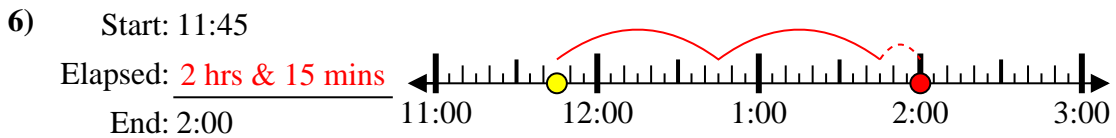
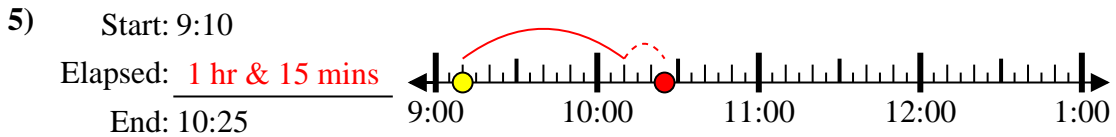
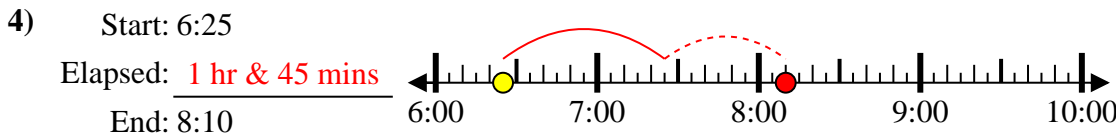
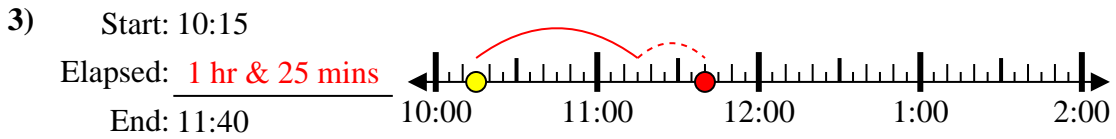
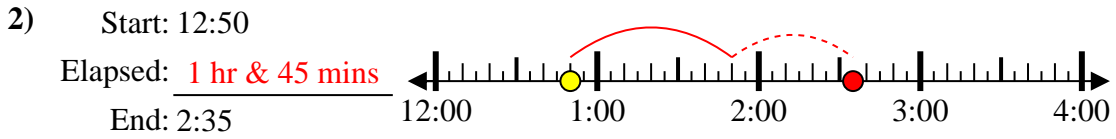
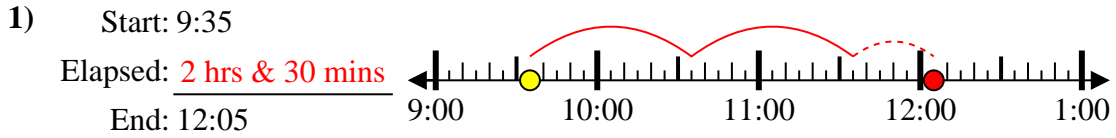
End: 5:15



8. \_\_\_\_\_



Solve each problem.



Answers

1. 2 hrs & 30 mins

2. 1 hr & 45 mins

3. 1 hr & 25 mins

4. 1 hr & 45 mins

5. 1 hr & 15 mins

6. 2 hrs & 15 mins

7. 1 hr & 40 mins

8. 1 hr & 40 mins