



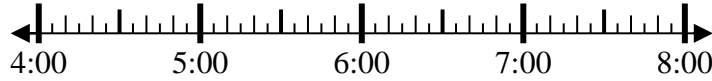
Solve each problem.

Answers

1) Start: 4:30

Elapsed: \_\_\_\_\_

End: 7:05

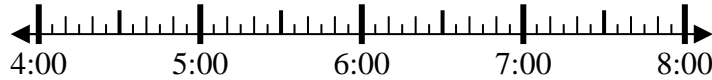


1. \_\_\_\_\_

2) Start: 4:55

Elapsed: \_\_\_\_\_

End: 6:25

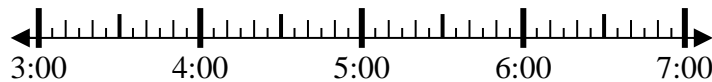


2. \_\_\_\_\_

3) Start: 3:15

Elapsed: \_\_\_\_\_

End: 5:50

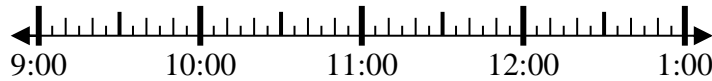


3. \_\_\_\_\_

4) Start: 9:20

Elapsed: \_\_\_\_\_

End: 11:35

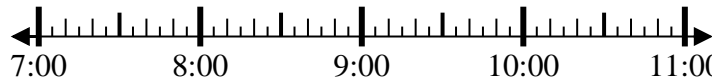


4. \_\_\_\_\_

5) Start: 7:30

Elapsed: \_\_\_\_\_

End: 9:55



5. \_\_\_\_\_

6) Start: 12:45

Elapsed: \_\_\_\_\_

End: 1:55

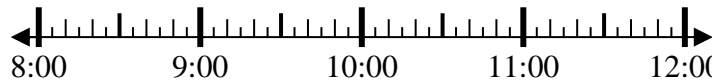


6. \_\_\_\_\_

7) Start: 8:20

Elapsed: \_\_\_\_\_

End: 9:55

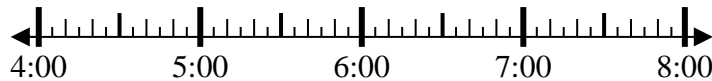


7. \_\_\_\_\_

8) Start: 4:20

Elapsed: \_\_\_\_\_

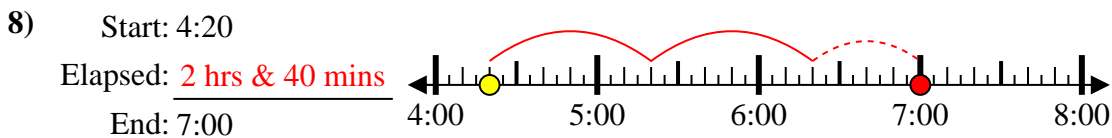
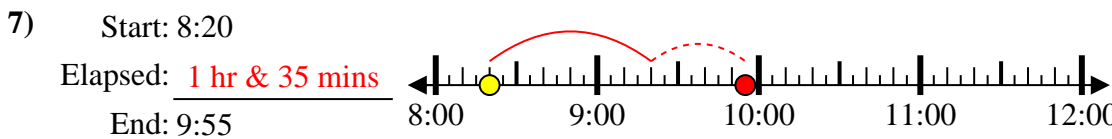
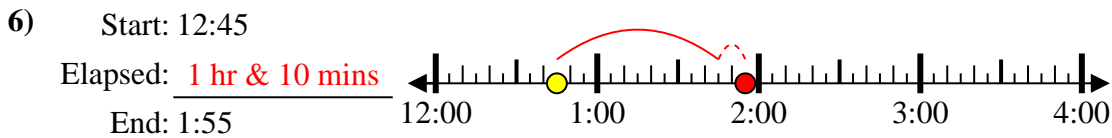
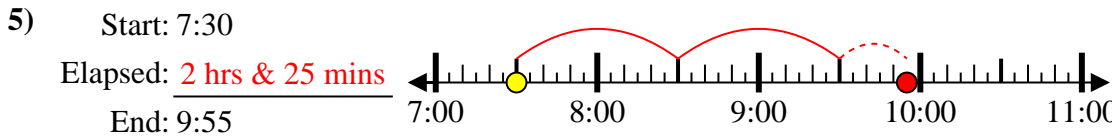
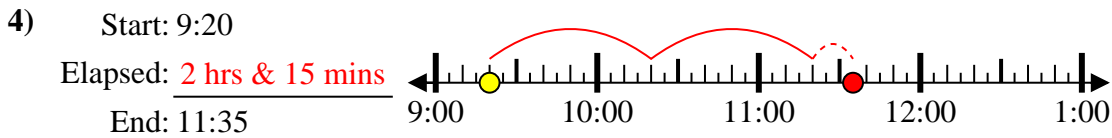
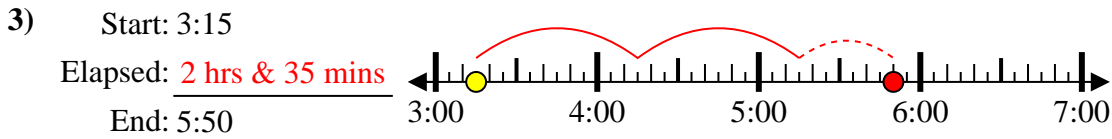
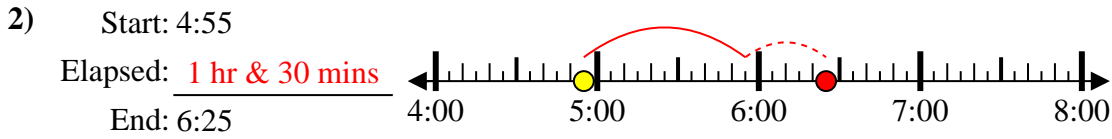
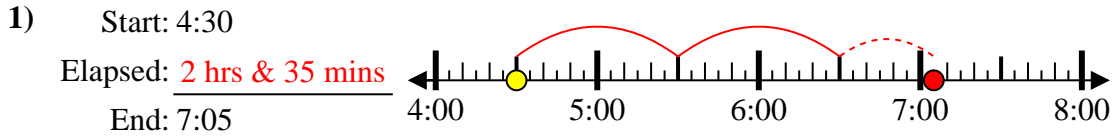
End: 7:00



8. \_\_\_\_\_



Solve each problem.



Answers

1. 2 hrs & 35 mins

2. 1 hr & 30 mins

3. 2 hrs & 35 mins

4. 2 hrs & 15 mins

5. 2 hrs & 25 mins

6. 1 hr & 10 mins

7. 1 hr & 35 mins

8. 2 hrs & 40 mins