



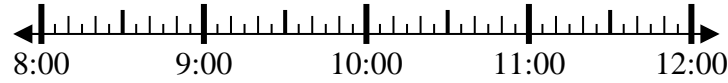
Solve each problem.

Answers

1) Start: 8:35

Elapsed: 2 hrs & 10 mins

End: _____

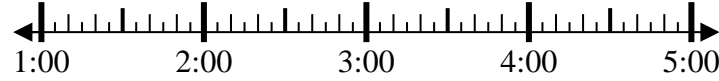


1. _____

2) Start: 1:05

Elapsed: 1 hr & 15 mins

End: _____

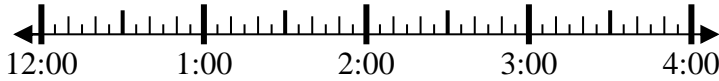


2. _____

3) Start: 12:55

Elapsed: 2 hrs & 20 mins

End: _____

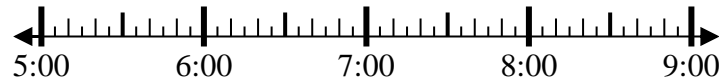


3. _____

4) Start: 5:15

Elapsed: 2 hrs & 15 mins

End: _____

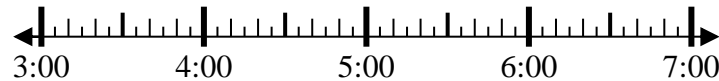


4. _____

5) Start: 3:30

Elapsed: 1 hr & 30 mins

End: _____



5. _____

6) Start: 12:55

Elapsed: 2 hrs & 40 mins

End: _____

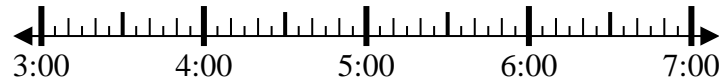


6. _____

7) Start: 3:10

Elapsed: 1 hr & 45 mins

End: _____

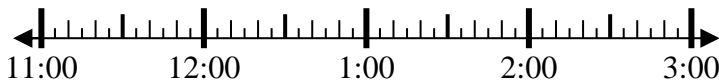


7. _____

8) Start: 11:35

Elapsed: 1 hr & 35 mins

End: _____



8. _____



Solve each problem.

1) Start: 8:35

Elapsed: 2 hrs & 10 mins

End: 10:45



2) Start: 1:05

Elapsed: 1 hr & 15 mins

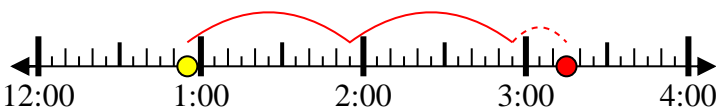
End: 2:20



3) Start: 12:55

Elapsed: 2 hrs & 20 mins

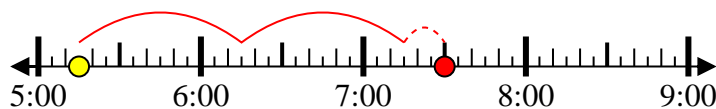
End: 3:15



4) Start: 5:15

Elapsed: 2 hrs & 15 mins

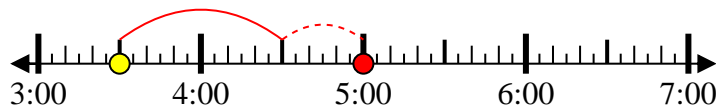
End: 7:30



5) Start: 3:30

Elapsed: 1 hr & 30 mins

End: 5:00



6) Start: 12:55

Elapsed: 2 hrs & 40 mins

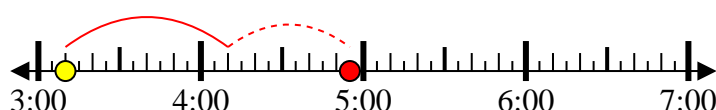
End: 3:35



7) Start: 3:10

Elapsed: 1 hr & 45 mins

End: 4:55



8) Start: 11:35

Elapsed: 1 hr & 35 mins

End: 1:10



Answers

1. 10:45

2. 2:20

3. 3:15

4. 7:30

5. 5:00

6. 3:35

7. 4:55

8. 1:10